

SSC MTS 2023 Tier 1 Sept 5 Shift 1 Question Paper with Answers

Roll Number	
Candidate Name	
Exam Date	05/09/2023
Exam Time	9:00 AM - 11:00 AM
Subject	MTS Non Tech Havaladar CBIC and CBN Examination 2023

Section : Numerical and Mathematical Ability

Q.1 Apples are bought at 25 for ₹250 and sold at 30 for ₹390. What is the profit/loss percentage in this transaction?

- Ans**
- 1. 25% Profit
 - 2. 30% Profit
 - 3. 25% Loss
 - 4. 30% Loss

Question ID : 264330155707

Option 1 ID : 264330610231

Option 2 ID : 264330610233

Option 3 ID : 264330610232

Option 4 ID : 264330610234

Status : Answered

Chosen Option : 1

Q.2 The average height of a class of 50 students is 170 cm. What will be the average height (in cm, rounded off to the nearest integer) of the rest of the students if the average height of 15 of the students is 180 cm?

- Ans**
- 1. 162
 - 2. 166
 - 3. 175
 - 4. 174

Question ID : 264330153761

Option 1 ID : 264330602510

Option 2 ID : 264330602508

Option 3 ID : 264330602507

Option 4 ID : 264330602509

Status : Answered

Chosen Option : 2

Q.3 A sum of ₹5,345, when invested at a certain rate of simple interest per annum for 10 years, earns an interest of ₹2,672.50 on maturity. What is the rate of simple interest per annum?

- Ans**
- 1. 4.5%
 - 2. 8%
 - 3. 5%
 - 4. 6.5%

Question ID : **264330156486**
Option 1 ID : **264330613333**
Option 2 ID : **264330613331**
Option 3 ID : **264330613332**
Option 4 ID : **264330613334**
Status : **Answered**
Chosen Option : **3**

Q.4 Find the number of solid lead balls each 2 cm in diameter that can be made from solid sphere made up of lead of diameter 14 cm.

- Ans**
- 1. 433
 - 2. 343
 - 3. 430
 - 4. 340

Question ID : **264330156017**
Option 1 ID : **264330611469**
Option 2 ID : **264330611468**
Option 3 ID : **264330611467**
Option 4 ID : **264330611470**
Status : **Answered**
Chosen Option : **2**

Q.5 The speed of a boat in still water is 30 km/h and the speed of the stream is 7.5 km/h. What is the time in hours taken by the boat in the stream to go from point A to B and then back to A covering a total distance of 90 km?

- Ans**
- 1. 3.2
 - 2. 2.8
 - 3. 3.4
 - 4. 3.0

Question ID : **264330153814**
Option 1 ID : **264330602721**
Option 2 ID : **264330602719**
Option 3 ID : **264330602722**
Option 4 ID : **264330602720**
Status : **Answered**
Chosen Option : **2**

Q.6 What is the average of the first 13 multiples of 3?

- Ans 1. 21
 2. 39
 3. 42
 4. 35

Question ID : 264330155725
Option 1 ID : 264330610304
Option 2 ID : 264330610303
Option 3 ID : 264330610306
Option 4 ID : 264330610305
Status : Answered
Chosen Option : 1

Q.7 ₹1,250 at 12% per annum compounded annually will amount to ₹1,568 in:

- Ans 1. 4 years
 2. 1 year
 3. 2 years
 4. 3 years

Question ID : 264330153880
Option 1 ID : 264330602986
Option 2 ID : 264330602983
Option 3 ID : 264330602984
Option 4 ID : 264330602985
Status : Not Answered
Chosen Option : --

Q.8 The speed of a car is 90 km/h. The distance covered by the car in 7 Seconds will be:

- Ans 1. 172 metres
 2. 175 metres
 3. 170 metres
 4. 180 metres

Question ID : 264330155968
Option 1 ID : 264330611274
Option 2 ID : 264330611273
Option 3 ID : 264330611272
Option 4 ID : 264330611271
Status : Answered
Chosen Option : 2

Q.9 Anil works 3 times as fast as Sumit. If Sumit can complete a work in 12 days independently, then the number of days in which Anil and Sumit can together finish the work will be:

- Ans**
- 1. 2
 - 2. 3
 - 3. 4
 - 4. 5

Question ID : 264330156236

Option 1 ID : 264330612343

Option 2 ID : 264330612344

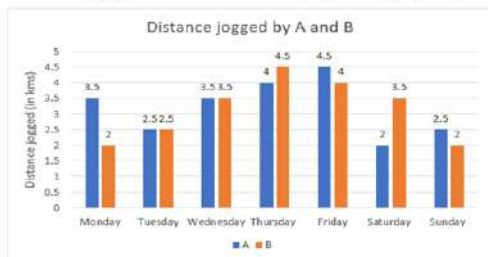
Option 3 ID : 264330612345

Option 4 ID : 264330612346

Status : Answered

Chosen Option : 2

Q.10 The following graph refers to the distance jogged daily by two persons A and B.



If 100 calories are burnt by jogging 1 km, what is the difference between the calories burnt by A and B in the given week?

- Ans**
- 1. 150 calories
 - 2. 10 calories
 - 3. 100 calories
 - 4. 50 calories

Question ID : 264330154099

Option 1 ID : 264330603861

Option 2 ID : 264330603862

Option 3 ID : 264330603860

Option 4 ID : 264330603859

Status : Answered

Chosen Option : 4

Q.11 Vaishali booked a bus ticket for ₹1,260. Because of her ill health, she had to cancel the ticket. She got a refund of ₹945 in this process. What is the percentage loss that Vaishali had to face?

- Ans**
- 1. 23%
 - 2. 15%
 - 3. 25%
 - 4. 33%

Question ID : 264330155703

Option 1 ID : 264330610216

Option 2 ID : 264330610215

Option 3 ID : 264330610217

Option 4 ID : 264330610218

Status : Answered

Chosen Option : 3

Q.12 Three numbers are in the ratio of 3 : 4 : 5 and their HCF is 18. What is the sum of these numbers?

- Ans
- 1. 198
 - 2. 216
 - 3. 234
 - 4. 180

Question ID : 264330155683
Option 1 ID : 264330610136
Option 2 ID : 264330610137
Option 3 ID : 264330610138
Option 4 ID : 264330610135
Status : Answered
Chosen Option : 2

Q.13 If two varieties of a grain worth ₹202 per kg and ₹250 per kg, respectively, are mixed in the ratio of 7 : 5, then what is the cost (in ₹) of the resulting mixture per kg?

- Ans
- 1. 225
 - 2. 218
 - 3. 222
 - 4. 220

Question ID : 264330155693
Option 1 ID : 264330610178
Option 2 ID : 264330610175
Option 3 ID : 264330610177
Option 4 ID : 264330610176
Status : Not Answered
Chosen Option : --

Q.14 Akash is thrice as good a workman as Arvind and therefore is able to finish a job in 30 days less than Arvind. If they work together, in how many days can they finish the job?

- Ans
- 1. $11\frac{1}{4}$
 - 2. $11\frac{3}{4}$
 - 3. $12\frac{3}{4}$
 - 4. $12\frac{1}{4}$

Question ID : 264330156117
Option 1 ID : 264330611867
Option 2 ID : 264330611868
Option 3 ID : 264330611870
Option 4 ID : 264330611869
Status : Not Answered
Chosen Option : --

Q.15 Find the value of x if $15\frac{2}{3} \times 3\frac{1}{6} + 6\frac{1}{3} = 11\frac{7}{18} + x$

- Ans
- 1. $137\frac{4}{9}$
 - 2. $44\frac{5}{9}$
 - 3. $29\frac{7}{9}$
 - 4. $39\frac{5}{9}$

Question ID : 264330156335

Option 1 ID : 264330612740

Option 2 ID : 264330612742

Option 3 ID : 264330612741

Option 4 ID : 264330612739

Status : Answered

Chosen Option : 2

Q.16 The following table gives the number of employees in different departments of an organisation and percentage of females and males. Study the table carefully and answer the question.

Department	Total No. of employees	% of females	% of males
IT	640	45	55
Accounts	220	40	60
Production	800	30	70
HR	360	65	35
Marketing	400	40	60

Find the ratio of the number of females in production and HR departments together to the number of males in the IT and Accounts departments together.

- Ans
- 1. 237 : 242
 - 2. 227 : 323
 - 3. 235 : 330
 - 4. 235 : 340

Question ID : 264330156013

Option 1 ID : 264330611453

Option 2 ID : 264330611452

Option 3 ID : 264330611451

Option 4 ID : 264330611454

Status : Answered

Chosen Option : 1

Q.17 What is the total surface area (in cm^2) of a cone with a base radius of 28 cm and height of 45 cm? (use $\pi = \frac{22}{7}$)

- Ans
- 1. 8168
 - 2. 6288
 - 3. 7128
 - 4. 9216

Question ID : 264330156540
 Option 1 ID : 264330613547
 Option 2 ID : 264330613550
 Option 3 ID : 264330613548
 Option 4 ID : 264330613549
 Status : Answered
 Chosen Option : 4

Q.18 Arrange the ratios in ascending order $5 : 3\frac{1}{3}$, $6\frac{1}{4} : 3\frac{1}{8}$ and $3.5 : 4.5$.

- Ans
- 1. $3.5 : 4.5 < 5 : 3\frac{1}{3} < 6\frac{1}{4} : 3\frac{1}{8}$
 - 2. $6\frac{1}{4} : 3\frac{1}{8} < 5 : 3\frac{1}{3} < 3.5 : 4.5$
 - 3. $5 : 3\frac{1}{3} < 3.5 : 4.5 < 6\frac{1}{4} : 3\frac{1}{8}$
 - 4. $5 : 3\frac{1}{3} < 6\frac{1}{4} : 3\frac{1}{8} < 3.5 : 4.5$

Question ID : 264330153766
 Option 1 ID : 264330602530
 Option 2 ID : 264330602527
 Option 3 ID : 264330602528
 Option 4 ID : 264330602529
 Status : Not Answered
 Chosen Option : --

Q.19 If $15x = 24y = 32z$, then $x : y : z$ is equal to:

- Ans
- 1. 32 : 15 : 20
 - 2. 15 : 24 : 32
 - 3. 32 : 20 : 15
 - 4. 24 : 15 : 4

Question ID : 264330153875
 Option 1 ID : 264330602965
 Option 2 ID : 264330602964
 Option 3 ID : 264330602966
 Option 4 ID : 264330602963
 Status : Not Answered
 Chosen Option : --

Q.20 The incomes of P, Q and R are in the ratio of 9 : 15 : 10 and their savings are in the ratio is 10 : 15 : 12. If R spends 60% of his income, what is the ratio of the expenditures of P, Q and R?

- Ans**
- 1. 18 : 17 : 30
 - 2. 17 : 30 : 18
 - 3. 17 : 18 : 30
 - 4. 18 : 30 : 17

Question ID : 264330153763
Option 1 ID : 264330602518
Option 2 ID : 264330602517
Option 3 ID : 264330602516
Option 4 ID : 264330602515
Status : Not Answered
Chosen Option : --

Section : Reasoning Ability and Problem Solving

Q.1 What should come in place of the question mark (?) in the given series based on the English alphabetical order?

MQA, NRE, OSI, PTM, ?

- Ans**
- 1. RVO
 - 2. QWN
 - 3. QUQ
 - 4. SUM

Question ID : 264330156297
Option 1 ID : 264330612588
Option 2 ID : 264330612587
Option 3 ID : 264330612589
Option 4 ID : 264330612590
Status : Answered
Chosen Option : 3

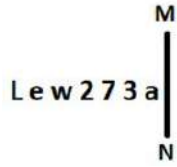
Q.2 Select the combination of letters that when sequentially placed in the blanks of the given series, will complete the series.

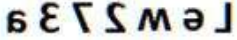



_ML_MLLM_L_

- Ans**
- 1. MLMML
 - 2. MMLMM
 - 3. LLLML
 - 4. LLMLM

Question ID : 264330151639
Option 1 ID : 264330594186
Option 2 ID : 264330594184
Option 3 ID : 264330594183
Option 4 ID : 264330594185
Status : Answered
Chosen Option : 3

Q.3 Select the correct mirror image of the given figure when the mirror is placed at MN as shown below.



- Ans**
- 1. 
 - 2. 
 - 3. 
 - 4. 

Question ID : 264330151502

Option 1 ID : 264330593635

Option 2 ID : 264330593637

Option 3 ID : 264330593636

Option 4 ID : 264330593638

Status : Answered

Chosen Option : 2

Q.4 Read the given statements and conclusions carefully. You have to take the given statements to be true even if they seem to be at variance from commonly known facts. You have to decide which conclusion/s logically follow/s from the given statements.

Statements: All needles are pins. Some pins are wood. All wood are cups.

Conclusion I: Some needles are wood.

Conclusion II: All cups are pins.

- Ans**
- 1. Neither conclusion (I) nor (II) is follow.
 - 2. Only conclusion (II) is follow.
 - 3. Both conclusions (I) and (II) are follow.
 - 4. Only conclusion (I) is follow.

Question ID : 264330155930

Option 1 ID : 264330611125

Option 2 ID : 264330611124

Option 3 ID : 264330611126

Option 4 ID : 264330611123

Status : Answered

Chosen Option : 1

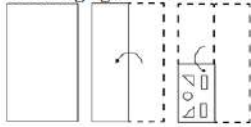
Q.5 In the following number-pairs, the second number is obtained by applying certain mathematical operations to the first number. Select the set in which the numbers are related in the same way as are the numbers of the following sets.
(NOTE: Operations should be performed on the whole numbers, without breaking down the numbers into its constituent digits. E.g. 13 – Operations on 13 such as adding /deleting /multiplying etc. to 13 can be performed. Breaking down 13 into 1 and 3 and then performing mathematical operations on 1 and 3 is not allowed)

11 : 60
13 : 70

- Ans**
- 1. 19 : 90
 - 2. 15 : 80
 - 3. 17 : 85
 - 4. 21 : 100

Question ID : 264330154649
 Option 1 ID : 264330606062
 Option 2 ID : 264330606059
 Option 3 ID : 264330606060
 Option 4 ID : 264330606061
 Status : Answered
 Chosen Option : 2

Q.6 The sequence of folding a piece of paper and the manner in which the folded paper is cut is shown in the following figures. How would this paper look when unfolded?



- Ans**
- 1.
 - 2.
 - 3.
 - 4.

Question ID : 264330155612
 Option 1 ID : 264330609852
 Option 2 ID : 264330609851
 Option 3 ID : 264330609853
 Option 4 ID : 264330609854
 Status : Answered
 Chosen Option : 3

Q.7 In a certain code language, 'get more sleep' is coded as 'wo bt gk' and 'less is more' is coded as 'ap gk cm'. How is 'more' coded in the given language?

- Ans**
- 1. wo
 - 2. cm
 - 3. bt
 - 4. gk

Question ID : 264330151704
Option 1 ID : 264330594446
Option 2 ID : 264330594444
Option 3 ID : 264330594443
Option 4 ID : 264330594445
Status : Answered
Chosen Option : 4

Q.8 In a certain code language, 'PING' is coded as '62' and 'HAZE' is coded as '68'. What is the code for 'GOAT' in the given code language?

- Ans**
- 1. 67
 - 2. 65
 - 3. 66
 - 4. 69

Question ID : 264330155833
Option 1 ID : 264330610736
Option 2 ID : 264330610738
Option 3 ID : 264330610737
Option 4 ID : 264330610735
Status : Answered
Chosen Option : 4

Q.9 Read the given statements and conclusions carefully. You have to take the given statements to be true even if they seem to be at variance from commonly known facts. You have to decide which conclusion/s logically follow/s from the given statements.

Statements: All jars are plastic. Some plastic are spoons. No spoon is a fork.

Conclusion I: Some plastic are jars.

Conclusion II: Some forks are spoons.

- Ans**
- 1. Only conclusion (II) is follow.
 - 2. Neither conclusion (I) nor (II) is follow.
 - 3. Only conclusion (I) is follow.
 - 4. Both conclusions (I) and (II) are follow.

Question ID : 264330155899
Option 1 ID : 264330611000
Option 2 ID : 264330611001
Option 3 ID : 264330610999
Option 4 ID : 264330611002
Status : Answered
Chosen Option : 3

Q.10 What should come in place of '?' in the given series?

11 44 143 440 1331 ?

- Ans
- 1. 3996
 - 2. 4118
 - 3. 4266
 - 4. 4004

Question ID : 264330151476
Option 1 ID : 264330593531
Option 2 ID : 264330593533
Option 3 ID : 264330593534
Option 4 ID : 264330593532
Status : Answered
Chosen Option : 4

Q.11 If G means '-', A means '×', F means '+', B means '÷', then what will come in place of the question mark (?) in the following equation?

37 B 16 A 3 G 88 F 8 = ?

- Ans
- 1. 74
 - 2. 69
 - 3. 93
 - 4. 51

Question ID : 264330154685
Option 1 ID : 264330606205
Option 2 ID : 264330606204
Option 3 ID : 264330606206
Option 4 ID : 264330606203
Status : Answered
Chosen Option : 1

Q.12 KGTO is related to HDQL in a certain way based on the English alphabetical order. In the same way, YFSH is related to VCPE. To which of the following is GUMS related to, following the same logic?

- Ans
- 1. JXOU
 - 2. DSKP
 - 3. ESKU
 - 4. DRJP

Question ID : 264330151677
Option 1 ID : 264330594338
Option 2 ID : 264330594335
Option 3 ID : 264330594337
Option 4 ID : 264330594336
Status : Answered
Chosen Option : 4

Q.13 Select the combination of letters that when sequentially placed in the blanks of the given series, will complete the series.

_ KL _ K _ KK _ _ KL

- Ans**
- ✓ 1. KKLLK
 - ✗ 2. LLKLL
 - ✗ 3. KKKLL
 - ✗ 4. LKLLK

Question ID : 264330151636
 Option 1 ID : 264330594171
 Option 2 ID : 264330594174
 Option 3 ID : 264330594173
 Option 4 ID : 264330594172
 Status : Answered
 Chosen Option : 1

Q.14 What should come in place of '?' in the given series?

2 9 30 93 282 ?

- Ans**
- ✗ 1. 813
 - ✓ 2. 849
 - ✗ 3. 861
 - ✗ 4. 857

Question ID : 264330151465
 Option 1 ID : 264330593487
 Option 2 ID : 264330593488
 Option 3 ID : 264330593490
 Option 4 ID : 264330593489
 Status : Answered
 Chosen Option : 2

Q.15 N, O, P, Q, R, S, T and U are sitting around a square table facing the center of the table. Some of them are sitting at the corners while some are sitting at the exact center of the sides. N sits third to the left of U. U sits in any of the corners. O sits third to the right of T. T sits in one of the corners. Q is the immediate neighbour of P and U. P is not the neighbour of N. R is not T's neighbour.

How many people sit between P and R, when counted from the right of P?

- Ans**
- ✗ 1. Two
 - ✗ 2. Four
 - ✗ 3. One
 - ✓ 4. Three

Question ID : 264330155541
 Option 1 ID : 264330609568
 Option 2 ID : 264330609570
 Option 3 ID : 264330609567
 Option 4 ID : 264330609569
 Status : Answered
 Chosen Option : 3

Q.16 What will come in place of '?' in the following equation, if '+' and '-' are interchanged and 'x' and '+' are interchanged?

$$7 + 3 - 6 + 4 \times 4 = ?$$

- Ans**
- ✓ 1. 10
 - ✗ 2. 7
 - ✗ 3. 4
 - ✗ 4. 15

Question ID : 264330154668
 Option 1 ID : 264330606138
 Option 2 ID : 264330606135
 Option 3 ID : 264330606136
 Option 4 ID : 264330606137
 Status : Answered
 Chosen Option : 1

Q.17 Which figure should replace the question mark (?) if the following figure series were to be continued?

X	□	L	B	X	F	3	C	X	□	3	L	
	3			L			B			X		?
8	C	F	C	□	3	□	F	L	F	C	8	

Ans

- ✓ 1.

8	F	3
	□	
C	L	X
- ✗ 2.

3	L	F
	□	
C	8	X
- ✗ 3.

F	C	3
	□	
X	8	L
- ✗ 4.

8	L	3
	□	
C	F	X

Question ID : 264330154760
 Option 1 ID : 264330606505
 Option 2 ID : 264330606503
 Option 3 ID : 264330606506
 Option 4 ID : 264330606504
 Status : Answered
 Chosen Option : 1

Q.18 Select the set in which the numbers are related in the same way as are the numbers of the following sets.
(NOTE: Operations should be performed on the whole numbers, without breaking down the numbers into its constituent digits. E.g. 13 – Operations on 13 such as adding / subtracting / multiplying etc. to 13 can be performed. Breaking down 13 into 1 and 3 and then performing mathematical operations on 1 and 3 is not allowed)
(2, 14, 28)
(7, 11, 77)

- Ans**
- 1. 4, 7, 23
 - 2. 6, 9, 54
 - 3. 1, 7, 45
 - 4. 8, 6, 98

Question ID : 264330151614
Option 1 ID : 264330594083
Option 2 ID : 264330594085
Option 3 ID : 264330594084
Option 4 ID : 264330594086
Status : Answered
Chosen Option : 2

Q.19 What should come in place of '?' in the given series?

10 41 165 661 2645 ?

- Ans**
- 1. 10597
 - 2. 10581
 - 3. 10604
 - 4. 10378

Question ID : 264330151480
Option 1 ID : 264330593549
Option 2 ID : 264330593548
Option 3 ID : 264330593550
Option 4 ID : 264330593547
Status : Answered
Chosen Option : 2

Q.20 If 5 October 2003 is a Sunday, then what will be the day of the week on 14 July 2010?

- Ans**
- 1. Friday
 - 2. Monday
 - 3. Wednesday
 - 4. Saturday

Question ID : 264330154356
Option 1 ID : 264330604888
Option 2 ID : 264330604889
Option 3 ID : 264330604890
Option 4 ID : 264330604887
Status : Not Answered
Chosen Option : --

Q.1 What does the term 'interest' refer to in banking?

- Ans** ✓ 1. The additional amount earned on a loan or deposit
- ✗ 2. The amount of money deposited into a bank account
- ✗ 3. The value of a currency in relation to other currencies
- ✗ 4. The fee charged for withdrawing money from an ATM

Question ID : 264330157299
Option 1 ID : 264330616561
Option 2 ID : 264330616560
Option 3 ID : 264330616562
Option 4 ID : 264330616559
Status : Answered
Chosen Option : 1

Q.2 Bihu is a folk dance of which state?

- Ans** ✗ 1. Bihar
- ✓ 2. Assam
- ✗ 3. Chhattisgarh
- ✗ 4. Arunachal Pradesh

Question ID : 264330159055
Option 1 ID : 264330623579
Option 2 ID : 264330623581
Option 3 ID : 264330623582
Option 4 ID : 264330623580
Status : Answered
Chosen Option : 1

Q.3 In which year did Lord Curzon announce the partition of Bengal during the British rule in India?

- Ans** ✗ 1. 1904
- ✗ 2. 1906
- ✓ 3. 1905
- ✗ 4. 1907

Question ID : 264330161737
Option 1 ID : 264330634275
Option 2 ID : 264330634277
Option 3 ID : 264330634276
Option 4 ID : 264330634278
Status : Answered
Chosen Option : 3

Q.4 Which of the following statements are correct regarding the Power Sector's Revamped Distribution Sector Scheme?

- 1) The Prime Minister launched the Ministry of Power's flagship Revamped Distribution Sector Scheme in 2022.
- 2) This scheme is aimed at improving the operational efficiencies and financial sustainability of distribution companies.
- 3) From FY 2022-23 to FY 2027-28, the scheme aims to provide financial assistance to DISCOMs.
- 4) This scheme proposes to provide 25 crore Smart Prepaid meters to consumers all over the country.

- Ans
- 1. 1, 3 and 4
 - 2. 1, 2 and 4
 - 3. 2, 3 and 4
 - 4. 1, 2 and 3

Question ID : 264330161404

Option 1 ID : 264330632944

Option 2 ID : 264330632945

Option 3 ID : 264330632946

Option 4 ID : 264330632943

Status : Answered

Chosen Option : 2

Q.5 'Mein Kampf' is the autobiography of which world personality?

- Ans
- 1. Adolf Hitler
 - 2. Robert Mugabe
 - 3. Albert Einstein
 - 4. Charlie Chaplin

Question ID : 264330160966

Option 1 ID : 264330631196

Option 2 ID : 264330631198

Option 3 ID : 264330631197

Option 4 ID : 264330631195

Status : Answered

Chosen Option : 1

Q.6 What is the geographic location of the world's largest coral reef, known as the Great Barrier Reef?

- Ans
- 1. Switzerland
 - 2. Australia
 - 3. China
 - 4. Ireland

Question ID : 264330161313

Option 1 ID : 264330632580

Option 2 ID : 264330632581

Option 3 ID : 264330632582

Option 4 ID : 264330632579

Status : Answered

Chosen Option : 2

Q.7 To which Gharana did Gangubai Hangal primarily belong?

- Ans
- 1. Patiala
 - 2. Agra
 - 3. Banaras
 - 4. Kirana

Question ID : 264330155467

Option 1 ID : 264330609273

Option 2 ID : 264330609274

Option 3 ID : 264330609271

Option 4 ID : 264330609272

Status : **Not Attempted and Marked For Review**

Chosen Option : --

Q.8 Popular since ancient eras for the trading of livestock, _____, which is a month-long event, takes place on the auspicious occasion of Kartik Purnima in the month of November near Harihar Nath temple.

- Ans
- 1. Sonapur Mela
 - 2. Rajgir Mela
 - 3. Pushkar Mela
 - 4. Ardhkumbh Mela

Question ID : 264330160835

Option 1 ID : 264330630671

Option 2 ID : 264330630673

Option 3 ID : 264330630672

Option 4 ID : 264330630674

Status : **Answered**

Chosen Option : 1

Q.9 How many states were selected in Garib Kalyan Rojgar Abhiyaan (GKRA) 2020?

- Ans
- 1. 16 states
 - 2. 6 states
 - 3. 10 states
 - 4. 8 states

Question ID : 264330160170

Option 1 ID : 264330628022

Option 2 ID : 264330628019

Option 3 ID : 264330628021

Option 4 ID : 264330628020

Status : **Not Answered**

Chosen Option : --

Q.10 The celebrated folk artist Gulabo Sapera, recipient of Padma Shri Award in 2016, is an exponent of _____ dance.

- Ans
- 1. Kalbeliya
 - 2. Tippani
 - 3. Bhavai
 - 4. Dandiya

Question ID : 264330155485
Option 1 ID : 264330609345
Option 2 ID : 264330609344
Option 3 ID : 264330609346
Option 4 ID : 264330609343
Status : Answered
Chosen Option : 4

Q.11 Which Indian musician was awarded the Grammy award for his Album 'Planet Drum'?

- Ans
- 1. Zakir Hussain
 - 2. Sivamani
 - 3. Darshan Doshi
 - 4. Trilok Gurtu

Question ID : 264330155461
Option 1 ID : 264330609247
Option 2 ID : 264330609248
Option 3 ID : 264330609250
Option 4 ID : 264330609249
Status : Answered
Chosen Option : 1

Q.12 Which of the following is NOT a part of the six communication mail channels in India?

- Ans
- 1. Metro channel
 - 2. Monthly channel
 - 3. Rajdhani channel
 - 4. Business channel

Question ID : 264330160144
Option 1 ID : 264330627918
Option 2 ID : 264330627916
Option 3 ID : 264330627915
Option 4 ID : 264330627917
Status : Answered
Chosen Option : 2

Q.13 Which of the following is an example of a non-debt capital receipt in the government budget?

- Ans 1. Sale of government-owned land
 2. Loans from international financial institutions
 3. Interest payment on government bonds
 4. Tax revenue collected from citizens

Question ID : 264330157279
Option 1 ID : 264330616480
Option 2 ID : 264330616479
Option 3 ID : 264330616482
Option 4 ID : 264330616481
Status : Answered
Chosen Option : 3

Q.14 Visva Bharati a famous educational institute was founded in 1921 by:

- Ans 1. Rabindranath Tagore
 2. Vinoba Bhave
 3. Mother Teresa
 4. Swami Chinmayananda

Question ID : 264330160885
Option 1 ID : 264330630874
Option 2 ID : 264330630872
Option 3 ID : 264330630873
Option 4 ID : 264330630871
Status : Answered
Chosen Option : 1

Q.15 How many women boxers from India won gold medals in the Women's World Boxing Championship 2023?

- Ans 1. 2
 2. 3
 3. 1
 4. 4

Question ID : 264330158225
Option 1 ID : 264330620260
Option 2 ID : 264330620261
Option 3 ID : 264330620259
Option 4 ID : 264330620262
Status : Answered
Chosen Option : 3

Q.16 Famous Bollywood actress Hema Malini is a trained _____ dancer.

- Ans 1. Kathak
 2. Bharatanatyam
 3. Odissi
 4. Kuchipudi

Question ID : 264330159066
Option 1 ID : 264330623626
Option 2 ID : 264330623625
Option 3 ID : 264330623624
Option 4 ID : 264330623623
Status : Answered
Chosen Option : 1

Q.17 Whose prior recommendation is required to introduce money bills in state legislature?

- Ans
- 1. Speaker of the House
 - 2. Chief Minister
 - 3. Governor
 - 4. Advocate General

Question ID : 264330159923
Option 1 ID : 264330627041
Option 2 ID : 264330627039
Option 3 ID : 264330627040
Option 4 ID : 264330627042
Status : Answered
Chosen Option : 3

Q.18 RK Narayan is the author of _____.

- Ans
- 1. The Guide
 - 2. Far From the Madding Crowd
 - 3. Godan
 - 4. Untouchable

Question ID : 264330160971
Option 1 ID : 264330631218
Option 2 ID : 264330631217
Option 3 ID : 264330631215
Option 4 ID : 264330631216
Status : Answered
Chosen Option : 2

Q.19 Where is the Qutub Minar situated?

- Ans
- 1. Delhi
 - 2. Agra
 - 3. Lucknow
 - 4. Chandigarh

Question ID : 264330160767
Option 1 ID : 264330630401
Option 2 ID : 264330630402
Option 3 ID : 264330630400
Option 4 ID : 264330630399
Status : Answered
Chosen Option : 1

Q.20 Which is the most obvious symptom of infantile jaundice that usually appears between the second and fourth day after birth?

- Ans
- 1. Cracking and irritation at the corners of mouth
 - 2. Swollen or puffy ankles
 - 3. Yellowing of the skin and the whites of the eyes
 - 4. Swelling and bleeding of the gums

Question ID : 264330161080
Option 1 ID : 264330631653
Option 2 ID : 264330631651
Option 3 ID : 264330631652
Option 4 ID : 264330631654
Status : Answered
Chosen Option : 3

Q.21 The Units of Linear momentum are measured in _____.

- Ans
- 1. $\text{kg}^2 \text{ m/s}$
 - 2. kg m/s^2
 - 3. $\text{k}^2\text{g m/s}$
 - 4. kg m/s

Question ID : 264330157779
Option 1 ID : 264330618476
Option 2 ID : 264330618477
Option 3 ID : 264330618478
Option 4 ID : 264330618475
Status : Answered
Chosen Option : 2

Q.22 In which of the following cities the 2023 SAFF Championship was held?

- Ans
- 1. Mumbai
 - 2. Bengaluru
 - 3. Kochi
 - 4. Ahmedabad

Question ID : 264330161149
Option 1 ID : 264330631927
Option 2 ID : 264330631929
Option 3 ID : 264330631928
Option 4 ID : 264330631930
Status : Answered
Chosen Option : 2

Q.23 Mirabai Chanu was selected as BBC Indian Sportswoman of the Year 2022. She is related to which sport?

- Ans
- 1. Discus throw
 - 2. Javelin throw
 - 3. Boxing
 - 4. Weightlifting

Question ID : 264330158367
Option 1 ID : 264330620830
Option 2 ID : 264330620829
Option 3 ID : 264330620827
Option 4 ID : 264330620828
Status : Answered
Chosen Option : 4

Q.24 Punjab state is rich in which natural resource from the following?

- Ans
- 1. Coal
 - 2. Petroleum
 - 3. Silicon
 - 4. Fertile soil

Question ID : 264330161493
Option 1 ID : 264330633301
Option 2 ID : 264330633299
Option 3 ID : 264330633302
Option 4 ID : 264330633300
Status : Answered
Chosen Option : 4

Q.25 How many schedules are there in our Constitution as of June 2023?

- Ans 1. 8
 2. 9
 3. 12
 4. 10

Question ID : 264330159895
Option 1 ID : 264330626927
Option 2 ID : 264330626930
Option 3 ID : 264330626929
Option 4 ID : 264330626928
Status : Answered
Chosen Option : 3

Section : English Language and Comprehension

Q.1 Select the most appropriate synonym of the given word.
Diminish

- Ans 1. Demote
 2. Relegate
 3. Prevent
 4. Weaken

Question ID : 264330151879
Option 1 ID : 264330595135
Option 2 ID : 264330595137
Option 3 ID : 264330595138
Option 4 ID : 264330595136
Status : Answered
Chosen Option : 1

Q.2 Select the option that can be used as a one-word substitute for the given group of words.

A person who loves or collects books

- Ans 1. Anglophile
 2. Heliophile
 3. Paedophile
 4. Bibliophile

Question ID : 264330151866
Option 1 ID : 264330595085
Option 2 ID : 264330595086
Option 3 ID : 264330595084
Option 4 ID : 264330595083
Status : Answered
Chosen Option : 4

Q.3 The following sentence has been divided into four parts. Identify the part that contains an error.

(A) We are living / (B) here since / (C) the summer / (D) of last year.

- Ans 1. A
 2. C
 3. B
 4. D

Question ID : 264330152627
Option 1 ID : 264330598114
Option 2 ID : 264330598111
Option 3 ID : 264330598112
Option 4 ID : 264330598113
Status : Answered
Chosen Option : 3

Q.4 Select the most appropriate option to fill in the blank.

Suresh has been learning Tamil _____ two months.

- Ans 1. from
 2. since
 3. before
 4. for

Question ID : 264330152732
Option 1 ID : 264330598527
Option 2 ID : 264330598528
Option 3 ID : 264330598530
Option 4 ID : 264330598529
Status : Answered
Chosen Option : 1

Q.5 Select the most appropriate meaning of the underlined idiom in the given sentence.

Rina's house is at a stone's throw from the school.

- Ans 1. A very long distance
 2. Next to
 3. A very short distance
 4. Not very close to

Question ID : 264330152877
Option 1 ID : 264330599099
Option 2 ID : 264330599101
Option 3 ID : 264330599100
Option 4 ID : 264330599102
Status : Answered
Chosen Option : 3

Q.6 Select the INCORRECTLY spelt word.

- Ans 1. Wrestler
 2. Accompaniment
 3. Debatable
 4. Discrepancy

Question ID : 264330152786
Option 1 ID : 264330598737
Option 2 ID : 264330598738
Option 3 ID : 264330598735
Option 4 ID : 264330598736
Status : Answered
Chosen Option : 2

Q.7 Select the most appropriate option to substitute the underlined segment in the given sentence.

Mohan unknowingly altered salt instead of sugar to the dessert making it taste terrible.

- Ans 1. added salt instead of sugar
 2. anguished salt instead of sugar
 3. amplified salt instead of sugar
 4. abridged salt instead of sugar

Question ID : 264330153435
Option 1 ID : 264330601266
Option 2 ID : 264330601264
Option 3 ID : 264330601263
Option 4 ID : 264330601265
Status : Answered
Chosen Option : 3

Q.8 Select the most appropriate meaning of the underlined idiom.

The actor decided to live life in the fast lane.

- Ans 1. Dropping charges of crime
 2. A life filled with excitement
 3. Racing away to the moon
 4. A life of extreme speed

Question ID : 264330153144
Option 1 ID : 264330600137
Option 2 ID : 264330600138
Option 3 ID : 264330600136
Option 4 ID : 264330600135
Status : Answered
Chosen Option : 4

Q.9 Parts of the following sentence have been given as options. Select the option that contains an error.
Sanjana rubbed her eyes hardly.

- Ans
- 1. Sanjana
 - 2. rubbed
 - 3. hardly
 - 4. her eyes

Question ID : 264330152807
Option 1 ID : 264330598819
Option 2 ID : 264330598820
Option 3 ID : 264330598822
Option 4 ID : 264330598821
Status : Answered
Chosen Option : 3

Q.10 Select the most appropriate idiom to fill in the blank.
I asked my friend to _____ against her employers who are doing wrong to her.

- Ans
- 1. fine words butter no parsnips
 - 2. finders keepers, losers weepers
 - 3. fight the good fight
 - 4. fight fire with fire

Question ID : 264330153297
Option 1 ID : 264330600746
Option 2 ID : 264330600744
Option 3 ID : 264330600743
Option 4 ID : 264330600745
Status : Answered
Chosen Option : 4

Q.11 Parts of the following sentence have been underlined and given as options. Select the option that contains a misspelt word.
The single most important factor that distinguishes those of us who succed in any venture and those of us who don't is this 'instant coffee' attitude.

- Ans
- 1. venture
 - 2. attitude
 - 3. distinguishes
 - 4. succed

Question ID : 264330151835
Option 1 ID : 264330594969
Option 2 ID : 264330594970
Option 3 ID : 264330594967
Option 4 ID : 264330594968
Status : Answered
Chosen Option : 4

Q.12 The following sentence has been divided into parts. One of them may contain an error. Select the part that contains the error from the given options. If you don't find any error, mark 'No error' as your answer.
A night alone / in a hotel / can be lonely prospect.

Ans ✓ 1. can be lonely prospect

✗ 2. A night alone

✗ 3. No error

✗ 4. in a hotel

Question ID : 264330153195

Option 1 ID : 264330600341

Option 2 ID : 264330600339

Option 3 ID : 264330600342

Option 4 ID : 264330600340

Status : Answered

Chosen Option : 1

Q.13 Parts of the given sentence have been underlined. One of them contains an error. The underlined parts are given as options with some changes. Select the option that correctly rectifies the error.

The new restaurant on Main Street is cheap than the old one.

Ans ✗ 1. the older one

✗ 2. in Main Street

✗ 3. newer restaurant

✓ 4. is cheaper than

Question ID : 264330153171

Option 1 ID : 264330600246

Option 2 ID : 264330600244

Option 3 ID : 264330600243

Option 4 ID : 264330600245

Status : Answered

Chosen Option : 4

Q.14 Parts of the following sentence have been underlined and given as options. Select the option that contains an error.

My relatives shall have reached Amritsar by now.

Ans ✗ 1. My

✗ 2. by now

✓ 3. shall

✗ 4. reached

Question ID : 264330153189

Option 1 ID : 264330600315

Option 2 ID : 264330600318

Option 3 ID : 264330600316

Option 4 ID : 264330600317

Status : Answered

Chosen Option : 3

Q.15 Select the option that can be used as a one-word substitute for the given group of words.

Group of bees

- Ans
- 1. Gaggle
 - 2. Shoal
 - 3. Swarm
 - 4. Pack

Question ID : 264330151814

Option 1 ID : 264330594883

Option 2 ID : 264330594884

Option 3 ID : 264330594885

Option 4 ID : 264330594886

Status : Answered

Chosen Option : 3

Q.16 Select the most appropriate ANTONYM of the given word.
Crude

- Ans
- 1. Patient
 - 2. Refined
 - 3. Primitive
 - 4. Observant

Question ID : 264330153365

Option 1 ID : 264330601013

Option 2 ID : 264330601011

Option 3 ID : 264330601012

Option 4 ID : 264330601014

Status : Answered

Chosen Option : 2

Q.17 Select the most appropriate option to fill in the blank.
Can you quote any _____ in your favour?

- Ans
- 1. answer
 - 2. summary
 - 3. lines
 - 4. precedent

Question ID : 264330153357

Option 1 ID : 264330600981

Option 2 ID : 264330600979

Option 3 ID : 264330600982

Option 4 ID : 264330600980

Status : Answered

Chosen Option : 1

Q.18 Select the INCORRECTLY spelt word.

- Ans 1. Insurance
 2. Assasin
 3. Mischievous
 4. Inexpressible

Question ID : 264330152691
Option 1 ID : 264330598368
Option 2 ID : 264330598369
Option 3 ID : 264330598367
Option 4 ID : 264330598370
Status : Answered
Chosen Option : 2

Q.19 Select the most appropriate meaning of the underlined segment in the given sentence.
Buying a new car can cost an arm and a leg.

- Ans 1. Be free
 2. Be affordable
 3. Be reasonable
 4. Be expensive

Question ID : 264330152926
Option 1 ID : 264330599284
Option 2 ID : 264330599285
Option 3 ID : 264330599286
Option 4 ID : 264330599283
Status : Answered
Chosen Option : 4

Q.20 Select the most appropriate synonym of the given word.
Insist

- Ans 1. Persist
 2. Resist
 3. Heist
 4. Assist

Question ID : 264330151824
Option 1 ID : 264330594926
Option 2 ID : 264330594924
Option 3 ID : 264330594923
Option 4 ID : 264330594925
Status : Answered
Chosen Option : 2

Comprehension:

In the following passage, some words have been deleted. Read the passage carefully and select the most appropriate option to fill in each blank.

There are several reasons why people might 1)_____ that homework is an unnecessary burden on children. Firstly, there is evidence to support the idea that homework 2)_____ nothing to improve educational outcomes. Countries such as Finland, where school children are not given homework, regularly top international educational league tables and outperform nations where setting homework is the norm. Secondly, many parents would agree that the school day is already 3)_____, and leaves their children too tired to do further study when they return home. 4)_____, it is recognised that play time is just as 5)_____ as study time from the perspective of brain development.

SubQuestion No : 21

Q.21 Select the most appropriate option to fill in blank 1.

- Ans 1. be argues
 2. have argue
 3. argues
 4. argue

Question ID : 264330153600

Option 1 ID : 264330601886

Option 2 ID : 264330601885

Option 3 ID : 264330601884

Option 4 ID : 264330601883

Status : Answered

Chosen Option : 1

Comprehension:

In the following passage, some words have been deleted. Read the passage carefully and select the most appropriate option to fill in each blank.

There are several reasons why people might 1)_____ that homework is an unnecessary burden on children. Firstly, there is evidence to support the idea that homework 2)_____ nothing to improve educational outcomes. Countries such as Finland, where school children are not given homework, regularly top international educational league tables and outperform nations where setting homework is the norm. Secondly, many parents would agree that the school day is already 3)_____, and leaves their children too tired to do further study when they return home. 4)_____, it is recognised that play time is just as 5)_____ as study time from the perspective of brain development.

SubQuestion No : 22

Q.22 Select the most appropriate option to fill in blank 2.

- Ans 1. will does
 2. has do
 3. does
 4. do

Question ID : 264330153601

Option 1 ID : 264330601890

Option 2 ID : 264330601887

Option 3 ID : 264330601889

Option 4 ID : 264330601888

Status : Answered

Chosen Option : 4

Comprehension:

In the following passage, some words have been deleted. Read the passage carefully and select the most appropriate option to fill in each blank.

There are several reasons why people might 1)_____ that homework is an unnecessary burden on children. Firstly, there is evidence to support the idea that homework 2)_____ nothing to improve educational outcomes. Countries such as Finland, where school children are not given homework, regularly top international educational league tables and outperform nations where setting homework is the norm. Secondly, many parents would agree that the school day is already 3)_____, and leaves their children too tired to do further study when they return home. 4)_____, it is recognised that play time is just as 5)_____ as study time from the perspective of brain development.

SubQuestion No : 23

Q.23 Select the most appropriate option to fill in blank 3.

Ans 1. long enough

2. big enough

3. not enough

4. enough of

Question ID : 264330153602

Option 1 ID : 264330601892

Option 2 ID : 264330601891

Option 3 ID : 264330601894

Option 4 ID : 264330601893

Status : Answered

Chosen Option : 1

Comprehension:

In the following passage, some words have been deleted. Read the passage carefully and select the most appropriate option to fill in each blank.

There are several reasons why people might 1)_____ that homework is an unnecessary burden on children. Firstly, there is evidence to support the idea that homework 2)_____ nothing to improve educational outcomes. Countries such as Finland, where school children are not given homework, regularly top international educational league tables and outperform nations where setting homework is the norm. Secondly, many parents would agree that the school day is already 3)_____, and leaves their children too tired to do further study when they return home. 4)_____, it is recognised that play time is just as 5)_____ as study time from the perspective of brain development.

SubQuestion No : 24

Q.24 Select the most appropriate option to fill in blank 4.

Ans 1. Similarly

2. Normally

3. Finally

4. Usually

Question ID : 264330153603

Option 1 ID : 264330601897

Option 2 ID : 264330601895

Option 3 ID : 264330601898

Option 4 ID : 264330601896

Status : Answered

Chosen Option : 4

Comprehension:

In the following passage, some words have been deleted. Read the passage carefully and select the most appropriate option to fill in each blank.

There are several reasons why people might 1)_____ that homework is an unnecessary burden on children. Firstly, there is evidence to support the idea that homework 2)_____ nothing to improve educational outcomes. Countries such as Finland, where school children are not given homework, regularly top international educational league tables and outperform nations where setting homework is the norm. Secondly, many parents would agree that the school day is already 3)_____, and leaves their children too tired to do further study when they return home. 4)_____, it is recognised that play time is just as 5)_____ as study time from the perspective of brain development.

SubQuestion No : 25

Q.25 Select the most appropriate option to fill in blank 5.

- Ans 1. soon
 2. beneficial
 3. bad
 4. confidential

Question ID : **264330153604**

Option 1 ID : **264330601899**

Option 2 ID : **264330601900**

Option 3 ID : **264330601902**

Option 4 ID : **264330601901**

Status : **Answered**

Chosen Option : **2**