

SSC MTS 2023 Tier 1 Sept 13 Shift 3 Question Paper with Answers

Roll Number	
Candidate Name	
Exam Date	13/09/2023
Exam Time	4:00 PM - 6:00 PM
Subject	MTS Non Tech Havaladar CBIC and CBN Examination 2023

Section : Numerical and Mathematical Ability

Q.1 A microwave and a dish washing machine were sold for ₹27,000 each. If the microwave was sold at a gain of 25% and the dish washing machine at a loss of 25%. What is the overall profit% or loss% on the entire transaction?

- Ans**
- 1. 5.50% loss
 - 2. 7.75% profit
 - 3. 6.25% loss
 - 4. 8.25% profit

Question ID : 264330156285

Option 1 ID : 264330612542

Option 2 ID : 264330612540

Option 3 ID : 264330612539

Option 4 ID : 264330612541

Status : Answered

Chosen Option : 3

Q.2 A, B and C started a business. A's capital is 7 times the capital of C and B's capital is 2 times the capital of A. If the profit is ₹7,920, then find the share of C (in ₹).

- Ans**
- 1. 350
 - 2. 360
 - 3. 365
 - 4. 355

Question ID : 264330156225

Option 1 ID : 264330612299

Option 2 ID : 264330612301

Option 3 ID : 264330612302

Option 4 ID : 264330612300

Status : Answered

Chosen Option : 2

Q.3 The average expenditure of 32 persons is ₹6,000 and that of another 40 persons is ₹3,300. The average expenditure of the whole group is:

- Ans**
- 1. ₹4,800
 - 2. ₹4,500
 - 3. ₹4,650
 - 4. ₹4,162

Question ID : 264330153869
Option 1 ID : 264330602942
Option 2 ID : 264330602939
Option 3 ID : 264330602940
Option 4 ID : 264330602941
Status : Answered
Chosen Option : 2

Q.4 A person invests ₹5,000 at a simple interest rate of 5% per annum for 5 years. At the end of 5 years, she reinvests the entire amount at the same rate of interest for another 3 years. What will be the total interest earned by the person at the end of 8 years?

- Ans**
- 1. ₹2,156.50
 - 2. ₹2,256.50
 - 3. ₹2,323.50
 - 4. ₹2,187.50

Question ID : 264330156270
Option 1 ID : 264330612480
Option 2 ID : 264330612481
Option 3 ID : 264330612482
Option 4 ID : 264330612479
Status : Answered
Chosen Option : 4

Q.5 A shopkeeper bought an oven for ₹25,000 and sold it for ₹29,500. He spent ₹1,500 as overheads. What is his loss or gain percentage (rounded off to the nearest integer)?

- Ans**
- 1. Loss by 11%
 - 2. Gain by 13%
 - 3. Loss by 13%
 - 4. Gain by 11%

Question ID : 264330163011
Option 1 ID : 264330639361
Option 2 ID : 264330639360
Option 3 ID : 264330639359
Option 4 ID : 264330639362
Status : Answered
Chosen Option : 4

Q.6 A motorboat travelling at some speed can cover 28 km upstream and 40 km downstream in 11 hours. At the same speed it can travel 30 km downstream and 16 km upstream in 7 hours, then the speed of the stream is:

- Ans**
- 1. 2 km/h
 - 2. 4 km/h
 - 3. 3 km/h
 - 4. 1 km/h

Question ID : 264330154094
 Option 1 ID : 264330603839
 Option 2 ID : 264330603842
 Option 3 ID : 264330603841
 Option 4 ID : 264330603840
 Status : Answered
 Chosen Option : 3

Q.7 The longest diagonal of a cube is $6\sqrt{3}$ cm. Find the total surface area of the cube.

- Ans**
- 1. 648 cm²
 - 2. 216 cm²
 - 3. 36 cm²
 - 4. 324 cm²

Question ID : 264330153897
 Option 1 ID : 264330603053
 Option 2 ID : 264330603051
 Option 3 ID : 264330603052
 Option 4 ID : 264330603054
 Status : Answered
 Chosen Option : 2

Q.8 The following table gives the national income and the population of a country for the years 1984-85 to 1989-90.

Year	National Income (in crores)	Population (In crore)
1984-85	₹229.225	74.0
1985-86	₹261.174	75.0
1986-87	₹291.556	77.0
1987-88	₹329.200	78.5
1988-89	₹389.500	80.0
1989-90	₹434.500	81.5

What was the average national income (in crores) for the years 1987-88, 1988-89 and 1989-90?

- Ans**
- 1. ₹392.4
 - 2. ₹384.4
 - 3. ₹398.2
 - 4. ₹396.2

Question ID : 264330156281
 Option 1 ID : 264330612524
 Option 2 ID : 264330612523
 Option 3 ID : 264330612526
 Option 4 ID : 264330612525
 Status : Answered
 Chosen Option : 2

Q.9 Find a fourth proportional to the numbers 3, 9, 8.

- Ans
- 1. 10
 - 2. 12
 - 3. 20
 - 4. 24

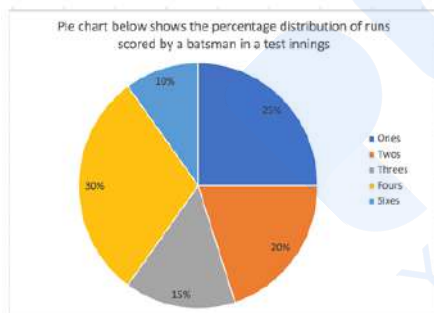
Question ID : 264330153878
 Option 1 ID : 264330602976
 Option 2 ID : 264330602978
 Option 3 ID : 264330602975
 Option 4 ID : 264330602977
 Status : Answered
 Chosen Option : 4

Q.10 What is the average of natural numbers from 1 to 73?

- Ans
- 1. 28
 - 2. 37
 - 3. 30
 - 4. 34

Question ID : 264330155726
 Option 1 ID : 264330610307
 Option 2 ID : 264330610310
 Option 3 ID : 264330610308
 Option 4 ID : 264330610309
 Status : Answered
 Chosen Option : 2

Q.11 The following Pie chart shows the percentage distribution of runs scored by a batsman in a test innings.



If the batsman has scored a total of 360 runs, how many 4's and 6's did he hit?

- Ans
- 1. 30 and 3
 - 2. 31 and 2
 - 3. 27 and 6
 - 4. 25 and 8

Question ID : 264330153784
 Option 1 ID : 264330602600
 Option 2 ID : 264330602602
 Option 3 ID : 264330602601
 Option 4 ID : 264330602599
 Status : Answered
 Chosen Option : 3

Q.12 The Value of $\{[2^4(20 \times 5 + 10) \div 11] - (2^3 \times 15 \div 20) - (9 \times 16)\}$ is:

- Ans
- 1. 8
 - 2. 16
 - 3. 10
 - 4. 12

Question ID : 264330156459
Option 1 ID : 264330613224
Option 2 ID : 264330613226
Option 3 ID : 264330613225
Option 4 ID : 264330613223
Status : Answered
Chosen Option : 3

Q.13 A can complete a task in 10 days. He worked for 4 days and then stopped. B completed the remaining work in 9 days.
In how many days can A and B together complete the task?

- Ans
- 1. 6 days
 - 2. 5 days
 - 3. 4 days
 - 4. 7 days

Question ID : 264330156276
Option 1 ID : 264330612505
Option 2 ID : 264330612504
Option 3 ID : 264330612503
Option 4 ID : 264330612506
Status : Answered
Chosen Option : 1

Q.14 Find the compound interest (in ₹) on ₹500 in 2 years at 20% per annum if the interest being compounded half-yearly.

- Ans
- 1. 232.05
 - 2. 132.05
 - 3. 225.08
 - 4. 264.05

Question ID : 264330155748
Option 1 ID : 264330610397
Option 2 ID : 264330610395
Option 3 ID : 264330610396
Option 4 ID : 264330610398
Status : Answered
Chosen Option : 1

Q.15 A solid metallic cuboid of length 11 cm, breadth 8 cm and height 6 cm is melted and reshaped to form a cone of height 14 cm. What is the radius of the cone thus formed?

- Ans**
- ✓ 1. 6 cm
 - ✗ 2. 9 cm
 - ✗ 3. 7 cm
 - ✗ 4. 8 cm

Question ID : 264330154140
Option 1 ID : 264330604023
Option 2 ID : 264330604026
Option 3 ID : 264330604025
Option 4 ID : 264330604024
Status : Answered
Chosen Option : 1

Q.16 P can complete $\frac{1}{5}$ of a work in 12 days and Q can complete $\frac{1}{6}$ of a work in 8 days. In how many days can both P and Q together complete the work?

- Ans**
- ✓ 1. $26\frac{2}{3}$
 - ✗ 2. $24\frac{2}{3}$
 - ✗ 3. $25\frac{4}{5}$
 - ✗ 4. $22\frac{4}{5}$

Question ID : 264330155975
Option 1 ID : 264330611300
Option 2 ID : 264330611299
Option 3 ID : 264330611302
Option 4 ID : 264330611301
Status : Answered
Chosen Option : 1

Q.17 A bike crosses a bridge with a speed of 75 km/h. What will be the length (in km) of the bridge, if the bike takes 20 minutes to cross the bridge?

- Ans**
- ✗ 1. 30
 - ✓ 2. 25
 - ✗ 3. 45
 - ✗ 4. 20

Question ID : 264330155751
Option 1 ID : 264330610409
Option 2 ID : 264330610408
Option 3 ID : 264330610410
Option 4 ID : 264330610407
Status : Answered
Chosen Option : 2

Q.18 What is the greatest three-digit number which when divided by 4, 8 and 9, leaves no remainder?

- Ans**
- 1. 924
 - 2. 963
 - 3. 932
 - 4. 936

Question ID : **264330155685**
Option 1 ID : **264330610143**
Option 2 ID : **264330610146**
Option 3 ID : **264330610144**
Option 4 ID : **264330610145**
Status : **Answered**
Chosen Option : **4**

Q.19 The price of a bottle is first increased by 15% and later the price was decreased by 24% due to a reduction in sales. Find the net percentage change in the final price of the bottle.

- Ans**
- 1. Decrease of 13.9%
 - 2. Decrease of 12.6%
 - 3. Increase of 13.9%
 - 4. Increase of 12.6%

Question ID : **264330155734**
Option 1 ID : **264330610339**
Option 2 ID : **264330610341**
Option 3 ID : **264330610340**
Option 4 ID : **264330610342**
Status : **Answered**
Chosen Option : **2**

Q.20 A car covers 60 km at a speed of 84 km/h. If the average speed for the whole journey is 72 km/h, then the speed of the car for the next 60 km of the journey is:

- Ans**
- 1. 63 km/h
 - 2. 68 km/h
 - 3. 78 km/h
 - 4. 75 km/h

Question ID : **264330157894**
Option 1 ID : **264330618937**
Option 2 ID : **264330618936**
Option 3 ID : **264330618935**
Option 4 ID : **264330618938**
Status : **Answered**
Chosen Option : **1**

Q.1 What should come in place of '?' in the given series?

14 43 130 391 1174 ?

- Ans
- 1. 3519
 - 2. 2476
 - 3. 3416
 - 4. 3523

Question ID : 264330151479
Option 1 ID : 264330593545
Option 2 ID : 264330593544
Option 3 ID : 264330593543
Option 4 ID : 264330593546
Status : Answered
Chosen Option : 4

Q.2 What should come in place of ? in the given series?

22 24 28 30 34 ?

- Ans
- 1. 38
 - 2. 40
 - 3. 42
 - 4. 36

Question ID : 264330151720
Option 1 ID : 264330594510
Option 2 ID : 264330594507
Option 3 ID : 264330594508
Option 4 ID : 264330594509
Status : Answered
Chosen Option : 4

Q.3 Which figure should replace the question mark (?) if the following figure series were to be continued?

T	□	O	Y	♥	↑	T	N	
O	N	L	Y	♥	□	A	↑	T
2	O	N	A	↑	△	Y		?
♥	↑	T	N	A	Y	♥	2	

Ans

✗ 1.

△	Y
T	K
♥	2
A	N

✓ 2.

A	Y
♥	K
T	2
△	N

✗ 3.

♥	2
△	A
↑	N
T	Y

✗ 4.

A	Y
♥	△
↑	2
T	N

Question ID : 264330154748
 Option 1 ID : 264330606457
 Option 2 ID : 264330606455
 Option 3 ID : 264330606456
 Option 4 ID : 264330606458
 Status : Answered
 Chosen Option : 4

Q.4 Select the word-pair that best represents a similar relationship to the one expressed in the pair of words given below.

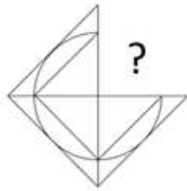
(The words must be considered as meaningful English words and must not be related to each other based on the number of letters/number of consonants/vowels in the word)

Horse : Mare

- Ans
- ✓ 1. Fox : Vixen
 - ✗ 2. Duck : Geese
 - ✗ 3. Donkey : Pony
 - ✗ 4. Dog : Puppy

Question ID : 264330154632
 Option 1 ID : 264330605991
 Option 2 ID : 264330605992
 Option 3 ID : 264330605994
 Option 4 ID : 264330605993
 Status : Answered
 Chosen Option : 1

Q.5 Identify the figure that completes the pattern (rotation is NOT allowed).



Ans

✗ 1.



✗ 2.



✓ 3.



✗ 4.



Question ID : 264330154515

Option 1 ID : 264330605523

Option 2 ID : 264330605525

Option 3 ID : 264330605524

Option 4 ID : 264330605526

Status : Answered

Chosen Option : 3

Q.6 What should come in place of ? in the given series based on the English alphabetical order?

PVC, SUF, VTL, YSL, ?

Ans

✗ 1. CQR

✗ 2. DRP

✗ 3. CSP

✓ 4. BRO

Question ID : 264330155791

Option 1 ID : 264330610570

Option 2 ID : 264330610568

Option 3 ID : 264330610567

Option 4 ID : 264330610569

Status : Answered

Chosen Option : 4

Q.7 Select the combination of letters that when sequentially placed in the blanks of the given series, will complete the series.

DE _ D _ D _ E _ _ ED

- Ans**
- 1. EDDED
 - 2. DDEDE
 - 3. DEDDD
 - 4. DEDEE

Question ID : 264330151652

Option 1 ID : 264330594237

Option 2 ID : 264330594235

Option 3 ID : 264330594238

Option 4 ID : 264330594236

Status : Answered

Chosen Option : 3

Q.8 What will come in place of '?' in the following equation, if '+' and '×' are interchanged and '×' and '-' are interchanged?

$$12 + 6 \times 5 - 7 + 2 = ?$$

- Ans**
- 1. -13
 - 2. -14
 - 3. -31
 - 4. -46

Question ID : 264330154657

Option 1 ID : 264330606093

Option 2 ID : 264330606091

Option 3 ID : 264330606094

Option 4 ID : 264330606092

Status : Answered

Chosen Option : 3

Q.9 4 is related to 14 following a certain logic. Following the same logic, 7 is related to 26. To which of the following is 9 related to, following the same logic?

- Ans**
- 1. 37
 - 2. 36
 - 3. 34
 - 4. 35

Question ID : 264330151604

Option 1 ID : 264330594046

Option 2 ID : 264330594045

Option 3 ID : 264330594043

Option 4 ID : 264330594044

Status : Answered

Chosen Option : 3

Q.10 If 15 July 2010 is a Thursday, then what will be the day of the week on 5 June 2022?

- Ans**
- 1. Wednesday
 - 2. Tuesday
 - 3. Monday
 - 4. Sunday

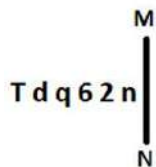
Question ID : 264330154354
 Option 1 ID : 264330604882
 Option 2 ID : 264330604881
 Option 3 ID : 264330604880
 Option 4 ID : 264330604879
 Status : Answered
 Chosen Option : 2

Q.11 2 is related to 7 following a certain logic. Following the same logic, 4 is related to 63. To which of the following is 9 related to, following the same logic?

- Ans**
- 1. 730
 - 2. 728
 - 3. 731
 - 4. 729

Question ID : 264330151586
 Option 1 ID : 264330593973
 Option 2 ID : 264330593971
 Option 3 ID : 264330593974
 Option 4 ID : 264330593972
 Status : Answered
 Chosen Option : 2

Q.12 Select the correct mirror image of the given figure when the mirror is placed at MN as shown below.



- Ans**
- 1. n 5 3 d q T
 - 2. n 5 3 p b T
 - 3. n 2 3 p b L
 - 4. u 5 6 p b T

Question ID : 264330151504
 Option 1 ID : 264330593643
 Option 2 ID : 264330593646
 Option 3 ID : 264330593645
 Option 4 ID : 264330593644
 Status : Answered
 Chosen Option : 2

Q.13 What should come in place of ? in the given series based on the English alphabetical order?

WAP, VEO, UIN, TMM, ?

- Ans
- 1. RPM
 - 2. QPN
 - 3. SQL
 - 4. QSN

Question ID : 264330155793
Option 1 ID : 264330610575
Option 2 ID : 264330610578
Option 3 ID : 264330610576
Option 4 ID : 264330610577
Status : Answered
Chosen Option : 3

Q.14 In a certain code language, 'TUNE' is coded as '4368' and 'UNIT' is coded as '8423'. What is the code for 'I' in the given code language?

- Ans
- 1. 4
 - 2. 3
 - 3. 2
 - 4. 8

Question ID : 264330151701
Option 1 ID : 264330594434
Option 2 ID : 264330594431
Option 3 ID : 264330594432
Option 4 ID : 264330594433
Status : Answered
Chosen Option : 3

Q.15 Read the given statements and conclusions carefully. You have to take the given statements to be true even if they seem to be at variance from commonly known facts. You have to decide which conclusion/s logically follow/s from the given statements.

Statements: Some laptops are pencils. Some pencils are rulers. All rulers are white.

Conclusion I: Some pencils are laptops.

Conclusion II: All rulers are pencils.

- Ans
- 1. Both conclusions (I) and (II) are follow.
 - 2. Only conclusion (I) is follow.
 - 3. Neither conclusion (I) nor (II) is follow.
 - 4. Only conclusion (II) is follow.

Question ID : 264330155892
Option 1 ID : 264330610974
Option 2 ID : 264330610971
Option 3 ID : 264330610973
Option 4 ID : 264330610972
Status : Answered
Chosen Option : 2

Q.16 If D means '-', C means 'x', F means '+', B means '+', then what will come in place of the question mark (?) in the following equation?

$$28 B 72 F 6 D 8 C 4 - ?$$

- Ans**
- 1. 14
 - 2. 26
 - 3. 18
 - 4. 8

Question ID : 264330154692

Option 1 ID : 264330606232

Option 2 ID : 264330606234

Option 3 ID : 264330606233

Option 4 ID : 264330606231

Status : Answered

Chosen Option : 4

Q.17 Seven people, W, D, J, S, H, G and Y are sitting in a straight line, facing south. G sits second to the left of S. G is the immediate neighbour of D and H. Y sits third to the right of D. Only two people sit to the right of W.

Who sits at the extreme right end of the line?

- Ans**
- 1. W
 - 2. Y
 - 3. J
 - 4. G

Question ID : 264330161692

Option 1 ID : 264330634098

Option 2 ID : 264330634095

Option 3 ID : 264330634096

Option 4 ID : 264330634097

Status : Answered

Chosen Option : 3

Q.18 Read the given statements and conclusions carefully. You have to take the given statements to be true even if they seem to be at variance from commonly known facts. You have to decide which conclusion/s logically follow/s from the given statements.

Statements: All crows are bananas. Some bananas are pink. All pink are white.

Conclusion I: Some crows are bananas.

Conclusion II: All bananas are pink.

- Ans**
- 1. Only conclusion (II) is follow.
 - 2. Neither conclusion (I) nor (II) is follow.
 - 3. Only conclusion (I) is follow.
 - 4. Both conclusions (I) and (II) are follow.

Question ID : 264330155916

Option 1 ID : 264330611068

Option 2 ID : 264330611069

Option 3 ID : 264330611067

Option 4 ID : 264330611070

Status : Answered

Chosen Option : 3

Q.19 What should come in place of '?' in the given series?

11 91 811 ? 65611 590491 5314411

- Ans
- 1. 7129
 - 2. 7291
 - 3. 7921
 - 4. 7912

Question ID : 264330151442
Option 1 ID : 264330593397
Option 2 ID : 264330593396
Option 3 ID : 264330593395
Option 4 ID : 264330593398
Status : Answered
Chosen Option : 2

Q.20 In a certain code language, 'people talk about' is written as 'ki li ni' and 'let them talk' is written as 'si ki hi'. How is 'talk' written in the given language?

- Ans
- 1. li
 - 2. ki
 - 3. hi
 - 4. ni

Question ID : 264330155635
Option 1 ID : 264330609944
Option 2 ID : 264330609943
Option 3 ID : 264330609946
Option 4 ID : 264330609945
Status : Answered
Chosen Option : 2

Section : General Awareness

Q.1 In which year was the Pradhan Mantri Rojgar Protsahan Yojana (PMRPY) launched?

- Ans
- 1. 2018
 - 2. 2015
 - 3. 2016
 - 4. 2022

Question ID : 264330161505
Option 1 ID : 264330633347
Option 2 ID : 264330633349
Option 3 ID : 264330633350
Option 4 ID : 264330633348
Status : Answered
Chosen Option : 4

Q.2 The film based on which of the following novels by Amrita Pritam won the National Film Award?

- Ans
- 1. Nagmani
 - 2. Raseedi Ticket
 - 3. Village No.36
 - 4. Pinjar

Question ID : 264330161764
Option 1 ID : 264330634384
Option 2 ID : 264330634386
Option 3 ID : 264330634385
Option 4 ID : 264330634383
Status : Answered
Chosen Option : 4

Q.3 Which Indian Musician was awarded with the Bharat Ratna in 2001?

- Ans
- 1. Shivkumar Sharma
 - 2. Bhimsen Joshi
 - 3. Bismillah Khan
 - 4. Hariprasad Chaurasia

Question ID : 264330155460
Option 1 ID : 264330609243
Option 2 ID : 264330609245
Option 3 ID : 264330609244
Option 4 ID : 264330609246
Status : Answered
Chosen Option : 3

Q.4 Who was the Prime Minister of India when the Fundamental Duties were first incorporated in the Constitution of India?

- Ans
- 1. Jawaharlal Nehru
 - 2. Indira Gandhi
 - 3. Atal Bihari Vajpayee
 - 4. Rajiv Gandhi

Question ID : 264330159900
Option 1 ID : 264330626948
Option 2 ID : 264330626949
Option 3 ID : 264330626950
Option 4 ID : 264330626947
Status : Answered
Chosen Option : 2

Q.5 Who said the following?

“Money is what money does.”

- Ans
- 1. Prof. Seligman
 - 2. Prof. Cole
 - 3. Prof. Walker
 - 4. Prof. Robertson

Question ID : 264330166032
Option 1 ID : 264330651206
Option 2 ID : 264330651204
Option 3 ID : 264330651203
Option 4 ID : 264330651205
Status : Answered
Chosen Option : 2

Q.6 Which of the following ports is located in Odisha?

- Ans
- 1. Haldia port
 - 2. Kandla port
 - 3. Paradip Port
 - 4. Tuticorin Port

Question ID : 264330161492
Option 1 ID : 264330633296
Option 2 ID : 264330633297
Option 3 ID : 264330633298
Option 4 ID : 264330633295
Status : Answered
Chosen Option : 3

Q.7 Rohini Bhate, Pandit Munnalal Shukla, Kumudini Lakhia and Uma Sharma are famous exponents of which of the following classical dance forms?

- Ans
- 1. Bharatanatyam
 - 2. Kathakali
 - 3. Kathak
 - 4. Kuchipudi

Question ID : 264330160788
Option 1 ID : 264330630483
Option 2 ID : 264330630485
Option 3 ID : 264330630486
Option 4 ID : 264330630484
Status : Answered
Chosen Option : 3

Q.8 The forces exerted on a body during a short period are known as:

- Ans
- 1. Impulse
 - 2. Pressure
 - 3. Surface tension
 - 4. Tensile stress

Question ID : 264330157783
Option 1 ID : 264330618491
Option 2 ID : 264330618492
Option 3 ID : 264330618493
Option 4 ID : 264330618494
Status : Answered
Chosen Option : 1

Q.9 India played the final of ODI Cricket World Cup 2011 against which country?

- Ans
- 1. Australia
 - 2. Sri Lanka
 - 3. England
 - 4. Pakistan

Question ID : 264330158229
Option 1 ID : 264330620277
Option 2 ID : 264330620278
Option 3 ID : 264330620276
Option 4 ID : 264330620275
Status : Answered
Chosen Option : 2

Q.10 Mohiniyattam is a classical dance style belongs to _____.

- Ans
- 1. Kerala
 - 2. Odisha
 - 3. Manipur
 - 4. Tamil Nadu

Question ID : 264330159050
Option 1 ID : 264330623561
Option 2 ID : 264330623559
Option 3 ID : 264330623562
Option 4 ID : 264330623560
Status : Answered
Chosen Option : 1

Q.11 Which of the following is NOT a feature of the Indian political party system?

- Ans
- 1. Lack of effective opposition
 - 2. Single party system
 - 3. Multi-party system
 - 4. Factions and defections

Question ID : 264330159913
Option 1 ID : 264330627001
Option 2 ID : 264330627002
Option 3 ID : 264330626999
Option 4 ID : 264330627000
Status : Answered
Chosen Option : 2

Q.12 Which of the following was the first Satyagraha Movement led by Mahatma Gandhi in British India?

- Ans** 1. Champaran Satyagraha
 2. Kheda Satyagraha
 3. Rowlatt Satyagraha
 4. Bardoli Satyagraha

Question ID : 264330161750
Option 1 ID : 264330634330
Option 2 ID : 264330634328
Option 3 ID : 264330634327
Option 4 ID : 264330634329
Status : Answered
Chosen Option : 1

Q.13 Dr. Teejan Bai, who was awarded by Padma Vibhushan (2019) is a renowned Indian folk singer and performer from the state of _____.

- Ans** 1. Himachal Pradesh
 2. Chhattisgarh
 3. Assam
 4. Rajasthan

Question ID : 264330155525
Option 1 ID : 264330609503
Option 2 ID : 264330609506
Option 3 ID : 264330609504
Option 4 ID : 264330609505
Status : Answered
Chosen Option : 4

Q.14 The fundamental vocabulary of _____ dance constitutes mock combat techniques, stylised gaits of birds and animals and movements modelled on the chores of village housewives and mostly performed by male dancers in Eastern India.

- Ans** 1. Manipuri
 2. Kathakali
 3. Chhau
 4. Sattariya

Question ID : 264330161890
Option 1 ID : 264330634890
Option 2 ID : 264330634889
Option 3 ID : 264330634888
Option 4 ID : 264330634887
Status : Answered
Chosen Option : 3

Q.15 The Red Fort is located in:

- Ans 1. Lucknow
 2. Delhi
 3. Indore
 4. Ahmedabad

Question ID : 264330160769
Option 1 ID : 264330630408
Option 2 ID : 264330630410
Option 3 ID : 264330630407
Option 4 ID : 264330630409
Status : Answered
Chosen Option : 2

Q.16 The Goa government launched a new scheme in November 2022 for which of the following?

- Ans 1. Ithihas Darshan
 2. Goa Darshan
 3. Bharat Darshan
 4. Dev Darshan

Question ID : 264330158326
Option 1 ID : 264330620666
Option 2 ID : 264330620665
Option 3 ID : 264330620663
Option 4 ID : 264330620664
Status : Answered
Chosen Option : 2

Q.17 Ruturaj Gaikwad became the first batsman in List-A cricket to hit how many sixes in an over?

- Ans 1. 4
 2. 5
 3. 6
 4. 7

Question ID : 264330158366
Option 1 ID : 264330620823
Option 2 ID : 264330620824
Option 3 ID : 264330620825
Option 4 ID : 264330620826
Status : Answered
Chosen Option : 4

Q.18 The author of 'Malgudi Days' is:

- Ans
- 1. Chetan Bhagat
 - 2. Rabindranath Tagore
 - 3. Vikram Seth
 - 4. RK Narayan

Question ID : 264330155497
Option 1 ID : 264330609391
Option 2 ID : 264330609394
Option 3 ID : 264330609393
Option 4 ID : 264330609392
Status : Answered
Chosen Option : 4

Q.19 Camels are found in which type of forests in India from the following?

- Ans
- 1. Montane forests
 - 2. The thorn forest and scrubs
 - 3. Mangrove forests
 - 4. Tropical evergreen forests

Question ID : 264330161498
Option 1 ID : 264330633322
Option 2 ID : 264330633319
Option 3 ID : 264330633320
Option 4 ID : 264330633321
Status : Answered
Chosen Option : 2

Q.20 Under whom among the following British Governor-Generals was the new policy of 'paramountcy' initiated in British India by the East India Company?

- Ans
- 1. Lord Hastings
 - 2. Lord Amherst
 - 3. Lord Wellesley
 - 4. Lord Cornwallis

Question ID : 264330161738
Option 1 ID : 264330634279
Option 2 ID : 264330634281
Option 3 ID : 264330634280
Option 4 ID : 264330634282
Status : Answered
Chosen Option : 3

Q.21 Paryushana Parva is a festival of which of the following communities?

- Ans
- 1. Jain
 - 2. Christian
 - 3. Parsi
 - 4. Hindu

Question ID : 264330159079
Option 1 ID : 264330623678
Option 2 ID : 264330623677
Option 3 ID : 264330623676
Option 4 ID : 264330623675
Status : Answered
Chosen Option : 1

Q.22 Who coined the word 'cell' in the 1600s, from the Latin word 'cellula', meaning 'small room'?

- Ans 1. Louis Pasteur
 2. Robert Hooke
 3. Theodor Schwann
 4. Lynn Margulis

Question ID : 264330161081
Option 1 ID : 264330631657
Option 2 ID : 264330631655
Option 3 ID : 264330631656
Option 4 ID : 264330631658
Status : Answered
Chosen Option : 2

Q.23 Which of the following is a feature of Micro Finance Institutions?

- Ans 1. Financial service to government employees
 2. Finance service to Union ministers
 3. Financial service to corporate
 4. Financial service to disadvantaged people

Question ID : 264330161455
Option 1 ID : 264330633149
Option 2 ID : 264330633150
Option 3 ID : 264330633148
Option 4 ID : 264330633147
Status : Answered
Chosen Option : 4

Q.24 Which of the following States became the overall champions in both the men's and women's categories in the 2023 Janjatiya Khel Mahotsav?

- Ans 1. Chhattisgarh
 2. Karnataka
 3. Jharkhand
 4. Odisha

Question ID : 264330161131
Option 1 ID : 264330631857
Option 2 ID : 264330631855
Option 3 ID : 264330631856
Option 4 ID : 264330631858
Status : Answered
Chosen Option : 1

Q.25 The Mohorovicic (Moho) discontinuity separates?

- Ans
- 1. Earth's lithosphere and asthenosphere
 - 2. Earth's atmosphere and hydrosphere
 - 3. Earth's crust and the inner core
 - 4. Earth's crust and the mantle

Question ID : 264330157831

Option 1 ID : 264330618683

Option 2 ID : 264330618684

Option 3 ID : 264330618686

Option 4 ID : 264330618685

Status : Answered

Chosen Option : 4

Section : English Language and Comprehension

Q.1 The following sentence has been split into four segments. Identify the segment that contains a grammatical error and select the option which rectifies that error.

The space agency wanted / to test with a chimp / before orbiting an astronaut / in a Mercury capsule.

- Ans
- 1. The space agency want
 - 2. in an Mercury capsule.
 - 3. before orbiting an astronaut
 - 4. to test with an chimp

Question ID : 264330141339

Option 1 ID : 264330553691

Option 2 ID : 264330553693

Option 3 ID : 264330553692

Option 4 ID : 264330553694

Status : Answered

Chosen Option : 3

Q.2 Select the most appropriate option that can substitute the underlined segment in the given sentence.

They said that he is not going to call them.

- Ans
- 1. he shall not call them
 - 2. he has not gone to call them
 - 3. they are not going to call them
 - 4. he was not going to call them

Question ID : 264330152711

Option 1 ID : 264330598445

Option 2 ID : 264330598444

Option 3 ID : 264330598446

Option 4 ID : 264330598443

Status : Answered

Chosen Option : 1

Q.3 Parts of the following sentence have been underlined and given as options. Select the option that contains a misspelt word.

For every endeavour-whether in the area of career, academics, music, sports or even in spirituality, it is a long ardous journey.

- Ans**
- 1. ardous
 - 2. endeavour
 - 3. academics
 - 4. career

Question ID : 264330151836
Option 1 ID : 264330594974
Option 2 ID : 264330594971
Option 3 ID : 264330594973
Option 4 ID : 264330594972
Status : Answered
Chosen Option : 1

Q.4 Select the most appropriate meaning of the underlined idiom.

The entrepreneur decided to throw caution to the wind.

- Ans**
- 1. Take a risk
 - 2. Take the best option
 - 3. Think innovatively
 - 4. In extreme windy conditions

Question ID : 264330153146
Option 1 ID : 264330600145
Option 2 ID : 264330600143
Option 3 ID : 264330600144
Option 4 ID : 264330600146
Status : Answered
Chosen Option : 1

Q.5 Select the most appropriate synonym of the given word.
Tedious

- Ans**
- 1. Carefree
 - 2. Hostile
 - 3. Dynamic
 - 4. Dreary

Question ID : 264330152681
Option 1 ID : 264330598328
Option 2 ID : 264330598330
Option 3 ID : 264330598327
Option 4 ID : 264330598329
Status : Answered
Chosen Option : 4

Q.6 Select the option that can be used as a one-word substitute for the given group of words.

Not fit for eating

- Ans
- 1. Inept
 - 2. Ineligible
 - 3. Ineluctable
 - 4. Inedible

Question ID : 264330151907

Option 1 ID : 264330595246

Option 2 ID : 264330595243

Option 3 ID : 264330595244

Option 4 ID : 264330595245

Status : Answered

Chosen Option : 4

Q.7 The following sentence has been split into four segments. Identify the segment that contains an error.

If he had paid / attention to the announcement, / he had not / missed the train.

- Ans
- 1. If he had paid
 - 2. he had not
 - 3. attention to the announcement
 - 4. missed the train

Question ID : 264330143054

Option 1 ID : 264330560491

Option 2 ID : 264330560493

Option 3 ID : 264330560492

Option 4 ID : 264330560494

Status : Answered

Chosen Option : 2

Q.8 Select the most appropriate meaning of the given idiom.

Child's play

- Ans
- 1. In someone's role
 - 2. Something very easy
 - 3. Weakness
 - 4. Just behaviour

Question ID : 264330151827

Option 1 ID : 264330594938

Option 2 ID : 264330594937

Option 3 ID : 264330594936

Option 4 ID : 264330594935

Status : Answered

Chosen Option : 2

Q.9 Select the option that rectifies the spelling of the underlined word in the given sentence.

The tour company has included all the activities that you have requested in your itenary.

- Ans
- 1. itinerarey
 - 2. itenerarey
 - 3. itinerary
 - 4. itenerary

Question ID : 264330153228
Option 1 ID : 264330600472
Option 2 ID : 264330600471
Option 3 ID : 264330600474
Option 4 ID : 264330600473
Status : Answered
Chosen Option : 3

Q.10 Select the most appropriate meaning of the given idiom.

Spill the beans

- Ans
- 1. To believe something as it seems
 - 2. To tell a secret
 - 3. To do things in a fair way
 - 4. To cry over what is done

Question ID : 264330153011
Option 1 ID : 264330599618
Option 2 ID : 264330599617
Option 3 ID : 264330599616
Option 4 ID : 264330599615
Status : Answered
Chosen Option : 2

Q.11 Select the most appropriate meaning of the underlined idiom.
The mother requested the nurse to keep an eye on the baby while she went for tea.

- Ans
- 1. Keep informed
 - 2. Mistreat
 - 3. Watch and take care
 - 4. Watch for the arrival or appearance

Question ID : 264330151832
Option 1 ID : 264330594955
Option 2 ID : 264330594957
Option 3 ID : 264330594958
Option 4 ID : 264330594956
Status : Answered
Chosen Option : 3

Q.12 Select the most appropriate option that can substitute the underlined segment in the given sentence.

If you need any help tomorrow, let him knows.

- Ans
- 1. let me know
 - 2. let us known
 - 3. let him known
 - 4. let them knew

Question ID : 264330153596
Option 1 ID : 264330601873
Option 2 ID : 264330601874
Option 3 ID : 264330601872
Option 4 ID : 264330601871
Status : Answered
Chosen Option : 1

Q.13 Select the most appropriate option that can substitute the underlined segment in the given sentence.

Helena loves to dig and played in the dirt like any other child.

- Ans
- 1. playing on dirt
 - 2. playing with in dirt
 - 3. plays of dirt
 - 4. play in the dirt

Question ID : 264330153485
Option 1 ID : 264330601455
Option 2 ID : 264330601458
Option 3 ID : 264330601457
Option 4 ID : 264330601456
Status : Answered
Chosen Option : 4

Q.14 Select the most appropriate option that can substitute the underlined segment in the given sentence.

The development of skills can contribute to structural transformation and economic growth in enhance employability and labour productivity and helping countries to become more competitive.

- Ans
- 1. about enhancing employability
 - 2. by enhanced employability
 - 3. by enhancing employability
 - 4. for enhanced employability

Question ID : 264330151900
Option 1 ID : 264330595215
Option 2 ID : 264330595216
Option 3 ID : 264330595218
Option 4 ID : 264330595217
Status : Answered
Chosen Option : 3

Q.15 Select the most appropriate option that can substitute the underlined segment in the given sentence.

Everyone likes in watch a magic show.

- Ans
- 1. likes to watching
 - 2. like in watching
 - 3. likes to watch
 - 4. liked in watch

Question ID : 264330153472
Option 1 ID : 264330601404
Option 2 ID : 264330601405
Option 3 ID : 264330601403
Option 4 ID : 264330601406
Status : Answered
Chosen Option : 3

Q.16 The given sentence contains an error. Select the option that correctly rectifies the error.

He is the better-looking hero in the entire film industry.

- Ans
- 1. He is the best-looking hero in the entire film industry.
 - 2. He is the good-looking hero than the entire film industry.
 - 3. He is the best-looking hero more than the entire film industry.
 - 4. He is the good-looking hero in the entire film industry.

Question ID : 264330152608
Option 1 ID : 264330598036
Option 2 ID : 264330598037
Option 3 ID : 264330598038
Option 4 ID : 264330598035
Status : Answered
Chosen Option : 1

Q.17 Select the most appropriate option to fill in the blank.
He is first _____ to his job and then to his family.

- Ans
- 1. enabled
 - 2. committed
 - 3. confirmed
 - 4. convinced

Question ID : 264330153550
Option 1 ID : 264330601702
Option 2 ID : 264330601701
Option 3 ID : 264330601700
Option 4 ID : 264330601699
Status : Answered
Chosen Option : 2

Q.18 Select the most appropriate synonym of the given word.
Pretend

- Ans 1. Feign
 2. Benign
 3. Align
 4. Reign

Question ID : 264330151826
Option 1 ID : 264330594933
Option 2 ID : 264330594934
Option 3 ID : 264330594931
Option 4 ID : 264330594932
Status : Answered
Chosen Option : 1

Q.19 Select the most appropriate ANTONYM of the given word.
Align

- Ans 1. Position
 2. Disrupt
 3. Centre
 4. Coincide

Question ID : 264330152590
Option 1 ID : 264330597964
Option 2 ID : 264330597963
Option 3 ID : 264330597965
Option 4 ID : 264330597966
Status : Answered
Chosen Option : 2

Q.20 Select the option that rectifies the spelling of the underlined word in the given sentence.

One of her colleagues had agreed to act as the arbitrator in finalising the contract.

- Ans 1. arbitetrator
 2. arbitor
 3. arbitraitor
 4. arbitrator

Question ID : 264330153226
Option 1 ID : 264330600464
Option 2 ID : 264330600465
Option 3 ID : 264330600466
Option 4 ID : 264330600463
Status : Answered
Chosen Option : 4

Comprehension:

In the following passage, some words have been deleted. Read the passage carefully and select the most appropriate option to fill in each blank.

There will only be two types of human beings in the future: the minority having enormous brains and (1)_____ bodies, and the majority with tiny brains and muscular bodies. The size of the average brain will (2)_____ diminish; not because of our innate laziness, but because of our over-concern about our physical appearance. In the old days, most people dreamt of having shelter and a stable food supply. As we no longer struggle for the basic (3)_____, our dreams focus instead on the search for physical beauty, how to obtain and maintain the 'ideal body shape' and healthy life the media promotes. Physical beauty will become the main goal of the majority. They'll do exercises every day, taking (4)_____ to maintain their shape while not noticing that their brains are shrinking. Actually, there is no doubt that they'll work (5)_____ hard to make their brains smaller.

SubQuestion No : 21

Q.21 Select the most appropriate option to fill in blank number 1.

- Ans
- 1. cute
 - 2. minor
 - 3. tiny
 - 4. minute

Question ID : 264330153054

Option 1 ID : 264330599780

Option 2 ID : 264330599781

Option 3 ID : 264330599779

Option 4 ID : 264330599782

Status : Answered

Chosen Option : 3

Comprehension:

In the following passage, some words have been deleted. Read the passage carefully and select the most appropriate option to fill in each blank.

There will only be two types of human beings in the future: the minority having enormous brains and (1)_____ bodies, and the majority with tiny brains and muscular bodies. The size of the average brain will (2)_____ diminish; not because of our innate laziness, but because of our over-concern about our physical appearance. In the old days, most people dreamt of having shelter and a stable food supply. As we no longer struggle for the basic (3)_____, our dreams focus instead on the search for physical beauty, how to obtain and maintain the 'ideal body shape' and healthy life the media promotes. Physical beauty will become the main goal of the majority. They'll do exercises every day, taking (4)_____ to maintain their shape while not noticing that their brains are shrinking. Actually, there is no doubt that they'll work (5)_____ hard to make their brains smaller.

SubQuestion No : 22

Q.22 Select the most appropriate option to fill in blank number 2.

- Ans
- 1. properly
 - 2. gradually
 - 3. appropriately
 - 4. slightly

Question ID : 264330153055

Option 1 ID : 264330599783

Option 2 ID : 264330599784

Option 3 ID : 264330599786

Option 4 ID : 264330599785

Status : Answered

Chosen Option : 2

Comprehension:

In the following passage, some words have been deleted. Read the passage carefully and select the most appropriate option to fill in each blank.

There will only be two types of human beings in the future: the minority having enormous brains and (1)_____ bodies, and the majority with tiny brains and muscular bodies. The size of the average brain will (2)_____ diminish; not because of our innate laziness, but because of our over-concern about our physical appearance. In the old days, most people dreamt of having shelter and a stable food supply. As we no longer struggle for the basic (3)_____, our dreams focus instead on the search for physical beauty, how to obtain and maintain the 'ideal body shape' and healthy life the media promotes. Physical beauty will become the main goal of the majority. They'll do exercises every day, taking (4)_____ to maintain their shape while not noticing that their brains are shrinking. Actually, there is no doubt that they'll work (5)_____ hard to make their brains smaller.

SubQuestion No : 23

Q.23 Select the most appropriate option to fill in blank number 3.

Ans 1. necessities

2. identities

3. facilities

4. amenities

Question ID : 264330153056

Option 1 ID : 264330599789

Option 2 ID : 264330599790

Option 3 ID : 264330599788

Option 4 ID : 264330599787

Status : Answered

Chosen Option : 1

Comprehension:

In the following passage, some words have been deleted. Read the passage carefully and select the most appropriate option to fill in each blank.

There will only be two types of human beings in the future: the minority having enormous brains and (1)_____ bodies, and the majority with tiny brains and muscular bodies. The size of the average brain will (2)_____ diminish; not because of our innate laziness, but because of our over-concern about our physical appearance. In the old days, most people dreamt of having shelter and a stable food supply. As we no longer struggle for the basic (3)_____, our dreams focus instead on the search for physical beauty, how to obtain and maintain the 'ideal body shape' and healthy life the media promotes. Physical beauty will become the main goal of the majority. They'll do exercises every day, taking (4)_____ to maintain their shape while not noticing that their brains are shrinking. Actually, there is no doubt that they'll work (5)_____ hard to make their brains smaller.

SubQuestion No : 24

Q.24 Select the most appropriate option to fill in blank number 4.

Ans 1. nutrition

2. nutrients

3. preservatives

4. additives

Question ID : 264330153057

Option 1 ID : 264330599792

Option 2 ID : 264330599791

Option 3 ID : 264330599794

Option 4 ID : 264330599793

Status : Answered

Chosen Option : 4

Comprehension:

In the following passage, some words have been deleted. Read the passage carefully and select the most appropriate option to fill in each blank.

There will only be two types of human beings in the future: the minority having enormous brains and (1)_____ bodies, and the majority with tiny brains and muscular bodies. The size of the average brain will (2)_____ diminish; not because of our innate laziness, but because of our over-concern about our physical appearance. In the old days, most people dreamt of having shelter and a stable food supply. As we no longer struggle for the basic (3)_____, our dreams focus instead on the search for physical beauty, how to obtain and maintain the 'ideal body shape' and healthy life the media promotes. Physical beauty will become the main goal of the majority. They'll do exercises every day, taking (4)_____ to maintain their shape while not noticing that their brains are shrinking. Actually, there is no doubt that they'll work (5)_____ hard to make their brains smaller.

SubQuestion No : 25

Q.25 Select the most appropriate option to fill in blank number 5.

- Ans 1. so
 2. rarely
 3. impishly
 4. extremely

Question ID : 264330153058

Option 1 ID : 264330599795

Option 2 ID : 264330599796

Option 3 ID : 264330599798

Option 4 ID : 264330599797

Status : Answered

Chosen Option : 3