

SSC MTS 2023 Tier 1 Sept 13 Shift 2 Question Paper with Answers

Roll Number	
Candidate Name	
Exam Date	13/09/2023
Exam Time	12:30 PM - 2:30 PM
Subject	MTS Non Tech Havaldar CBIC and CBN Examination 2023

Section : Numerical and Mathematical Ability

Q.1 A policeman sees a thief and starts chasing him. The distance between the thief and the policeman is 200 m and the speed of the thief is 8 km/h. If the policeman was able to catch the thief in 20 minutes, then the speed of the policeman is _____ km/h.

- Ans**
- 1. 8.4
 - 2. 9.2
 - 3. 8.6
 - 4. 8.2

Question ID : 264330153812
Option 1 ID : 264330602713
Option 2 ID : 264330602711
Option 3 ID : 264330602714
Option 4 ID : 264330602712
Status : Answered
Chosen Option : 3

Q.2 What sum of money (in ₹) will amount to ₹20,400 at the rate of 9% per annum simple interest in four years?

- Ans**
- 1. 18,000
 - 2. 12,000
 - 3. 20,000
 - 4. 15,000

Question ID : 264330156485
Option 1 ID : 264330613327
Option 2 ID : 264330613329
Option 3 ID : 264330613328
Option 4 ID : 264330613330
Status : Answered
Chosen Option : 4

Q.3 A medical store owner purchased medicines worth ₹18,000 from a company. He sold $\frac{2}{5}$ part of the medicine at a 35% loss. On which gain, he should sell the rest of the medicines so that he has neither gain nor loss?

- Ans**
- ✗ 1. $23\frac{2}{3}\%$
- ✗ 2. $20\frac{2}{3}\%$
- ✗ 3. $20\frac{1}{3}\%$
- ✓ 4. $23\frac{1}{3}\%$

Question ID : 264330155736
 Option 1 ID : 264330610348
 Option 2 ID : 264330610350
 Option 3 ID : 264330610347
 Option 4 ID : 264330610349
 Status : Answered
 Chosen Option : 4

Q.4 A mixture contains spirit and water in the ratio 3 : 2. If 2 litres of water is added to the mixture, the ratio becomes 5 : 4. Find the quantity of spirit in the mixture (in litres).

- Ans**
- ✓ 1. 15
- ✗ 2. 20
- ✗ 3. 25
- ✗ 4. 10

Question ID : 264330153844
 Option 1 ID : 264330602840
 Option 2 ID : 264330602839
 Option 3 ID : 264330602841
 Option 4 ID : 264330602842
 Status : Answered
 Chosen Option : 1

Q.5 A table showing the percentages of the total population of a Town by age group for the year 2016 is given below.

Age Group (in years)	Per cent
up to 15	35
16-30	18.5
30-40	12.5
40-50	25.77
51 and above	8.23

Out of every 1920 persons, the number of persons below 16 years is:

- Ans**
- ✓ 1. 672
- ✗ 2. 355
- ✗ 3. 312
- ✗ 4. 1027

Question ID : 264330153886
 Option 1 ID : 264330603008
 Option 2 ID : 264330603007
 Option 3 ID : 264330603009
 Option 4 ID : 264330603010
 Status : Answered
 Chosen Option : 1

Q.6 A number decreased by $\frac{75}{2}\%$ gives 378. What is the number?

- Ans
- 1. 606.4
 - 2. 608.0
 - 3. 603.2
 - 4. 604.8

Question ID : 264330155698
Option 1 ID : 264330610197
Option 2 ID : 264330610198
Option 3 ID : 264330610195
Option 4 ID : 264330610196
Status : Answered
Chosen Option : 4

Q.7 The LCM of the two numbers is 1440 and their HCF is 32. If the first number is 288, then find the second number.

- Ans
- 1. 150
 - 2. 145
 - 3. 180
 - 4. 160

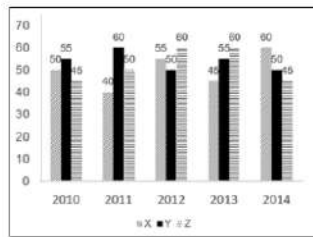
Question ID : 264330155724
Option 1 ID : 264330610300
Option 2 ID : 264330610301
Option 3 ID : 264330610302
Option 4 ID : 264330610299
Status : Answered
Chosen Option : 4

Q.8 A lady travels a distance of 150 metres in 30 minutes and the next 350 metres in 50 minutes. Her average speed during the whole journey is:

- Ans
- 1. $\frac{21}{24}$ km/h
 - 2. $\frac{11}{24}$ km/h
 - 3. $\frac{9}{24}$ km/h
 - 4. $\frac{7}{24}$ km/h

Question ID : 264330156513
Option 1 ID : 264330613441
Option 2 ID : 264330613439
Option 3 ID : 264330613440
Option 4 ID : 264330613442
Status : Answered
Chosen Option : 3

- Q.9** The graph shows the production of tyres (in Lakhs) by three different companies X, Y, and Z over the years.
Directions: Study the following graph carefully to answer the question given below it.



What is the difference between the production of company Z in 2010 and the production of company X in 2014?

- Ans**
- 1. 20 lakhs
 - 2. 15 lakhs
 - 3. 10 lakhs
 - 4. 5 lakhs

Question ID : 264330153888

Option 1 ID : 264330603018

Option 2 ID : 264330603016

Option 3 ID : 264330603015

Option 4 ID : 264330603017

Status : Answered

Chosen Option : 2

- Q.10** Three years ago, the value of car was ₹2,50,000. If the value depreciates by 6% every year, its value now is:

- Ans**
- 1. ₹2,04,676
 - 2. ₹2,07,646
 - 3. ₹2,07,466
 - 4. ₹2,04,766

Question ID : 264330153879

Option 1 ID : 264330602981

Option 2 ID : 264330602980

Option 3 ID : 264330602979

Option 4 ID : 264330602982

Status : Answered

Chosen Option : 2

- Q.11** The income of A and B are in the ratio of 5 : 4 and the income of B and C are in the ratio of 5 : 6. What is the ratio of incomes of A and C?

- Ans**
- 1. 5 : 6
 - 2. 24 : 25
 - 3. 25 : 24
 - 4. 6 : 5

Question ID : 264330153805

Option 1 ID : 264330602685

Option 2 ID : 264330602684

Option 3 ID : 264330602683

Option 4 ID : 264330602686

Status : Answered

Chosen Option : 3

Q.12 Find the volume a cube, each of whose sides measures 7 cm.

- Ans
- ✓ 1. 343 cm^3
 - ✗ 2. 282 cm^3
 - ✗ 3. 294 cm^3
 - ✗ 4. 49 cm^3

Question ID : 264330153895
Option 1 ID : 264330603045
Option 2 ID : 264330603044
Option 3 ID : 264330603046
Option 4 ID : 264330603043
Status : Answered
Chosen Option : 1

Q.13 A person crosses a 750 m long street in 5 minutes. Find his speed in km/h.

- Ans
- ✗ 1. 8.40
 - ✓ 2. 9.00
 - ✗ 3. 7.20
 - ✗ 4. 10.80

Question ID : 264330156365
Option 1 ID : 264330612860
Option 2 ID : 264330612861
Option 3 ID : 264330612859
Option 4 ID : 264330612862
Status : Answered
Chosen Option : 2

Q.14 While calculating the average marks of a class, the score increased by 0.5 when marks of one student is wrongly entered as 54 instead of 45. The number of students in the class is:

- Ans
- ✗ 1. 36
 - ✓ 2. 18
 - ✗ 3. 45
 - ✗ 4. 54

Question ID : 264330154041
Option 1 ID : 264330603630
Option 2 ID : 264330603629
Option 3 ID : 264330603628
Option 4 ID : 264330603627
Status : Answered
Chosen Option : 2

Q.15 Two cuboids of dimension $2 \times 3 \times 4$ units and $2 \times 5 \times 4$ units are melted and a single cube is made. What is the side of the cube in units?

- Ans
- 1. 3.5
 - 2. 3.0
 - 3. 4.0
 - 4. 2.5

Question ID : 264330153828

Option 1 ID : 264330602777

Option 2 ID : 264330602776

Option 3 ID : 264330602778

Option 4 ID : 264330602775

Status : Answered

Chosen Option : 3

Q.16 Simplify the following expression.

$$\left(\frac{5}{3} + \frac{6}{5} \div \frac{18}{5} \right) \text{ of } \frac{5}{12} - \left(\frac{5}{6} \div \frac{5}{12} \right) \text{ of } \frac{5}{12} + \frac{2}{3} \text{ of } \frac{3}{2}$$

- Ans
- 1. 1
 - 2. $\frac{5}{6}$
 - 3. $\frac{6}{5}$
 - 4. 0

Question ID : 264330153832

Option 1 ID : 264330602792

Option 2 ID : 264330602793

Option 3 ID : 264330602794

Option 4 ID : 264330602791

Status : Answered

Chosen Option : 1

Q.17 A can complete a piece of work in 40 days and B can complete the same work in 60 days. They work together for 8 days. How much work is left?

- Ans
- 1. $\frac{2}{5}$
 - 2. $\frac{1}{5}$
 - 3. $\frac{2}{3}$
 - 4. $\frac{1}{3}$

Question ID : 264330155973

Option 1 ID : 264330611294

Option 2 ID : 264330611293

Option 3 ID : 264330611292

Option 4 ID : 264330611291

Status : Answered

Chosen Option : 3

Q.18 Ramesh purchased a bag for ₹1,275 and sold it at a gain of 15% but calculated on the selling price. Find the selling price of the bag.

- Ans
- 1. ₹1,325
 - 2. ₹1,400
 - 3. ₹1,475
 - 4. ₹1,500

Question ID : 264330158210
Option 1 ID : 264330620199
Option 2 ID : 264330620200
Option 3 ID : 264330620201
Option 4 ID : 264330620202
Status : Answered
Chosen Option : 3

Q.19 If the average marks of three sections of Class IX, having 25, 35 and 40 students, respectively, is 60, 70 and 80, then the average marks of all the students of Class IX is:

- Ans
- 1. 75
 - 2. 71.5
 - 3. 70.5
 - 4. 72

Question ID : 264330156467
Option 1 ID : 264330613255
Option 2 ID : 264330613256
Option 3 ID : 264330613257
Option 4 ID : 264330613258
Status : Answered
Chosen Option : 2

Q.20 A and B can do a piece of work in 5 days. B and C can do the same work in 8 days, while C and A can do it in 16 days. Find the time (in days) in which A, B and C can finish the work, working together.

- Ans
- 1. $5\frac{4}{31}$
 - 2. $4\frac{5}{31}$
 - 3. $5\frac{5}{17}$
 - 4. $5\frac{5}{31}$

Question ID : 264330155756
Option 1 ID : 264330610428
Option 2 ID : 264330610427
Option 3 ID : 264330610430
Option 4 ID : 264330610429
Status : Answered
Chosen Option : 4

Q.1 What should come in place of ? in the given series?

10 21 43 87 175 ?

- Ans**
- 1. 308
 - 2. 351
 - 3. 376
 - 4. 367

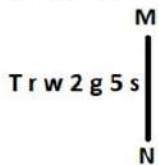
Question ID : 264330151556
 Option 1 ID : 264330593853
 Option 2 ID : 264330593854
 Option 3 ID : 264330593851
 Option 4 ID : 264330593852
 Status : Answered
 Chosen Option : 2

Q.2 If 'P' stands for '×', 'Q' stands for '+', 'R' stands for '-' and 'S' stands for '÷', what will come in place of the question mark (?) in the following equation?
 9 P 9 R (7 P 3) S 24 R 6 P 2 = ?

- Ans**
- 1. 76
 - 2. 72
 - 3. 63
 - 4. 54

Question ID : 264330151794
 Option 1 ID : 264330594804
 Option 2 ID : 264330594806
 Option 3 ID : 264330594805
 Option 4 ID : 264330594803
 Status : Answered
 Chosen Option : 2

Q.3 Select the correct mirror image of the given figure when the mirror is placed at MN as shown below.



- Ans**
- 1. s5g2wJl
 - 2. 22g5w1T
 - 3. 22g5w1T
 - 4. 22gw21T

Question ID : 264330151517
 Option 1 ID : 264330593696
 Option 2 ID : 264330593695
 Option 3 ID : 264330593698
 Option 4 ID : 264330593697
 Status : Answered
 Chosen Option : 3

Q.4 Select the word-pair that best represents a similar relationship to the one expressed in the pair of words given below.

(The words must be considered as meaningful English words and must not be related to each other based on the number of letters/number of consonants/vowels in the word)

Lava : Volcano

- Ans**
- 1. Avalanche : Ice
 - 2. Ice : Glass
 - 3. Steam : Geyser
 - 4. Cascade : Precipice

Question ID : 264330154637
Option 1 ID : 264330606014
Option 2 ID : 264330606011
Option 3 ID : 264330606013
Option 4 ID : 264330606012
Status : Answered
Chosen Option : 3

Q.5 In a certain code language, 'krishi might be coming' is written as 'gi ji hi fi' and 'prem will be going' is written as 'li mi ri hi'. How is 'be' written in the given language?

- Ans**
- 1. li
 - 2. ri
 - 3. hi
 - 4. mi

Question ID : 264330155636
Option 1 ID : 264330609947
Option 2 ID : 264330609950
Option 3 ID : 264330609949
Option 4 ID : 264330609948
Status : Answered
Chosen Option : 3

Q.6 What should come in place of ? in the given series?

16 20 28 40 56 ?

- Ans**
- 1. 78
 - 2. 69
 - 3. 75
 - 4. 76

Question ID : 264330151714
Option 1 ID : 264330594484
Option 2 ID : 264330594485
Option 3 ID : 264330594486
Option 4 ID : 264330594483
Status : Answered
Chosen Option : 4

Q.7 10 is related to 97 following a certain logic. Following the same logic, 12 is related to 141. To which of the following is 14 related to, following the same logic?

- Ans** 1. 193
 2. 191
 3. 194
 4. 192

Question ID : 264330151600
Option 1 ID : 264330594029
Option 2 ID : 264330594027
Option 3 ID : 264330594030
Option 4 ID : 264330594028
Status : Answered
Chosen Option : 1

Q.8 If F means '-', G means '×', D means '+', B means '÷', then what will come in place of the question mark (?) in the following equation?

$$15 G 10 D 30 B 43 F 28 = ?$$

- Ans** 1. 30
 2. 20
 3. 25
 4. 10

Question ID : 264330154683
Option 1 ID : 264330606198
Option 2 ID : 264330606196
Option 3 ID : 264330606197
Option 4 ID : 264330606195
Status : Answered
Chosen Option : 2

Q.9 What should come in place of '?' in the given series?

$$46 \quad ? \quad 358 \quad 1060 \quad 3166 \quad 9484 \quad 28438$$

- Ans** 1. 132
 2. 122
 3. 116
 4. 124

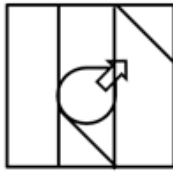
Question ID : 264330151444
Option 1 ID : 264330593404
Option 2 ID : 264330593403
Option 3 ID : 264330593406
Option 4 ID : 264330593405
Status : Not Answered
Chosen Option : --

Q.10 Select the option figure in which the given figure (X) is embedded as its part (rotation is NOT allowed).

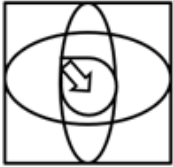


Ans

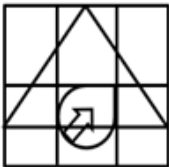
✗ 1.



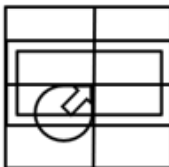
✗ 2.



✗ 3.



✓ 4.



Question ID : 264330151731
 Option 1 ID : 264330594554
 Option 2 ID : 264330594552
 Option 3 ID : 264330594553
 Option 4 ID : 264330594551
 Status : Answered
 Chosen Option : 4

Q.11 12 is related to 59 following a certain logic. Following the same logic, 17 is related to 84. To which of the following is 19 related to, following the same logic?

Ans ✗ 1. 91

✓ 2. 94

✗ 3. 93

✗ 4. 92

Question ID : 264330151588
 Option 1 ID : 264330593979
 Option 2 ID : 264330593982
 Option 3 ID : 264330593981
 Option 4 ID : 264330593980
 Status : Answered
 Chosen Option : 2

Q.12 In a certain code language, 'DEAF' is coded as '5718' and 'HEAD' is coded as '8137'. What is the code for 'H' in the given code language?

- Ans**
- 1. 1
 - 2. 3
 - 3. 8
 - 4. 7

Question ID : 264330151694
Option 1 ID : 264330594405
Option 2 ID : 264330594403
Option 3 ID : 264330594406
Option 4 ID : 264330594404
Status : Answered
Chosen Option : 2

Q.13 What should come in place of ? in the given series based on the English alphabetical order?

YIQ, AKR, CMS, EOT, ?

- Ans**
- 1. HPV
 - 2. GQU
 - 3. FPU
 - 4. FRV

Question ID : 264330155785
Option 1 ID : 264330610546
Option 2 ID : 264330610544
Option 3 ID : 264330610545
Option 4 ID : 264330610543
Status : Answered
Chosen Option : 2

Q.14 What should come in place of ? in the given series based on the English alphabetical order?

FQS, IUT, LYU, OCV, ?

- Ans**
- 1. QFV
 - 2. QHU
 - 3. SHV
 - 4. RGW

Question ID : 264330155798
Option 1 ID : 264330610595
Option 2 ID : 264330610597
Option 3 ID : 264330610598
Option 4 ID : 264330610596
Status : Answered
Chosen Option : 4

Q.15 Read the given statements and conclusions carefully. You have to take the given statements to be true even if they seem to be at variance from commonly known facts. You have to decide which conclusion/s logically follow/s from the given statements.

Statements: All wool is crochet. Some crochet are skirts. All skirts are bread.

Conclusion I: Some crochet is wool.

Conclusion II: Some bread is crochet.

- Ans**
- 1. Neither conclusion (I) nor (II) is follow.
 - 2. Only conclusion (I) is follow.
 - 3. Both conclusions (I) and (II) are follow.
 - 4. Only conclusion (II) is follow.

Question ID : 264330155933

Option 1 ID : 264330611137

Option 2 ID : 264330611135

Option 3 ID : 264330611138

Option 4 ID : 264330611136

Status : Answered

Chosen Option : 3

Q.16 K, L, M, N, O, P, Q and R are sitting around a square table facing the center of the table. Some of them are sitting at the corners while some are sitting at the exact center of the sides. R sits second to the right of Q. Q sits in one of the corners. M sits third to the left of N. M does not sit in any of the corners. O is the immediate neighbour of Q and R. K is not the neighbour of N. L sits third to the left of R.

How many people sit between K and Q, when counted from the right of K?

- Ans**
- 1. Two
 - 2. One
 - 3. Three
 - 4. Four

Question ID : 264330155537

Option 1 ID : 264330609552

Option 2 ID : 264330609551

Option 3 ID : 264330609553

Option 4 ID : 264330609554

Status : Answered

Chosen Option : 3

Q.17 Read the given statements and conclusions carefully. You have to take the given statements to be true even if they seem to be at variance from commonly known facts. You have to decide which conclusion/s logically follow/s from the given statements.

Statements: Some chairs are fans. All fans are pots. Some pots are hot.

Conclusion I: Some fans are chairs.

Conclusion II: Some hot are pots.

- Ans**
- 1. Only conclusion (I) is follow.
 - 2. Both conclusions (I) and (II) are follow.
 - 3. Only conclusion (II) is follow.
 - 4. Neither conclusion (I) nor (II) is follow.

Question ID : 264330155897

Option 1 ID : 264330610991

Option 2 ID : 264330610994

Option 3 ID : 264330610992

Option 4 ID : 264330610993

Status : Answered

Chosen Option : 2

Q.18 Select the combination of letters that when sequentially placed in the blanks of the given series, will complete the series.

P _ Q _ QQ _ _ Q P _ Q

- Ans**
- 1. PPQQP
 - 2. QPPQQ
 - 3. PPQPP
 - 4. QPQPQ

Question ID : 264330151651
 Option 1 ID : 264330594231
 Option 2 ID : 264330594232
 Option 3 ID : 264330594233
 Option 4 ID : 264330594234
 Status : Answered
 Chosen Option : 2

Q.19 Which figure should replace the question mark (?) if the following figure series were to be continued?

Z	7	4	=	
B 4 7 =	= Z S B	S B = Z	Z 4 F S	?
S	4	F	B	

Ans

1.

S
= F 4 B
Z

2.

B
S Z 4 F
△

3.

B
F S 4 Z
△

4.

B
F S Z 4
△

Question ID : 264330154749
 Option 1 ID : 264330606459
 Option 2 ID : 264330606461
 Option 3 ID : 264330606462
 Option 4 ID : 264330606460
 Status : Answered
 Chosen Option : 3

Q.20 If 7th Nov 2005 is Monday, then what will be the day of the week on 17th Nov 2015?

- Ans**
- 1. Monday
 - 2. Tuesday
 - 3. Saturday
 - 4. Friday

Question ID : 264330154336
Option 1 ID : 264330604808
Option 2 ID : 264330604807
Option 3 ID : 264330604810
Option 4 ID : 264330604809
Status : Answered
Chosen Option : 2

Section : General Awareness

Q.1 The novel 'God of Small Things' is a creation of which novelist?

- Ans**
- 1. Kamala Das
 - 2. Amrita Pritam
 - 3. Ashapurna Devi
 - 4. Arundhati Roy

Question ID : 264330160970
Option 1 ID : 264330631212
Option 2 ID : 264330631213
Option 3 ID : 264330631211
Option 4 ID : 264330631214
Status : Not Answered
Chosen Option : --

Q.2 Which of the following terms best describes the average number of runs a batter makes per 100 deliveries in cricket?

- Ans**
- 1. Economy rate
 - 2. Batting average
 - 3. Strike rate
 - 4. Batting rate

Question ID : 264330161160
Option 1 ID : 264330631971
Option 2 ID : 264330631973
Option 3 ID : 264330631972
Option 4 ID : 264330631974
Status : Answered
Chosen Option : 3

Q.3 Yuki Bhambri and Saketh Myneni won the Bangkok Open Challenger title 2023. They are related to which sport?

- Ans
- 1. Badminton
 - 2. Squash
 - 3. Tennis
 - 4. Table Tennis

Question ID : 264330158368
Option 1 ID : 264330620832
Option 2 ID : 264330620834
Option 3 ID : 264330620831
Option 4 ID : 264330620833
Status : Not Answered
Chosen Option : --

Q.4 Deba Prasad Das, Pankaj Charan Das and Gangadhar Pradhan are associated with which of the following dance forms?

- Ans
- 1. Odissi
 - 2. Bharatanatyam
 - 3. Manipuri
 - 4. Kathak

Question ID : 264330160814
Option 1 ID : 264330630587
Option 2 ID : 264330630589
Option 3 ID : 264330630590
Option 4 ID : 264330630588
Status : Not Answered
Chosen Option : --

Q.5 Which of the following is NOT a fundamental duty listed in the Indian Constitution?

- Ans
- 1. To uphold and protect the sovereignty, unity and integrity of India
 - 2. To engage in political activities to promote democracy
 - 3. To value and preserve the rich heritage of our composite culture
 - 4. To safeguard public property and to abjure violence

Question ID : 264330162246
Option 1 ID : 264330636311
Option 2 ID : 264330636314
Option 3 ID : 264330636313
Option 4 ID : 264330636312
Status : Answered
Chosen Option : 1

Q.6 As of 2022, 12-foot statue of Adi Shankaracharya, which was unveiled by the Prime Minister of India is located in _____

- Ans
- 1. Pune
 - 2. Ahmedabad
 - 3. Varanasi
 - 4. Kedarnath

Question ID : 264330162698
Option 1 ID : 264330638113
Option 2 ID : 264330638114
Option 3 ID : 264330638112
Option 4 ID : 264330638111
Status : Answered
Chosen Option : 1

Q.7 During cell division, the formation of a new cell wall is followed by the accumulation of:

- Ans**
- 1. peristome
 - 2. periplasm
 - 3. phragmoplast
 - 4. protoplast

Question ID : 264330156616
Option 1 ID : 264330613854
Option 2 ID : 264330613853
Option 3 ID : 264330613851
Option 4 ID : 264330613852
Status : Answered
Chosen Option : 4

Q.8 Bhanu Ji is associated with which of the following Gharanas of Kathak?

- Ans**
- 1. Lucknow
 - 2. Raigarh
 - 3. Banaras
 - 4. Jaipur

Question ID : 264330160808
Option 1 ID : 264330630564
Option 2 ID : 264330630566
Option 3 ID : 264330630565
Option 4 ID : 264330630563
Status : Not Answered
Chosen Option : --

Q.9 Which of the following is an example of capital expenditure in the government budget?

- Ans**
- 1. Interest payment on a loan
 - 2. Purchase of military equipment
 - 3. Maintenance of government buildings
 - 4. Subsidies provided to farmers

Question ID : 264330157276
Option 1 ID : 264330616469
Option 2 ID : 264330616468
Option 3 ID : 264330616470
Option 4 ID : 264330616467
Status : Answered
Chosen Option : 2

Q.10 FIH Men's Hockey World Cup 2023 was held in which Indian state/UT?

- Ans**
- 1. Maharashtra
 - 2. New Delhi
 - 3. Odisha
 - 4. Gujarat

Question ID : 264330158218
Option 1 ID : 264330620232
Option 2 ID : 264330620233
Option 3 ID : 264330620231
Option 4 ID : 264330620234
Status : Answered
Chosen Option : 3

Q.11 An image of which of the following elements is shown by the map of Cyprus from which the element got its name?

- Ans
- 1. Silver
 - 2. Cobalt
 - 3. Copper
 - 4. Sulphur

Question ID : 264330161058
Option 1 ID : 264330631564
Option 2 ID : 264330631566
Option 3 ID : 264330631565
Option 4 ID : 264330631563
Status : Answered
Chosen Option : 3

Q.12 Consider the following statements about Abhinav Bharat Society.

- 1) The society was a community of socialists believed in an armed revolution.
- 2) The society was founded by Jaya Prakash Narayan.
- 3) Mitra Mela, a revolutionary secret society was renamed Abhinav Bharat in 1904.

Select the correct statement(s) using the codes given below.

- Ans
- 1. Both 1 and 2
 - 2. 1, 2 and 3
 - 3. Both 2 and 3
 - 4. Both 1 and 3

Question ID : 264330160884
Option 1 ID : 264330630867
Option 2 ID : 264330630870
Option 3 ID : 264330630869
Option 4 ID : 264330630868
Status : Answered
Chosen Option : 3

Q.13 The Pradhan Mantri Garib Kalyan Rojgar Abhiyaan (PMGKRA) was launched in the year 2020 by which Ministry of Government of India?

- Ans
- 1. Ministry of Ports, Shipping and Waterways
 - 2. Ministry of Social Justice and Empowerment
 - 3. Ministry of Micro, Small and Medium Enterprises
 - 4. Ministry of Rural Development

Question ID : 264330161577
Option 1 ID : 264330633637
Option 2 ID : 264330633636
Option 3 ID : 264330633635
Option 4 ID : 264330633638
Status : Answered
Chosen Option : 4

Q.14 Who among the following is the author of the Hindi novel 'Raag Darbari'?

- Ans 1. Shrilal Shukla
 2. Rahul Sankrityayan
 3. Premchand
 4. Kashinath Singh

Question ID : 264330161763
Option 1 ID : 264330634382
Option 2 ID : 264330634380
Option 3 ID : 264330634381
Option 4 ID : 264330634379
Status : Not Answered
Chosen Option : --

Q.15 Who is the first female classical dancer in Indian history to be nominated as a Member of Rajya Sabha, the upper house of the Parliament of India?

- Ans 1. Mukti Mohan
 2. Shobha Naidu
 3. Sanjukta Panigrahi
 4. Rukmini Devi Arundale

Question ID : 264330160982
Option 1 ID : 264330631262
Option 2 ID : 264330631259
Option 3 ID : 264330631260
Option 4 ID : 264330631261
Status : Not Answered
Chosen Option : --

Q.16 What does the term 'Overdraft' mean in banking?

- Ans 1. The process of transferring funds between bank accounts
 2. The maximum withdrawal limit from an ATM
 3. Short-term financing facility
 4. The interest charged on loans

Question ID : 264330161586
Option 1 ID : 264330633671
Option 2 ID : 264330633673
Option 3 ID : 264330633674
Option 4 ID : 264330633672
Status : Answered
Chosen Option : 3

Q.17 Which of the following is an example of Eastern Ghats peak?

- Ans 1. Doddabetta
 2. Mahendragiri
 3. Guru Shikhar
 4. Anamudi

Question ID : 264330161494
Option 1 ID : 264330633303
Option 2 ID : 264330633306
Option 3 ID : 264330633305
Option 4 ID : 264330633304
Status : Answered
Chosen Option : 4

Q.18 Indian musician, Pandit Hari Prasad Chaurasia used to play which of the following musical instruments?

- Ans 1. Veena
 2. Flute
 3. Sarangi
 4. Guitar

Question ID : 264330161766
Option 1 ID : 264330634391
Option 2 ID : 264330634394
Option 3 ID : 264330634392
Option 4 ID : 264330634393
Status : Not Answered
Chosen Option : --

Q.19 Which of the following was the first major and decisive victory for the East India Company on the soil of India?

- Ans 1. Battle of Sindhuli
 2. First Anglo-Maratha War
 3. Battle of Plassey
 4. Battle of Tiruvannamalai

Question ID : 264330161736
Option 1 ID : 264330634274
Option 2 ID : 264330634272
Option 3 ID : 264330634273
Option 4 ID : 264330634271
Status : Answered
Chosen Option : 3

Q.20 Which of the following locations receives the most rainfall in India?

- Ans 1. Prayagraj
 2. Guwahati
 3. Jaisalmer
 4. Mawsynram

Question ID : 264330161306
Option 1 ID : 264330632551
Option 2 ID : 264330632553
Option 3 ID : 264330632554
Option 4 ID : 264330632552
Status : Answered
Chosen Option : 4

Q.21 According to the Census of India 2011, what was the literacy rate recorded in Kerala?

- Ans 1. 85.8%
 2. 90.3%
 3. 87.9%
 4. 94.0%

Question ID : 264330161556
Option 1 ID : 264330633554
Option 2 ID : 264330633552
Option 3 ID : 264330633553
Option 4 ID : 264330633551
Status : Answered
Chosen Option : 2

Q.22 The Digital Lok Adalat, powered by AI (Artificial Intelligence) and Blockchain, was launched by the then National Legal Services Authority Chairman _____ during the 18th All India Legal Services Authorities' meet held in Jaipur in July 2022.

- Ans
- 1. Justice RN Mishra
 - 2. Justice DY Chandrachud
 - 3. Justice AS Anand
 - 4. Justice Uday Umesh Lalit

Question ID : 264330161412
Option 1 ID : 264330632978
Option 2 ID : 264330632976
Option 3 ID : 264330632977
Option 4 ID : 264330632975
Status : Answered
Chosen Option : 2

Q.23 Janmashtami is a Hindu festival that celebrates the birth (janma) of the god, Krishna on the eighth (ashtami) day of the dark fortnight of the Hindu month of _____.

- Ans
- 1. Bhadrapada
 - 2. Ashwin
 - 3. Shravan
 - 4. Ashadha

Question ID : 264330160829
Option 1 ID : 264330630647
Option 2 ID : 264330630649
Option 3 ID : 264330630648
Option 4 ID : 264330630650
Status : Answered
Chosen Option : 1

Q.24 Which of the following music directors is known as 'Mozart of Madras'?

- Ans
- 1. AR Rahman
 - 2. Madan Mohan
 - 3. RD Burman
 - 4. Himesh Reshammiya

Question ID : 264330162285
Option 1 ID : 264330636468
Option 2 ID : 264330636470
Option 3 ID : 264330636467
Option 4 ID : 264330636469
Status : Answered
Chosen Option : 3

Q.25 What is the tenure of the Vice-President of India?

- Ans
- 1. Until the age of 65
 - 2. Until he wants to hold the office
 - 3. 6 years
 - 4. 5 years

Question ID : 264330159911
Option 1 ID : 264330626991
Option 2 ID : 264330626994
Option 3 ID : 264330626992
Option 4 ID : 264330626993
Status : Answered
Chosen Option : 4

Section : English Language and Comprehension

Q.1 Select the most appropriate option that can substitute the underlined segment in the given sentence.

If I hand her a flower and say, "Give it to mamma," she take it to her mother.

- Ans
- 1. was taking it
 - 2. takes it
 - 3. had took it
 - 4. had taken it

Question ID : 264330153488
Option 1 ID : 264330601468
Option 2 ID : 264330601470
Option 3 ID : 264330601469
Option 4 ID : 264330601467
Status : Answered
Chosen Option : 2

Q.2 Select the most appropriate ANTONYM of the given word.
Divergent

- Ans
- 1. Addition
 - 2. Similar
 - 3. Disrespectful
 - 4. Obvious

Question ID : 264330152721
Option 1 ID : 264330598485
Option 2 ID : 264330598484
Option 3 ID : 264330598483
Option 4 ID : 264330598486
Status : Answered
Chosen Option : 2

Q.3 Parts of the following sentence have been underlined and given as options. Select the option that contains an error.

To much seriousness hardens the world, pinning it down with rules.

- Ans
- 1. with rules
 - 2. hardens the
 - 3. to much
 - 4. world, pinning

Question ID : 264330153204
Option 1 ID : 264330600378
Option 2 ID : 264330600375
Option 3 ID : 264330600376
Option 4 ID : 264330600377
Status : Answered
Chosen Option : 3

Q.4 Select the most appropriate meaning of the underlined idiom.

He managed to save his father's business by the sweat of his brow.

- Ans
- 1. incidentally
 - 2. hard work
 - 3. tricks and strategies
 - 4. any way possible

Question ID : 264330153641
Option 1 ID : 264330602038
Option 2 ID : 264330602037
Option 3 ID : 264330602035
Option 4 ID : 264330602036
Status : Answered
Chosen Option : 3

Q.5 Select the option that can be used as a one-word substitute for the given phrase.

A place where water is collected and stored for future use.

- Ans
- 1. Aquarium
 - 2. Resort
 - 3. Sanatorium
 - 4. Reservoir

Question ID : 264330152670
Option 1 ID : 264330598285
Option 2 ID : 264330598286
Option 3 ID : 264330598283
Option 4 ID : 264330598284
Status : Answered
Chosen Option : 4

Q.6 Select the option that will improve the underlined part of the given sentence. In case no improvement is needed, select 'No improvement required'.

The new chairman of the company announced attracted bonus for the employees on the occasion of the new year.

- Ans 1. No improvement required
2. announced an attractive bonus for the employees
3. announcing attracted bonus for the employees
4. announced attracting bonus for the employees

Question ID : 264330153612
Option 1 ID : 264330601934
Option 2 ID : 264330601933
Option 3 ID : 264330601932
Option 4 ID : 264330601931
Status : Answered
Chosen Option : 2

Q.7 The following sentence has been divided into four parts. Identify the part that contains an error.

(A) The institute / (B) have been / (C) divided into / (D) multiple departments

- Ans 1. A
2. B
3. C
4. D

Question ID : 264330152623
Option 1 ID : 264330598096
Option 2 ID : 264330598095
Option 3 ID : 264330598098
Option 4 ID : 264330598097
Status : Answered
Chosen Option : 2

Q.8 Select the option that can be used as a one-word substitute for the underlined group of words.

They allowed us to powder by crushing the spices, pick over the raisins and lick the stirring spoons.

- Ans 1. gain
2. greet
3. guess
4. grind

Question ID : 264330153491
Option 1 ID : 264330601482
Option 2 ID : 264330601479
Option 3 ID : 264330601480
Option 4 ID : 264330601481
Status : Answered
Chosen Option : 4

Q.9 Select the most appropriate synonym of the given word.
Mild

- Ans 1. Scathing
 2. Brittle
 3. Gentle
 4. Severe

Question ID : 264330151823
Option 1 ID : 264330594921
Option 2 ID : 264330594920
Option 3 ID : 264330594919
Option 4 ID : 264330594922
Status : Answered
Chosen Option : 3

Q.10 Select the most appropriate idiom to fill in the blank.
Instead of answering the question directly, the politician kept _____.

- Ans 1. crying over spilt milk
 2. pointing at his laurels
 3. beating around the bush
 4. spilling the bean

Question ID : 264330151889
Option 1 ID : 264330595177
Option 2 ID : 264330595176
Option 3 ID : 264330595178
Option 4 ID : 264330595175
Status : Answered
Chosen Option : 3

Q.11 Select the most appropriate option that can substitute the underlined segment in the given sentence.
Rishi asked Karan will he get a new football for him?

- Ans 1. would he get a new football for him?
 2. if he would get a new football for him.
 3. if would he get a new football for him?
 4. if he will get a new football for him?

Question ID : 264330153504
Option 1 ID : 264330601529
Option 2 ID : 264330601530
Option 3 ID : 264330601527
Option 4 ID : 264330601528
Status : Answered
Chosen Option : 2

Q.12 Select the INCORRECTLY spelt word.

- Ans 1. Omitted
 2. Retrospect
 3. Conscience
 4. Admission

Question ID : 264330152690
Option 1 ID : 264330598363
Option 2 ID : 264330598364
Option 3 ID : 264330598366
Option 4 ID : 264330598365
Status : Answered
Chosen Option : 2

Q.13 Select the most appropriate ANTONYM of the given word.
Often

- Ans 1. Generally
 2. Rarely
 3. Periodically
 4. Usually

Question ID : 264330152775
Option 1 ID : 264330598691
Option 2 ID : 264330598692
Option 3 ID : 264330598694
Option 4 ID : 264330598693
Status : Answered
Chosen Option : 2

Q.14 Parts of the following sentence have been given as options. Select the option that contains an error.
The boy whose the sister is ill has left.

- Ans 1. is ill
 2. has left
 3. The boy
 4. whose the sister

Question ID : 264330152795
Option 1 ID : 264330598773
Option 2 ID : 264330598774
Option 3 ID : 264330598771
Option 4 ID : 264330598772
Status : Answered
Chosen Option : 4

Q.15 Select the most appropriate option to fill in the blank.

A strong _____ for mathematics and problem-solving can be very useful.

- Ans 1. strength
 2. aptitude
 3. functioning
 4. perception

Question ID : 264330151865
Option 1 ID : 264330595080
Option 2 ID : 264330595081
Option 3 ID : 264330595079
Option 4 ID : 264330595082
Status : Answered
Chosen Option : 2

Q.16 Select the INCORRECTLY spelt word.

- Ans 1. Recommendation
 2. Priviledge
 3. Affiliate
 4. Parachute

Question ID : 264330152689
Option 1 ID : 264330598361
Option 2 ID : 264330598359
Option 3 ID : 264330598360
Option 4 ID : 264330598362
Status : Answered
Chosen Option : 2

Q.17 Select the most appropriate idiom to fill in the blank.

My manager forced me to resign from my job as a chef since I underwent a spine surgery. I was depressed and had lost all hope. Later my father motivated me to open my own café and showed me ways to be independent. After all it is true that one should not _____.

- Ans 1. grease the palm
 2. blow one's own trumpet
 3. cry over spilt milk
 4. blow hot and cold

Question ID : 264330152879
Option 1 ID : 264330599108
Option 2 ID : 264330599110
Option 3 ID : 264330599107
Option 4 ID : 264330599109
Status : Answered
Chosen Option : 3

Q.18 Select the most appropriate meaning of the underlined idiom in the following sentence.

He was quaking in his boots when he had to give a speech on the stage.

- Ans
- 1. To tremble in excitement
 - 2. To shake in happiness
 - 3. To tremble with fear
 - 4. To shake in excitement

Question ID : 264330153075

Option 1 ID : 264330599864

Option 2 ID : 264330599866

Option 3 ID : 264330599865

Option 4 ID : 264330599863

Status : Answered

Chosen Option : 1

Q.19 Select the most appropriate option that can substitute the underlined segment in the given sentence. If there is no need to substitute it, select 'No substitution required'.
If I will get good marks, my father will buy me a laptop.

- Ans
- 1. No substitution required
 - 2. am getting
 - 3. gets
 - 4. get

Question ID : 264330152728

Option 1 ID : 264330598514

Option 2 ID : 264330598513

Option 3 ID : 264330598511

Option 4 ID : 264330598512

Status : Answered

Chosen Option : 4

Q.20 Four words of the following sentence have been underlined and given as options. Select the option that contains a spelling error.
Human activities that release longlived greenhouse gases into the atmosphere also leed to the enhancement of concentrations of shorterlived ozone and particulate matter in the atmosphere.

- Ans
- 1. concentrations
 - 2. particulate
 - 3. release
 - 4. leed

Question ID : 264330151930

Option 1 ID : 264330595337

Option 2 ID : 264330595338

Option 3 ID : 264330595335

Option 4 ID : 264330595336

Status : Answered

Chosen Option : 4

Comprehension:

In the following passage, some words have been deleted. Read the passage carefully and select the most appropriate option to fill in each blank.

Fruits and vegetables contain important vitamins, minerals and plant (1)_____. They also contain fibre. There are many (2)_____ of fruits and vegetables available and many ways to prepare, cook and serve them. A diet (3)_____ in fruit and vegetables can help protect you against cancer, diabetes and heart disease. Eat five kinds of vegetable and two kinds of fruit every day for good health. Most Indians do not eat (4)_____ fruit and vegetables. When buying and serving fruit and vegetables, aim for variety to get the most (5)_____ and appeal.

SubQuestion No : 21

Q.21 Select the most appropriate option to fill in blank number 1.

- Ans 1. residue
 2. bacteria
 3. chemicals
 4. organisms

Question ID : 264330153326

Option 1 ID : 264330600855

Option 2 ID : 264330600858

Option 3 ID : 264330600856

Option 4 ID : 264330600857

Status : Answered

Chosen Option : 3

Comprehension:

In the following passage, some words have been deleted. Read the passage carefully and select the most appropriate option to fill in each blank.

Fruits and vegetables contain important vitamins, minerals and plant (1)_____. They also contain fibre. There are many (2)_____ of fruits and vegetables available and many ways to prepare, cook and serve them. A diet (3)_____ in fruit and vegetables can help protect you against cancer, diabetes and heart disease. Eat five kinds of vegetable and two kinds of fruit every day for good health. Most Indians do not eat (4)_____ fruit and vegetables. When buying and serving fruit and vegetables, aim for variety to get the most (5)_____ and appeal.

SubQuestion No : 22

Q.22 Select the most appropriate option to fill in blank number 2.

- Ans 1. traits
 2. characters
 3. varieties
 4. uses

Question ID : 264330153327

Option 1 ID : 264330600860

Option 2 ID : 264330600861

Option 3 ID : 264330600862

Option 4 ID : 264330600859

Status : Answered

Chosen Option : 3

Comprehension:

In the following passage, some words have been deleted. Read the passage carefully and select the most appropriate option to fill in each blank.

Fruits and vegetables contain important vitamins, minerals and plant (1)_____. They also contain fibre. There are many (2)_____ of fruits and vegetables available and many ways to prepare, cook and serve them. A diet (3)_____ in fruit and vegetables can help protect you against cancer, diabetes and heart disease. Eat five kinds of vegetable and two kinds of fruit every day for good health. Most Indians do not eat (4)_____ fruit and vegetables. When buying and serving fruit and vegetables, aim for variety to get the most (5)_____ and appeal.

SubQuestion No : 23**Q.23** Select the most appropriate option to fill in blank number 3.

- Ans 1. immersed
 2. rich
 3. content
 4. varied

Question ID : 264330153328

Option 1 ID : 264330600863

Option 2 ID : 264330600865

Option 3 ID : 264330600864

Option 4 ID : 264330600866

Status : Answered

Chosen Option : 2

Comprehension:

In the following passage, some words have been deleted. Read the passage carefully and select the most appropriate option to fill in each blank.

Fruits and vegetables contain important vitamins, minerals and plant (1)_____. They also contain fibre. There are many (2)_____ of fruits and vegetables available and many ways to prepare, cook and serve them. A diet (3)_____ in fruit and vegetables can help protect you against cancer, diabetes and heart disease. Eat five kinds of vegetable and two kinds of fruit every day for good health. Most Indians do not eat (4)_____ fruit and vegetables. When buying and serving fruit and vegetables, aim for variety to get the most (5)_____ and appeal.

SubQuestion No : 24**Q.24** Select the most appropriate option to fill in blank number 4.

- Ans 1. some
 2. enough
 3. many
 4. plenty

Question ID : 264330153329

Option 1 ID : 264330600869

Option 2 ID : 264330600868

Option 3 ID : 264330600867

Option 4 ID : 264330600870

Status : Answered

Chosen Option : 2

Comprehension:

In the following passage, some words have been deleted. Read the passage carefully and select the most appropriate option to fill in each blank.

Fruits and vegetables contain important vitamins, minerals and plant (1)_____. They also contain fibre. There are many (2)_____ of fruits and vegetables available and many ways to prepare, cook and serve them. A diet (3)_____ in fruit and vegetables can help protect you against cancer, diabetes and heart disease. Eat five kinds of vegetable and two kinds of fruit every day for good health. Most Indians do not eat (4)_____ fruit and vegetables. When buying and serving fruit and vegetables, aim for variety to get the most (5)_____ and appeal.

SubQuestion No : 25

Q.25 Select the most appropriate option to fill in blank number 5.

- Ans** 1. assortment
 2. fun
 3. nutrients
 4. advancement

Question ID : **264330153330**

Option 1 ID : **264330600872**

Option 2 ID : **264330600873**

Option 3 ID : **264330600874**

Option 4 ID : **264330600871**

Status : **Answered**

Chosen Option : **3**