

SSC MTS 2023 Tier 1 Sept 12 Shift 1 Question Paper with Answers

Roll Number	
Candidate Name	
Exam Date	12/09/2023
Exam Time	9:00 AM - 11:00 AM
Subject	MTS Non Tech Havaladar CBIC and CBN Examination 2023

Section : Numerical and Mathematical Ability

Q.1 Find the diameter of the sphere whose volume is $381\frac{6}{7} \text{ m}^3$.

- Ans
- 1. 8 m
 - 2. 7 m
 - 3. 9 m
 - 4. 18 m

Question ID : 264330156081
Option 1 ID : 264330611725
Option 2 ID : 264330611726
Option 3 ID : 264330611723
Option 4 ID : 264330611724
Status : Answered
Chosen Option : 3

Q.2 Ram purchased a TV for ₹65,500 and sold it for ₹89,080. What is the percentage profit he made on the TV?

- Ans
- 1. 34%
 - 2. 36%
 - 3. 42%
 - 4. 40%

Question ID : 264330156180
Option 1 ID : 264330612119
Option 2 ID : 264330612120
Option 3 ID : 264330612122
Option 4 ID : 264330612121
Status : Answered
Chosen Option : 2

Q.3 A is twice as efficient as B at completing a task, and together they can finish the task in 20 days. How many days would A alone take to complete the task?

- Ans**
- 1. 34 days
 - 2. 30 days
 - 3. 28days
 - 4. 32 days

Question ID : 264330156278
Option 1 ID : 264330612514
Option 2 ID : 264330612512
Option 3 ID : 264330612511
Option 4 ID : 264330612513
Status : Answered
Chosen Option : 2

Q.4 There are 75 students in the hostel. Due to new admissions, 15 new students join the mess, and the daily expenses of the mess increased by ₹240, while the average expenditure per head diminished by ₹5. What was the original expenditure (in ₹) of the mess?

- Ans**
- 1. 3,450
 - 2. 4,530
 - 3. 3,540
 - 4. 4,350

Question ID : 264330153758
Option 1 ID : 264330602495
Option 2 ID : 264330602498
Option 3 ID : 264330602496
Option 4 ID : 264330602497
Status : Answered
Chosen Option : 3

Q.5 Anil sells a car to Bina at a profit of 20%. Bina sells it to Karan at a profit of 25%. If Karan pays ₹2,25,000 for it, then, find the CP of the car for Anil.

- Ans**
- 1. ₹1,75,000
 - 2. ₹2,00,000
 - 3. ₹1,50,000
 - 4. ₹1,25,000

Question ID : 264330156105
Option 1 ID : 264330611820
Option 2 ID : 264330611819
Option 3 ID : 264330611821
Option 4 ID : 264330611822
Status : Answered
Chosen Option : 3

Q.6 The HCF of two numbers is 12. Which of the following can never be their LCM?

- Ans
- 1. 24
 - 2. 74
 - 3. 48
 - 4. 60

Question ID : 264330156091

Option 1 ID : 264330611763

Option 2 ID : 264330611765

Option 3 ID : 264330611764

Option 4 ID : 264330611766

Status : Answered

Chosen Option : 2

Q.7 Find the value of $\frac{9(3-5)-5 \text{ of } 4+10}{-3 \times 5 - 2 \times 4 \div 2}$:

- Ans
- 1. $\frac{20}{19}$
 - 2. $\frac{18}{19}$
 - 3. $\frac{19}{20}$
 - 4. $\frac{13}{14}$

Question ID : 264330154036

Option 1 ID : 264330603610

Option 2 ID : 264330603609

Option 3 ID : 264330603608

Option 4 ID : 264330603607

Status : Answered

Chosen Option : 1

Q.8 A thief is spotted by a policeman from a distance of 600 m. The thief starts running at a speed of 20 km/h and the policeman chases him running at a speed of 25 km/h. Find the distance between them after 6 minutes (in metres).

- Ans
- 1. 300
 - 2. 200
 - 3. 50
 - 4. 100

Question ID : 264330153853

Option 1 ID : 264330602875

Option 2 ID : 264330602877

Option 3 ID : 264330602876

Option 4 ID : 264330602878

Status : Answered

Chosen Option : 4

Q.9 The simple interest on a sum of money is four times the principal. The rate per cent per annum and time in years are equal. Find the rate per cent per annum.

- Ans**
- 1. 10%
 - 2. 12%
 - 3. 15%
 - 4. 20%

Question ID : 264330156003
 Option 1 ID : 264330611412
 Option 2 ID : 264330611414
 Option 3 ID : 264330611411
 Option 4 ID : 264330611413
 Status : Answered
 Chosen Option : 4

Q.10 The falling height of an object is directly proportional to the square of the time. An object falls 80 cm in 4 seconds. Then in 8 seconds, from how much height (in cm) will the object fall?

- Ans**
- 1. 420
 - 2. 320
 - 3. 480
 - 4. 360

Question ID : 264330153848
 Option 1 ID : 264330602857
 Option 2 ID : 264330602855
 Option 3 ID : 264330602858
 Option 4 ID : 264330602856
 Status : Answered
 Chosen Option : 2

Q.11 The bar chart below shows the production of fertilizers by a company (in tonnes) over the years. Study the bar chart and answer the question based on it.



What was the percentage increase (rounded off to the nearest integer) in the production of fertilizers in 2009 compared to that in 2006?

- Ans**
- 1. 124%
 - 2. 118%
 - 3. 122%
 - 4. 120%

Question ID : 264330153780
 Option 1 ID : 264330602584
 Option 2 ID : 264330602583
 Option 3 ID : 264330602586
 Option 4 ID : 264330602585
 Status : Answered
 Chosen Option : 3

Q.12 The average age of the boys in the class was 16 years. When 4 boys whose average age was 13 years are admitted to the class, the average age of the class was reduced by 6 months. How many boys were there initially in the class?

- Ans**
- 1. 22
 - 2. 20
 - 3. 18
 - 4. 25

Question ID : 264330155989
Option 1 ID : 264330611355
Option 2 ID : 264330611358
Option 3 ID : 264330611357
Option 4 ID : 264330611356
Status : Answered
Chosen Option : 2

Q.13 If a hollow sphere of an external and internal diameters of 6 cm and 4 cm, respectively, is melted into a cone of base diameter 8 cm, then the height of the cone is:

- Ans**
- 1. $4\frac{3}{4}$ cm
 - 2. $3\frac{1}{4}$ cm
 - 3. $5\frac{1}{4}$ cm
 - 4. $2\frac{3}{4}$ cm

Question ID : 264330154110
Option 1 ID : 264330603906
Option 2 ID : 264330603903
Option 3 ID : 264330603905
Option 4 ID : 264330603904
Status : Answered
Chosen Option : 1

Q.14 The monthly income of a person was ₹27,000 and his monthly expenditure was ₹18,000. In the next year, his income increased by 28% and his expenditure increased by 14%. Find the percentage increase in his savings.

- Ans**
- 1. 51.5%
 - 2. 61.5%
 - 3. 56%
 - 4. 50.5%

Question ID : 264330157324
Option 1 ID : 264330616662
Option 2 ID : 264330616661
Option 3 ID : 264330616659
Option 4 ID : 264330616660
Status : Answered
Chosen Option : 3

Q.15 Two trains having the same speed are running in opposite directions. If the length of each train is 120 metres and they cross each other in 8 seconds, then, what is the speed of each train (in km/h)?

- Ans**
- 1. 54
 - 2. 60
 - 3. 45
 - 4. 50

Question ID : 264330156114
Option 1 ID : 264330611857
Option 2 ID : 264330611855
Option 3 ID : 264330611856
Option 4 ID : 264330611858
Status : Answered
Chosen Option : 1

Q.16 The sum of the two numbers is the same as nine times their difference. The ratio of the numbers is:

- Ans**
- 1. 5 : 4
 - 2. 3 : 4
 - 3. 9 : 5
 - 4. 3 : 7

Question ID : 264330154048
Option 1 ID : 264330603655
Option 2 ID : 264330603658
Option 3 ID : 264330603656
Option 4 ID : 264330603657
Status : Answered
Chosen Option : 1

Q.17 In a school, the average height of the students of the tenth standard is 100 cm. The average height of boys is 118 cm, whereas the average height of girls is 95 cm. What is the number of girls in the class if there are 20 boys?

- Ans**
- 1. 72
 - 2. 63
 - 3. 54
 - 4. 36

Question ID : 264330155694
Option 1 ID : 264330610182
Option 2 ID : 264330610181
Option 3 ID : 264330610180
Option 4 ID : 264330610179
Status : Answered
Chosen Option : 1

Q.18 The following table gives the annual expenditure of five families during the last 5 years (in ₹ thousand). Study the table and answer the question that follows.

Year→	2017	2018	2019	2020	2021
Family ↓					
F ₁	35	50	55	60	45
F ₂	45	35	60	55	40
F ₃	53	40	45	65	50
F ₄	40	30	35	50	45
F ₅	35	45	55	50	45

In which year did the family F₄ have the annual expenditure equal to the average expenditure of family F₄ from 2017 to 2021?

- Ans**
- ✓ 1. 2017
 - ✗ 2. 2021
 - ✗ 3. 2019
 - ✗ 4. 2020

Question ID : 264330157348

Option 1 ID : 264330616756

Option 2 ID : 264330616758

Option 3 ID : 264330616755

Option 4 ID : 264330616757

Status : Answered

Chosen Option : 1

Q.19 100 workers working 8 hours a day can dig a canal 2000 metres long in 25 days. Find the number of workers required to dig a similar canal of 2800 metres long in 32 days working 5 hours a day.

- Ans**
- ✗ 1. 170
 - ✗ 2. 180
 - ✓ 3. 175
 - ✗ 4. 165

Question ID : 264330155977

Option 1 ID : 264330611308

Option 2 ID : 264330611310

Option 3 ID : 264330611309

Option 4 ID : 264330611307

Status : Answered

Chosen Option : 3

Q.20 Hema invested ₹1,728 at the rate of compound interest (Compounded annually) for 3 years. She got ₹4,096 after the specified period. Find the rate of interest per annum.

- Ans**
- ✗ 1. $33\frac{1}{2}\%$
 - ✗ 2. $30\frac{1}{2}\%$
 - ✓ 3. $33\frac{1}{3}\%$
 - ✗ 4. $30\frac{1}{3}\%$

Question ID : 264330155749

Option 1 ID : 264330610401

Option 2 ID : 264330610402

Option 3 ID : 264330610399

Option 4 ID : 264330610400

Status : Answered

Chosen Option : 3

Section : Reasoning Ability and Problem Solving

Q.1 If 12th Dec 2009 is a Saturday, then what will be the day of the week on 16th Dec 2014?

- Ans**
- 1. Thursday
 - 2. Friday
 - 3. Wednesday
 - 4. Tuesday

Question ID : 264330154339
 Option 1 ID : 264330604822
 Option 2 ID : 264330604819
 Option 3 ID : 264330604821
 Option 4 ID : 264330604820
 Status : Answered
 Chosen Option : 4

Q.2 What should come in place of '?' in the given series?

10 59 353 ? 12701 76205 457229

- Ans**
- 1. 2149
 - 2. 2247
 - 3. 2073
 - 4. 2117

Question ID : 264330151487
 Option 1 ID : 264330593577
 Option 2 ID : 264330593578
 Option 3 ID : 264330593575
 Option 4 ID : 264330593576
 Status : Answered
 Chosen Option : 4

Q.3 In a certain code language, 'DOMINATE' is coded as 'TANIMODE' and 'FAITHFUL' is coded as 'UFHTIAFL'. What is the code for 'HIGHWAY' in the given code language?

- Ans**
- 1. AWHGIHY
 - 2. IGHWAYH
 - 3. AYWHGIH
 - 4. YAWHGIH

Question ID : 264330155815
 Option 1 ID : 264330610663
 Option 2 ID : 264330610666
 Option 3 ID : 264330610665
 Option 4 ID : 264330610664
 Status : Answered
 Chosen Option : 1

Q.4 What should come in place of ? in the given series based on the English alphabetical order?

MFX, JCU, GZR, DWO, ?

- Ans
- 1. YSM
 - 2. ATL
 - 3. ZRM
 - 4. ZSL

Question ID : 264330155770

Option 1 ID : 264330610485

Option 2 ID : 264330610483

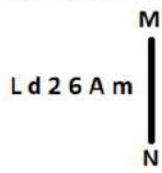
Option 3 ID : 264330610484

Option 4 ID : 264330610486

Status : Answered

Chosen Option : 2

Q.5 Select the correct mirror image of the given figure when the mirror is placed at MN as shown below.



- Ans
- 1. m A ə ʌ b J
 - 2. m A 6 ʌ b L
 - 3. w ʌ ə ʌ b J
 - 4. m A ə d 2 J

Question ID : 264330151514

Option 1 ID : 264330593685

Option 2 ID : 264330593686

Option 3 ID : 264330593683

Option 4 ID : 264330593684

Status : Answered

Chosen Option : 1

Q.6 What should come in place of ? in the given series based on the English alphabetical order?

BLS, FJQ, JHO, NFM, ?

- Ans
- 1. QEJ
 - 2. SCK
 - 3. RDK
 - 4. QCI

Question ID : 264330155796

Option 1 ID : 264330610587

Option 2 ID : 264330610590

Option 3 ID : 264330610589

Option 4 ID : 264330610588

Status : Answered

Chosen Option : 3

Q.7 18 is related to 54 following a certain logic. Following the same logic, 21 is related to 63. To which of the following is 72 related to, following the same logic?

- Ans**
- 1. 222
 - 2. 220
 - 3. 218
 - 4. 216

Question ID : 264330151592
Option 1 ID : 264330593998
Option 2 ID : 264330593997
Option 3 ID : 264330593996
Option 4 ID : 264330593995
Status : Answered
Chosen Option : 4

Q.8 Read the given statement(s) and conclusions carefully. Assuming that the information given in the statements is true, even if it appears to be at variance with commonly known facts, decide which of the given conclusions logically follow(s) from the statement(s).

Statements: All cups are books. All books are shirts.

Conclusions:

- (I) Some cups are not shirts.
- (II) Some shirts are cups.

- Ans**
- 1. Neither conclusion (I) nor (II) is follows.
 - 2. Both conclusions (I) and (II) are follows.
 - 3. Only conclusion (II) is follows.
 - 4. Only conclusion (I) is follows.

Question ID : 264330154425
Option 1 ID : 264330605165
Option 2 ID : 264330605166
Option 3 ID : 264330605164
Option 4 ID : 264330605163
Status : Answered
Chosen Option : 3

Q.9 Six people, Vijay, Harsh, Golu, Satish, Karan and Awadhi are sitting in a straight line, facing north. Vijay sits 3rd from the right end. Harsh sits 3rd to the left of Vijay. Satish is an immediate neighbour of Harsh. Golu sits 3rd to the right of Satish. Awadhi is an immediate neighbour of Golu. Who sits 2nd to the right of Vijay?

- Ans**
- 1. Golu
 - 2. Awadhi
 - 3. Karan
 - 4. Satish

Question ID : 264330155664
Option 1 ID : 264330610062
Option 2 ID : 264330610061
Option 3 ID : 264330610059
Option 4 ID : 264330610060
Status : Answered
Chosen Option : 2

Q.10 What should come in place of ? in the given series?

41 45 54 70 95 ?

- Ans
- ✓ 1. 131
 - ✗ 2. 133
 - ✗ 3. 130
 - ✗ 4. 132

Question ID : 264330151557
Option 1 ID : 264330593856
Option 2 ID : 264330593858
Option 3 ID : 264330593855
Option 4 ID : 264330593857
Status : Answered
Chosen Option : 1

Q.11 Read the given statements and conclusions carefully. You have to take the given statements to be true even if they seem to be at variance from commonly known facts. You have to decide which conclusion/s logically follow/s from the given statements.

Statements: Some lipsticks are foundation. All foundation is brown. Some brown are highlighters.

Conclusion I: Some lipsticks are brown.

Conclusion II: All foundation are highlighters.

- Ans
- ✗ 1. Neither conclusion (I) nor (II) is follow.
 - ✗ 2. Both conclusions (I) and (II) are follow.
 - ✗ 3. Only conclusion (II) is follow.
 - ✓ 4. Only conclusion (I) is follow.

Question ID : 264330155936
Option 1 ID : 264330611149
Option 2 ID : 264330611150
Option 3 ID : 264330611148
Option 4 ID : 264330611147
Status : Answered
Chosen Option : 4

Q.12 Which figure should replace the question mark (?) if the following figure series were to be continued?

9	5	A	9	
A C 5 9	Z O C	5 9 A	O Z	?
O Z	A C	Z O	C 5	

Ans

✗ 1.

O		
5	C	A
9	Z	

✗ 2.

C		
Z	A	O
5	9	

✓ 3.

C		
5	9	A
O	Z	

✗ 4.

C		
Z	9	5
O	A	

Question ID : 264330154738

Option 1 ID : 264330606416

Option 2 ID : 264330606415

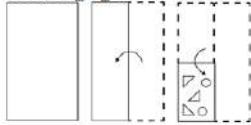
Option 3 ID : 264330606417

Option 4 ID : 264330606418

Status : Answered

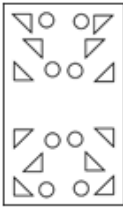
Chosen Option : 3

Q.13 The sequence of folding a piece of paper and the manner in which the folded paper is cut is shown in the following figures. How would this paper look when unfolded?

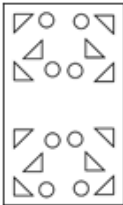


Ans

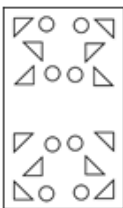
1.



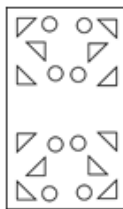
2.



3.



4.



Question ID : 264330155609

Option 1 ID : 264330609842

Option 2 ID : 264330609841

Option 3 ID : 264330609839

Option 4 ID : 264330609840

Status : Answered

Chosen Option : 4

Q.14 Select the set in which the numbers are related in the same way as are the numbers of the following sets.

(NOTE : Operations should be performed on the whole numbers, without breaking down the numbers into its constituent digits. E.g. 13 – Operations on 13 such as adding / subtracting / multiplying etc. to 13 can be performed.

Breaking down 13 into 1 and 3 and then performing mathematical operations on 1 and 3 is not allowed)

(25, 49, 73)

(34, 23, 12)

Ans 1. 5, 35, 17

2. 11, 9, 18

3. 18, 22, 26

4. 13, 15, 19

Question ID : 264330151610

Option 1 ID : 264330594067

Option 2 ID : 264330594068

Option 3 ID : 264330594070

Option 4 ID : 264330594069

Status : Answered

Chosen Option : 3

Q.15 MEOP is related to KCMN in a certain way based on the English alphabetical order. In the same way, LTDG is related to JRBE. To which of the following is UNTF related to, following the same logic?

- Ans**
- 1. SMRE
 - 2. SLRD
 - 3. VPUH
 - 4. TOSG

Question ID : 264330151681
Option 1 ID : 264330594352
Option 2 ID : 264330594353
Option 3 ID : 264330594351
Option 4 ID : 264330594354
Status : Answered
Chosen Option : 2

Q.16 In a certain code language, 'DRAW' is coded as '7932' and 'WEAR' is coded as '4729'. What is the code for 'E' in the given code language?

- Ans**
- 1. 9
 - 2. 2
 - 3. 7
 - 4. 4

Question ID : 264330151687
Option 1 ID : 264330594375
Option 2 ID : 264330594376
Option 3 ID : 264330594377
Option 4 ID : 264330594378
Status : Answered
Chosen Option : 4

Q.17 What will come in the place of the question mark (?) in the following equation, if '+' and '-' are interchanged and '×' and '÷' are interchanged?
 $90 \div 4 + 75 - 93 \times 3 = ?$

- Ans**
- 1. 316
 - 2. 279
 - 3. 406
 - 4. 165

Question ID : 264330154618
Option 1 ID : 264330605937
Option 2 ID : 264330605936
Option 3 ID : 264330605938
Option 4 ID : 264330605935
Status : Answered
Chosen Option : 1

Q.18 Find out the correct alternative that when filled in the blanks in the same sequence will make the series logically complete.

ZA _ J _ B _ BK DAB _ _ ABM HA _ N

- Ans**
- 1. BALPC
 - 2. FCBPL
 - 3. BALFB
 - 4. CHBNK

Question ID : 264330154720
 Option 1 ID : 264330606344
 Option 2 ID : 264330606346
 Option 3 ID : 264330606343
 Option 4 ID : 264330606345
 Status : Answered
 Chosen Option : 3

Q.19 What should come in place of ? in the given series?

51 53 57 59 ? 65 69

- Ans**
- 1. 63
 - 2. 64
 - 3. 62
 - 4. 65

Question ID : 264330151546
 Option 1 ID : 264330593812
 Option 2 ID : 264330593813
 Option 3 ID : 264330593811
 Option 4 ID : 264330593814
 Status : Answered
 Chosen Option : 1

Q.20 If A means '-', G means '×', D means '+', E means '÷', then what will come in place of the question mark (?) in the following equation?

18 E 27 D 3 A 2 G 5 = ?

- Ans**
- 1. 29
 - 2. 17
 - 3. 43
 - 4. 31

Question ID : 264330154684
 Option 1 ID : 264330606200
 Option 2 ID : 264330606199
 Option 3 ID : 264330606202
 Option 4 ID : 264330606201
 Status : Answered
 Chosen Option : 2

Q.1 समुद्री डकैती विरोधी विधेयक, 2022 (Maritime Anti-Piracy Act, 2022) के संबंध में निम्नलिखित में से कौन-सा कथन सत्य है?

- 1) संसद ने दिसंबर 2022 में समुद्री डकैती विरोधी विधेयक, 2022 को राज्यसभा से मंजूरी दे दी।
- 2) यह अधिनियम भारतीय अधिकारियों को खुले समुद्र में समुद्री डकैती के खिलाफ कार्रवाई करने में सक्षम बनाता है।
- 3) यह विशिष्ट आर्थिक क्षेत्र से परे समुद्र पर लागू होता है, जो भारत के समुद्र तट से 500 समुद्री मील से ऊपर है।
- 4) अधिनियम समुद्री डकैती को किसी निजी जहाज या विमान के चालक दल या यात्रियों द्वारा निजी उद्देश्यों के लिए किसी जहाज, विमान या व्यक्ति के खिलाफ हिंसा, हिरासत या विनाश के किसी भी अवैध कार्य के रूप में परिभाषित करता है।

- Ans
- 1. 2, 3 और 4
 - 2. 1, 2 और 3
 - 3. 1, 2 और 4
 - 4. 1, 3 और 4

Question ID : 264330161417
 Option 1 ID : 264330632997
 Option 2 ID : 264330632995
 Option 3 ID : 264330632998
 Option 4 ID : 264330632996
 Status : Answered
 Chosen Option : 4

Q.2 How long can a person remain a minister without being a member of either House of the State Legislature?

- Ans
- 1. 15 days
 - 2. 6 months
 - 3. 1 year
 - 4. 2 months

Question ID : 264330159930
 Option 1 ID : 264330627070
 Option 2 ID : 264330627068
 Option 3 ID : 264330627069
 Option 4 ID : 264330627067
 Status : Answered
 Chosen Option : 1

Q.3 The world's largest camel fair is held in which of the following cities?

- Ans
- 1. Bikaner
 - 2. Pushkar
 - 3. Barmer
 - 4. Udaipur

Question ID : 264330159084
 Option 1 ID : 264330623697
 Option 2 ID : 264330623696
 Option 3 ID : 264330623698
 Option 4 ID : 264330623695
 Status : Answered
 Chosen Option : 2

Q.4 Who among the following Indian musicians is the inventor of Mohan Veena?

- Ans 1. Totaram Sharma
 2. Braj Bhushan Kabra
 3. Pandit Vishwa Mohan Bhatt
 4. Sandeep Das

Question ID : 264330161778
Option 1 ID : 264330634442
Option 2 ID : 264330634441
Option 3 ID : 264330634440
Option 4 ID : 264330634439
Status : Answered
Chosen Option : 3

Q.5 Mulk Raj Anand is the author of _____.

- Ans 1. The Guide
 2. Untouchable
 3. The Invisible Man
 4. A Passage to India

Question ID : 264330160973
Option 1 ID : 264330631223
Option 2 ID : 264330631226
Option 3 ID : 264330631225
Option 4 ID : 264330631224
Status : Answered
Chosen Option : 3

Q.6 Which of the following musicians of medieval India is referred to as 'Tuti-e-Hind' and is also regarded as the father of qawwali?

- Ans 1. Miyan Tansen
 2. Amir Khusrau
 3. Purandara Dasa
 4. Swami Haridas

Question ID : 264330161770
Option 1 ID : 264330634409
Option 2 ID : 264330634410
Option 3 ID : 264330634407
Option 4 ID : 264330634408
Status : Answered
Chosen Option : 2

Q.7 The blue green alga Anabaena lives in the leaves of Azolla, a freshwater fern, forming which of the following relationships?

- Ans 1. Autotrophic
 2. Symbiotic
 3. Parasitic
 4. Saprophytic

Question ID : 264330156603
Option 1 ID : 264330613802
Option 2 ID : 264330613799
Option 3 ID : 264330613801
Option 4 ID : 264330613800
Status : Answered
Chosen Option : 2

Q.8 Who was famous for publishing a formula in 1827 that shows the mathematical relationship between current, resistance and voltage?

- Ans
- 1. William Gilbert
 - 2. William Watson
 - 3. Gustav Kirchhoff
 - 4. Georg Simon Ohm

Question ID : 264330161047
Option 1 ID : 264330631519
Option 2 ID : 264330631522
Option 3 ID : 264330631521
Option 4 ID : 264330631520
Status : Answered
Chosen Option : 4

Q.9 Identify the correct pair (name of shifting agriculture and related state) from the following.

- Ans
- 1. Bewar – Madhya Pradesh
 - 2. Kuruwa – Punjab
 - 3. Podu – Tamil Nadu
 - 4. Bringa – Uttar Pradesh

Question ID : 264330161509
Option 1 ID : 264330633363
Option 2 ID : 264330633364
Option 3 ID : 264330633366
Option 4 ID : 264330633365
Status : Answered
Chosen Option : 4

Q.10 The Balti dance of _____ is distinct as it has its own costume, music and songs in the Balti language. The dance is only performed on rare occasions, such as feasts or celebrations.

- Ans
- 1. Uttarakhand
 - 2. Ladakh
 - 3. Kashmir
 - 4. Himachal Pradesh

Question ID : 264330160797
Option 1 ID : 264330630522
Option 2 ID : 264330630519
Option 3 ID : 264330630520
Option 4 ID : 264330630521
Status : Answered
Chosen Option : 4

Q.11 The Fundamental Duties of Indian Citizens were adopted from the Constitution of which country?

- Ans 1. Soviet Union
 2. Japan
 3. United Kingdom
 4. United States of America

Question ID : 264330162244
Option 1 ID : 264330636306
Option 2 ID : 264330636305
Option 3 ID : 264330636304
Option 4 ID : 264330636303
Status : Answered
Chosen Option : 1

Q.12 Which state hosted the 36th National Games of India?

- Ans 1. Maharashtra
 2. Karnataka
 3. Gujarat
 4. Punjab

Question ID : 264330158220
Option 1 ID : 264330620240
Option 2 ID : 264330620241
Option 3 ID : 264330620239
Option 4 ID : 264330620242
Status : Answered
Chosen Option : 4

Q.13 Jet streams are a particular form of:

- Ans 1. weather fronts
 2. atmospheric pollution
 3. geostrophic winds
 4. periodic water motion

Question ID : 264330161304
Option 1 ID : 264330632545
Option 2 ID : 264330632543
Option 3 ID : 264330632546
Option 4 ID : 264330632544
Status : Answered
Chosen Option : 2

Q.14 According to the Global Multidimensional Poverty Index Report 2022, a total of 415 million people exited multidimensional poverty in India in the last _____.

- Ans 1. 15 years
 2. 5 years
 3. 10 years
 4. 20 years

Question ID : 264330161568
Option 1 ID : 264330633601
Option 2 ID : 264330633599
Option 3 ID : 264330633600
Option 4 ID : 264330633602
Status : Answered
Chosen Option : 3

Q.15 What is the primary function of a commercial bank?

- Ans
- 1. Issuing currency notes and coins
 - 2. Conducting monetary policy
 - 3. Granting loans and accepting deposits
 - 4. Regulating the money supply

Question ID : 264330157304
Option 1 ID : 264330616579
Option 2 ID : 264330616582
Option 3 ID : 264330616581
Option 4 ID : 264330616580
Status : Answered
Chosen Option : 3

Q.16 Which of the following is an example of revenue receipt in the government budget?

- Ans
- 1. Sale of government-owned land
 - 2. Repayment of a loan by a state-owned company
 - 3. Dividends received from a state-owned enterprise
 - 4. Borrowing money from international organisations

Question ID : 264330157277
Option 1 ID : 264330616471
Option 2 ID : 264330616473
Option 3 ID : 264330616474
Option 4 ID : 264330616472
Status : Answered
Chosen Option : 1

Q.17 Birsa Munda Hockey Stadium was built in which state?

- Ans
- 1. Gujarat
 - 2. Maharashtra
 - 3. Jharkhand
 - 4. Odisha

Question ID : 264330158242
Option 1 ID : 264330620328
Option 2 ID : 264330620329
Option 3 ID : 264330620330
Option 4 ID : 264330620327
Status : Answered
Chosen Option : 3

Q.18 Who received the title Pandita from the faculty of Calcutta University for her knowledge of Sanskrit?

- Ans
- 1. Rokaya Sakhawat Hossain
 - 2. Ramabai Sarasvati
 - 3. Sarojini Naidu
 - 4. Rash Sundari Devi

Question ID : 264330160887
Option 1 ID : 264330630880
Option 2 ID : 264330630882
Option 3 ID : 264330630881
Option 4 ID : 264330630879
Status : Answered
Chosen Option : 2

Q.19 Rani Machaiah from Karnataka was awarded the Padma Shri for her contribution to popularising _____ in and outside Karnataka.

- Ans
- 1. Kamsale Nritya
 - 2. Kuniitha
 - 3. Karadi Majalu
 - 4. Ummathat

Question ID : 264330160804
Option 1 ID : 264330630549
Option 2 ID : 264330630547
Option 3 ID : 264330630550
Option 4 ID : 264330630548
Status : Answered
Chosen Option : 3

Q.20 Shri Domar Singh Kunvar from Chhattisgarh was honoured with _____ in the year 2023 for his contribution to 'Natya Nach'.

- Ans
- 1. Padma Bhushan
 - 2. Bharat Ratna
 - 3. Padma Shri
 - 4. Padma Vibhushan

Question ID : 264330155527
Option 1 ID : 264330609512
Option 2 ID : 264330609514
Option 3 ID : 264330609511
Option 4 ID : 264330609513
Status : Answered
Chosen Option : 3

Q.21 Which of the following hills are located in Purvachal?

- Ans
- 1. Mizo hills and Naga hills
 - 2. Shevroy hills and Javadi hills
 - 3. Khasi and Jaintia hills
 - 4. Anai Mudi and Doda Betta

Question ID : 264330160150
Option 1 ID : 264330627939
Option 2 ID : 264330627942
Option 3 ID : 264330627940
Option 4 ID : 264330627941
Status : Answered
Chosen Option : 3

Q.22 The mausoleum of the Taj Mahal was designed by _____.

- Ans
- 1. Bhaktiyar Lahori
 - 2. Mohammad Isha
 - 3. Shah Jahan
 - 4. Ustad Ahmad Lahori

Question ID : 264330160766
Option 1 ID : 264330630395
Option 2 ID : 264330630397
Option 3 ID : 264330630398
Option 4 ID : 264330630396
Status : Answered
Chosen Option : 4

Q.23 What was the Swadeshi Movement called in the state of Andhra Pradesh?

- Ans
- 1. Gadar Movement
 - 2. Quit India Movement
 - 3. Khilafat Movement
 - 4. Vande Mataram Movement

Question ID : 264330161739
Option 1 ID : 264330634284
Option 2 ID : 264330634285
Option 3 ID : 264330634283
Option 4 ID : 264330634286
Status : Answered
Chosen Option : 1

Q.24 'Midnight's Children' is a novel by which of the following writers?

- Ans
- 1. Jane Austen
 - 2. Vikram Seth
 - 3. Chetan Bhagat
 - 4. Salman Rushdie

Question ID : 264330160968
Option 1 ID : 264330631206
Option 2 ID : 264330631204
Option 3 ID : 264330631203
Option 4 ID : 264330631205
Status : Answered
Chosen Option : 1

Q.25 Which of the following countries hosted the IBA Women's World Boxing Championships for the third time in March 2023?

- Ans
- 1. Hungary
 - 2. United Kingdom
 - 3. Malaysia
 - 4. India

Question ID : 264330161442
Option 1 ID : 264330633096
Option 2 ID : 264330633095
Option 3 ID : 264330633097
Option 4 ID : 264330633098
Status : Answered
Chosen Option : 3

Q.1 Select the most appropriate meaning of the given idiom.

Castles in the air

- Ans 1. Unrealistic and impossible plan
 2. Unexpected change in the climate
 3. Realistic and possible plan
 4. Strong hope to get success

Question ID : 264330152905

Option 1 ID : 264330599207

Option 2 ID : 264330599210

Option 3 ID : 264330599208

Option 4 ID : 264330599209

Status : Answered

Chosen Option : 1

Q.2 Four words of the following sentence have been underlined and given as options. Select the option that contains a spelling error.

Ongoing climate change, caused by the acumulation of greenhouse gases in the atmosphere, is happening on a timescale of decades to centuries and is driving environmental changes worldwide.

- Ans 1. environmental
 2. atmosphere
 3. acumulation
 4. decades

Question ID : 264330151929

Option 1 ID : 264330595334

Option 2 ID : 264330595332

Option 3 ID : 264330595331

Option 4 ID : 264330595333

Status : Answered

Chosen Option : 3

Q.3 Select the most appropriate synonym of the given word.

Laconic

- Ans 1. Reasonable
 2. Fanciful
 3. Concise
 4. Certain

Question ID : 264330152682

Option 1 ID : 264330598334

Option 2 ID : 264330598333

Option 3 ID : 264330598332

Option 4 ID : 264330598331

Status : Answered

Chosen Option : 1

Q.4 Select the most appropriate option to fill in the blank.

Make-up was _____ she hardly wore.

- Ans 1. anything
 2. something
 3. anybody
 4. someone

Question ID : 264330153494
Option 1 ID : 264330601494
Option 2 ID : 264330601492
Option 3 ID : 264330601493
Option 4 ID : 264330601491
Status : Answered
Chosen Option : 2

Q.5 Select the most appropriate option that can substitute the underlined segment in the given sentence.

The manager asked me if I have completed my projects.

- Ans 1. if he has completed my projects
 2. if I has completed my projects
 3. if I had completed my projects
 4. if I shall have completed my projects

Question ID : 264330152713
Option 1 ID : 264330598453
Option 2 ID : 264330598451
Option 3 ID : 264330598454
Option 4 ID : 264330598452
Status : Answered
Chosen Option : 3

Q.6 Select the option that can be used as a one-word substitute for the given group of words.

Pause indecisively

- Ans 1. Hibernate
 2. Hesitate
 3. Hoist
 4. Hobble

Question ID : 264330151910
Option 1 ID : 264330595256
Option 2 ID : 264330595255
Option 3 ID : 264330595258
Option 4 ID : 264330595257
Status : Answered
Chosen Option : 1

Q.7 The following sentence has been split into four segments. Identify the segment that contains a grammatical error and select the option which rectifies that error.

The SNAP-10 A / was launched on 3 April 1965 / on a Atlas-Agena D rocket / from Vandenberg Air Force Base.

- Ans
- 1. at Vandenberg Air Force Base.
 - 2. A SNAP-10 A
 - 3. was launch on 3 April 1965
 - 4. on an Atlas-Agena D rocket

Question ID : 264330141342
Option 1 ID : 264330553704
Option 2 ID : 264330553705
Option 3 ID : 264330553703
Option 4 ID : 264330553706
Status : Answered
Chosen Option : 4

Q.8 Select the correct spelling of the underlined word in the following sentence.

He dispised the taste of black coffee.

- Ans
- 1. despisid
 - 2. disspised
 - 3. despised
 - 4. despeded

Question ID : 264330153082
Option 1 ID : 264330599891
Option 2 ID : 264330599893
Option 3 ID : 264330599894
Option 4 ID : 264330599892
Status : Answered
Chosen Option : 3

Q.9 Parts of the given sentence have been underlined. One of them contains an error. The underlined parts are given as options with some changes. Select the option that correctly rectifies the error.

This car is lesser expensive than the one I had come to buy.

- Ans
- 1. for
 - 2. came
 - 3. ones
 - 4. less

Question ID : 264330153176
Option 1 ID : 264330600266
Option 2 ID : 264330600265
Option 3 ID : 264330600264
Option 4 ID : 264330600263
Status : Answered
Chosen Option : 4

Q.10 Select the appropriate meaning of the given idiom.

Grasping at straws

- Ans 1. Futile attempts to win
 2. Desperate attempt to succeed
 3. Holding the last strands of straw
 4. Wasting time enjoying and relaxing

Question ID : 264330152979
Option 1 ID : 264330599490
Option 2 ID : 264330599488
Option 3 ID : 264330599487
Option 4 ID : 264330599489
Status : Answered
Chosen Option : 2

Q.11 Select the most appropriate idiom to fill in the blank.
She told me, _____, that she was going to live in New York.

- Ans 1. blue blood
 2. black and blue
 3. out of the blue
 4. once in a blue moon

Question ID : 264330153097
Option 1 ID : 264330599954
Option 2 ID : 264330599952
Option 3 ID : 264330599953
Option 4 ID : 264330599951
Status : Answered
Chosen Option : 3

Q.12 Select the most appropriate synonym of the bracketed word in the following sentence to fill in the blank.

The medical procedure was successful, but the patient experienced some minor _____ (troubles) during recovery.

- Ans 1. applications
 2. complications
 3. transformations
 4. obligations

Question ID : 264330152659
Option 1 ID : 264330598239
Option 2 ID : 264330598242
Option 3 ID : 264330598240
Option 4 ID : 264330598241
Status : Answered
Chosen Option : 2

Q.13 The following sentence has been divided into four parts. Identify the part that contains an error.

(A) It is said / (B) that fortune / (C) favour the / (D) brave.

- Ans
- 1. B
 - 2. C
 - 3. A
 - 4. D

Question ID : 264330152625
Option 1 ID : 264330598104
Option 2 ID : 264330598105
Option 3 ID : 264330598103
Option 4 ID : 264330598106
Status : Answered
Chosen Option : 2

Q.14 Select the most appropriate option that can substitute the underlined segment in the given sentence.

Teenage is that phase of life when you are proposed to the world outside.

- Ans
- 1. you are exposed to
 - 2. you are excited with
 - 3. one are proposed to
 - 4. you are interrupted to

Question ID : 264330151808
Option 1 ID : 264330594860
Option 2 ID : 264330594861
Option 3 ID : 264330594859
Option 4 ID : 264330594862
Status : Answered
Chosen Option : 1

Q.15 Select the INCORRECTLY spelt word.

- Ans
- 1. Sergeant
 - 2. Playwright
 - 3. Experiance
 - 4. Leisure

Question ID : 264330153597
Option 1 ID : 264330601878
Option 2 ID : 264330601875
Option 3 ID : 264330601876
Option 4 ID : 264330601877
Status : Answered
Chosen Option : 3

Q.16 Select the most appropriate option to fill in the blank.
Ravi has little in _____ with his friend, Senthil.

- Ans 1. common
 2. contention
 3. formal
 4. normal

Question ID : 264330153421
Option 1 ID : 264330601218
Option 2 ID : 264330601215
Option 3 ID : 264330601217
Option 4 ID : 264330601216
Status : Answered
Chosen Option : 2

Q.17 Select the most appropriate ANTONYM of the given word.
Dense

- Ans 1. Sparse
 2. Opaque
 3. Closed
 4. Thick

Question ID : 264330152589
Option 1 ID : 264330597959
Option 2 ID : 264330597961
Option 3 ID : 264330597962
Option 4 ID : 264330597960
Status : Answered
Chosen Option : 1

Q.18 The following sentence has been divided into parts. One of them may contain an error.
Select the part that contains the error from the given options. If you don't find any error, mark 'No error' as your answer.

The fight of the cobra and the mongoose / is a classic drama often seen in India, / and the outcome was largely the same.

- Ans 1. The fight of the cobra and the mongoose
 2. No error
 3. is a classic drama often seen in India
 4. and the outcome was largely the same

Question ID : 264330153617
Option 1 ID : 264330601951
Option 2 ID : 264330601954
Option 3 ID : 264330601953
Option 4 ID : 264330601952
Status : Answered
Chosen Option : 1

Q.19 The following sentence has been split into four segments. Identify the segment that contains a grammatical error.

The little child / wrote his name / quick / on the wall.

- Ans 1. quick
 2. wrote his name
 3. on the wall
 4. The little child

Question ID : 264330153183
Option 1 ID : 264330600293
Option 2 ID : 264330600292
Option 3 ID : 264330600294
Option 4 ID : 264330600291
Status : Answered
Chosen Option : 1

Q.20 Select the most appropriate meaning of the given idiom.

Bone to pick

- Ans 1. To be angry about something and want to discuss it
 2. To stop trying hard
 3. To not give up
 4. Putting in extra effort

Question ID : 264330153012
Option 1 ID : 264330599620
Option 2 ID : 264330599619
Option 3 ID : 264330599622
Option 4 ID : 264330599621
Status : Answered
Chosen Option : 1

Comprehension:

In the following passage, some words have been deleted. Read the passage carefully and select the most appropriate option to fill in each blank.

Health is the most valuable of all earthly possessions. Without it all the rest are worth (1)_____. To enjoy good health we should refrain from excess in eating. We should eat moderately and devour whatever (2)_____ get. When you sit among many for a dinner, do not reach your hand out (3)_____ of all. A little food is sufficient for us. Sound sleep comes of a light stomach. Such a man rises (4)_____ in the morning and is at ease with himself. So to (5)_____ good health we should eat moderately, for a man who does not overeat enjoys sound sleep and rises early completely refreshed.

SubQuestion No : 21

Q.21 Select the most appropriate option to fill in blank no. 1.

- Ans 1. it
 2. nothing
 3. everything
 4. all

Question ID : 264330153371
Option 1 ID : 264330601033
Option 2 ID : 264330601032
Option 3 ID : 264330601034
Option 4 ID : 264330601031
Status : Answered
Chosen Option : 2

Comprehension:

In the following passage, some words have been deleted. Read the passage carefully and select the most appropriate option to fill in each blank.

Health is the most valuable of all earthly possessions. Without it all the rest are worth (1)_____. To enjoy good health we should refrain from excess in eating. We should eat moderately and devour whatever (2)_____ get. When you sit among many for a dinner, do not reach your hand out (3)_____ of all. A little food is sufficient for us. Sound sleep comes of a light stomach. Such a man rises (4)_____ in the morning and is at ease with himself. So to (5)_____ good health we should eat moderately, for a man who does not overeat enjoys sound sleep and rises early completely refreshed.

SubQuestion No : 22

Q.22 Select the most appropriate option to fill in blank no. 2.

- Ans
- 1. us
 - 2. he
 - 3. we
 - 4. it

Question ID : 264330153372

Option 1 ID : 264330601037

Option 2 ID : 264330601035

Option 3 ID : 264330601036

Option 4 ID : 264330601038

Status : Answered

Chosen Option : 3

Comprehension:

In the following passage, some words have been deleted. Read the passage carefully and select the most appropriate option to fill in each blank.

Health is the most valuable of all earthly possessions. Without it all the rest are worth (1)_____. To enjoy good health we should refrain from excess in eating. We should eat moderately and devour whatever (2)_____ get. When you sit among many for a dinner, do not reach your hand out (3)_____ of all. A little food is sufficient for us. Sound sleep comes of a light stomach. Such a man rises (4)_____ in the morning and is at ease with himself. So to (5)_____ good health we should eat moderately, for a man who does not overeat enjoys sound sleep and rises early completely refreshed.

SubQuestion No : 23

Q.23 Select the most appropriate option to fill in blank no. 3.

- Ans
- 1. first
 - 2. second
 - 3. last
 - 4. end

Question ID : 264330153373

Option 1 ID : 264330601039

Option 2 ID : 264330601042

Option 3 ID : 264330601040

Option 4 ID : 264330601041

Status : Answered

Chosen Option : 1

Comprehension:

In the following passage, some words have been deleted. Read the passage carefully and select the most appropriate option to fill in each blank.

Health is the most valuable of all earthly possessions. Without it all the rest are worth (1)_____. To enjoy good health we should refrain from excess in eating. We should eat moderately and devour whatever (2)_____ get. When you sit among many for a dinner, do not reach your hand out (3)_____ of all. A little food is sufficient for us. Sound sleep comes of a light stomach. Such a man rises (4)_____ in the morning and is at ease with himself. So to (5)_____ good health we should eat moderately, for a man who does not overeat enjoys sound sleep and rises early completely refreshed.

SubQuestion No : 24

Q.24 Select the most appropriate option to fill in blank no. 4.

- Ans 1. late
 2. early
 3. active
 4. idle

Question ID : 264330153374

Option 1 ID : 264330601044

Option 2 ID : 264330601045

Option 3 ID : 264330601043

Option 4 ID : 264330601046

Status : Answered

Chosen Option : 2

Comprehension:

In the following passage, some words have been deleted. Read the passage carefully and select the most appropriate option to fill in each blank.

Health is the most valuable of all earthly possessions. Without it all the rest are worth (1)_____. To enjoy good health we should refrain from excess in eating. We should eat moderately and devour whatever (2)_____ get. When you sit among many for a dinner, do not reach your hand out (3)_____ of all. A little food is sufficient for us. Sound sleep comes of a light stomach. Such a man rises (4)_____ in the morning and is at ease with himself. So to (5)_____ good health we should eat moderately, for a man who does not overeat enjoys sound sleep and rises early completely refreshed.

SubQuestion No : 25

Q.25 Select the most appropriate option to fill in blank no. 5.

- Ans 1. lose
 2. benefit
 3. reward
 4. enjoy

Question ID : 264330153375

Option 1 ID : 264330601050

Option 2 ID : 264330601047

Option 3 ID : 264330601048

Option 4 ID : 264330601049

Status : Answered

Chosen Option : 4