

SSC GD Constable Question Paper With Answer Held On 11 Jan 2023 Shift 1

Roll Number	
Candidate Name	
Venue Name	
Exam Date	11/01/2023
Exam Time	9:00 AM - 10:00 AM
Subject	Constable GD Examination 2022

Section : Part-A-General Intelligence and Reasoning

Q.1 Six people U, V, W, X, Y, and Z are sitting in a circle facing opposite to the centre. U is sitting third to the right of Y. W is sitting to the immediate left of U. W is sitting third to the left of V. Z is not sitting next to U. Who is sitting between W and Y?

- Ans
- 1. Z
 - 2. X
 - 3. U
 - 4. V

Question ID : 264330114206
 Status : Answered
 Chosen Option : 1

Q.2 Which option represents the correct order of the given words as they would appear in the English dictionary?

- 1 kind
- 2 kite
- 3 knit
- 4 king
- 5 kindle

- Ans
- 1. 1,5,4,2,3
 - 2. 1,4,2,5,3
 - 3. 1,5,2,4,3
 - 4. 1,4,5,2,3

Question ID : 26433069300
 Status : Answered
 Chosen Option : 1

Q.3 Which letter-cluster will replace the question mark (?) to complete the given series?
 XCMQ, YDNR, ?, AFPT, BGQU

- Ans
- 1. ZEOR
 - 2. ZEPS
 - 3. ZEUS
 - 4. ZEOS

Question ID : 26433067941
 Status : Answered
 Chosen Option : 4

Q.4 Three Statements are given followed by Three conclusions numbered I, II and III. Assuming the statements to be true, even if they seem to be at variance with commonly known facts, decide which of the conclusions logically follow(s) from the statements.

Statements:

All bags are rubber.

Some rubber are chairs.

All chairs are tables.

Conclusions:

I. Some rubber are bags.

II. Some chairs are rubber.

III. Some chairs are tables.

- Ans
- 1. Both conclusions I and III follow.
 - 2. Both conclusions I and II follow.
 - 3. All conclusions follow.
 - 4. Both conclusions II and III follow.

Question ID : 26433074639

Status : Answered

Chosen Option : 3

Q.5 Which of the mathematical signs should be interchanged in the below equation to make it mathematically correct?

$$144 - 12 + 18 \times 6 \div 24 = 96$$

- Ans
- 1. - and +
 - 2. - and \times
 - 3. \times and +
 - 4. - and +

Question ID : 264330117489

Status : Answered

Chosen Option : 1

Q.6 'A + B' means 'B is the brother of A'
 'A - B' means 'B is the sister of A'
 'A % B' means 'B is the daughter of A'
 'A & B' means 'B is the wife of A'
 If A & B % C + D - E, then how is E related to A?

- Ans
- 1. Mother
 - 2. Wife
 - 3. Daughter
 - 4. Sister

Question ID : 26433068529

Status : Answered

Chosen Option : 3

Q.7 Seven friends are sitting around a circular table facing the centre. T is an immediate neighbour of K and U. S is sitting immediate right of K. W is an immediate neighbour of U and M. Who is sitting third to the left of K?

- Ans
- 1. W
 - 2. M
 - 3. U
 - 4. T

Question ID : 26433080433

Status : Answered

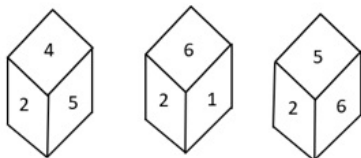
Chosen Option : 1

Q.8 Which number will replace the question mark (?) in the following series?
6, 24, 60, 120, ?

- Ans
- 1. 150
 - 2. 180
 - 3. 135
 - 4. 210

Question ID : 26433067838
Status : Answered
Chosen Option : 4

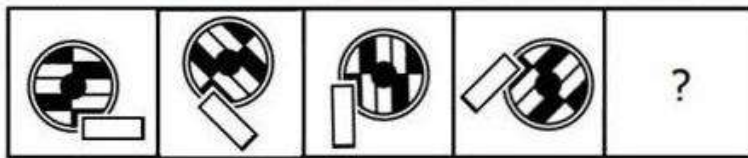
Q.9 Three different positions of the same dice are shown. Find the number on the face opposite the face showing '2'.



- Ans
- 1. 5
 - 2. 1
 - 3. 4
 - 4. 3

Question ID : 26433090067
Status : Answered
Chosen Option : 4

Q.10 Select the figure that will come next in the following series.



Ans

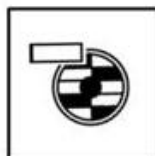
✗ 1.



✗ 2.



✓ 3.



✗ 4.



Question ID : 26433078969

Status : Answered

Chosen Option : 3

Q.11 Select the option that is related to the third word in the same way as the second word is related to the first word. (The words must be considered as meaningful English words and must not be related to each other based on the number of letters/number of consonants/vowels in the word.)

Kite : Claw :: Horse : ?

Ans ✗ 1. Strong

✗ 2. Fast

✗ 3. Power

✓ 4. Hoof

Question ID : 26433069578

Status : Answered

Chosen Option : 4

Q.12 In a certain code language, 'GHOST' is written as 'JCRNW' and 'FIRED' is written as 'IDUZG'. How will 'RIFLE' be written in the same code language?

Ans ✓ 1. UDIGH

✗ 2. VEJFH

✗ 3. PDBGH

✗ 4. UIDBH

Question ID : 26433068145

Status : Answered

Chosen Option : 1

Q.13 Select the option that is related to the fifth letter-cluster in the same way as the second letter-cluster is related to the first letter-cluster and the fourth letter-cluster is related to the third letter-cluster.

PAE : HCQ :: ESH: KUF :: FDN : ?

- Ans 1. QFG
 2. KFG
 3. KGP
 4. PFH

Question ID : 26433057713
 Status : Answered
 Chosen Option : 1

Q.14 Which letter-cluster will replace the question mark (?) to complete the given series?
 QJKE, SHIG, UFGI, ?, YBCM

- Ans 1. WCFM
 2. VEFL
 3. VDEN
 4. WDEK

Question ID : 26433068036
 Status : Answered
 Chosen Option : 4

Q.15 Select the correct mirror image of the given combination when the mirror is placed at 'PQ' as shown below.

G C P U W K 

- Ans 1. K W U P C G
 2. G C U P W K
 3. K W U P C G
 4. K W U P C G

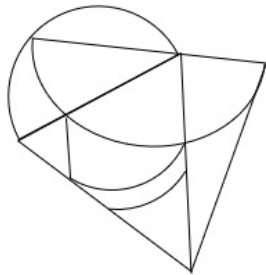
Question ID : 26433081696
 Status : Answered
 Chosen Option : 1

Q.16 In a certain code language, 'SLOWLY' is written as 'TMNXMZ' and 'FRIEND' is written as 'GSHDOE'. How will 'BORING' be written in that language?

- Ans 1. CPSNOH
 2. CNSHOH
 3. CNSJOH
 4. CNSHOF

Question ID : 26433081760
 Status : Answered
 Chosen Option : 2

Q.17 Select the option figure which is embedded in the given figure. (Rotation is NOT allowed)

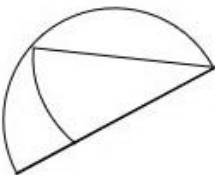


Ans

✗ 1.



✓ 2.



✗ 3.



✗ 4.



Question ID : 26433069331
 Status : Answered
 Chosen Option : 2

Q.18 Which of the following numbers will replace the question mark (?) in the given series?
 62498, 61874, ?, 60644, 60038, 59438

Ans ✓ 1. 61256

✗ 2. 61656

✗ 3. 60544

✗ 4. 60446

Question ID : 26433076751
 Status : Answered
 Chosen Option : 1

Q.19 Select the set in which the numbers are related in the same way as are the numbers of the following sets.

(NOTE : Operations should be performed on the whole numbers, without breaking down the numbers into its constituent digits. E.g. 13 – Operations on 13 such as adding/subtracting/multiplying etc. to 13 can be performed. Breaking down 13 into 1 and 3 and then performing mathematical operations on 1 and 3 is not allowed)

(11, 78, 15)

(12, 90, 18)

- Ans
- 1. (12, 89, 17)
 - 2. (11, 91, 19)
 - 3. (13, 96, 19)
 - 4. (10, 54, 17)

Question ID : 26433076541
Status : Answered
Chosen Option : 1

Q.20 Select the correct combination of mathematical signs to sequentially replace the * signs and to balance the given equation.

$10 * 18 * 19 * 2 * 1 * 217$

- Ans
- 1. $\times, +, \times, +, =$
 - 2. $\times, +, \times, -, =$
 - 3. $\times, +, -, -, =$
 - 4. $+, +, \times, -, =$

Question ID : 26433082881
Status : Answered
Chosen Option : 2

Section : Part-B-General Knowledge and General awareness

Q.1 Government of India has approved a new Central Sector Scheme entitled “National Beekeeping & Honey Mission (NBHM)” which is associated to _____ revolution.

- Ans
- 1. savoury
 - 2. sweet
 - 3. honey
 - 4. golden

Question ID : 264330116185
Status : Answered
Chosen Option : 3

Q.2 _____ are a narrow belt of high altitude (above 12,000 m) westerly winds in the troposphere. Their speed varies from about 110 km/h in summer to about 184 km/h in winter.

- Ans
- 1. Jet Streams
 - 2. Whirlwind
 - 3. Derecho
 - 4. Hurricane

Question ID : 264330115978
Status : Not Answered
Chosen Option : --

Q.3 After independence, India launched its First five year plan in _____.

- Ans
- 1. 1952
 - 2. 1953
 - 3. 1950
 - 4. 1951

Question ID : 264330116134
Status : Answered
Chosen Option : 1

Q.4 Which Indian dancer among the following was the Youngest recipient of Padma Vibhushan in 2003?

- Ans
- 1. Uday Shankar
 - 2. Sonal Mansingh
 - 3. Pandit Birju Maharaj
 - 4. Kelucharan Mohapatra

Question ID : 264330115839
Status : Not Answered
Chosen Option : --

Q.5 What is the chemical formula of Calcium Carbonate?

- Ans
- 1. CaSO_4
 - 2. CaCO_3
 - 3. CaCO_2
 - 4. CaO

Question ID : 264330115166
Status : Answered
Chosen Option : 3

Q.6 Which vitamin is also known as Thiamin?

- Ans
- 1. Vitamin B2
 - 2. Vitamin B3
 - 3. Vitamin B1
 - 4. Vitamin B12

Question ID : 264330115222
Status : Answered
Chosen Option : 3

Q.7 Who took oath as the Governor of Meghalaya in October 2022?

- Ans
- 1. Banwarilal Purohit
 - 2. Tathagata Roy
 - 3. Satya Pal Malik
 - 4. B. D. Mishra

Question ID : 264330114979
Status : Answered
Chosen Option : 2

Q.8 Gandhi-Irwin pact was signed in which year?

- Ans 1. 1931
 2. 1935
 3. 1929
 4. 1933

Question ID : 264330115685
 Status : Answered
 Chosen Option : 1

Q.9 एक बजट दस्तावेज, जो किसी विशेष वित्तीय वर्ष के लिए सरकार की राजस्व प्राप्तियों और राजस्व व्यय से संबंधित होता है, _____ कहलाता है।

- Ans 1. राजस्व बजट
 2. शून्य बजट
 3. दीर्घकालिक बजट
 4. पूंजीगत बजट

Question ID : 264330115276
 Status : Not Attempted and Marked For Review
 Chosen Option : --

Q.10 The last article of the Constitution of India has been given the number _____. (as on May 2022).

- Ans 1. 380
 2. 390
 3. 395
 4. 385

Question ID : 264330115611
 Status : Answered
 Chosen Option : 3

Q.11 As of November 2022, who is the Union Minister for Education in India?

- Ans 1. Dharmendra Pradhan
 2. Mansukh Mandaviya
 3. Anurag Thakur
 4. Kiren Rijju

Question ID : 264330114931
 Status : Answered
 Chosen Option : 1

Q.12 Which union territory has the highest sex ratio as per the 2011 Census?

- Ans 1. Lakshwadeep
 2. Puducherry
 3. Daman & Diu
 4. Chandigarh

Question ID : 264330116048
 Status : Answered
 Chosen Option : 1

Q.13 _____ is celebrated as Gujarati New Year in India.

Ans 1. Bestu Varas

2. Vishu

3. Losar

4. Losoong

Question ID : 264330115107
Status : Answered
Chosen Option : 2

Q.14 Primary raw material for sugar industry is _____.

Ans 1. chemical sweetners

2. sweet potato

3. apple

4. sugar cane

Question ID : 264330115395
Status : Answered
Chosen Option : 4

Q.15 Which among the following classical dance forms was introduced in the 16th century by Vaishnava saint Mahapurusha Sankaradeva?

Ans 1. Kuchipudi

2. Sattriya

3. Odissi

4. Manipuri

Question ID : 264330115062
Status : Not Answered
Chosen Option : --

Q.16 In which city is the Mohun Bagan Athletic club situated?

Ans 1. Jaipur

2. Kolkata

3. Lucknow

4. Bulandshahr

Question ID : 26433092324
Status : Not Answered
Chosen Option : --

Q.17 Who hosted the FIFA World Cup 2022?

Ans 1. Brazil

2. Qatar

3. Spain

4. Germany

Question ID : 264330115926
Status : Answered
Chosen Option : 2

Q.18 Removal of president of the country from the office is known as _____.

- Ans** 1. Impeachment
 2. Termination of Services
 3. Resignation
 4. Voluntary Retirement from services

Question ID : 264330115666
 Status : Answered
 Chosen Option : 1

Q.19 Who among the following Greek rulers sent Megasthenes to the court of Chandragupta Maurya?

- Ans** 1. Seleucus Nicator
 2. Amyntas II
 3. Amyntas III
 4. Phillip II

Question ID : 26433090574
 Status : Answered
 Chosen Option : 2

Q.20 विरासत का अधिकार (right of inheritance) किस ओर ले जाता है?

- Ans** 1. अनुपजाऊ भूमि
 2. भूमि प्रदुषण
 3. भूमि का विभाजन
 4. भूमि की कमी

Question ID : 264330115523
 Status : Answered
 Chosen Option : 3

Section : Part-C-Elementary Mathematics

Q.1 Manish bought an air conditioner for Rs.46,875, its value is depreciating at the rate of 8% yearly. What will be the price of the air conditioner after 3 years?

- Ans** 1. Rs.33,786
 2. Rs.32,245
 3. Rs.36,501
 4. Rs.35,602

Question ID : 26433080339
 Status : Answered
 Chosen Option : 4

Q.2 एक व्यक्ति पहले दिन पर 6 घंटे में 240 kms, दूसरे दिन पर 8 घंटे में 360 kms और तीसरे दिन पर 6 घंटे में 450 kms की दूरी पूरी करता है। 3 दिनों में उसके द्वारा पूरी की गई प्रति घंटे की औसत दूरी ज्ञात करें।

- Ans** 1. 52.5 kms
 2. 50.5 kms
 3. 51 kms
 4. 48 kms

Question ID : 264330116683
 Status : Answered
 Chosen Option : 3

Q.3 An increase of 25 percent in the price of onions enables a woman to buy 5 kg less for Rs. 200. The increased price of onions per kg is:

- Ans
- 1. Rs. 5 per kg
 - 2. Rs. 8 per kg
 - 3. Rs. 10 per kg
 - 4. Rs. 15 per kg

Question ID : 264330116789
 Status : Answered
 Chosen Option : 3

Q.4 A person travels in a car for 600 km at an average speed of 50 km/h and 100 km at 100 km/h, and finally reaches his destination by travelling 50 km at a speed of 25 km/h. Determine the average speed during the whole journey.

- Ans
- 1. 50 km/h
 - 2. 75 km/h
 - 3. 58.33 km/h
 - 4. 25 km/h

Question ID : 26433071334
 Status : Answered
 Chosen Option : 1

Q.5 There are 90 female members and 60 male members in a club. If the average age of female members is 35 years, and the average age of male members is 45 years, then find the average age (in years) of the whole club?

- Ans
- 1. 39
 - 2. 36
 - 3. 40
 - 4. 47

Question ID : 26433082705
 Status : Answered
 Chosen Option : 1

Q.6 The difference between the two numbers is 15% of their sum. Find the ratio of the smaller number to the larger number.

- Ans
- 1. $\frac{13}{17}$
 - 2. $\frac{17}{13}$
 - 3. $\frac{17}{23}$
 - 4. $\frac{23}{17}$

Question ID : 26433080366
 Status : Answered
 Chosen Option : 3

Q.7 The radius of a cone is 5 cm and its slant height is 16 cm. It's total surface area (in cm^2) will be:

- Ans 1. 330
 2. 300
 3. 310
 4. 320

Question ID : 26433085772
Status : Answered
Chosen Option : 1

Q.8 Ruby bought 20 buttons for Rs.1. How many buttons she must sell for Rs.1 in order to get a profit of 25%?

- Ans 1. 15
 2. 17
 3. 14
 4. 16

Question ID : 26433080304
Status : Answered
Chosen Option : 4

Q.9 In a proportion, the product of the 1st and 4th term is 70 and that of 2nd and 3rd term is $3.5x$. The value of x is:

- Ans 1. 21
 2. 35
 3. 2
 4. 20

Question ID : 26433074931
Status : Answered
Chosen Option : 4

Q.10 A and B together can do a piece of the work in 50 hours, B and C together can do the same work in 75 hours and A and C together can do the same in 25 hours. Find the time in which A, B, and C together will complete the task.

- Ans 1. $400/11$ hours
 2. $150/11$ hours
 3. $131/11$ hours
 4. $300/11$ hours

Question ID : 264330116869
Status : Answered
Chosen Option : 4

Q.11 Find the difference between the greatest and the smallest 4-digit numbers exactly divisible by 36 and 48.

- Ans 1. 8928
 2. 8892
 3. 8298
 4. 8982

Question ID : 264330116648
Status : Answered
Chosen Option : 1

Q.12 If machine A and B can produce 1100 units in 9 h and 12 h respectively. In how many hours can machine A and B working together at these constant rates produce 1100 units?

- Ans
- 1. $\frac{36}{7}$
 - 2. $\frac{37}{7}$
 - 3. $\frac{39}{7}$
 - 4. $\frac{38}{7}$

Question ID : 26433074312

Status : Answered

Chosen Option : 1

Q.13 Robin travels one-fourth of the distance at 20 km/h, another one-fourth at 10 km/h, and the remaining distance at 80 km/h. Find Robin's average speed for the entire distance (correct to 2 decimal places)?

- Ans
- 1. 25 km/h
 - 2. 22.86 km/h
 - 3. 20 km/h
 - 4. 18.2 km/h

Question ID : 26433065292

Status : Answered

Chosen Option : 2

Q.14 The marked price of an item was Rs. 100000, but the shopkeeper offered a double discount of 20 percent and 10 percent. At what price did he finally sell the item?

- Ans
- 1. Rs. 72000
 - 2. Rs. 80000
 - 3. Rs. 70000
 - 4. Rs. 82000

Question ID : 264330116754

Status : Answered

Chosen Option : 1

Q.15 If $2^{305} + 303$ is divided by 9, then the remainder is:

- Ans
- 1. 2
 - 2. 4
 - 3. 6
 - 4. 1

Question ID : 26433079904

Status : Answered

Chosen Option : 1

Q.16 A chair is bought for ₹800 and sold for ₹1,100. Find the gain percentage.

- Ans
- 1. 40%
 - 2. 30%
 - 3. 37.5%
 - 4. 32.3%

Question ID : 26433074276
Status : Answered
Chosen Option : 3

Q.17 The curved surface area of right circular cylinder of height 14 cm is 110 cm^2 . What is the base diameter of the cylinder?

(Use $\pi = \frac{22}{7}$)

- Ans
- 1. 2.7 cm
 - 2. 2.4 cm
 - 3. 2.5 cm
 - 4. 2.6 cm

Question ID : 26433079779
Status : Answered
Chosen Option : 3

Q.18 The marked price on an item was Rs 2000/- but the shopkeeper offered a discount of 20 percent. How much did he finally sell the item for?

- Ans
- 1. Rs.1400
 - 2. Rs. 1200
 - 3. Rs. 1500
 - 4. Rs. 1600

Question ID : 264330116715
Status : Answered
Chosen Option : 4

Q.19 In how many years will ₹800 amount to ₹926.10 at 10% per annum, compounded half-yearly?

- Ans
- 1. 3
 - 2. 2
 - 3. 2.5
 - 4. 1.5

Question ID : 26433082403
Status : Answered
Chosen Option : 1

Q.20 If $a + b = 25$ and $a - b = 7$, then determine the mean proportion of a and b.

- Ans
- 1. 12
 - 2. 15
 - 3. 6
 - 4. 9

Question ID : 26433080114
Status : Answered
Chosen Option : 1

Q.1 Select the most appropriate ANTONYM of the given word.

Compassionate

- Ans 1. Likeable
 2. Merciful
 3. Cruel
 4. Fashionable

Question ID : 26433072211
Status : Answered
Chosen Option : 3

Q.2 Select the most appropriate synonym for the underlined word in the given sentence.

An oxygen cylinder is used to deliver oxygen through the patient's nasal orifice.

- Ans 1. origin
 2. ornate
 3. ordained
 4. opening

Question ID : 26433073754
Status : Answered
Chosen Option : 2

Q.3 Select the most appropriate ANTONYM of the given word.

Feeble

- Ans 1. Anxious
 2. Weak
 3. Sturdy
 4. Curious

Question ID : 26433073918
Status : Answered
Chosen Option : 3

Q.4 The sentence below is divided into four segments. Select the option that has an error of tense.

I has been / visiting my / family and relatives / during the winter vacation.

- Ans 1. during the winter vacation
 2. family and relatives
 3. visiting my
 4. I has been

Question ID : 26433092945
Status : Answered
Chosen Option : 4

Q.5 Select the most appropriate option that can substitute the underlined segment in the given sentence.
My uncle has an extremely large bungalow which has six bedrooms, five bathrooms and four living rooms.

- Ans 1. enormous
 2. meagre
 3. great
 4. oversize

Question ID : 26433086460
Status : Answered
Chosen Option : 1

Q.6 Select the most appropriate meaning of the underlined idiom in the given sentence.

Siraj-ud Daula's defeat can be attributed to a snake in the grass.

- Ans 1. A devoted attendant
 2. A disloyal soldier
 3. A deceitful person
 4. A coiled serpent

Question ID : 26433071996
Status : Answered
Chosen Option : 3

Q.7 Select the most appropriate option to fill in the blank.

He is an absolutely _____ man.

- Ans 1. chased
 2. chaste
 3. chest
 4. crazed

Question ID : 26433090388
Status : Answered
Chosen Option : 2

Q.8 Select the most appropriate ANTONYM of the bracketed word to fill in the blank.

The medicine was so _____ (sweet) that a man had to choose sugar along with it.

- Ans 1. rancid
 2. sour
 3. stale
 4. fetid

Question ID : 26433060720
Status : Answered
Chosen Option : 4

Q.9 Select the option in which all the words are spelt correctly.

- Ans 1. The sage preached that we are accountable to God in this life.
 2. The sage preached that we are akountable to God in this life.
 3. The sage preached that we are accountable to God in this life.
 4. The sage preached that we are accountale to God in this life.

Question ID : 26433072287
Status : Answered
Chosen Option : 1

Q.10 Select the most appropriate option to fill in the blank.

He indeed is intelligent who _____ this and succeeds in making all work truly great.

- Ans
- 1. was noticed
 - 2. noticed
 - 3. notices
 - 4. noticing

Question ID : 26433088957
Status : Answered
Chosen Option : 3

Q.11 Select the INCORRECTLY spelt word.

- Ans
- 1. Skulptor
 - 2. Miraculous
 - 3. Vision
 - 4. Succeed

Question ID : 26433073733
Status : Answered
Chosen Option : 1

Q.12 Select the most appropriate synonym of the given word.

Ideal

- Ans
- 1. Excellent
 - 2. Hefty
 - 3. Bad
 - 4. Intact

Question ID : 26433088925
Status : Answered
Chosen Option : 4

Q.13 Select the most appropriate option that can substitute the underlined segment in the given sentence. If there is no need to substitute it, select 'No substitution'.

I visited the hospital to enquire about eyes surgery.

- Ans
- 1. enquire about eye surgery
 - 2. enquire for eyes surgery
 - 3. enquired about eye surgery
 - 4. No substitution

Question ID : 26433093072
Status : Answered
Chosen Option : 2

Q.14 Select the most appropriate meaning of the given idiom.

To call in question

- Ans
- 1. Show indifference
 - 2. Take a resolute stand
 - 3. Challenge
 - 4. Dislike the arrangement

Question ID : 26433073874
Status : Not Answered
Chosen Option : --

Q.15 Complete the sentence using correct pair of words from the options given.

My brother _____ apples during his fast.

- Ans 1. ate; eight
 2. eight; eight
 3. ate; ate
 4. eight; ate

Question ID : 26433088870
 Status : Answered
 Chosen Option : 1

Comprehension:

In the following passage, some words have been deleted. Read the passage carefully and select the most appropriate option to fill in each blank.

One certain benefit of online communication either through email or even communicating through WhatsApp nowadays is that there is a (1) _____ dependence on paper. It is said that to make a ton of paper 17 trees have to be cut down. With the already existing demand for paper to meet (2) _____ needs, it would be horrendous to keep (3) _____ the demand for paper worldwide. Online communication is a boon as many documents are now sent by mail through PDF, Microsoft Word or the JPEG format. This means that there is certainly a (4) _____ in the use of paper due to online communication. Many people read online newspapers nowadays, which means there is a decline in the number of people buying offline versions of (5) _____.

SubQuestion No : 16

Q.16 Select the most appropriate option to fill in blank number 1.

- Ans 1. restless
 2. crest
 3. less
 4. dress

Question ID : 26433088749
 Status : Answered
 Chosen Option : 3

Comprehension:

In the following passage, some words have been deleted. Read the passage carefully and select the most appropriate option to fill in each blank.

One certain benefit of online communication either through email or even communicating through WhatsApp nowadays is that there is a (1) _____ dependence on paper. It is said that to make a ton of paper 17 trees have to be cut down. With the already existing demand for paper to meet (2) _____ needs, it would be horrendous to keep (3) _____ the demand for paper worldwide. Online communication is a boon as many documents are now sent by mail through PDF, Microsoft Word or the JPEG format. This means that there is certainly a (4) _____ in the use of paper due to online communication. Many people read online newspapers nowadays, which means there is a decline in the number of people buying offline versions of (5) _____.

SubQuestion No : 17

Q.17 Select the most appropriate option to fill in blank number 2.

- Ans 1. controversial
 2. various
 3. rare
 4. handle

Question ID : 26433088750
 Status : Answered
 Chosen Option : 2

Comprehension:

In the following passage, some words have been deleted. Read the passage carefully and select the most appropriate option to fill in each blank.

One certain benefit of online communication either through email or even communicating through WhatsApp nowadays is that there is a (1) _____ dependence on paper. It is said that to make a ton of paper 17 trees have to be cut down. With the already existing demand for paper to meet (2) _____ needs, it would be horrendous to keep (3) _____ the demand for paper worldwide. Online communication is a boon as many documents are now sent by mail through PDF, Microsoft Word or the JPEG format. This means that there is certainly a (4) _____ in the use of paper due to online communication. Many people read online newspapers nowadays, which means there is a decline in the number of people buying offline versions of (5) _____.

SubQuestion No : 18

Q.18 Select the most appropriate option to fill in blank number 3.

- Ans 1. planning
 2. increasing
 3. contriving
 4. depriving

Question ID : 26433088751
Status : Answered
Chosen Option : 4

Comprehension:

In the following passage, some words have been deleted. Read the passage carefully and select the most appropriate option to fill in each blank.

One certain benefit of online communication either through email or even communicating through WhatsApp nowadays is that there is a (1) _____ dependence on paper. It is said that to make a ton of paper 17 trees have to be cut down. With the already existing demand for paper to meet (2) _____ needs, it would be horrendous to keep (3) _____ the demand for paper worldwide. Online communication is a boon as many documents are now sent by mail through PDF, Microsoft Word or the JPEG format. This means that there is certainly a (4) _____ in the use of paper due to online communication. Many people read online newspapers nowadays, which means there is a decline in the number of people buying offline versions of (5) _____.

SubQuestion No : 19

Q.19 Select the most appropriate option to fill in blank number 4.

- Ans 1. traction
 2. reduction
 3. induction
 4. gumption

Question ID : 26433088752
Status : Answered
Chosen Option : 2

Comprehension:

In the following passage, some words have been deleted. Read the passage carefully and select the most appropriate option to fill in each blank.

One certain benefit of online communication either through email or even communicating through WhatsApp nowadays is that there is a (1) _____ dependence on paper. It is said that to make a ton of paper 17 trees have to be cut down. With the already existing demand for paper to meet (2) _____ needs, it would be horrendous to keep (3) _____ the demand for paper worldwide. Online communication is a boon as many documents are now sent by mail through PDF, Microsoft Word or the JPEG format. This means that there is certainly a (4) _____ in the use of paper due to online communication. Many people read online newspapers nowadays, which means there is a decline in the number of people buying offline versions of (5) _____.

SubQuestion No : 20

Q.20 Select the most appropriate option to fill in blank number 5.

- Ans 1. fliers
 2. magazines
 3. newspapers
 4. canvas

Question ID : 26433088753
 Status : Answered
 Chosen Option : 3

Section : Part-D-Hindi

Q.1 विकल्पों में से निम्नलिखित वाक्यांश के लिए उपयुक्त शब्द चुनें।
जो इंद्रियों से परे हो

- Ans 1. अतींद्रिय
 2. ज्ञानेंद्रिय
 3. जितेंद्रिय
 4. कर्मेंद्रिय

Question ID : 26433069992
 Status : Not Answered
 Chosen Option : --

Q.2 निम्नलिखित वाक्य के रेखांकित अंश के स्थान पर विकल्पों में सबसे उपयुक्त शब्द का चयन कीजिए।
शोक है कि मैं आपके पत्र का उत्तर नहीं दे सका।

- Ans 1. पता
 2. खुशी
 3. कष्ट
 4. खेद

Question ID : 26433066868
 Status : Not Answered
 Chosen Option : --

Q.3 'गंगा नदी भारत देश में हजारों लोगों की जीवनदायिनी है।' निम्नलिखित में से कौन सा शब्द 'गंगा' का पर्यायवाची शब्द नहीं है।

- Ans 1. हंसजा
 2. देवपगा
 3. विष्णुपदी
 4. सुरसरिता

Question ID : 26433069737
 Status : Not Answered
 Chosen Option : --

Q.4 सिंह की सवारी सबके बस की बात नहीं है।
उस विकल्प का चयन कीजिए जो उपरोक्त वाक्य में रेखांकित शब्द का पर्यायवाची शब्द नहीं है।

- Ans
- 1. सिंह
 - 2. केसरी
 - 3. मणि
 - 4. वनराज

Question ID : 26433091341
Status : Not Answered
Chosen Option : --

Q.5 'सारे शरीर की हड्डियों का ढांचा' वाक्यांश के लिए सार्थक शब्द है-

- Ans
- 1. शरीर की हड्डियां
 - 2. कंकाल
 - 3. हड्डी का ढांचा
 - 4. मांसपेशी

Question ID : 26433062224
Status : Not Answered
Chosen Option : --

Q.6 'जो कहा गया है' वाक्यांश के लिए सार्थक शब्द है-

- Ans
- 1. अकथ्य
 - 2. कल्पित
 - 3. कथित
 - 4. वचनातीत

Question ID : 26433065864
Status : Not Answered
Chosen Option : --

Q.7 निम्नलिखित में से अशुद्ध वाक्य कौन-सा है?

- Ans
- 1. कोयल पेड़ में बैठी है।
 - 2. अंजना ने नई साड़ी खरीदी।
 - 3. वसुंधरा बहुत सुरीला गाती है।
 - 4. सुमेध आज छुट्टी पर है।

Question ID : 26433066989
Status : Not Answered
Chosen Option : --

Q.8 'आफिसर ने कर्मचारी को फ़ाइल लाने का आदेश दिया।' इस वाक्य में प्रयुक्त 'आदेश' शब्द का अर्थ क्या है?

- Ans
- 1. छोटों को बहकाना
 - 2. आज्ञा पालन के लिए कहना
 - 3. अपने कर्मचारियों की अवज्ञा करना
 - 4. अपने से छोटों को डांटना

Question ID : 26433080915
Status : Not Answered
Chosen Option : --

Q.9 निम्न विकल्पों में से अशुद्ध वाक्य छाँटिए।

- Ans 1. लड़की पुस्तक पढ़ती है।
 2. लड़के ने घर जाना है।
 3. मुझे उस पर दया आती है।
 4. शीला को नाटक अच्छा लगा।

Question ID : 26433063035
 Status : Not Answered
 Chosen Option : --

Q.10 'निरक्षर' शब्द का विलोम क्या होगा?

- Ans 1. अपढ़
 2. महान
 3. अनपढ़
 4. साक्षर

Question ID : 26433067090
 Status : Not Answered
 Chosen Option : --

Q.11 निम्नलिखित वाक्य के किस भाग में वर्तनी सम्बन्धी त्रुटि है?
 'आजकल दिल्ली के प्रगति मैदान में हस्तशिल्प प्रदर्शनी चल रही है।'

- Ans 1. प्रगति मैदान में
 2. आजकल दिल्ली के
 3. हस्तशिल्प प्रदर्शनी
 4. चल रही है।

Question ID : 26433063025
 Status : Not Answered
 Chosen Option : --

Q.12 मुहावरों और उनके अर्थ का निम्नलिखित में से कौन सा युग्म सही है?

- Ans 1. दाल न गलना-पूरा बस चलना
 2. दिन का फेर होना-दिनभर भटकते रहना
 3. त्रिशंकु होना-अधर में लटकते रहना
 4. दो दिन का मेहमान-लम्बे समय तक जीना

Question ID : 26433062559
 Status : Not Answered
 Chosen Option : --

Q.13 तब की बात कुछ और थी। फिर ऐसा नहीं होगा।
 उपरोक्त वाक्य में प्रयुक्त 'तब', 'फिर' समानार्थक क्रिया-विशेषणों के सही अर्थ क्या हैं?

- Ans 1. 'तब' का अर्थ बाद में और 'फिर' का अर्थ बार – बार
 2. 'तब' का अर्थ उस समय और 'फिर' का अर्थ दुबारा
 3. 'तब' का अर्थ उस समय और 'फिर' का अर्थ अलग
 4. 'तब' का अर्थ कहीं और 'फिर' का अर्थ वर्तमान

Question ID : 26433079232
 Status : Not Answered
 Chosen Option : --

Q.14 निम्नलिखित वाक्य के किस भाग में शब्द-चयन सम्बन्धी अशुद्धि है?
'हिन्दी के प्रचार में बहुत बड़े-बड़े संकट हैं।'

- Ans 1. बड़े-बड़े संकट हैं।
 2. बहुत
 3. प्रचार में
 4. हिन्दी के

Question ID : 26433062806
 Status : Not Answered
 Chosen Option : --

Q.15 निम्नलिखित मुहावरे के लिए उपयुक्त सार्थक शब्द है-
टका-सा जवाब देना

- Ans 1. साफ इंकार करना
 2. हिचकना
 3. बहाना करना
 4. लालच देना

Question ID : 26433065771
 Status : Not Answered
 Chosen Option : --

Comprehension:

निम्नलिखित गद्यांश में कुछ शब्दों को हटा दिया गया है। दिए गए विकल्पों की सहायता से रिक्त स्थानों की पूर्ति कीजिए। प्रत्येक संख्या के लिए सबसे उपयुक्त विकल्प का चयन करें।

वैसे तो सभी आयु-वर्ग के लोग अपने-अपने जन्मदिन 1. _____ मनाते हैं, पर बच्चों में इस दिन को मनाने की उत्सुकता कुछ 2. _____ ही होती है। पूरे वर्ष वे इस दिन की 3. _____ करते रहते हैं। जब भी किसी के जन्मदिन में 4. _____ होते हैं लौटकर ज़रूर पूछते हैं कि हमारा जन्मदिन कब मनाया जाएगा। जन्मदिन पर घर को सजाया जाता है। इस दिन सभी मित्र 5. _____ होते हैं।

SubQuestion No : 16

Q.16 रिक्त स्थान 1 की पूर्ति के लिए सबसे उपयुक्त विकल्प का चयन कीजिए।

- Ans 1. उत्सुकता
 2. प्रसन्नतापूर्वक
 3. स्वाभाविक
 4. रोज़

Question ID : 264330111083
 Status : Not Answered
 Chosen Option : --

Comprehension:

निम्नलिखित गद्यांश में कुछ शब्दों को हटा दिया गया है। दिए गए विकल्पों की सहायता से रिक्त स्थानों की पूर्ति कीजिए। प्रत्येक संख्या के लिए सबसे उपयुक्त विकल्प का चयन करें।

वैसे तो सभी आयु-वर्ग के लोग अपने-अपने जन्मदिन 1. _____ मनाते हैं, पर बच्चों में इस दिन को मनाने की उत्सुकता कुछ 2. _____ ही होती है। पूरे वर्ष वे इस दिन की 3. _____ करते रहते हैं। जब भी किसी के जन्मदिन में 4. _____ होते हैं लौटकर ज़रूर पूछते हैं कि हमारा जन्मदिन कब मनाया जाएगा। जन्मदिन पर घर को सजाया जाता है। इस दिन सभी मित्र 5. _____ होते हैं।

SubQuestion No : 17

Q.17 रिक्त स्थान 2 की पूर्ति के लिए सबसे उपयुक्त विकल्प का चयन कीजिए।

- Ans** 1. अधिक
 2. प्रायः
 3. हमेशा
 4. कम

Question ID : 264330111084
 Status : Not Answered
 Chosen Option : --

Comprehension:

निम्नलिखित गद्यांश में कुछ शब्दों को हटा दिया गया है। दिए गए विकल्पों की सहायता से रिक्त स्थानों की पूर्ति कीजिए। प्रत्येक संख्या के लिए सबसे उपयुक्त विकल्प का चयन करें।

वैसे तो सभी आयु-वर्ग के लोग अपने-अपने जन्मदिन 1. _____ मनाते हैं, पर बच्चों में इस दिन को मनाने की उत्सुकता कुछ 2. _____ ही होती है। पूरे वर्ष वे इस दिन की 3. _____ करते रहते हैं। जब भी किसी के जन्मदिन में 4. _____ होते हैं लौटकर ज़रूर पूछते हैं कि हमारा जन्मदिन कब मनाया जाएगा। जन्मदिन पर घर को सजाया जाता है। इस दिन सभी मित्र 5. _____ होते हैं।

SubQuestion No : 18

Q.18 रिक्त स्थान 3 की पूर्ति के लिए सबसे उपयुक्त विकल्प का चयन कीजिए।

- Ans** 1. प्रतीक्षा
 2. सहायता
 3. विकसित
 4. सार्थकता

Question ID : 264330111085
 Status : Not Answered
 Chosen Option : --

Comprehension:

निम्नलिखित गद्यांश में कुछ शब्दों को हटा दिया गया है। दिए गए विकल्पों की सहायता से रिक्त स्थानों की पूर्ति कीजिए। प्रत्येक संख्या के लिए सबसे उपयुक्त विकल्प का चयन करें।

वैसे तो सभी आयु-वर्ग के लोग अपने-अपने जन्मदिन 1. _____ मनाते हैं, पर बच्चों में इस दिन को मनाने की उत्सुकता कुछ 2. _____ ही होती है। पूरे वर्ष वे इस दिन की 3. _____ करते रहते हैं। जब भी किसी के जन्मदिन में 4. _____ होते हैं लौटकर ज़रूर पूछते हैं कि हमारा जन्मदिन कब मनाया जाएगा। जन्मदिन पर घर को सजाया जाता है। इस दिन सभी मित्र 5. _____ होते हैं।

SubQuestion No : 19

Q.19 रिक्त स्थान 4 की पूर्ति के लिए सबसे उपयुक्त विकल्प का चयन कीजिए।

- Ans** 1. सामाजिक
 2. अभिव्यक्त
 3. विचलित
 4. सम्मिलित

Question ID : 264330111086
 Status : Not Answered
 Chosen Option : --

Comprehension:

निम्नलिखित गद्यांश में कुछ शब्दों को हटा दिया गया है। दिए गए विकल्पों की सहायता से रिक्त स्थानों की पूर्ति कीजिए। प्रत्येक संख्या के लिए सबसे उपयुक्त विकल्प का चयन करें।

वैसे तो सभी आयु-वर्ग के लोग अपने-अपने जन्मदिन 1. _____ मनाते हैं, पर बच्चों में इस दिन को मनाने की उत्सुकता कुछ 2. _____ ही होती है। पूरे वर्ष वे इस दिन की 3. _____ करते रहते हैं। जब भी किसी के जन्मदिन में 4. _____ होते हैं लौटकर ज़रूर पूछते हैं कि हमारा जन्मदिन कब मनाया जाएगा। जन्मदिन पर घर को सजाया जाता है। इस दिन सभी मित्र 5. _____ होते हैं।

SubQuestion No : 20

Q.20 रिक्त स्थान 5 की पूर्ति के लिए सबसे उपयुक्त विकल्प का चयन कीजिए।

- Ans**
- 1. प्रेरणा
 - 2. संबंधित
 - 3. एकत्रित
 - 4. प्रसिद्धि

Question ID : 264330111087

Status : **Not Answered**

Chosen Option : --