

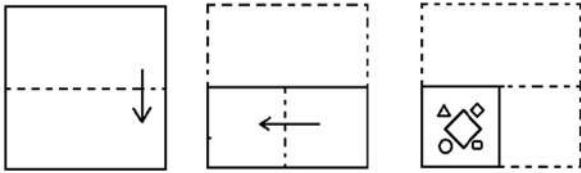
SSC GD Constable Shift 2 Question Papers with Answers Held On 10 Jan 2023

Roll Number	
Candidate Name	
Venue Name	
Exam Date	10/01/2023
Exam Time	11:45 AM - 12:45 PM
Subject	Constable GD Examination 2022

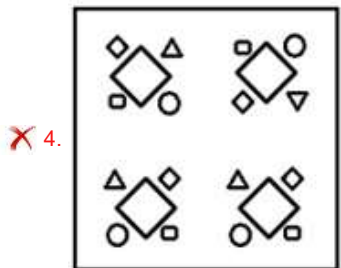
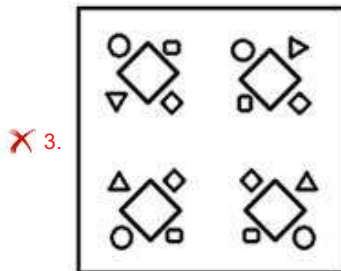
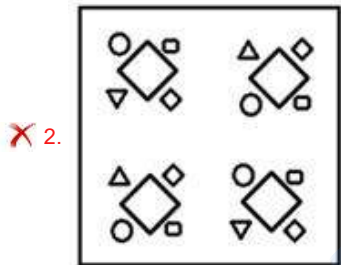
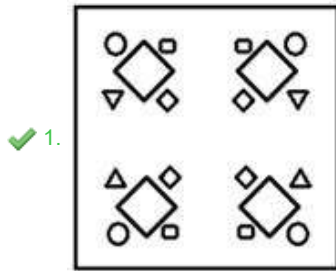
Section : **Part-A-General Intelligence and Reasoning**

Prepp
Your Personal Exam Guide

Q.1 The sequence of folding a piece of paper and the manner in which the folded paper has been cut is shown below. Select the figure which would most closely resemble the unfolded form of the paper.



Ans



Question ID : 26433087095
Status : Answered
Chosen Option : 1

Q.2 Six girls D, K, M, P, R and S are sitting around a circular table, facing the centre. S is sitting third to the left of R. P is sitting to the immediate right of R and to the immediate left of D. M is sitting to the immediate left of R. K is sitting to the immediate right of S and to the immediate left of M. Who is the immediate neighbour of K and D?

- Ans
- 1. R
 - 2. P
 - 3. M
 - 4. S

Question ID : 26433080472
Status : Answered
Chosen Option : 4

Q.3 Which two signs should be interchanged to make the below equation mathematically correct?

$$42 + 12 \div 24 \times 84 - 14 = 91$$

- Ans
- 1. + and \times
 - 2. + and -
 - 3. - and +
 - 4. \times and +

Question ID : 264330117505
Status : Answered
Chosen Option : 1

Q.4 Select the option that is related to the third word in the same way as the second word is related to the first word (The words must be considered as meaningful English words and must not be related to each other based on the number of letters/consonants/vowels in the word).

Pediatrician : Children :: Dermatologist : ?

- Ans
- 1. Feet
 - 2. Bones
 - 3. Plant
 - 4. Skin

Question ID : 26433078823
Status : Answered
Chosen Option : 4

Q.5 Which option represents the correct order of the given words as they would appear in the English dictionary?

- 1 lonely
- 2 longitude
- 3 lovely
- 4 lounge
- 5 locker

- Ans
- 1. 5,1,2,3,4
 - 2. 5,2,1,3,4
 - 3. 5,1,2,4,3
 - 4. 5,4,3,1,2

Question ID : 26433069317
Status : Answered
Chosen Option : 3

Q.6 Which letter-cluster will replace the question mark (?) to complete the given series?
 UERB, RHOE, ?, LNIK, IQFN

- Ans
- 1. OKMH
 - 2. OKNI
 - 3. OKLH
 - 4. OLMH

Question ID : 26433068574

Status : Answered

Chosen Option : 3

Q.7 Select the set in which the numbers are related in the same way as are the numbers of the following sets.

(NOTE : Operations should be performed on the whole numbers, without breaking down the numbers into its constituent digits. E.g. 13 – Operations on 13 such as adding/subtracting/multiplying etc. to 13 can be performed. Breaking down 13 into 1 and 3 and then performing mathematical operations on 1 and 3 is not allowed)
 (20, 90, 10)
 (25, 135, 10)

- Ans
- 1. (18, 72, 10)
 - 2. (19, 80, 15)
 - 3. (22, 150, 7)
 - 4. (30, 169, 12)

Question ID : 26433076546

Status : Answered

Chosen Option : 1

Q.8 Which of the following interchange of numbers (not digits) would make the given equation correct?

$$8 \times 15 \div 3 + 14 - 4 = 26$$

- Ans
- 1. 15, 26
 - 2. 4, 8
 - 3. 14, 15
 - 4. 3, 4

Question ID : 26433087045

Status : Answered

Chosen Option : 2

Q.9 A @ B means 'A is the husband of B'.
 A & B means 'A is the mother of B'.
 A # B means 'A is the daughter of B'.
 A % B means 'A is the sister of B'.
 If G % V @ K & P and G # S % M, then how is S related to P?

- Ans
- 1. Father's mother
 - 2. Mother-in-law
 - 3. Son's son
 - 4. Father-in-law

Question ID : 26433069614

Status : Answered

Chosen Option : 1

Q.10 Which of the following numbers will replace the question mark (?) in the given series?
7, 50, 351, 2458, ?

- Ans** 1. 17207
 2. 18000
 3. 13582
 4. 15265

Question ID : 26433082002
Status : Answered
Chosen Option : 1

Q.11 Which of the following terms will replace the question mark (?) in the given series?
DBA, JHG, PNM, ?

- Ans** 1. VTU
 2. VTQ
 3. VTS
 4. KMV

Question ID : 26433068631
Status : Answered
Chosen Option : 3

Q.12 Three Statements are given followed by Three conclusions numbered I, II and III.
Assuming the statements to be true, even if they seem to be at variance with commonly known facts, decide which of the conclusions logically follow(s) from the statements.

Statements:

Some cabbages are rocks.

All rocks are wheels.

No wheel is a scissor.

Conclusions:

I. All cabbages are wheels.

II. Some rocks are wheels.

III. Some wheels are not scissors.

- Ans** 1. Both conclusions I and II follow.
 2. Both conclusions I and III follow.
 3. Both conclusions II and III follow.
 4. All conclusions follow.

Question ID : 26433081792
Status : Answered
Chosen Option : 3

Q.13 Eight people are sitting in two parallel rows with 4 people each in such a way that there is equal distance between adjacent persons and they are facing each other. In row I – L, M, N and O are seated and all of them are facing south. In row II – P, Q, R and S are seated and all of them are facing north. N sits next to the person at the extreme right end of their row and is facing R. S sits at the extreme left end of their row. Q sits to the immediate right of R and is facing L. O sits at the extreme left end of their row. Who sits at the extreme right end of the row of people facing South?

- Ans
- 1. N
 - 2. M
 - 3. L
 - 4. O

Question ID : 26433068745
Status : Answered
Chosen Option : 2

Q.14 Select the correct mirror image of the given figure when the mirror is placed at MN as shown below.



- Ans
- 1. 9 d b 7 n o m 4 e
 - 2. 9 d b 7 m o n 4 e
 - 3. e d b 7 m o n 4 9
 - 4. 9 b d 7 m o n 4 e

Question ID : 26433082331
Status : Answered
Chosen Option : 2

Q.15 In a certain code language, 'MONTH' is written as '141213719' and 'YEAR' is written as '222269'. How will 'WEEK' be written in that language?

- Ans
- 1. 1444424
 - 2. 2444416
 - 3. 4222261
 - 4. 4222216

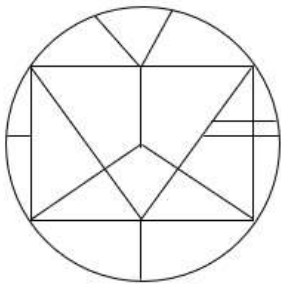
Question ID : 26433068228
Status : Answered
Chosen Option : 4

Q.16 In a certain code language, 'BUYER' is written as 'CSZCS' and 'CHILD' is written as 'DFJJE'. How will 'DEATH' be written in that language?

- Ans**
- 1. GFCRJ
 - 2. EBCUJ
 - 3. FFBUI
 - 4. ECBRI

Question ID : 26433082558
 Status : Answered
 Chosen Option : 4

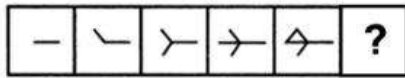
Q.17 Select the option figure which is embedded in the given figure. (Rotation is NOT allowed)



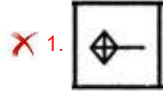
- Ans**
- 1.
 - 2.
 - 3.
 - 4.

Question ID : 26433069349
 Status : Answered
 Chosen Option : 3

Q.18 Select the figure from among the given options that can replace the question mark (?) in the following series.



Ans



Question ID : 26433080494

Status : Answered

Chosen Option : 4

Q.19 Select the option that is related to the fifth letter-cluster in the same way as the second letter-cluster is related to the first letter-cluster and the fourth letter-cluster is related to the third letter-cluster.

UCE : FEX :: PGS : TIS :: HKR : ?

Ans ✗ 1. SNK

✗ 2. SMJ

✓ 3. SMK

✗ 4. RKH

Question ID : 26433057745

Status : Answered

Chosen Option : 3

Q.20 Which of the following numbers will replace the question mark (?) in the given series?
7, 17, ?, 137, 407, 1217

Ans ✗ 1. 57

✗ 2. 34

✗ 3. 51

✓ 4. 47

Question ID : 26433068096

Status : Answered

Chosen Option : 4

Q.1 Sadanam P.V Balakrishnan won the Sangeet Natak Akademi Award in which dance form?

- Ans**
- 1. Lavani
 - 2. Kathakali
 - 3. Bharatnatyam
 - 4. Kuchipudi

Question ID : 264330115844
Status : Not Answered
Chosen Option : --

Q.2 Who among the following was the first Indian to be recruited in Indian Civil Service in British India?

- Ans**
- 1. Satyendranath Tagore
 - 2. Rahimtulla M Sayani
 - 3. Rabindranath Tagore
 - 4. Surendra Nath Banerjee

Question ID : 26433090582
Status : Not Answered
Chosen Option : --

Q.3 In badminton each game consist of how many points?

- Ans**
- 1. 15
 - 2. 21
 - 3. 11
 - 4. 20

Question ID : 264330115928
Status : Not Answered
Chosen Option : --

Q.4 Who was the first flag bearer for India in the Olympics?

- Ans**
- 1. Purma Banerjee
 - 2. Dhyan Chand
 - 3. Lal Shah Bokhari
 - 4. Zafar Iqbal

Question ID : 264330116258
Status : Not Answered
Chosen Option : --

Q.5 Rs. 50 banknote of Mahatma Gandhi (New) series has base colour of _____.

- Ans
- 1. chocolate brown
 - 2. stone grey
 - 3. fluorescent blue
 - 4. lavender

Question ID : 264330115292
Status : Not Answered
Chosen Option : --

Q.6 Which of the following is a classical dance form from Andhra Pradesh?

- Ans
- 1. Bharatanatyam
 - 2. Mohiniyattam
 - 3. Kuchipudi
 - 4. Manipuri

Question ID : 26433074069
Status : Not Attempted and Marked For Review
Chosen Option : --

Q.7 Identify a redox reaction.

- Ans
- 1. $2\text{Pb}(\text{NO}_3)_2(\text{s}) \xrightarrow{\text{Heat}} 2\text{PbO}(\text{s}) + 4\text{NO}_2(\text{g}) + \text{O}_2(\text{g})$
 - 2. $\text{CaCO}_3(\text{s}) \xrightarrow{\text{Heat}} \text{CaO}(\text{s}) + \text{CO}_2(\text{g})$
 - 3. $\text{MnO}_2 + 4\text{HCl} \rightarrow \text{MnCl}_2 + 2\text{H}_2\text{O} + \text{Cl}_2$
 - 4. $\text{Pb}(\text{s}) + \text{CuCl}_2(\text{aq}) \rightarrow \text{PbCl}_2(\text{aq}) + \text{Cu}(\text{s})$

Question ID : 26433091479
Status : Not Answered
Chosen Option : --

Q.8 Maha Shivratri is celebrated in the honour of the Hindu deity, Lord Shiva in the Hindu month of _____.

- Ans
- 1. Kartika
 - 2. Chaitra
 - 3. Phalguna
 - 4. Vaishakha

Question ID : 264330115124
Status : Not Answered
Chosen Option : --

Q.9 The plan between fifth five year plan and sixth five year plan is known as _____.

- Ans
- 1. Forward
 - 2. Equality
 - 3. Rolling
 - 4. Integrated

Question ID : 264330116139
Status : **Answered**
Chosen Option : 3

Q.10 According to Xuan Zang, the _____ of Nalanda Buddhist monastery asks new entrants difficult questions which were very difficult to answer

- Ans
- 1. chief of monastery
 - 2. gatekeeper
 - 3. youngest monk
 - 4. oldest monk

Question ID : 26433085220
Status : **Not Answered**
Chosen Option : --

Q.11 As on October 2022, who is the General Secretary of the Communist Party of India ?

- Ans
- 1. Sitaram Yechury
 - 2. D. Raja
 - 3. Indrajit Gupta
 - 4. Binoy Viswam

Question ID : 264330114995
Status : **Not Answered**
Chosen Option : --

Q.12 Skill India Mission's Governing Council is chaired by the _____.

- Ans
- 1. Chief Minister
 - 2. President
 - 3. Prime Minister
 - 4. Home Minister

Question ID : 264330116190
Status : **Not Answered**
Chosen Option : --

Q.13 The contribution made by each sector of the economy into GDP is called _____.

- Ans
- 1. structural composition
 - 2. nominal composition
 - 3. real GDP
 - 4. real composition

Question ID : 26433082165
Status : **Not Answered**
Chosen Option : --

Q.14 In Nomadic herding, herdsmen move from place to place with their animals for _____ and _____ along defined routes.

- Ans
- 1. money and water
 - 2. shelter and money
 - 3. fodder and water
 - 4. shelter and fodder

Question ID : 264330115539
Status : Not Answered
Chosen Option : --

Q.15 Who among the following was elected as Member of Rajya Sabha from Tripura, India in September 2022?

- Ans
- 1. Arun Singh
 - 2. Miriam Rengma
 - 3. Radha Mohan Das
 - 4. Biplab Kumar Deb

Question ID : 264330114948
Status : Not Answered
Chosen Option : --

Q.16 Which article of the Indian Constitution deals with the 'protection of life and personal liberty'?

- Ans
- 1. Article 19
 - 2. Article 21
 - 3. Article 20
 - 4. Article 22

Question ID : 26433089906
Status : Answered
Chosen Option : 2

Q.17 Which of the following case is NOT a criminal law case?

- Ans
- 1. Murder
 - 2. Harassment for dowry
 - 3. Theft
 - 4. Divorce case

Question ID : 26433089183
Status : Answered
Chosen Option : 4

Q.18 Name the state which has the highest female literacy rate in India as per census 2011.

- Ans 1. Mizoram
 2. Kerala
 3. Karnataka
 4. Maharashtra

Question ID : 264330116053
Status : Not Answered
Chosen Option : --

Q.19 In human body, the food passes through a continuous canal which begins at _____ and ends at anus.

- Ans 1. stomach
 2. buccal cavity
 3. food pipe
 4. rectum

Question ID : 264330115227
Status : Answered
Chosen Option : 1

Q.20 Tamil Nadu coast gets a large portion of its rain during _____ and _____.

- Ans 1. April and May
 2. October and November
 3. May and June
 4. August and September

Question ID : 26433087879
Status : Not Answered
Chosen Option : --

Section : Part-C-Elementary Mathematics

Q.1 A and B can complete a work separately in 10 days and 15 days, respectively. B alone work for 3 days and then he left the work. In how many days will A finish the remaining work?

- Ans 1. 6
 2. 9
 3. 8
 4. 7

Question ID : 26433081081
Status : Answered
Chosen Option : 3

Q.2 Find the product of the numbers whose HCF and LCM are 8 and 40 respectively.

- Ans
- 1. 240
 - 2. 300
 - 3. 320
 - 4. 360

Question ID : 264330116665
Status : Answered
Chosen Option : 3

Q.3 The difference between compound interest and simple interest is ₹228 for a certain sum of money at 8% per annum for $1\frac{1}{2}$ years, when compound interest is compounded half-yearly and simple interest is computed yearly. What is the sum?

- Ans
- 1. ₹46,900
 - 2. ₹46,531
 - 3. ₹47,000
 - 4. ₹46,875

Question ID : 26433090258
Status : Not Answered
Chosen Option : --

Q.4 John borrowed some amount of money from a bank at the rate of 10% per annum on compound interest for which interest is compounded annually. If he repaid his loan by paying ₹21,961.50 at the end of 4 years, what is the amount he borrowed?

- Ans
- 1. ₹17,000
 - 2. ₹15,000
 - 3. ₹16,000
 - 4. ₹14,000

Question ID : 26433071233
Status : Not Answered
Chosen Option : --

Q.5 A bus travels from station P to station Q at a speed of 70 km/h, and from station Q to station P at a speed of 90 km/h. What is the average speed of the bus during the entire journey?

- Ans
- 1. 75.78 km/h
 - 2. 78.75 km/h
 - 3. 80.25 km/h
 - 4. 82.35 km/h

Question ID : 26433080375
Status : Answered
Chosen Option : 2

Q.6 Sonal and Arjun together can finish a piece of work in 57 days, Arjun and Rohan in 38 days, and Rohan and Sonal in 38 days, then Sonal, Arjun, and Rohan together can finish the same work in how many days?

- Ans
- 1. 31.5 days
 - 2. 28.5 days
 - 3. 26.5 days
 - 4. 24.5 days

Question ID : 264330116874

Status : Answered

Chosen Option : 2

Q.7 On selling a table fan at Rs.2,827.06, the value of gain is 14% more than the value of loss incurred on selling it at Rs.2,230. In order to gain 14%, the selling price will be:

- Ans
- 1. Rs.3,045
 - 2. Rs.2,890
 - 3. Rs.2,860.26
 - 4. Rs.2,844.50

Question ID : 26433074923

Status : Not Answered

Chosen Option : --

Q.8 The ratio between the fourth proportional of 7, 5 and 3 to the third proportional of 7 and 13 is:

- Ans
- 1. 75 : 448
 - 2. 15 : 169
 - 3. 21 : 25
 - 4. 25 : 21

Question ID : 26433079943

Status : Answered

Chosen Option : 2

Q.9 A cylindrical tank has a capacity of 5632 m^3 . If the diameter of its base is 16 m, find its depth.

- Ans
- 1. 28 m
 - 2. 32 m
 - 3. 30 m
 - 4. 34 m

Question ID : 26433079807

Status : Answered

Chosen Option : 1

Q.10 A shopkeeper sells goods at a profit of 12% and uses a weight which is 15% less than the original weight. Find his total percentage gain. (Correct to 2 decimal places)

- Ans 1. 31.76%
 2. 30.24%
 3. 28.75%
 4. 25.80%

Question ID : 26433080164
Status : Answered
Chosen Option : 1

Q.11 If $A : B = 5 : 6$ and $B : C = 6 : 7$, then $(A + B) : (B + C) : (C + A)$ is:

- Ans 1. 12 : 13 : 11
 2. 11 : 13 : 12
 3. 11 : 12 : 13
 4. 13 : 11 : 12

Question ID : 26433074990
Status : Answered
Chosen Option : 2

Q.12 The LCM of two numbers is 15 times their HCF. The sum of the LCM and the HCF is 112. If one of the numbers is 49, then the other number is:

- Ans 1. 18
 2. 21
 3. 24
 4. 15

Question ID : 26433079829
Status : Answered
Chosen Option : 4

Q.13 In a circular race of 400 m in length, A and B start at speeds of 10 m/s and 16 m/s, respectively, at the same time from the same point. After how much time will they meet for the first time at the starting point when running in the same direction?

- Ans 1. 180 s
 2. 200 s
 3. 240 s
 4. 220 s

Question ID : 26433074968
Status : Not Answered
Chosen Option : --

Q.14 What is the length of the longest pole that can be placed in a room of dimensions 10 m × 10 m × 5 m?

- Ans 1. 20 m
 2. 25 m
 3. 15 m
 4. 10 m

Question ID : 26433066369
Status : Answered
Chosen Option : 3

Q.15 A clothing store announced a discount of 30 percent on shirts. Rivaan wanted to save Rs. 810 in discount. How many shirts should he buy to do so, if marked price of each shirt is Rs. 540?

- Ans 1. 6
 2. 5
 3. 4
 4. 8

Question ID : 264330116759
Status : Answered
Chosen Option : 2

Q.16 A train 120 m long passes a bridge in 18 seconds moving at a speed of 60 km/h. Find out the length of the bridge.

- Ans 1. 150 m
 2. 160 m
 3. 170 m
 4. 180 m

Question ID : 26433075415
Status : Answered
Chosen Option : 4

Q.17 A dealer marks his goods 15% above the cost price. Then he allows 20% discount on it. What will be his loss percentage?

- Ans 1. 7%
 2. 8%
 3. 5%
 4. 6%

Question ID : 26433082970
Status : Answered
Chosen Option : 2

Q.18 Number 350 is increased by 20% and then decreased by 25%. Find the new number.

- Ans 1. 320
 2. 3244
 3. 340
 4. 315

Question ID : 26433080004
Status : Answered
Chosen Option : 4

Q.19 The average cost of 10 items is Rs.89. If one item costs Rs.35, then find the average cost of remaining 9 items (in Rs.).

- Ans 1. 90
 2. 95
 3. 85
 4. 80

Question ID : 26433075717
Status : Answered
Chosen Option : 2

Q.20 Due to illness the weight of a person has reduced from 80 kg to 64 kg in a month. The percent decrease in the weight of the person is:

- Ans 1. 16 percent
 2. 14 percent
 3. 24 percent
 4. 20 percent

Question ID : 264330116794
Status : Answered
Chosen Option : 4

Section : Part-D-English

Q.1 Select the most appropriate meaning of the given idiom.
Bed of roses

- Ans 1. As one wishes
 2. Be bound to obey
 3. A pleasant condition of life
 4. With all of one's belonging

Question ID : 26433084689
Status : Answered
Chosen Option : 3

Q.2 Select the most appropriate meaning of the given idiom.

Bag and baggage

- Ans
- 1. Lots of bags
 - 2. To make a beginning
 - 3. Close friends
 - 4. With all belongings

Question ID : 26433072538
Status : Not Answered
Chosen Option : --

Q.3 Select the most appropriate option to fill in the blank.

Alas! The forest turned into a _____ land.

- Ans
- 1. bare
 - 2. beer
 - 3. bear
 - 4. buyer

Question ID : 26433090391
Status : Not Answered
Chosen Option : --

Q.4 Select the most appropriate option that can substitute the underlined segment in the given sentence. If there is no need to substitute it, select 'No substitution'.

The turtle can live in water as well as land.

- Ans
- 1. No substitution
 - 2. and also land
 - 3. also on land
 - 4. as well as on land.

Question ID : 26433093077
Status : Answered
Chosen Option : 4

Q.5 Select the most appropriate option that can substitute the underlined segment in the given sentence.

Baldness is quite very usual among youngsters these days.

- Ans
- 1. happening very surely
 - 2. having very certain
 - 3. getting very common
 - 4. hitting very severely

Question ID : 26433088503
Status : Not Answered
Chosen Option : --

Q.6 Select the most appropriate synonym of the given word.
Conceal

- Ans** 1. Manifest
 2. Disclose
 3. Confess
 4. Hide

Question ID : 26433084681
Status : Answered
Chosen Option : 4

Q.7 Select the most appropriate ANTONYM to substitute the underlined word in the given sentence.

Her lively demeanour makes her the ideal choice for this job.

- Ans** 1. dreamy
 2. slimy
 3. grainy
 4. gloomy

Question ID : 26433074010
Status : Answered
Chosen Option : 1

Q.8 Select the most appropriate ANTONYM of the given word.

Cruel

- Ans** 1. Trunk
 2. Brutal
 3. Kind
 4. Savage

Question ID : 26433086374
Status : Answered
Chosen Option : 3

Q.9 Select the INCORRECTLY spelt word.

- Ans** 1. Dribbling
 2. Slice
 3. Temperament
 4. Solvant

Question ID : 26433073501
Status : Answered
Chosen Option : 3

Q.10 Select the most appropriate ANTONYM of the given word.

Steadfast

- Ans 1. Dishonest
 2. Unwavering
 3. Immobile
 4. Dependable

Question ID : 26433072216
Status : **Not Answered**
Chosen Option : --

Q.11 Select the most appropriate option to fill in the blanks and make the sentence meaningful.

They were not _____ to eat during the _____.

- Ans 1. allowed; brake
 2. aloud; break
 3. allowed; break
 4. aloud; brake

Question ID : 26433092101
Status : **Marked For Review**
Chosen Option : 3

Q.12 Select the option that can be used as a one-word substitute for the given group of words.

The possible results of an action

- Ans 1. Implementation
 2. Decision
 3. Ramification
 4. Causation

Question ID : 26433089380
Status : **Not Answered**
Chosen Option : --

Q.13 Select the most appropriate synonym of the given word.

Bankrupt

- Ans 1. Well-off
 2. Invert
 3. Insolvent
 4. Careless

Question ID : 26433072187
Status : **Not Answered**
Chosen Option : --

Q.14 Select the **INCORRECTLY** spelt word.

- Ans 1. Ignorance
 2. Misspell
 3. Harass
 4. Occassion

Question ID : 26433073738
Status : Answered
Chosen Option : 3

Q.15 The following sentence has been split into four segments. Identify the segment that contains an error.

Nandu will / leave for the airport / as soon as / a taxi arrive.

- Ans 1. a taxi arrive
 2. leave for the airport
 3. Nandu will
 4. as soon as

Question ID : 26433099601
Status : Answered
Chosen Option : 1

Comprehension:

In the following passage, some words have been deleted. Read the passage carefully and select the most appropriate option to fill in each blank.

A natural gas barrier in the upper atmosphere called the ozone layer (1.) _____ people and other living things from the sun's harmful ultraviolet (UV) radiation. Ozone exists in tiny concentrations (2.) _____ the atmosphere, but the majority (about 90%) is found in the stratosphere, a layer that is 10 to 50 kilometres (3.) _____ the surface of Earth. The ozone layer is essential to life on Earth because it (4.) _____ out the majority of the sun's harmful UV rays. In the 1970s, researchers (5.) _____ that the ozone layer was thinning.

SubQuestion No : 16

Q.16 Select the most appropriate option to fill in blank number 1.

- Ans 1. attracts
 2. flourishes
 3. discovers
 4. shields

Question ID : 26433089803
Status : Answered
Chosen Option : 4

Comprehension:

In the following passage, some words have been deleted. Read the passage carefully and select the most appropriate option to fill in each blank.

A natural gas barrier in the upper atmosphere called the ozone layer (1.) _____ people and other living things from the sun's harmful ultraviolet (UV) radiation. Ozone exists in tiny concentrations (2.) _____ the atmosphere, but the majority (about 90%) is found in the stratosphere, a layer that is 10 to 50 kilometres (3.) _____ the surface of Earth. The ozone layer is essential to life on Earth because it (4.) _____ out the majority of the sun's harmful UV rays. In the 1970s, researchers (5.) _____ that the ozone layer was thinning.

SubQuestion No : 17

Q.17 Select the most appropriate option to fill in blank number 2.

- Ans 1. below
 2. in
 3. throughout
 4. under

Question ID : 26433089804
Status : Answered
Chosen Option : 2

Comprehension:

In the following passage, some words have been deleted. Read the passage carefully and select the most appropriate option to fill in each blank.

A natural gas barrier in the upper atmosphere called the ozone layer (1.) _____ people and other living things from the sun's harmful ultraviolet (UV) radiation. Ozone exists in tiny concentrations (2.) _____ the atmosphere, but the majority (about 90%) is found in the stratosphere, a layer that is 10 to 50 kilometres (3.) _____ the surface of Earth. The ozone layer is essential to life on Earth because it (4.) _____ out the majority of the sun's harmful UV rays. In the 1970s, researchers (5.) _____ that the ozone layer was thinning.

SubQuestion No : 18

Q.18 Select the most appropriate option to fill in blank number 3.

- Ans 1. into
 2. onto
 3. above
 4. at

Question ID : 26433089805
Status : Answered
Chosen Option : 3

Comprehension:

In the following passage, some words have been deleted. Read the passage carefully and select the most appropriate option to fill in each blank.

A natural gas barrier in the upper atmosphere called the ozone layer (1.) _____ people and other living things from the sun's harmful ultraviolet (UV) radiation. Ozone exists in tiny concentrations (2.) _____ the atmosphere, but the majority (about 90%) is found in the stratosphere, a layer that is 10 to 50 kilometres (3.) _____ the surface of Earth. The ozone layer is essential to life on Earth because it (4.) _____ out the majority of the sun's harmful UV rays. In the 1970s, researchers (5.) _____ that the ozone layer was thinning.

SubQuestion No : 19

Q.19 Select the most appropriate option to fill in blank number 4.

- Ans 1. blames
 2. builds
 3. brims
 4. blocks

Question ID : 26433089806

Status : Answered

Chosen Option : 4

Comprehension:

In the following passage, some words have been deleted. Read the passage carefully and select the most appropriate option to fill in each blank.

A natural gas barrier in the upper atmosphere called the ozone layer (1.) _____ people and other living things from the sun's harmful ultraviolet (UV) radiation. Ozone exists in tiny concentrations (2.) _____ the atmosphere, but the majority (about 90%) is found in the stratosphere, a layer that is 10 to 50 kilometres (3.) _____ the surface of Earth. The ozone layer is essential to life on Earth because it (4.) _____ out the majority of the sun's harmful UV rays. In the 1970s, researchers (5.) _____ that the ozone layer was thinning.

SubQuestion No : 20

Q.20 Select the most appropriate option to fill in blank number 5.

- Ans 1. learning
 2. learns
 3. learnt
 4. learn

Question ID : 26433089807

Status : Answered

Chosen Option : 3

Section : Part-D-Hindi

Q.1 निम्नलिखित मुहावरे के लिए उपयुक्त सार्थक शब्द है-
नानी याद आना

- Ans 1. नानी को याद करना
 2. छुप कर बैठ जाना
 3. मुसीबत देखकर घबरा जाना
 4. किसी से मिलने का मन करना

Question ID : 26433065776

Status : Not Answered

Chosen Option : --

Q.2 'समुद्र की सीमा अनंत है।' वाक्य में प्रयुक्त 'अनंत' शब्द का विलोम शब्द बताइए -

- Ans 1. अंतहीन
 2. अंत
 3. अनंग
 4. असीमित

Question ID : 26433069745
Status : Not Answered
Chosen Option : --

Q.3 निम्नलिखित में से अव्यय से बना विशेषण शब्द नहीं है -

- Ans 1. अगला
 2. बाहरी
 3. पिछला
 4. कैसा

Question ID : 26433085056
Status : Not Answered
Chosen Option : --

Q.4 'आज विद्यालय में शिक्षिका ने अंताक्षरी खेलने को कहा।' वाक्य में अशुद्ध वर्तनी वाला शब्द है -

- Ans 1. शिक्षिका
 2. विद्यालय
 3. खेलने को कहा
 4. अंताक्षरी

Question ID : 26433069698
Status : Not Answered
Chosen Option : --

Q.5 मूल क्रिया, प्रथम प्रेरणार्थक क्रिया और द्वितीय प्रेरणार्थक क्रिया का सही शब्द-क्रम चुनिए।

- Ans 1. बजवाना - बजना - बजाना
 2. कराना - करना - करावाना
 3. उठना - उठाना - उठवाना
 4. सुनना - सुनवाना - सुनाना

Question ID : 26433063044
Status : Not Answered
Chosen Option : --

Q.6 'दोपहर _____'

उपर्युक्त वाक्य में रिक्त स्थान का उपयुक्त विकल्प निम्न में से क्या होगा?

- Ans
- 1. का अर्थ होता है दो पहरों का संग्राम
 - 2. का अर्थ होता है दो पहरों का कदाचार
 - 3. का अर्थ होता है दो पहरों का समाहार
 - 4. का अर्थ होता है दो पहरों का अनाचार

Question ID : 26433067041

Status : Not Answered

Chosen Option : --

Q.7 'जिसका खण्डन न हो सके' वाक्यांश के लिए उचित शब्द बताइए -

- Ans
- 1. खंडित
 - 2. खण्डनीय
 - 3. अखण्डनीय
 - 4. समूल

Question ID : 26433065906

Status : Not Answered

Chosen Option : --

Q.8 रेखांकित शब्द-समूह के लिए सर्वाधिक उपयुक्त विकल्प चुनें।
मुसीबत का मारा वह किसी और स्थान पर जा बसा।

- Ans
- 1. तत्र
 - 2. अन्यत्र
 - 3. सर्वत्र
 - 4. अत्र

Question ID : 26433062287

Status : Not Answered

Chosen Option : --

Q.9 इस जल में अनेक जीव हैं।

रेखांकित शब्द के विलोम शब्द का चयन कीजिए।

- Ans
- 1. सलिल
 - 2. तालाब
 - 3. थल
 - 4. स्थान

Question ID : 26433079643

Status : Not Answered

Chosen Option : --

Q.10 दो घोड़ों पर सवार होने से तुम सफल नहीं रहोगे।
उपरोक्त वाक्य में रेखांकित अंश के लिए कौन - सा शब्द उपयुक्त होगा?

- Ans
- 1. त्रिरंगी नीति
 - 2. दुरंगी नीति
 - 3. सवारी नीति
 - 4. सफल नीति

Question ID : 26433063059
Status : Not Answered
Chosen Option : --

Q.11 'ऊँट के मुँह में जीरा' मुहावरे का सही अर्थ है -

- Ans
- 1. अधिक खाने वाले को कम देना
 - 2. ऊँट को जीरा खिलाना
 - 3. खाने में जीरा डालना
 - 4. मित्रता करना

Question ID : 26433065923
Status : Not Answered
Chosen Option : --

Q.12 निम्नलिखित वाक्य में से अशुद्धि पहचानें-
वह आया परंतु मैं नहीं गया।

- Ans
- 1. आया
 - 2. गया
 - 3. परंतु
 - 4. वह

Question ID : 26433066827
Status : Not Answered
Chosen Option : --

Q.13 निम्नलिखित वाक्यांश के लिए उपयुक्त शब्द का चयन विकल्पों में से कीजिए।
जिसने चित्त किसी विषय में दिया (लगाया) है

- Ans
- 1. दत्तचित्त
 - 2. विषयचित्त
 - 3. अग्रसोची
 - 4. अग्रगामी

Question ID : 26433069997
Status : Not Answered
Chosen Option : --

Q.14 हिमालय भारत का ताज है।

रेखांकित शब्द के उचित पर्यायवाची शब्द का चयन कीजिए।

- Ans 1. प्रभा
 2. गिरिराज
 3. मदन
 4. आसव

Question ID : 26433079626

Status : Not Answered

Chosen Option : --

Q.15 'आकलन' शब्द के लिए इनमें से उपयुक्त पर्यायवाची शब्द कौन-सा है?

- Ans 1. अगणन
 2. गणना
 3. शरण
 4. नूतन

Question ID : 26433066893

Status : Not Answered

Chosen Option : --

Comprehension:

निम्न गद्यांश में से कुछ शब्दों को हटा दिया गया है। गद्यांश के नीचे पूछे गए प्रश्नों में इन रिक्त स्थानों के लिए उपयुक्त शब्द का चयन विकल्पों में से कीजिए।

राष्ट्र के 1. _____ विकास के लिए चरित्र निर्माण परम आवश्यक है। जिस प्रकार वर्तमान में भौतिक निर्माण का कार्य अनेक योजनाओं के माध्यम से तीव्र गति के साथ सम्पन्न हो रहा है, वैसे ही वर्तमान की सबसे बड़ी आवश्यकता यह है कि देशवासियों के चरित्र निर्माण के लिए भी प्रयत्न किया जाए। उत्तम चरित्रवान व्यक्ति ही 2. _____ की सर्वोच्च संपदा है। जनतंत्र के लिए तो यह एक महान 3. _____ योजना है। जन-समाज में राष्ट्र, संस्कृति, 4. _____ एवं परिवार के प्रति हमारा क्या कर्तव्य है इसका पूर्ण रूप से बोध कराना एवं राष्ट्र में व्याप्त समग्र भ्रष्टाचार के प्रति निषेधात्मक वातावरण का निर्माण करना ही चरित्र निर्माण का प्रथम 5. _____ है।

SubQuestion No : 16

Q.16 रिक्त स्थान 1 के लिए सर्वाधिक उपयुक्त शब्द इनमें से क्या होगा?

- Ans 1. सभी
 2. पूरे
 3. अधिक
 4. सर्वांगीण

Question ID : 26433072588

Status : Not Answered

Chosen Option : --

Comprehension:

निम्न गद्यांश में से कुछ शब्दों को हटा दिया गया है। गद्यांश के नीचे पूछे गए प्रश्नों में इन रिक्त स्थानों के लिए उपयुक्त शब्द का चयन विकल्पों में से कीजिए।

राष्ट्र के 1. _____ विकास के लिए चरित्र निर्माण परम आवश्यक है। जिस प्रकार वर्तमान में भौतिक निर्माण का कार्य अनेक योजनाओं के माध्यम से तीव्र गति के साथ सम्पन्न हो रहा है, वैसे ही वर्तमान की सबसे बड़ी आवश्यकता यह है कि देशवासियों के चरित्र निर्माण के लिए भी प्रयत्न किया जाए। उत्तम चरित्रवान व्यक्ति ही 2. _____ की सर्वोच्च संपदा है। जनतंत्र के लिए तो यह एक महान 3. _____ योजना है। जन-समाज में राष्ट्र, संस्कृति, 4. _____ एवं परिवार के प्रति हमारा क्या कर्तव्य है इसका पूर्ण रूप से बोध कराना एवं राष्ट्र में व्याप्त समग्र भ्रष्टाचार के प्रति निषेधात्मक वातावरण का निर्माण करना ही चरित्र निर्माण का प्रथम 5. _____ है।

SubQuestion No : 17

Q.17 रिक्त स्थान 2 के लिए सर्वाधिक उपयुक्त शब्द इनमें से क्या होगा?

- Ans
- 1. राज्य
 - 2. मोहल्ले
 - 3. राष्ट्र
 - 4. प्रदेश

Question ID : 26433072589

Status : Not Answered

Chosen Option : --

Comprehension:

निम्न गद्यांश में से कुछ शब्दों को हटा दिया गया है। गद्यांश के नीचे पूछे गए प्रश्नों में इन रिक्त स्थानों के लिए उपयुक्त शब्द का चयन विकल्पों में से कीजिए।

राष्ट्र के 1. _____ विकास के लिए चरित्र निर्माण परम आवश्यक है। जिस प्रकार वर्तमान में भौतिक निर्माण का कार्य अनेक योजनाओं के माध्यम से तीव्र गति के साथ सम्पन्न हो रहा है, वैसे ही वर्तमान की सबसे बड़ी आवश्यकता यह है कि देशवासियों के चरित्र निर्माण के लिए भी प्रयत्न किया जाए। उत्तम चरित्रवान व्यक्ति ही 2. _____ की सर्वोच्च संपदा है। जनतंत्र के लिए तो यह एक महान 3. _____ योजना है। जन-समाज में राष्ट्र, संस्कृति, 4. _____ एवं परिवार के प्रति हमारा क्या कर्तव्य है इसका पूर्ण रूप से बोध कराना एवं राष्ट्र में व्याप्त समग्र भ्रष्टाचार के प्रति निषेधात्मक वातावरण का निर्माण करना ही चरित्र निर्माण का प्रथम 5. _____ है।

SubQuestion No : 18

Q.18 रिक्त स्थान 3 के लिए सर्वाधिक उपयुक्त शब्द इनमें से क्या होगा?

- Ans
- 1. हितकारी
 - 2. लाभकारी
 - 3. कल्याणकारी
 - 4. मनोहारी

Question ID : 26433072590

Status : Not Answered

Chosen Option : --

Comprehension:

निम्न गद्यांश में से कुछ शब्दों को हटा दिया गया है। गद्यांश के नीचे पूछे गए प्रश्नों में इन रिक्त स्थानों के लिए उपयुक्त शब्द का चयन विकल्पों में से कीजिए।

राष्ट्र के 1. _____ विकास के लिए चरित्र निर्माण परम आवश्यक है। जिस प्रकार वर्तमान में भौतिक निर्माण का कार्य अनेक योजनाओं के माध्यम से तीव्र गति के साथ सम्पन्न हो रहा है, वैसे ही वर्तमान की सबसे बड़ी आवश्यकता यह है कि देशवासियों के चरित्र निर्माण के लिए भी प्रयत्न किया जाए। उत्तम चरित्रवान व्यक्ति ही 2. _____ की सर्वोच्च संपदा है। जनतंत्र के लिए तो यह एक महान 3. _____ योजना है। जन-समाज में राष्ट्र, संस्कृति, 4. _____ एवं परिवार के प्रति हमारा क्या कर्तव्य है इसका पूर्ण रूप से बोध कराना एवं राष्ट्र में व्याप्त समग्र भ्रष्टाचार के प्रति निषेधात्मक वातावरण का निर्माण करना ही चरित्र निर्माण का प्रथम 5. _____ है।

SubQuestion No : 19

Q.19 रिक्त स्थान 4 के लिए सर्वाधिक उपयुक्त शब्द इनमें से क्या होगा?

- Ans**
- 1. राज्य
 - 2. लोग
 - 3. राष्ट्र
 - 4. समाज

Question ID : 26433072591

Status : Not Answered

Chosen Option : --

Comprehension:

निम्न गद्यांश में से कुछ शब्दों को हटा दिया गया है। गद्यांश के नीचे पूछे गए प्रश्नों में इन रिक्त स्थानों के लिए उपयुक्त शब्द का चयन विकल्पों में से कीजिए।

राष्ट्र के 1. _____ विकास के लिए चरित्र निर्माण परम आवश्यक है। जिस प्रकार वर्तमान में भौतिक निर्माण का कार्य अनेक योजनाओं के माध्यम से तीव्र गति के साथ सम्पन्न हो रहा है, वैसे ही वर्तमान की सबसे बड़ी आवश्यकता यह है कि देशवासियों के चरित्र निर्माण के लिए भी प्रयत्न किया जाए। उत्तम चरित्रवान व्यक्ति ही 2. _____ की सर्वोच्च संपदा है। जनतंत्र के लिए तो यह एक महान 3. _____ योजना है। जन-समाज में राष्ट्र, संस्कृति, 4. _____ एवं परिवार के प्रति हमारा क्या कर्तव्य है इसका पूर्ण रूप से बोध कराना एवं राष्ट्र में व्याप्त समग्र भ्रष्टाचार के प्रति निषेधात्मक वातावरण का निर्माण करना ही चरित्र निर्माण का प्रथम 5. _____ है।

SubQuestion No : 20

Q.20 रिक्त स्थान 5 के लिए सर्वाधिक उपयुक्त शब्द इनमें से क्या होगा?

- Ans**
- 1. तरीका
 - 2. रास्ता
 - 3. सोपान
 - 4. कदम

Question ID : 26433072592

Status : Not Answered

Chosen Option : --