

SSC CPO Oct 04, 2023 Shift 3 Question Paper

Roll Number	
Candidate Name	
Venue Name	
Exam Date	04/10/2023
Exam Time	4:00 PM - 6:00 PM
Subject	SICPO Paper I 2023

Section : General Intelligence and Reasoning

Q.1 In a certain code language, 'ACTION' is written as 'TXANLI' and 'DEBATE' is written as 'BVDEGA'. How will 'CHANGE' be written in that language?

- Ans
- 1. ATHFN
 - 2. HRPEIU
 - 3. BJDLER
 - 4. ASCETN

Question ID : 26433074764
 Option 1 ID : 264330293144
 Option 2 ID : 264330293145
 Option 3 ID : 264330293147
 Option 4 ID : 264330293146
 Status : Answered
 Chosen Option : 4

Q.2 Which of the following numbers will replace the question mark (?) in the given series?

38, 57, 40, 59, 42, ?

- Ans
- 1. 59
 - 2. 62
 - 3. 60
 - 4. 61

Question ID : 26433057339
 Option 1 ID : 264330224340
 Option 2 ID : 264330224343
 Option 3 ID : 264330224341
 Option 4 ID : 264330224342
 Status : Answered
 Chosen Option : 4

Q.3 Which of the following numbers will replace the question mark (?) in the given series?

112, 129, 150, 175, 204, ?

- Ans
- 1. 240
 - 2. 234
 - 3. 237
 - 4. 245

Question ID : 26433067867
 Option 1 ID : 264330265980
 Option 2 ID : 264330265981
 Option 3 ID : 264330265982
 Option 4 ID : 264330265983
 Status : Answered
 Chosen Option : 3

Q.4 In a certain code language, 'COACH' is coded as XAOHC and 'BERTH' is coded as WREHT. How will 'TRAIN' be coded in the same language?

- Ans 1. OARNI
 2. PARNI
 3. PARIN
 4. ONIAR

Question ID : 264330132209
Option 1 ID : 264330517934
Option 2 ID : 264330517931
Option 3 ID : 264330517933
Option 4 ID : 264330517932
Status : Answered
Chosen Option : 1

Q.5 If '+' means '-', '-' means 'x', 'x' means '÷' and '÷' means '+', what will come in place of '?' in the following equation?
 $121 \times 11 \div 28 - 3 + 46 = ?$

- Ans 1. 49
 2. 43
 3. 65
 4. 71

Question ID : 264330101148
Option 1 ID : 264330397140
Option 2 ID : 264330397137
Option 3 ID : 264330397138
Option 4 ID : 264330397139
Status : Answered
Chosen Option : 1

Q.6 Which of the following terms will replace the question mark (?) in the given series?

LDEA NGIF ? RMQP TPUU

- Ans 1. PMJK
 2. PIMK
 3. PMIK
 4. PJMK

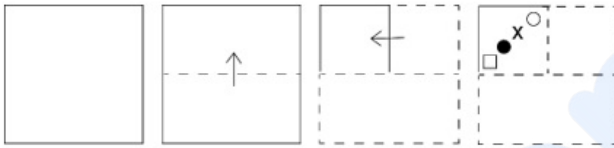
Question ID : 26433085319
Option 1 ID : 264330334980
Option 2 ID : 264330334977
Option 3 ID : 264330334979
Option 4 ID : 264330334978
Status : Answered
Chosen Option : 4

Q.7 If '+' means '-', '-' means 'x', 'x' means '÷' and '÷' means '+', then what will come in place of (?) in the given equation?
 $30 + 5 - 2 \times 10 \div 2 = ?$

- Ans
- 1. 50
 - 2. 31
 - 3. 80
 - 4. 60

Question ID : 264330106671
 Option 1 ID : 264330418985
 Option 2 ID : 264330418986
 Option 3 ID : 264330418988
 Option 4 ID : 264330418987
 Status : Answered
 Chosen Option : 2

Q.8 A paper is folded and cut as shown below. How will it appear when unfolded?



Ans

- 1.
- 2.
- 3.
- 4.

Question ID : 264330103007
 Option 1 ID : 264330404418
 Option 2 ID : 264330404417
 Option 3 ID : 264330404419
 Option 4 ID : 264330404420
 Status : Answered
 Chosen Option : 2

Q.9 In a certain code language, 'HORSE' is coded as 75 and 'MOVE' is coded as 63. How will 'RACE' be coded in that language?

- Ans
- 1. 46
 - 2. 32
 - 3. 48
 - 4. 35

Question ID : 26433074708
 Option 1 ID : 264330292922
 Option 2 ID : 264330292920
 Option 3 ID : 264330292923
 Option 4 ID : 264330292921
 Status : Answered
 Chosen Option : 4

Q.10 उस विकल्प का चयन कीजिए, जो तीसरे शब्द से उसी प्रकार संबंधित है, जिस प्रकार दूसरा शब्द पहले शब्द से संबंधित है। (शब्दों को अर्थपूर्ण शब्दों के रूप में माना जाना चाहिए, और वह शब्द में अक्षरों की संख्या/व्यंजनों/स्वरों की संख्या के आधार पर एक-दूसरे से संबंधित नहीं होना चाहिए।)

आह (Alas) : शोक (woe) :: सुंदरता (Beauty) : ?

- Ans
- 1. मिटाना (Expunge)
 - 2. असुरूपता (Inelegance)
 - 3. असभ्यता (Crudeness)
 - 4. आकर्षण (Charm)

Question ID : 264330145403
 Option 1 ID : 264330569870
 Option 2 ID : 264330569867
 Option 3 ID : 264330569869
 Option 4 ID : 264330569868
 Status : Answered
 Chosen Option : 4

Q.11 Sona goes to a park every day for walking. One morning, she started walking from her home and walked 40 km towards the north. Then she turned to the right and walked 60 km. Again, she turned right and walked 40 km. Lastly, she took a left turn and walked 60 km. In which direction and how far is she from her home?

- Ans
- 1. East, 90 km
 - 2. West, 120 km
 - 3. West, 60 km
 - 4. East, 120 km

Question ID : 26433097223
 Option 1 ID : 264330381590
 Option 2 ID : 264330381591
 Option 3 ID : 264330381589
 Option 4 ID : 264330381592
 Status : Answered
 Chosen Option : 4

Q.12 Which of the following numbers will replace the question mark (?) in the given series?

3, 5, 7, 12, 37, 69, 357, ?

- Ans 1. 656
 2. 645
 3. 665
 4. 654

Question ID : 264330145294

Option 1 ID : 264330569432

Option 2 ID : 264330569433

Option 3 ID : 264330569431

Option 4 ID : 264330569434

Status : Not Attempted and
Marked For Review

Chosen Option : --

Q.13 Three Statements are given followed by Three conclusions numbered I, II and III. Assuming the statements to be true, even if they seem to be at variance with commonly known facts, decide which of the conclusions logically follow(s) from the statements.

Statements:

All plains are mountains.

No sea is a mountain.

Some valleys are seas.

Conclusions:

I. Some valleys are plains.

II. No valley is a mountain.

III. No sea is a plain.

- Ans 1. Only conclusion III follows.
 2. Only conclusion II follows.
 3. Both conclusions I and II follow.
 4. Only conclusion I follows.

Question ID : 264330145340

Option 1 ID : 264330569616

Option 2 ID : 264330569617

Option 3 ID : 264330569615

Option 4 ID : 264330569618

Status : Answered

Chosen Option : 1

Q.14 Select the option that represents the letters that, when placed from left to right in the blanks below, will complete the letter series.

P _ R R _ P Q _ _ S _ Q R _ S P _ R R S

- Ans 1. R Q P Q R S Q
 2. S Q R R Q P R
 3. S Q Q R R P Q
 4. Q S R R P R Q

Question ID : 264330180746

Option 1 ID : 264330708954

Option 2 ID : 264330708951

Option 3 ID : 264330708953

Option 4 ID : 264330708952

Status : Answered

Chosen Option : 4

Q.15 If A denotes '+', B denotes '×', C denotes '−', and D denotes '÷', then what will be the value of the following equation?
 $16 B 5 A 112 D 8 C 32 = ?$

- Ans
- 1. 65
 - 2. 72
 - 3. 62
 - 4. 57

Question ID : 264330129783

Option 1 ID : 264330508364

Option 2 ID : 264330508365

Option 3 ID : 264330508366

Option 4 ID : 264330508363

Status : Answered

Chosen Option : 3

Q.16 Six students Shree, Dayal, Sharda, Tripti, Shrishti and Manju are sitting around a circular table facing the centre (not necessarily in the same order). Shree is an immediate neighbour of both Dayal and Tripti. Manju is sitting second to the right of Dayal. Shrishti is an immediate neighbour of both Manju and Tripti. Who is an immediate neighbour of Sharda?

- Ans
- 1. Dayal
 - 2. Shree
 - 3. Tripti
 - 4. Shrishti

Question ID : 26433082278

Option 1 ID : 264330322946

Option 2 ID : 264330322945

Option 3 ID : 264330322947

Option 4 ID : 264330322948

Status : Answered

Chosen Option : 1

Q.17 Select the option that is related to the fourth term in the same way as the first term is related to the second term and the fifth term is related to the sixth term.
 $2 : 26 :: ? : 152 :: 27 : 1026$

- Ans
- 1. 6
 - 2. 8
 - 3. 24
 - 4. 13

Question ID : 26433079358

Option 1 ID : 264330311421

Option 2 ID : 264330311422

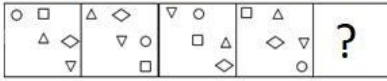
Option 3 ID : 264330311423

Option 4 ID : 264330311420

Status : Answered

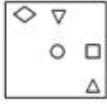
Chosen Option : 2

Q.18 Select the figure that will replace the question mark (?) in the following figure series.



Ans

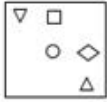
✓ 1.



✗ 2.



✗ 3.



✗ 4.



Question ID : 264330145491

Option 1 ID : 264330570220

Option 2 ID : 264330570219

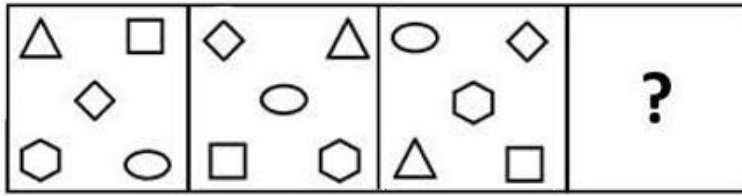
Option 3 ID : 264330570222

Option 4 ID : 264330570221

Status : Answered

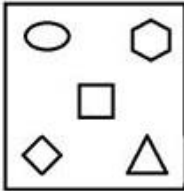
Chosen Option : 1

Q.19 Select a suitable figure from the answer figures which would replace the question mark (?).

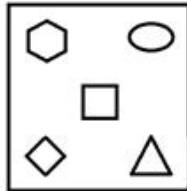


Ans

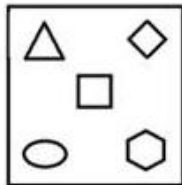
✗ 1.



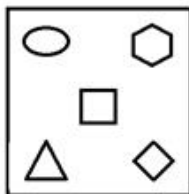
✓ 2.



✗ 3.



✗ 4.



Question ID : 26433066046
 Option 1 ID : 264330258728
 Option 2 ID : 264330258729
 Option 3 ID : 264330258731
 Option 4 ID : 264330258730

Status : Answered

Chosen Option : 2

Q.20 If '+' means '-', '-' means 'x', 'x' means '÷' and '÷' means '+', what will come in place of '?' in the following equation?

$$83 \div 12 - 65 \times 13 + 47 = ?$$

Ans ✗ 1. 92

✓ 2. 96

✗ 3. 79

✗ 4. 108

Question ID : 264330101151
 Option 1 ID : 264330397149
 Option 2 ID : 264330397151
 Option 3 ID : 264330397152
 Option 4 ID : 264330397150

Status : Answered

Chosen Option : 2

Q.21 In a certain code language, "GBTA" is coded as "24" and "ZWQVI" is coded as "30". How will "DLUCPR" be coded in that language?

- Ans**
- 1. 30
 - 2. 28
 - 3. 24
 - 4. 36

Question ID : 264330132245
Option 1 ID : 264330518077
Option 2 ID : 264330518075
Option 3 ID : 264330518076
Option 4 ID : 264330518078
Status : Answered
Chosen Option : 4

Q.22 In this question, three statements are given, followed by two conclusions numbered I and II. Assuming the statements to be true, even if they seem to be at variance with commonly known facts, decide which of the conclusions logically follows/follow from the statements.

Statements:

- I. Some rooms are cages.
- II. Some cages are enclosures.
- III. All enclosures are houses.

Conclusions:

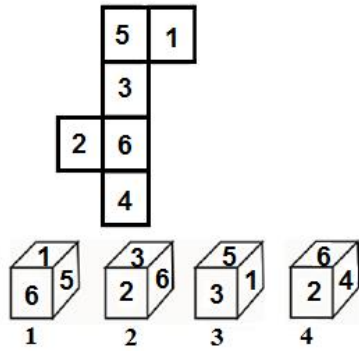
- I. Some houses are cages.
- II. All rooms are enclosures.

- Ans**
- 1. Both conclusions I and II follow
 - 2. Only conclusion I follows
 - 3. Neither conclusion I nor II follows
 - 4. Only conclusion II follows

Question ID : 264330104077
Option 1 ID : 264330408611
Option 2 ID : 264330408609
Option 3 ID : 264330408612
Option 4 ID : 264330408610
Status : Answered
Chosen Option : 2

Q.23 If the given sheet is folded to form a cube, which of the given figures are possible?

(The numbers are shown to indicate the sides only.)



- Ans**
- 1. All 1, 2, 3 and 4
 - 2. Only 2 and 3
 - 3. Only 1, 2 and 3
 - 4. Only 2, 3 and 4

Question ID : 26433065673
 Option 1 ID : 264330257252
 Option 2 ID : 264330257254
 Option 3 ID : 264330257253
 Option 4 ID : 264330257255
 Status : Answered
 Chosen Option : 4

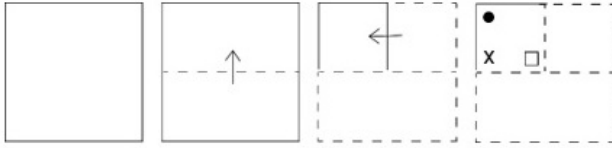
Q.24 If '+' means '-', '-' means 'x', 'x' means '÷', '÷' means '+', then what will come in place of the question mark (?) in the following equation?

$$14 - 7 \div 42 \times 6 + 33 = ?$$

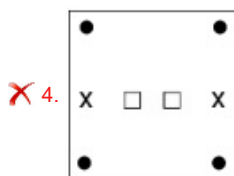
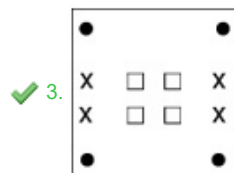
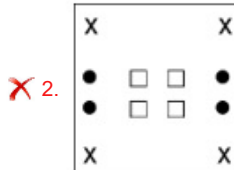
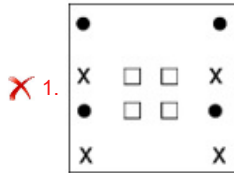
- Ans**
- 1. 72
 - 2. 84
 - 3. 68
 - 4. 56

Question ID : 264330126056
 Option 1 ID : 264330493899
 Option 2 ID : 264330493896
 Option 3 ID : 264330493898
 Option 4 ID : 264330493897
 Status : Answered
 Chosen Option : 1

Q.25 A paper is folded and cut as shown below. How will it appear when unfolded?



Ans



Question ID : 264330103005

Option 1 ID : 264330404411

Option 2 ID : 264330404410

Option 3 ID : 264330404412

Option 4 ID : 264330404409

Status : Answered

Chosen Option : 3

Q.26 Two statements are given, followed by two conclusions numbered I and II. Assuming the statements to be true, even if they seem to be at variance with commonly known facts, decide which of the conclusions logically follow(s) from the statements.

Statements:

All kids are small.

Some funny are kids.

Conclusions:

I) Some funny are small.

II) Some small are kids.

- Ans
- ✗ 1. Only Conclusion I follows
 - ✓ 2. Both Conclusions I and II follow.
 - ✗ 3. Only Conclusion II follows.
 - ✗ 4. Neither Conclusion I nor II follows.

Question ID : 26433067703

Option 1 ID : 264330265324

Option 2 ID : 264330265326

Option 3 ID : 264330265325

Option 4 ID : 264330265327

Status : Answered

Chosen Option : 2

Q.27 Select the option that represents the correct order of the given words as they would appear in an English dictionary?

- 1.Puritan
- 2.Purpose
- 3.Purge
- 4.Purgatory
- 5.Purify

- Ans
- 1. 3, 4, 5, 1, 2
 - 2. 5, 4, 3, 1, 2
 - 3. 4, 5, 3, 1, 2
 - 4. 4, 3, 5, 1, 2

Question ID : 26433067242

Option 1 ID : 264330263483

Option 2 ID : 264330263480

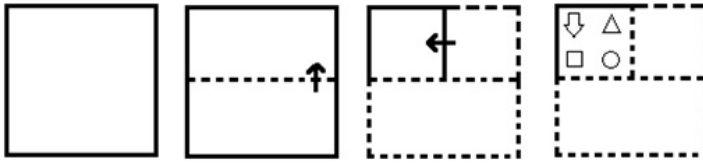
Option 3 ID : 264330263482

Option 4 ID : 264330263481

Status : Answered

Chosen Option : 4

Q.28 The sequence of folding a piece of paper and the manner in which the folded paper is cut is shown in the following figures. How would this paper look when unfolded?



Ans

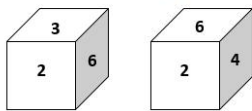
- ✗ 1.
- ✓ 2.
- ✗ 3.
- ✗ 4.

Prepp

Your Personal Exam Guide

Question ID : **26433074794**
 Option 1 ID : **264330293264**
 Option 2 ID : **264330293266**
 Option 3 ID : **264330293267**
 Option 4 ID : **264330293265**
 Status : **Answered**
 Chosen Option : **2**

Q.29 Two different positions of the same dice are shown, the six faces of which are numbered from 1 to 6. Select the number that will be on the face opposite to the one showing '4'.



- Ans**
- 1. 5
 - 2. 1
 - 3. 3
 - 4. 6

Question ID : 26433058065
 Option 1 ID : 264330227244
 Option 2 ID : 264330227245
 Option 3 ID : 264330227246
 Option 4 ID : 264330227247

Status : Answered

Chosen Option : 3

Q.30 उस विकल्प का चयन करें, जो तीसरे शब्द से उसी प्रकार संबंधित है, जिस प्रकार दूसरा शब्द पहले शब्द से संबंधित है। (शब्दों को अर्थपूर्ण शब्दों के रूप में माना जाना चाहिए, और इनको शब्द में अक्षरों की संख्या/व्यंजनो/स्वरों की संख्या के आधार पर एक-दूसरे से संबंधित नहीं किया जाना चाहिए।)
 व्हेल (Whale) : स्तनपायी (Mammal) :: मगरमच्छ (Crocodile) : ?

- Ans**
- 1. कृतक (Rodent)
 - 2. उभयचर (Amphibian)
 - 3. समुद्र (Sea)
 - 4. सरीसृप (Reptile)

Question ID : 26433091600
 Option 1 ID : 264330359766
 Option 2 ID : 264330359765
 Option 3 ID : 264330359768
 Option 4 ID : 264330359767

Status : Answered

Chosen Option : 4

Q.31 X, from his house, ran 200 steps towards the east and then ran 30 steps after turning to his right to reach a monastery. He then ran 30 steps towards his right and reached a point W. He then turned again towards his right and ran 30 steps. From there, turning towards his right he ran 130 steps. He then turned towards his left and ran 10 steps to reach a bakery. In which direction is the bakery with respect to X's house?

- Ans**
- 1. East
 - 2. South-East
 - 3. North-East
 - 4. North

Question ID : 26433057309
 Option 1 ID : 264330224221
 Option 2 ID : 264330224223
 Option 3 ID : 264330224222
 Option 4 ID : 264330224220

Status : Answered

Chosen Option : 3

Q.32 Four letter-clusters have been given, out of which three are alike in some manner and one is different. Select the odd letter-cluster.

- Ans 1. NJPM
 2. EAFD
 3. VRWU
 4. LHMK

Question ID : 264330180755
 Option 1 ID : 264330708990
 Option 2 ID : 264330708987
 Option 3 ID : 264330708989
 Option 4 ID : 264330708988
 Status : Answered
 Chosen Option : 1

Q.33 Select the option that is related to the fourth term in the same way as the first term is related to the second term and the fifth term is related to the sixth term.
 5 : 24 :: ? : 143 :: 4 : 15

- Ans 1. 7
 2. 12
 3. 8
 4. 11

Question ID : 26433079355
 Option 1 ID : 264330311408
 Option 2 ID : 264330311410
 Option 3 ID : 264330311409
 Option 4 ID : 264330311411
 Status : Answered
 Chosen Option : 2

Q.34 If '+' means 'divided by', '-' means 'added to', '×' means 'subtracted from' and '÷' means 'multiplied by', then what will be the value of the following expression?

$$[{\{(23 \times 15) - (2 \div 2)\} + (2 - 4)}] \div 2$$

- Ans 1. 8
 2. 2
 3. 6
 4. 4

Question ID : 264330130376
 Option 1 ID : 264330510618
 Option 2 ID : 264330510615
 Option 3 ID : 264330510617
 Option 4 ID : 264330510616
 Status : Answered
 Chosen Option : 4

Q.35 Which of the following numbers will replace the question mark (?) in the given series?
261, 232, 203, ?, 145, 116

- Ans 1. 174
 2. 188
 3. 192
 4. 186

Question ID : 26433067625
 Option 1 ID : 264330265013
 Option 2 ID : 264330265015
 Option 3 ID : 264330265014
 Option 4 ID : 264330265012
 Status : Answered
 Chosen Option : 1



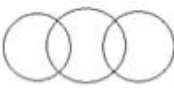

Q.36 In a certain code language, 'HUSTLE' is written as 'SFHEOT' and 'BRIGHT' is written as 'IIBTSG'. How will 'TUNNEL' be written in that language?

- Ans 1. NRTPEN
 2. NGTYPN
 3. NFTLVN
 4. RNLPED

Question ID : 26433074761
 Option 1 ID : 264330293134
 Option 2 ID : 264330293132
 Option 3 ID : 264330293133
 Option 4 ID : 264330293135
 Status : Answered
 Chosen Option : 3

Q.37 Select the Venn diagram that best illustrates the relationship between the following classes.

Spoon, Soup, Rice

- Ans 1. 
 2. 
 3. 
 4. 

Question ID : 264330145360
 Option 1 ID : 264330569697
 Option 2 ID : 264330569698
 Option 3 ID : 264330569695
 Option 4 ID : 264330569696
 Status : Answered
 Chosen Option : 1

Q.38 Select the option figure in which the given figure is embedded as its part (rotation is NOT allowed).

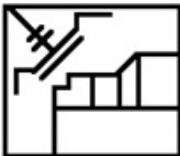


Ans

✗ 1.



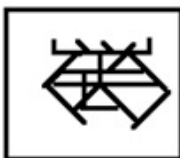
✗ 2.



✗ 3.



✓ 4.



Question ID : 264330117423

Option 1 ID : 264330461734

Option 2 ID : 264330461736

Option 3 ID : 264330461735

Option 4 ID : 264330461733

Status : Answered

Chosen Option : 4

Q.39 'P \$ Q' means 'P is the daughter of Q'
 'P ? Q' means 'P is the son of Q'
 'P * Q' means 'P is the sister of Q '
 'P = Q' means 'P is the father of Q '
 If 'D \$ G * U ? F', how is G related to F?

Ans ✗ 1. Father's sister

✗ 2. Mother's sister

✗ 3. Brother

✓ 4. Daughter

Question ID : 26433090231

Option 1 ID : 264330354402

Option 2 ID : 264330354401

Option 3 ID : 264330354404

Option 4 ID : 264330354403

Status : Answered

Chosen Option : 4

Q.40 Select the set in which the numbers are related in the same way as are the numbers of the following sets.

(NOTE : Operations should be performed on the whole numbers, without breaking down the numbers into its constituent digits. E.g. 13- Operations on 13 such as adding /subtracting /multiplying etc. to 13 can be performed. Breaking down 13 into 1 and 3 and then performing mathematical operations on 1 and 3 is not allowed.)

(13, 18, 21)
(11, 25, 8)

- Ans 1. (6, 10, 12)
 2. (4, 12, 24)
 3. (8, 16, 23)
 4. (14, 33, 9)

Question ID : 26433057438
 Option 1 ID : 264330224739
 Option 2 ID : 264330224737
 Option 3 ID : 264330224738
 Option 4 ID : 264330224736

Status : Answered

Chosen Option : 4

Q.41 Which two signs should be interchanged to make the given equation correct?

$$31 \div 48 \times 7 - 322 + 23 = 353$$

- Ans 1. + and -
 2. - and ×
 3. × and +
 4. ÷ and +

Question ID : 264330129527
 Option 1 ID : 264330507474
 Option 2 ID : 264330507477
 Option 3 ID : 264330507476
 Option 4 ID : 264330507475

Status : Answered

Chosen Option : 4

Q.42 Seven students A, B, C, D, E, F and G are sitting around a circular table facing the centre. C is an immediate neighbour of both E and F. D is sitting third to the left of C and to the immediate right of A. A is sitting second to the right of E. B is an immediate neighbour of both E and A. G is to the immediate left of F. Who is the immediate neighbour of both C and G?

- Ans 1. E
 2. F
 3. A
 4. D

Question ID : 264330145421
 Option 1 ID : 264330569941
 Option 2 ID : 264330569939
 Option 3 ID : 264330569940
 Option 4 ID : 264330569942

Status : Answered

Chosen Option : 2

Q.43 Select the correct option that indicates the arrangement of the given words in the order in which they appear in an English dictionary.

1. Stoop
2. Stoke
3. Storage
4. Stock
5. Storey
6. Stomach

Ans 1. 2, 4, 6, 3, 1, 5
 2. 2, 4, 6, 1, 3, 5
 3. 4, 2, 6, 3, 1, 5
 4. 4, 2, 6, 1, 3, 5

Question ID : 264330145380

Option 1 ID : 264330569775

Option 2 ID : 264330569778

Option 3 ID : 264330569776

Option 4 ID : 264330569777

Status : Answered

Chosen Option : 4

Q.44 Three of the following letter-clusters are alike in some manner and one is different. Select the one that is different.

Ans 1. JEAX
 2. DYUR
 3. WDXC
 4. QLHE

Question ID : 264330145346

Option 1 ID : 264330569641

Option 2 ID : 264330569640

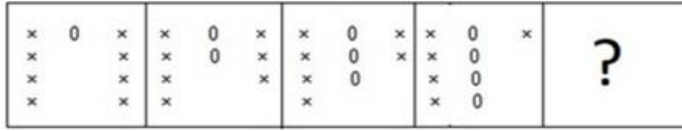
Option 3 ID : 264330569639

Option 4 ID : 264330569642

Status : Answered


Chosen Option : 3

Q.45 Select the figure from among the given options that can replace the question mark (?) in the following series.




Ans

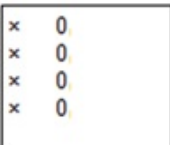
✓ 1.



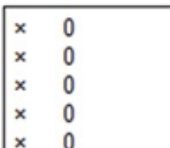
✗ 2.



✗ 3.



✗ 4.



Prepp
Your Personal Exam Guide


Question ID : 26433087153
 Option 1 ID : 264330342252
 Option 2 ID : 264330342250
 Option 3 ID : 264330342251
 Option 4 ID : 264330342249
 Status : Answered
 Chosen Option : 1

Q.46 Select the option figure in which the given figure is embedded as its part (rotation is NOT allowed).



Ans

✓ 1.




✗ 2.



✗ 3.



✗ 4.



Question ID : 264330117426

Option 1 ID : 264330461746

Option 2 ID : 264330461748

Option 3 ID : 264330461747

Option 4 ID : 264330461745

Status : Answered

Chosen Option : 1

Q.47 Select the set in which the numbers are related in the same way as are the numbers of the following set.

(NOTE : Operations should be performed on the whole numbers, without breaking down the numbers into its constituent digits. E.g. 13 – Operations on 13 such as adding /subtracting /multiplying etc. to 13 can be performed. Breaking down 13 into 1 and 3 and then performing mathematical operations on 1 and 3 is NOT allowed)

(1, 16, 3)

(21, 529, 2)

Ans ✗ 1. (5, 189, 8)

✗ 2. (7, 364, 12)

✗ 3. (11, 429, 2)

✓ 4. (8, 100, 2)

Question ID : 264330145317

Option 1 ID : 264330569524

Option 2 ID : 264330569525

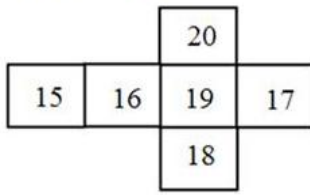
Option 3 ID : 264330569526

Option 4 ID : 264330569523

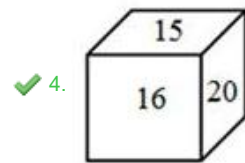
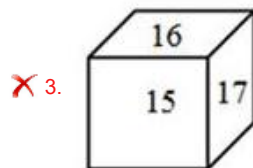
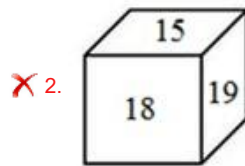
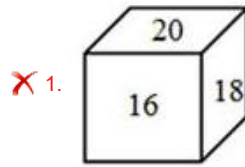
Status : Answered

Chosen Option : 4

Q.48 If the given sheet is folded to form a cube, which of the following figures is possible?



Ans



Question ID : 26433059913

Option 1 ID : 264330234484

Option 2 ID : 264330234487

Option 3 ID : 264330234485

Option 4 ID : 264330234486

Status : Answered

Chosen Option : 4

Q.49 Select the option that represents the letters that, when sequentially placed from left to right in the blanks below, will complete the letter series.

P _ _ O N _ L B _ N P L _ O _ P L _ _ N

Ans ✓ 1. LBPOBNBO

✗ 2. LBPBONBO

✗ 3. LPBOBNNO

✗ 4. LBPOBBNO

Question ID : 26433068924

Option 1 ID : 264330270210

Option 2 ID : 264330270211

Option 3 ID : 264330270209

Option 4 ID : 264330270208

Status : Answered

Chosen Option : 1

Q.50 A @ B means 'A is the husband of B'
 A & B means 'A is the mother of B'
 A # B means 'A is the daughter of B'
 If L @ M & K @ J # P, then how is J related to L?

- Ans 1. Son's wife
 2. Daughter's husband
 3. Mother
 4. Son

Question ID : 264330126022
 Option 1 ID : 264330493762
 Option 2 ID : 264330493760
 Option 3 ID : 264330493763
 Option 4 ID : 264330493761
 Status : Answered
 Chosen Option : 1

Section : General Knowledge and General Awareness

Q.1 Choose the INCORRECT statement out of the following.

- Ans 1. Most parts of the country receive rainfall from June to September.
 2. The annual precipitation in Meghalaya is over 400 cm.
 3. Some parts like the Tamil Nadu's coast gets a large portion of its rains during October and November.
 4. There is increase in rainfall generally from east to west in the Northern Plains.

Question ID : 264330169313
 Option 1 ID : 264330664032
 Option 2 ID : 264330664031
 Option 3 ID : 264330664033
 Option 4 ID : 264330664034
 Status : Answered
 Chosen Option : 4

Q.2 How many cities are covered under the Atal Mission for Rejuvenation and Urban Transformation (AMRUT) scheme?

- Ans 1. 200
 2. 300
 3. 400
 4. 500

Question ID : 26433064567
 Option 1 ID : 264330252863
 Option 2 ID : 264330252862
 Option 3 ID : 264330252861
 Option 4 ID : 264330252860
 Status : Not Answered
 Chosen Option : --

Q.3 Select the correct combination of the temple and the state in which it is located.

- Ans 1. Mahakaleshwar Jyotirlinga–Uttarakhand
 2. Kamakhya Temple–Assam
 3. Jagannath Temple–West Bengal
 4. Somnath Jyotirlinga Temple–Maharashtra

Question ID : 264330141822
Option 1 ID : 264330555608
Option 2 ID : 264330555607
Option 3 ID : 264330555609
Option 4 ID : 264330555610
Status : Answered
Chosen Option : 2

Q.4 The liability to pay the tax and the actual burden of which of the following taxes lie on two different persons?

- Ans 1. Corporation Tax
 2. Income Tax
 3. Capital Gains Tax
 4. Goods and Services Tax

Question ID : 264330145240
Option 1 ID : 264330569215
Option 2 ID : 264330569218
Option 3 ID : 264330569216
Option 4 ID : 264330569217
Status : Answered
Chosen Option : 4

Q.5 Which of the following CANNOT be grouped under physiographic divisions of India?

- Ans 1. The Himalayas
 2. Appalachian Mountains
 3. The Indian Desert
 4. The Island

Question ID : 264330163235
Option 1 ID : 264330640252
Option 2 ID : 264330640251
Option 3 ID : 264330640254
Option 4 ID : 264330640253
Status : Not Answered
Chosen Option : --

Q.6 Why do pickles last longer?

- Ans 1. Only beneficial bacteria can grow in the pickle.
 2. The water content of the pickle protect the pickle from spoilage.
 3. Pickle is prepared in a vacuum so that no harmful bacteria can grow on it.
 4. Bacterial and fungal cells get plasmolysed in high salt concentration of pickle.

Question ID : 26433089677
Option 1 ID : 264330352209
Option 2 ID : 264330352210
Option 3 ID : 264330352211
Option 4 ID : 264330352212
Status : Answered
Chosen Option : 4

Q.7 When was the Prime Minister's Employment Generation Programme (PMEGP) launched?

- Ans 1. 2006
 2. 2008
 3. 2012
 4. 2009

Question ID : 264330157101
Option 1 ID : 264330615776
Option 2 ID : 264330615777
Option 3 ID : 264330615778
Option 4 ID : 264330615775
Status : Not Answered
Chosen Option : --

Q.8 Which state among the following started the Hornbill Festival to encourage interaction among the tribes and to promote the cultural heritage of the state?

- Ans 1. Chhattisgarh
 2. West Bengal
 3. Assam
 4. Nagaland

Question ID : 26433054216
Option 1 ID : 264330211848
Option 2 ID : 264330211851
Option 3 ID : 264330211850
Option 4 ID : 264330211849
Status : Answered
Chosen Option : 4

Q.9 The agricultural land below the main canal water level forms the _____.

- Ans 1. flow system
 2. lift system
 3. command area
 4. warebandi

Question ID : 264330163192
Option 1 ID : 264330640081
Option 2 ID : 264330640082
Option 3 ID : 264330640079
Option 4 ID : 264330640080
Status : Answered
Chosen Option : 1

Q.10 Identify the pigment that gives blood its colour.

- Ans 1. Ferritin
 2. Chlorophyll
 3. Xanthophyll
 4. Haemoglobin

Question ID : 26433064753
Option 1 ID : 264330253606
Option 2 ID : 264330253605
Option 3 ID : 264330253604
Option 4 ID : 264330253607
Status : Answered
Chosen Option : 1

Q.11 Who was the teacher of the famous musician Tansen?

- Ans 1. Ravidas
 2. Swami Haridas
 3. Kalidas
 4. Surdas

Question ID : 26433074861
Option 1 ID : 264330293533
Option 2 ID : 264330293535
Option 3 ID : 264330293534
Option 4 ID : 264330293532
Status : Answered
Chosen Option : 4

Q.12 Pandit Ram Narayan a famous instrumentalist, is known for playing which of the following instruments?

- Ans 1. Ghatam
 2. Veena
 3. Sarod
 4. Sarangi

Question ID : 264330145168
Option 1 ID : 264330568930
Option 2 ID : 264330568929
Option 3 ID : 264330568927
Option 4 ID : 264330568928
Status : Not Answered
Chosen Option : --

Q.13 Which scientist synthesised an organic compound, urea, from an inorganic compound, ammonium cyanate?

- Ans 1. F Wohler
 2. Kolbe
 3. Berthelot
 4. Berzelius

Question ID : 264330145224
Option 1 ID : 264330569152
Option 2 ID : 264330569153
Option 3 ID : 264330569151
Option 4 ID : 264330569154
Status : Answered
Chosen Option : 1

Q.14 Which of the following is an autobiography of the international tennis player Andre Agassi?

- Ans 1. Open: An Autobiography
 2. Becoming
 3. Too Many Reasons to Live
 4. Me

Question ID : 264330145178
Option 1 ID : 264330568969
Option 2 ID : 264330568967
Option 3 ID : 264330568968
Option 4 ID : 264330568970
Status : Not Answered
Chosen Option : --

Q.15 The Bishnu Rabha Award 2019 went to the noted _____ dance exponent Kumari Laitjonam Ebampisok Devi.

- Ans
- 1. Odissi
 - 2. Manipuri
 - 3. Kuchipudi
 - 4. Kathakali

Question ID : 26433054503
Option 1 ID : 264330212999
Option 2 ID : 264330212996
Option 3 ID : 264330212998
Option 4 ID : 264330212997
Status : Not Answered
Chosen Option : --

Q.16 Which of the following rights was deleted from the list of fundamental rights by the 44th Constitutional Amendment Act?

- Ans
- 1. Right to freedom of religion
 - 2. Right to property
 - 3. Right to freedom
 - 4. Right to equality

Question ID : 264330111521
Option 1 ID : 264330438171
Option 2 ID : 264330438172
Option 3 ID : 264330438170
Option 4 ID : 264330438169
Status : Answered
Chosen Option : 2

Q.17 Which Manipuri dance expert founded Govindji Nartanalaya dance school for women in Imphal ?

- Ans
- 1. Guru Bipin Singh
 - 2. Rajkumar Singhajit Singh
 - 3. Guru Amubi
 - 4. Phanjoubam Iboton Singh

Question ID : 26433054508
Option 1 ID : 264330213016
Option 2 ID : 264330213017
Option 3 ID : 264330213018
Option 4 ID : 264330213019
Status : Not Answered
Chosen Option : --

Q.18 Who was the eldest of four sons of Babur?

- Ans
- 1. Hindal
 - 2. Askari
 - 3. Kamran
 - 4. Humayun

Question ID : 264330109024
Option 1 ID : 264330428375
Option 2 ID : 264330428374
Option 3 ID : 264330428373
Option 4 ID : 264330428376
Status : Not Answered
Chosen Option : --

Q.19 As per Article 361 of the Constitution of India, who among the following shall NOT be answerable to any court for the exercise and performance of the powers and duties of his/her office?

- Ans
- 1. Chief Minister
 - 2. Secretary
 - 3. Prime Minister
 - 4. Governor

Question ID : 264330145271
Option 1 ID : 264330569340
Option 2 ID : 264330569342
Option 3 ID : 264330569339
Option 4 ID : 264330569341
Status : Answered
Chosen Option : 4

Q.20 What is the chemical formula for the aldehyde group?

- Ans
- 1. $-\text{COOH}$
 - 2. $-\text{OH}$
 - 3. $-\text{CH}_2\text{O}$
 - 4. $-\text{CHO}$

Question ID : 264330145223
Option 1 ID : 264330569149
Option 2 ID : 264330569148
Option 3 ID : 264330569150
Option 4 ID : 264330569147
Status : Answered
Chosen Option : 4

Q.21 How many balls are there in an over in cricket?

- Ans
- 1. 4
 - 2. 6
 - 3. 7
 - 4. 5

Question ID : 264330118905
Option 1 ID : 264330466275
Option 2 ID : 264330466277
Option 3 ID : 264330466278
Option 4 ID : 264330466276
Status : Answered
Chosen Option : 2

Q.22 In Which year did Ernst Haeckel introduced the term 'ecology' to describe the economies of living forms?

- Ans
- 1. 1888
 - 2. 1884
 - 3. 1887
 - 4. 1866

Question ID : 264330145194
Option 1 ID : 264330569034
Option 2 ID : 264330569031
Option 3 ID : 264330569033
Option 4 ID : 264330569032
Status : Answered
Chosen Option : 4

Q.23 Which schedule of the Constitution of India contains provisions for disqualification of legislator on the ground of defection?

- Ans 1. Schedule-X
 2. Schedule-IX
 3. Schedule-XI
 4. Schedule-VIII

Question ID : 264330130474
Option 1 ID : 264330511008
Option 2 ID : 264330511007
Option 3 ID : 264330511009
Option 4 ID : 264330511010
Status : Answered
Chosen Option : 1

Q.24 When was the first World Weightlifting Championship organized by the World Weightlifting Federation in London, UK?

- Ans 1. March 1891
 2. March 1991
 3. March 2000
 4. March 1895

Question ID : 26433059423
Option 1 ID : 264330232563
Option 2 ID : 264330232560
Option 3 ID : 264330232561
Option 4 ID : 264330232562
Status : Not Answered
Chosen Option : --

Q.25 Which of the following years was declared as the international year of micro credit by the UN?

- Ans 1. 2008
 2. 2004
 3. 2002
 4. 2005

Question ID : 264330141450
Option 1 ID : 264330554138
Option 2 ID : 264330554136
Option 3 ID : 264330554135
Option 4 ID : 264330554137
Status : Not Answered
Chosen Option : --

Q.26 Chapchar Kut festival is predominantly celebrated in _____.

- Ans 1. Nagaland
 2. Mizoram
 3. Manipur
 4. Meghalaya

Question ID : 264330164807
Option 1 ID : 264330646357
Option 2 ID : 264330646356
Option 3 ID : 264330646358
Option 4 ID : 264330646355
Status : Answered
Chosen Option : 2

Q.27 The age of the Earth is currently thought to be:

- Ans 1. 4.5 billion years
 2. 4 billion years
 3. 3.5 billion years
 4. 5 billion years

Question ID : 26433064466
Option 1 ID : 264330252457
Option 2 ID : 264330252458
Option 3 ID : 264330252459
Option 4 ID : 264330252456
Status : Not Answered
Chosen Option : --

Q.28 When did the first Five-Year Plan end?

- Ans 1. March 1956
 2. January 1956
 3. December 1955
 4. February 1956

Question ID : 264330145250
Option 1 ID : 264330569258
Option 2 ID : 264330569256
Option 3 ID : 264330569255
Option 4 ID : 264330569257
Status : Not Answered
Chosen Option : --

Q.29 Which Article of the Constitution clarifies that policies like 'reservation' is not a violation of right to equality?

- Ans 1. Article 16 (4)
 2. Article 14 (1)
 3. Article 21
 4. Article 15 (2)

Question ID : 264330116396
Option 1 ID : 264330457671
Option 2 ID : 264330457669
Option 3 ID : 264330457672
Option 4 ID : 264330457670
Status : Answered
Chosen Option : 1

Q.30 Which of the following is NOT a correct match?

- Ans 1. Voltage - Volts
 2. Resistance - Ohm
 3. Conductance - Siemens
 4. Capacitance - Dyne

Question ID : 264330111864
Option 1 ID : 264330439543
Option 2 ID : 264330439541
Option 3 ID : 264330439542
Option 4 ID : 264330439544
Status : Answered
Chosen Option : 4

Q.31 Who first observed ribosomes in the mid-1950s and described them as small particles in the cytoplasm that were preferentially attached to the endoplasmic reticulum membrane?

- Ans**
- 1. Ernst Abbe
 - 2. Albert Kolliker
 - 3. Carl Zeiss
 - 4. George E Palade

Question ID : 264330145198
Option 1 ID : 264330569047
Option 2 ID : 264330569050
Option 3 ID : 264330569048
Option 4 ID : 264330569049
Status : Not Answered
Chosen Option : --

Q.32 Who among the following was the successor of Muhammad-Bin Tughlaq to the throne?

- Ans**
- 1. Nais-ud-Din Mahmud Shah Tughlaq
 - 2. Firuz Shah Tughlaq
 - 3. Abu Bakr Shah Tughlaq
 - 4. Ghiyath-ud-din Tughlaq Shah II

Question ID : 26433071394
Option 1 ID : 264330280003
Option 2 ID : 264330280001
Option 3 ID : 264330280000
Option 4 ID : 264330280002
Status : Not Answered
Chosen Option : --

Q.33 According to the 2011 Census, any person aged _____ and above and has the ability to read and write is considered literate.

- Ans**
- 1. twelve
 - 2. six
 - 3. seven
 - 4. ten

Question ID : 264330110656
Option 1 ID : 264330434904
Option 2 ID : 264330434903
Option 3 ID : 264330434902
Option 4 ID : 264330434901
Status : Answered
Chosen Option : 1

Q.34 Kuchipudi originated in which of the following states?

- Ans 1. Kerala
 2. Tamil Nadu
 3. Gujarat
 4. Andhra Pradesh

Question ID : 264330164791
Option 1 ID : 264330646294
Option 2 ID : 264330646293
Option 3 ID : 264330646291
Option 4 ID : 264330646292
Status : Answered
Chosen Option : 1

Q.35 Padma Bhushan awardee Kumudini Lakhia is renowned for which of the following dance forms?

- Ans 1. Bharatanatyam
 2. Kathak
 3. Kuchipudi
 4. Odissi

Question ID : 264330145166
Option 1 ID : 264330568919
Option 2 ID : 264330568920
Option 3 ID : 264330568921
Option 4 ID : 264330568922
Status : Not Answered
Chosen Option : --

Q.36 The black soil of the Deccan Plateau lacks which of the following minerals?

- Ans 1. Phosphorous
 2. Potash
 3. Iron
 4. Lime

Question ID : 264330119790
Option 1 ID : 264330469435
Option 2 ID : 264330469436
Option 3 ID : 264330469437
Option 4 ID : 264330469438
Status : Not Answered
Chosen Option : --

Q.37 Which Article of the Constitution of India prohibits forced labour?

- Ans 1. Article 23
 2. Article 21
 3. Article 22
 4. Article 20

Question ID : 264330130680
Option 1 ID : 264330511834
Option 2 ID : 264330511832
Option 3 ID : 264330511833
Option 4 ID : 264330511831
Status : Answered
Chosen Option : 1

Q.38 Consider the following statements regarding the Indo Greeks.

1. The most celebrated Indo-Greek ruler was Menander.
 2. Menander has been identified with King Milinda mentioned in the famous Buddhist text Milindapanho.
 3. Milindapanho contains philosophical questions that Milinda asked Amrapali.
 4. Impressed by the answers, King Milinda accepted Buddhism as his religion.
- Which among the above statements are correct.

- Ans**
- 1. Only 1, 2 and 3
 - 2. Only 1, 3 and 4
 - 3. Only 1, 2 and 4
 - 4. Only 3, 2 and 4

Question ID : 264330123784

Option 1 ID : 264330485074

Option 2 ID : 264330485075

Option 3 ID : 264330485072

Option 4 ID : 264330485073

Status : Not Answered

Chosen Option : --

Q.39 Which of the following options are homogeneous mixtures?

- Ans**
- 1. Solution, colloid, suspension, milk, toothpaste, salt water, brass
 - 2. Solution, salt water, brass
 - 3. Solution, colloid, milk, toothpaste, salt water, brass
 - 4. Colloid, suspension, milk, toothpaste

Question ID : 264330169308

Option 1 ID : 264330664011

Option 2 ID : 264330664013

Option 3 ID : 264330664012

Option 4 ID : 264330664014

Status : Not Answered

Chosen Option : --

Q.40 Match list I to list II.

List I

a) Second Five-year plan

b) Fifth Five-year plan

c) Eight Five-year plan

List II

i) 1974-1979

ii) 1956-1961

iii) 1992-1997

- Ans**
- 1. a-iii, b-i, c-ii
 - 2. a-i, b-ii, c-iii
 - 3. a-i, b-iii, c-ii
 - 4. a-ii, b-i, c-iii

Question ID : 264330141495

Option 1 ID : 264330554317

Option 2 ID : 264330554315

Option 3 ID : 264330554318

Option 4 ID : 264330554316

Status : Answered

Chosen Option : 4

Q.41 Which Article of the Indian Constitution lays the condition that the President, once elected, shall NOT be a member of the either House of Parliament or state legislature?

- Ans
- 1. Article 62
 - 2. Article 59
 - 3. Article 80
 - 4. Article 79

Question ID : 264330114495
Option 1 ID : 264330450066
Option 2 ID : 264330450065
Option 3 ID : 264330450068
Option 4 ID : 264330450067
Status : Answered
Chosen Option : 2

Q.42 Which of the following books has been written by the Booker Prize winner Kiran Desai?

- Ans
- 1. A Fine Balance
 - 2. The Year of Runaways
 - 3. The Inheritance of Loss
 - 4. Shantaram

Question ID : 26433071482
Option 1 ID : 264330280353
Option 2 ID : 264330280352
Option 3 ID : 264330280355
Option 4 ID : 264330280354
Status : Not Answered
Chosen Option : --

Q.43 Who among the following was NOT associated with 'Prarthana Sabha'?

- Ans
- 1. Govind Ranade
 - 2. Atmaram Pandurang
 - 3. RG Bhandarkar
 - 4. Motilal Nehru

Question ID : 264330165393
Option 1 ID : 264330648651
Option 2 ID : 264330648653
Option 3 ID : 264330648654
Option 4 ID : 264330648652
Status : Answered
Chosen Option : 4

Q.44 Identify the group of major Jute producing states of India.

- Ans
- 1. Kerala, Tamil Nadu, Telangana, Madhya Pradesh
 - 2. West Bengal, Bihar, Assam, Odisha
 - 3. Punjab, Haryana, Uttarakhand, Himachal Pradesh
 - 4. Rajasthan, Maharashtra, Karnataka, Gujarat

Question ID : 264330113263
Option 1 ID : 264330445140
Option 2 ID : 264330445137
Option 3 ID : 264330445139
Option 4 ID : 264330445138
Status : Answered
Chosen Option : 2

Q.45 Which trend is found about the distance between the galaxies?

- Ans 1. Constant
 2. Increasing
 3. Unpredictable
 4. Decreasing

Question ID : 264330113349
Option 1 ID : 264330445483
Option 2 ID : 264330445481
Option 3 ID : 264330445484
Option 4 ID : 264330445482
Status : Not Answered
Chosen Option : --

Q.46 Under the Regulating Act of 1773, the King-in-Council created a Supreme Court in which of the following places?

- Ans 1. Calcutta
 2. Delhi
 3. Madras
 4. Bombay

Question ID : 26433099166
Option 1 ID : 264330389279
Option 2 ID : 264330389277
Option 3 ID : 264330389280
Option 4 ID : 264330389278
Status : Answered
Chosen Option : 1

Q.47 The Landholder's Society was founded to look after the interests of which class?

- Ans 1. Landlords
 2. Labour
 3. Farmers
 4. Traders

Question ID : 264330112182
Option 1 ID : 264330440814
Option 2 ID : 264330440813
Option 3 ID : 264330440815
Option 4 ID : 264330440816
Status : Not Answered
Chosen Option : --

Q.48 Which of the following is a primary arylamine in which an amino functional group is substituted for one of the benzene hydrogens?

- Ans 1. Quinoline
 2. Aniline
 3. Pyridine
 4. Toluidine

Question ID : 264330110055
Option 1 ID : 264330432498
Option 2 ID : 264330432500
Option 3 ID : 264330432497
Option 4 ID : 264330432499
Status : Not Answered
Chosen Option : --

Q.49 Which of the following states will host 2023 Men's Hockey World Cup?

- Ans 1. Chhattisgarh
 2. Jharkhand
 3. Maharashtra
 4. Odisha

Question ID : 264330109848
Option 1 ID : 264330431672
Option 2 ID : 264330431671
Option 3 ID : 264330431670
Option 4 ID : 264330431669
Status : Answered
Chosen Option : 4

Q.50 In football, a kick is awarded to the opposition player when a player has committed a foul. What is the kick called?

- Ans 1. Bicycle kick
 2. Free kick
 3. Wide kick
 4. Goal kick

Question ID : 26433092339
Option 1 ID : 264330362656
Option 2 ID : 264330362655
Option 3 ID : 264330362653
Option 4 ID : 264330362654
Status : Answered
Chosen Option : 2

Section : Quantitative Aptitude

Q.1 Two mixtures A and B have the following compositions:

Mixture A has copper and tin in a ratio of 1:2

Mixture B has copper and tin in a ratio of 1:3

If equal quantities of mixtures A and B are used for producing mixture C, then find the ratio of copper and tin in mixture C.

- Ans 1. 2:5
 2. 1:5
 3. 7:17
 4. 7:12

Question ID : 264330104187
Option 1 ID : 264330409050
Option 2 ID : 264330409049
Option 3 ID : 264330409052
Option 4 ID : 264330409051
Status : Answered
Chosen Option : 4

Q.2 If the volume of a sphere is 38808 cm^3 , then its surface area is:

- Ans
- 1. 5554 cm^2
 - 2. 5574 cm^2
 - 3. 5564 cm^2
 - 4. 5544 cm^2

Question ID : 264330145135

Option 1 ID : 264330568796

Option 2 ID : 264330568798

Option 3 ID : 264330568797

Option 4 ID : 264330568795

Status : Answered

Chosen Option : 4

Q.3 The area of a rhombus having one side measuring 17 cm and one diagonal measuring 16 cm is:

- Ans
- 1. 280 cm^2
 - 2. 180 cm^2
 - 3. 240 cm^2
 - 4. 210 cm^2

Question ID : 264330106083

Option 1 ID : 264330416634

Option 2 ID : 264330416633

Option 3 ID : 264330416635

Option 4 ID : 264330416636

Status : Answered

Chosen Option : 3

Q.4 By selling 42 m of cloth, Vijay gains the selling price of 7 m of cloth. Find the profit percentage.

- Ans
- 1. 15%
 - 2. 30%
 - 3. 20%
 - 4. 25%

Question ID : 264330131518

Option 1 ID : 264330515175

Option 2 ID : 264330515178

Option 3 ID : 264330515176

Option 4 ID : 264330515177

Status : Answered

Chosen Option : 3

Q.5 Ramesh gives fifteen per cent additional discount along with a discount of 25% on the marked price of a sofa set. If the selling price of the sofa set is ₹12,750, then find the marked price of the sofa set.

- Ans 1. ₹20,000
 2. ₹23,000
 3. ₹22,000
 4. ₹24,000

Question ID : 264330165522

Option 1 ID : 264330649167

Option 2 ID : 264330649169

Option 3 ID : 264330649168

Option 4 ID : 264330649170

Status : Answered

Chosen Option : 1

Q.6 Two pipes can fill a cistern in 12 hours and 16 hours, respectively. The pipes are opened simultaneously and it is found that due to leakage at the bottom, it takes 90 minutes more to fill the cistern. How much time will the leakage take to empty the completely filled tank?

- Ans 1. $36\frac{29}{49}$ h
 2. $38\frac{10}{49}$ h
 3. $39\frac{13}{49}$ h
 4. $37\frac{15}{49}$ h

Question ID : 264330122993

Option 1 ID : 264330482038

Option 2 ID : 264330482036

Option 3 ID : 264330482037

Option 4 ID : 264330482035

Status : Not Attempted and Marked For Review

Chosen Option : --

Q.7 A sum of money amounts to ₹1,200 in 2 years and becomes ₹1,260 in 3 years at compound interest, when interest is compounded annually. What is the rate of compound interest per annum?

- Ans 1. 5%
 2. 3%
 3. 4%
 4. 6%

Question ID : 264330145059

Option 1 ID : 264330568493

Option 2 ID : 264330568491

Option 3 ID : 264330568492

Option 4 ID : 264330568494

Status : Answered

Chosen Option : 1

Q.8 Find the least value of $16\operatorname{cosec}^2\theta + 25\sin^2\theta$.

Ans 1. 40

2. 42

3. 35

4. 38

Question ID : 264330145125

Option 1 ID : 264330568757

Option 2 ID : 264330568758

Option 3 ID : 264330568755

Option 4 ID : 264330568756

Status : Not Answered

Chosen Option : --

Q.9 In a megastore, the following data reveals the units purchased during the years.

What is the percentage growth in total units purchased (of all the three products) from 2015 to 2020?

Year	Tea	Coffee	Cold drink
2015	650	450	1008
2016	730	402	1092
2017	710	354	770
2018	570	438	812
2019	820	390	1043
2020	830	501	1330

Ans 1. 21.68 percent

2. 22.75 percent

3. 26.23 percent

4. 25.76 percent

Question ID : 26433081647

Option 1 ID : 264330320423

Option 2 ID : 264330320424

Option 3 ID : 264330320421

Option 4 ID : 264330320422

Status : Answered

Chosen Option : 3

Q.10 If $\cos A = \frac{1}{11}$, then find the value of $\cot A$.

- Ans
1. $\frac{2\sqrt{30}}{11}$
2. $2\sqrt{30}$
3. $\frac{1}{2\sqrt{30}}$
4. $\frac{11}{2\sqrt{30}}$

Question ID : 264330158291

Option 1 ID : 264330620526

Option 2 ID : 264330620525

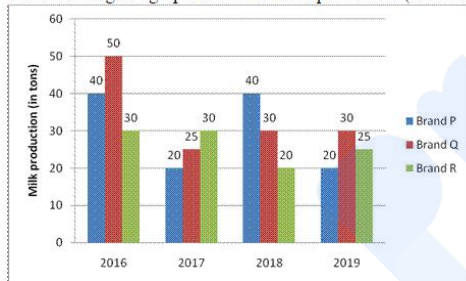
Option 3 ID : 264330620524

Option 4 ID : 264330620523

Status : Answered

Chosen Option : 3

Q.11 The following bar graph shows the milk production (in million tons) details for 4 years for three brands (P, Q, R):



What was the average production of milk (in million tons) per year over the period of 4 years?

- Ans 1. 90
2. 50
3. 30
4. 70

Question ID : 264330158396

Option 1 ID : 264330620946

Option 2 ID : 264330620944

Option 3 ID : 264330620943

Option 4 ID : 264330620945

Status : Answered

Chosen Option : 1

Q.12 If $\operatorname{cosec} A + \cot A = 3$, $0 \leq A \leq 90^\circ$, then find the value of $\cos A$.

Ans

1. $\frac{3}{4}$
 2. $\frac{2}{5}$
 3. $\frac{3}{5}$
 4. $\frac{4}{5}$

Question ID : 264330157759

Option 1 ID : 264330618397

Option 2 ID : 264330618398

Option 3 ID : 264330618395

Option 4 ID : 264330618396

Status : Answered

Chosen Option : 4

Q.13 36 equally efficient workers can paint 25 identical walls in 48 days. In how many days can 45 such workers paint 60 such walls?

Ans

1. 92.36
 2. 92.16
 3. 91.96
 4. 91.16

Question ID : 264330103289

Option 1 ID : 264330405463

Option 2 ID : 264330405464

Option 3 ID : 264330405461

Option 4 ID : 264330405462

Status : Answered

Chosen Option : 2

Q.14 Which of the following numbers leaves the remainder equal to the highest common factor of 6, 8 and 9, when divided by 6, 8 and 9?

Ans

1. 291
 2. 575
 3. 506
 4. 433

Question ID : 26433066165

Option 1 ID : 264330259195

Option 2 ID : 264330259194

Option 3 ID : 264330259193

Option 4 ID : 264330259192

Status : Answered

Chosen Option : 4

Q.15 Simplify the given expression.

$$(1 + x)^3 + (1 - x)^3 + (-2)^3$$

- Ans
- 1. $6(1-x^2)$
 - 2. $-3(1-x^2)$
 - 3. $-6(1-x^2)$
 - 4. $3(1-x^2)$

Question ID : 264330157763

Option 1 ID : 264330618411

Option 2 ID : 264330618414

Option 3 ID : 264330618412

Option 4 ID : 264330618413

Status : Answered

Chosen Option : 3

Q.16 If $1\frac{1}{3} \div \frac{2}{5} \times \frac{x}{5} = 1\frac{1}{4} \times \frac{2}{3} \div \frac{1}{6}$, then the value of x is:

- Ans
- 1. 5.5
 - 2. 7.5
 - 3. 7.0
 - 4. 15

Question ID : 26433063986

Option 1 ID : 264330250538

Option 2 ID : 264330250536

Option 3 ID : 264330250539

Option 4 ID : 264330250537

Status : Answered

Chosen Option : 2

Q.17 The average weight of 49 students is 53 kg. When a new student is admitted to the class, the average decreases by 500 g. Find the weight of the new student.

- Ans
- 1. 48 kg
 - 2. 18 kg
 - 3. 28 kg
 - 4. 38 kg

Question ID : 264330104284

Option 1 ID : 264330409440

Option 2 ID : 264330409437

Option 3 ID : 264330409438

Option 4 ID : 264330409439

Status : Answered

Chosen Option : 3

Q.18 In an election between two candidates, the difference between the candidates who won and lost was 2,500 votes. The candidate who won got 75% of the votes, and there were no invalid votes. The total number of votes polled of the losing candidate was:

- Ans
- 1. 1875
 - 2. 5000
 - 3. 1250
 - 4. 3750

Question ID : 264330145061
Option 1 ID : 264330568500
Option 2 ID : 264330568502
Option 3 ID : 264330568499
Option 4 ID : 264330568501
Status : Answered
Chosen Option : 3

Q.19 In an election between two candidates, 30% of the electorate did not cast their votes. 20% of the votes polled were found invalid. The winning candidate got 64% of the valid votes and won by a majority of 3136 votes. Find the number of voters enrolled in the voter list.

- Ans
- 1. 20000
 - 2. 25000
 - 3. 24000
 - 4. 30000

Question ID : 264330103392
Option 1 ID : 264330405873
Option 2 ID : 264330405874
Option 3 ID : 264330405875
Option 4 ID : 264330405876
Status : Answered
Chosen Option : 1

Q.20 Find the mean proportion of x^3y and xy^3 .

- Ans
- 1. x^2y^2
 - 2. x^3y^3
 - 3. xy
 - 4. x^4y^4

Question ID : 264330145074
Option 1 ID : 264330568552
Option 2 ID : 264330568553
Option 3 ID : 264330568551
Option 4 ID : 264330568554
Status : Answered
Chosen Option : 1

Q.21 The least common multiple of 12, 18 and 27 is :

- Ans 1. 54
 2. 216
 3. 27
 4. 108

Question ID : 26433066158
Option 1 ID : 264330259164
Option 2 ID : 264330259167
Option 3 ID : 264330259165
Option 4 ID : 264330259166
Status : Answered
Chosen Option : 4

Q.22 Jimmy has to cover a distance of 88 km in 16 hours. If she covers half of the journey in $\frac{3}{4}$ time, then what should be her speed to cover the remaining distance in the time left?

- Ans 1. 12 km/h
 2. 10 km/h
 3. 11 km/h
 4. 13 km/h

Question ID : 26433082849
Option 1 ID : 264330325231
Option 2 ID : 264330325230
Option 3 ID : 264330325229
Option 4 ID : 264330325232
Status : Answered
Chosen Option : 3

Q.23 What is the smallest perfect square number which is completely divisible by 4, 6, 9, 12 and 15?

- Ans 1. 784
 2. 900
 3. 961
 4. 841

Question ID : 26433073067
Option 1 ID : 264330286463
Option 2 ID : 264330286461
Option 3 ID : 264330286462
Option 4 ID : 264330286460
Status : Answered
Chosen Option : 2

Q.24 A vehicle is going at one-fourth of its usual speed and it takes an extra 45 minutes to reach its destination. Its usual time to cover the same distance is:

- Ans 1. 15 minutes
 2. 10 minutes
 3. 30 minutes
 4. 20 minutes

Question ID : 264330103740
Option 1 ID : 264330407266
Option 2 ID : 264330407265
Option 3 ID : 264330407268
Option 4 ID : 264330407267
Status : Answered
Chosen Option : 1

Q.25 Kanchan lent ₹10,000 for 2 years and ₹5,000 for 4 years at the same rate of simple interest. If the total interest received by Kanchan is ₹2,000, then what was the rate of interest?

- Ans 1. 5%
 2. 2%
 3. 3%
 4. 4%

Question ID : 264330165672
Option 1 ID : 264330649770
Option 2 ID : 264330649767
Option 3 ID : 264330649768
Option 4 ID : 264330649769
Status : Answered
Chosen Option : 1

Q.26 The average weight of A, B and C is 77 kg. If the average weight of A and B is 68 kg and that of B and C is 83 kg, then the weight (in kg) of B is:

- Ans 1. 74
 2. 71
 3. 73
 4. 67

Question ID : 264330170130
Option 1 ID : 264330667198
Option 2 ID : 264330667197
Option 3 ID : 264330667196
Option 4 ID : 264330667195
Status : Answered
Chosen Option : 2

Q.27 The diameter of a hemisphere is equal to the diagonal of a rectangle of length 4 cm and breadth 3 cm. Find the total surface area (in cm^2) of the hemisphere.

- Ans
- 1. 25π
 - 2. $\frac{75\pi}{4}$
 - 3. $\frac{50\pi}{4}$
 - 4. $\frac{25\pi}{4}$

Question ID : 264330145108

Option 1 ID : 264330568690

Option 2 ID : 264330568688

Option 3 ID : 264330568689

Option 4 ID : 264330568687

Status : Answered

Chosen Option : 2

Q.28 A cylindrical metallic rod of diameter 2 cm and length 45 cm is melted and converted into wire of uniform thickness and length 5 m. The diameter of the wire is:

- Ans
- 1. 3 mm
 - 2. 2 mm
 - 3. 6 mm
 - 4. 5 mm

Question ID : 264330123006

Option 1 ID : 264330482087

Option 2 ID : 264330482090

Option 3 ID : 264330482089

Option 4 ID : 264330482088

Status : Answered

Chosen Option : 1

Q.29 If the base radius and the height of a right circular cone are increased by 10%, then the percentage increase in the volume is:

- Ans
- 1. 30.2%
 - 2. 22.1%
 - 3. 33.1%
 - 4. 20.2%

Question ID : 264330103640

Option 1 ID : 264330406867

Option 2 ID : 264330406866

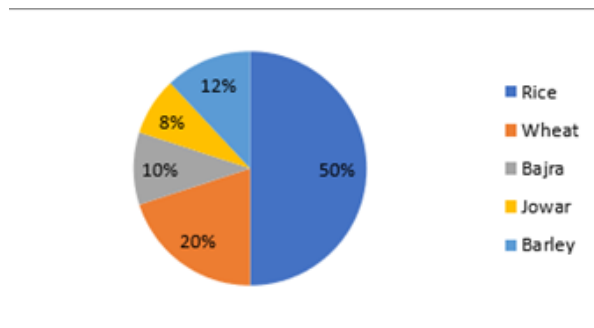
Option 3 ID : 264330406868

Option 4 ID : 264330406865

Status : Answered

Chosen Option : 3

Q.30 The given pie chart shows the distribution of land under various food crops. The expenditure invested on these food crops is ₹25,000 per annum. Study the pie chart carefully and answer the question that follows.



The expenditure invested in Rice and Barley is what percentage (correct to 2 decimal places) of the expenditure invested in Wheat and Bajra?

- Ans
- 1. 206.55%
 - 2. 206.66%
 - 3. 260.66%
 - 4. 260.55%

Question ID : 264330165410

Option 1 ID : 264330648720

Option 2 ID : 264330648722

Option 3 ID : 264330648721

Option 4 ID : 264330648719

Status : Answered

Chosen Option : 2

Q.31 If perimeter of the circle is 13.2 cm, then the radius of the circle is ____.

(Take $\pi = \frac{22}{7}$)

- Ans
- 1. 6.6 cm
 - 2. 4.2 cm
 - 3. 2.1 cm
 - 4. 3.3 cm

Question ID : 264330165443

Option 1 ID : 264330648853

Option 2 ID : 264330648851

Option 3 ID : 264330648852

Option 4 ID : 264330648854

Status : Answered

Chosen Option : 3

Q.32 A goods train 350 m long passes through a tunnel of 1250m in 80 seconds. What is the speed of the train?

- Ans
- 1. 72 km/h
 - 2. 64 km/h
 - 3. 78 km/h
 - 4. 56 km/h

Question ID : 264330145068

Option 1 ID : 264330568528

Option 2 ID : 264330568529

Option 3 ID : 264330568530

Option 4 ID : 264330568527

Status : Answered

Chosen Option : 1

Q.33 Study the given table and answer the question that follows.
The table shows the number of employees in five different organisations A, B, C, D and E in different departments.

Dept ↓ Org →	A	B	C	D	E
HR	1050	1015	976	888	1004
Finance	1017	960	786	1025	963
Marketing	1382	1384	1275	1300	1290
Production	1542	1545	4550	1570	1580
Accounts	786	745	801	800	735
Legal	48	54	36	30	53
Total	5825	5703	5424	5613	5625

Which department has a minimum number of employees in each organisation?

- Ans
- 1. Marketing
 - 2. Production
 - 3. Accounts
 - 4. Legal

Question ID : 264330157722

Option 1 ID : 264330618247

Option 2 ID : 264330618248

Option 3 ID : 264330618249

Option 4 ID : 264330618250

Status : Answered

Chosen Option : 4

Q.34 The value of $\frac{a^2 - (b - c)^2}{(a + c)^2 - b^2} + \frac{b^2 - (a - c)^2}{(a + b)^2 - c^2} + \frac{c^2 - (a - b)^2}{(b + c)^2 - a^2}$ is:

- Ans
- 1. 1
 - 2. 2
 - 3. -1
 - 4. 3

Question ID : 264330157772

Option 1 ID : 264330618448

Option 2 ID : 264330618449

Option 3 ID : 264330618447

Option 4 ID : 264330618450

Status : Not Answered

Chosen Option : --

Q.35 In a triangle LMN, OP is a line segment drawn parallel to the side MN. OP intersects the sides LM and LN at O and P, respectively. If LM = 15 cm, OM = 4 cm, and PN = 5 cm, then what is the length (in cm) of the side LN?

- Ans
- 1. 16.25
 - 2. 18.75
 - 3. 20.25
 - 4. 22.75

Question ID : 264330165690

Option 1 ID : 264330649839

Option 2 ID : 264330649840

Option 3 ID : 264330649841

Option 4 ID : 264330649842

Status : Answered

Chosen Option : 2

Q.36

The value of $\sqrt{\frac{1 + \sin A}{1 - \sin A}}$ is:

- Ans
- 1. $\sec A - \tan A$
 - 2. $\operatorname{cosec} A + \cot A$
 - 3. $\sec A + \tan A$
 - 4. $\operatorname{cosec} A - \cot A$

Question ID : 264330157754

Option 1 ID : 264330618376

Option 2 ID : 264330618377

Option 3 ID : 264330618375

Option 4 ID : 264330618378

Status : Answered

Chosen Option : 3

Q.37 Determine the LCM of two numbers if their HCF is 12 and their ratio is 13 : 15.

- Ans
- 1. 1780
 - 2. 2450
 - 3. 1890
 - 4. 2340

Question ID : 26433071295

Option 1 ID : 264330279604

Option 2 ID : 264330279607

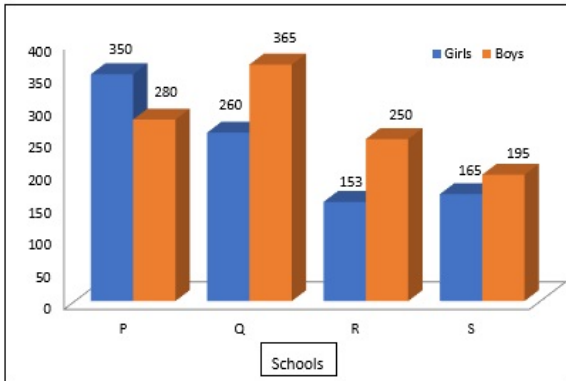
Option 3 ID : 264330279606

Option 4 ID : 264330279605

Status : Answered

Chosen Option : 4

- Q.38** Study the given graph and answer the question that follows.
The graph shows data regarding number of boys and girls studying in class 5 in four different schools.



What is the difference between total number of boys studying in school P and Q together and the total number of girls in the same schools together?

- Ans**
- 1. 38
 - 2. 45
 - 3. 40
 - 4. 35

Question ID : 264330158275

Option 1 ID : 264330620460

Option 2 ID : 264330620462

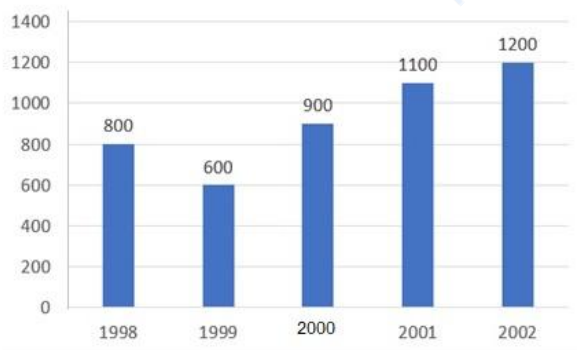
Option 3 ID : 264330620461

Option 4 ID : 264330620459

Status : Answered

Chosen Option : 4

- Q.39** Study the given bar-graph and answer the question that follows.
The bar-graph displays the number of bicycles produced at a factory from 1998 to 2002.



What was the average number of bicycles produced at the factory per year from 1998-2002?

- Ans**
- 1. 940
 - 2. 960
 - 3. 920
 - 4. 880

Question ID : 264330157734

Option 1 ID : 264330618296

Option 2 ID : 264330618295

Option 3 ID : 264330618297

Option 4 ID : 264330618298

Status : Answered

Chosen Option : 3

Q.40 Find the least number which when divided by 4, 9, 12 and 15, leaves the remainder 3 in each case.

- Ans 1. 360
 2. 183
 3. 193
 4. 180

Question ID : 26433063994
 Option 1 ID : 264330250569
 Option 2 ID : 264330250570
 Option 3 ID : 264330250568
 Option 4 ID : 264330250571
 Status : Answered
 Chosen Option : 2

Q.41 The table below shows the number of trees planted by the government in 4 different years.

Year	Neem	Oak	Birch
2019	2000	3000	4000
2020	3000	4000	5000
2021	5000	6000	7000
2022	7000	8000	9000

Find the ratio between the number of neem trees planted in the year 2021 and the number of birch trees planted in the year 2022.

- Ans 1. 5:9
 2. 3:7
 3. 5:8
 4. 3:8

Question ID : 264330158385
 Option 1 ID : 264330620902
 Option 2 ID : 264330620901
 Option 3 ID : 264330620899
 Option 4 ID : 264330620900
 Status : Answered
 Chosen Option : 1

Q.42 On an item, there is an 18% discount on the marked price of ₹26,000. After giving an additional season's discount, the item is sold at ₹16,000. How much was the season's discount correct upto two places of decimal?

- Ans 1. 22.45%
 2. 24.95%
 3. 24.65%
 4. 35.25%

Question ID : 264330104407
 Option 1 ID : 264330409929
 Option 2 ID : 264330409931
 Option 3 ID : 264330409930
 Option 4 ID : 264330409932
 Status : Answered
 Chosen Option : 2

Q.43 In a ΔPQR , $\angle P=90^\circ$, $\angle R=47^\circ$ and $PS \perp QR$. Find the value of $\angle QPS$.

Ans 1. 43°

2. 47°

3. 45°

4. 40°

Question ID : 264330158285

Option 1 ID : 264330620500

Option 2 ID : 264330620502

Option 3 ID : 264330620501

Option 4 ID : 264330620499

Status : Answered

Chosen Option : 1

Q.44 Sanjay and Rohan can complete a work in 8 days and 12 days, respectively. Starting with Sanjay, they work on alternate days. In how many days will the work be completed?

Ans 1. $8\frac{1}{2}$

2. $9\frac{1}{2}$

3. $9\frac{2}{3}$

4. $9\frac{1}{3}$

Question ID : 26433087393

Option 1 ID : 264330343212

Option 2 ID : 264330343209

Option 3 ID : 264330343211

Option 4 ID : 264330343210

Status : Answered

Chosen Option : 2

Q.45 Study the given table and answer the question that follows.

The table shows the percentage population of four states below poverty line and proportion of male to female.

State	Percentage of population below poverty line	Proportion of male to female	
		Below poverty line	Above poverty line
		Male : Female	Male : Female
P	28	3 : 2	7 : 3
Q	15	4 : 7	6 : 5
R	24	5 : 3	3 : 3
S	13	2 : 5	1 : 3

If the total population of state R is 26,000, then what is the number of females above poverty line in state R?

- Ans
- 1. 9,780
 - 2. 9,880
 - 3. 9,560
 - 4. 9,950

Question ID : 264330158261
 Option 1 ID : 264330620404
 Option 2 ID : 264330620405
 Option 3 ID : 264330620403
 Option 4 ID : 264330620406
 Status : Answered
 Chosen Option : 2

Q.46 AB is a chord of a circle having radius 1.7 cm. If the distance of this chord AB from the centre of the circle is 0.8 cm, then what is the length (in cm) of the chord AB?

- Ans
- 1. 4
 - 2. 1
 - 3. 3
 - 4. 2

Question ID : 264330165692
 Option 1 ID : 264330649850
 Option 2 ID : 264330649847
 Option 3 ID : 264330649849
 Option 4 ID : 264330649848
 Status : Answered
 Chosen Option : 3

Q.47 The monthly budget of an average household is given in the following table.

Category	Food	Clothing	Rent	Savings
Amount	8000	2000	6000	4000

The percentage of the monthly budget spent on clothing is:

- Ans 1. 10%
 2. 12%
 3. 8%
 4. 4%

Question ID : 264330167239

Option 1 ID : 264330655952

Option 2 ID : 264330655954

Option 3 ID : 264330655953

Option 4 ID : 264330655951

Status : Answered

Chosen Option : 1

Q.48 If the HCF of 45 and 55 is expressible in the form of $55 \times 5 + 45m$, then what is the value of m ?

- Ans 1. -6
 2. 5
 3. 6
 4. -5

Question ID : 26433074253

Option 1 ID : 264330291134

Option 2 ID : 264330291133

Option 3 ID : 264330291135

Option 4 ID : 264330291132

Status : Not Answered

Chosen Option : --

Q.49 The monthly salary of a person is ₹50,000. He spends 40% of his salary on household expenses, 25% on rent, and 15% on transportation, and saves the remaining amount. What is his yearly savings?

- Ans 1. ₹1,00,000
 2. ₹1,10,000
 3. ₹1,20,000
 4. ₹90,000

Question ID : 264330157713

Option 1 ID : 264330618212

Option 2 ID : 264330618213

Option 3 ID : 264330618214

Option 4 ID : 264330618211

Status : Answered

Chosen Option : 3

Q.50 The cost price of pulses is 12% less than the selling price. Using a faulty weighing machine, shopkeeper is able to earn 25% profit. How much per cent of the faulty machine shows more weight as compared to the actual weight (Rounded off to the nearest integer)?

- Ans
- 1. 13%
 - 2. 15%
 - 3. 10%
 - 4. 14%

Question ID : 264330102068
Option 1 ID : 264330400779
Option 2 ID : 264330400780
Option 3 ID : 264330400777
Option 4 ID : 264330400778
Status : Answered
Chosen Option : 3

Section : English Comprehension

Q.1 Select the option that can be used as a one-word substitute for the given group of words.

A collection of historical documents or records providing information about a place, institution, or group of people

- Ans
- 1. Museum
 - 2. Apostate
 - 3. Asylum
 - 4. Archive

Question ID : 264330164298
Option 1 ID : 264330644410
Option 2 ID : 264330644409
Option 3 ID : 264330644408
Option 4 ID : 264330644407
Status : Answered
Chosen Option : 1

Q.2 Select the most appropriate idiom for the given situation focusing on the underlined segment.

The modern era statistics data provides useful advantage to the players at competent level.

- Ans
- 1. Cost an arm and a leg
 - 2. Grist to the mill
 - 3. Put something on ice
 - 4. Play it by ear

Question ID : 264330163409
Option 1 ID : 264330640917
Option 2 ID : 264330640915
Option 3 ID : 264330640916
Option 4 ID : 264330640918
Status : Answered
Chosen Option : 2

Q.3 The following sentence has been divided into parts. One of them may contain an error. Select the part that contains the error from the given options. If you don't find any error, mark 'No error' as your answer.
We should / not make an noise / in the class.

- Ans
- 1. in the class
 - 2. We should
 - 3. No error
 - 4. not make an noise

Question ID : 264330117174
Option 1 ID : 264330460763
Option 2 ID : 264330460761
Option 3 ID : 264330460764
Option 4 ID : 264330460762
Status : Answered
Chosen Option : 4

Q.4 Identify the ANTONYM of the following word in the given sentence.
Languid
The animated infantry was marching forward for another rehearsal.

- Ans
- 1. infantry
 - 2. rehearsal
 - 3. forward
 - 4. animated

Question ID : 264330167910
Option 1 ID : 264330658561
Option 2 ID : 264330658562
Option 3 ID : 264330658560
Option 4 ID : 264330658559
Status : Answered
Chosen Option : 4

Q.5 Select the most appropriate meaning of the given idiom.
Steer clear of

- Ans
- 1. Loose temper and react furiously to someone
 - 2. Avoid someone or something because it is dangerous for you
 - 3. Show someone how to do a job or activity
 - 4. Be kind and empathetic to someone

Question ID : 264330135998
Option 1 ID : 264330532833
Option 2 ID : 264330532832
Option 3 ID : 264330532831
Option 4 ID : 264330532834
Status : Answered
Chosen Option : 2

Q.6 Select the most appropriate ANTONYM for the highlighted word.
The malice he developed for all caused a lot of damage.

- Ans
- 1. avarice
 - 2. grace
 - 3. oppression
 - 4. sympathy

Question ID : 264330120741
Option 1 ID : 264330473179
Option 2 ID : 264330473181
Option 3 ID : 264330473182
Option 4 ID : 264330473180
Status : Answered
Chosen Option : 4

Q.7 The following sentence has been divided into parts. One of them may contain an error.
Select the part that contains the error from the given options. If you don't find any error, mark 'No error' as your answer.

I was wish / to meet her / on her birthday.

- Ans
- 1. I was wish
 - 2. No error
 - 3. to meet her
 - 4. on her birthday

Question ID : 26433073521
Option 1 ID : 264330288232
Option 2 ID : 264330288235
Option 3 ID : 264330288233
Option 4 ID : 264330288234
Status : Answered
Chosen Option : 1

Q.8 The following sentence has been split into four segments. Identify the segment that contains a grammatical error.

It is take / a couple of minutes / for the computer / to boot up.

- Ans
- 1. for the computer
 - 2. to boot up
 - 3. a couple of minutes
 - 4. It is take

Question ID : 264330145277
Option 1 ID : 264330569365
Option 2 ID : 264330569366
Option 3 ID : 264330569364
Option 4 ID : 264330569363
Status : Answered
Chosen Option : 4

Q.9 You are preparing a speech for an upcoming function. Select a synonym for the highlighted word to make it better.

Sexual assault is a severe and pervasive issue that can have a significant impact on a victim's life.

- Ans**
- 1. Retrospective
 - 2. Longitudinal
 - 3. Widespread
 - 4. Equatorial

Question ID : 264330121905
Option 1 ID : 264330477776
Option 2 ID : 264330477777
Option 3 ID : 264330477775
Option 4 ID : 264330477778
Status : Answered
Chosen Option : 3

Q.10 Select the INCORRECTLY spelt word.

- Ans**
- 1. Adjourn
 - 2. Addict
 - 3. Abdact
 - 4. Advise

Question ID : 26433089398
Option 1 ID : 264330351095
Option 2 ID : 264330351094
Option 3 ID : 264330351093
Option 4 ID : 264330351096
Status : Answered
Chosen Option : 3

Q.11 Choose the option which means the same as the underlined segment.
The boss wanted to finish the case before the arrival of the Inspection team.

- Ans**
- 1. be over and done with
 - 2. be over one's head
 - 3. be over and over
 - 4. be over a barrel

Question ID : 264330120535
Option 1 ID : 264330472389
Option 2 ID : 264330472388
Option 3 ID : 264330472387
Option 4 ID : 264330472390
Status : Answered
Chosen Option : 1

Q.12 Select the most appropriate synonym of the given word.

Cruise

- Ans 1. Bounce
 2. Fall
 3. Distance
 4. Voyage

Question ID : 264330163369

Option 1 ID : 264330640764

Option 2 ID : 264330640765

Option 3 ID : 264330640763

Option 4 ID : 264330640766

Status : Not Answered

Chosen Option : --

Q.13 Select the most appropriate meaning of the highlighted idiom in the given sentence.

Nancy held a grudge against her teacher for a long time, but she finally decided to let bygones be bygones.

- Ans 1. Change the past
 2. Take revenge
 3. Flatter someone
 4. Ignore the past

Question ID : 264330108899

Option 1 ID : 264330427875

Option 2 ID : 264330427873

Option 3 ID : 264330427876

Option 4 ID : 264330427874

Status : Answered

Chosen Option : 4

Q.14 Select the option that will improve the underlined part of the given sentence.

Farmers have harvested wheat by using whatever labour that was available to them.

- Ans 1. by using amalgamated labour
 2. by using limited labour
 3. by using dispersed labour
 4. by using united labour

Question ID : 264330145291

Option 1 ID : 264330569420

Option 2 ID : 264330569421

Option 3 ID : 264330569422

Option 4 ID : 264330569419

Status : Answered

Chosen Option : 2

Q.15 Select the most appropriate meaning of the underlined idiom in the following sentence.

Rahim had to eat a humble pie in starting a row with his neighbour over a trifle.

- Ans
- 1. To remain without food
 - 2. To be punished for doing something wrong
 - 3. To take simple food
 - 4. To feel sorry and apologise for a mistake

Question ID : 264330157063

Option 1 ID : 264330615625

Option 2 ID : 264330615626

Option 3 ID : 264330615624

Option 4 ID : 264330615623

Status : Answered

Chosen Option : 4

Q.16 Select the most appropriate option that can substitute the underlined segment in the given sentence.

Malati has a difficult job, but she does it good.

- Ans
- 1. better
 - 2. well
 - 3. best
 - 4. nice

Question ID : 264330120553

Option 1 ID : 264330472457

Option 2 ID : 264330472456

Option 3 ID : 264330472458

Option 4 ID : 264330472455

Status : Answered

Chosen Option : 2

Q.17 Select the most appropriate synonym of the given word.
Fierce

- Ans
- 1. Lame
 - 2. Lavish
 - 3. Strange
 - 4. Furious

Question ID : 264330117153

Option 1 ID : 264330460677

Option 2 ID : 264330460680

Option 3 ID : 264330460679

Option 4 ID : 264330460678

Status : Answered

Chosen Option : 4

Q.18 Select the most appropriate synonym of the given word.
Faithful

- Ans**
- 1. Daring
 - 2. Unfaithful
 - 3. Cheerful
 - 4. Loyal

Question ID : **264330164163**
Option 1 ID : **264330643903**
Option 2 ID : **264330643904**
Option 3 ID : **264330643906**
Option 4 ID : **264330643905**
Status : **Marked For Review**
Chosen Option : **4**

Q.19 Select the most appropriate meaning of the underlined idiom.
Yamini is a great singer. She will make it big one day.

- Ans**
- 1. Succeed and become famous
 - 2. Become financially sound
 - 3. Educated and rich
 - 4. Migrate and settle

Question ID : **264330132897**
Option 1 ID : **264330520649**
Option 2 ID : **264330520648**
Option 3 ID : **264330520647**
Option 4 ID : **264330520650**
Status : **Answered**
Chosen Option : **1**

Q.20 Select the most appropriate ANTONYM of the given word.
Malice

- Ans**
- 1. Torsion
 - 2. Haughtiness
 - 3. Kindness
 - 4. Tremor

Question ID : **26433097019**
Option 1 ID : **264330380812**
Option 2 ID : **264330380809**
Option 3 ID : **264330380810**
Option 4 ID : **264330380811**
Status : **Answered**
Chosen Option : **3**

Q.21 Select the most appropriate option that can substitute the underlined segment in the given sentence. If there is no need to substitute it, select 'No substitution required'.
He travelled the whole world, but found piece at home.

Ans 1. peach

2. No substitution required

3. prize

4. peace

Question ID : 26433070773

Option 1 ID : 264330277550

Option 2 ID : 264330277551

Option 3 ID : 264330277548

Option 4 ID : 264330277549

Status : Answered

Chosen Option : 4

Q.22 Select the most appropriate meaning of the given word.

Trousseau

Ans 1. Being true to oneself

2. The clothes, linen, and other belongings collected by a bride for her marriage

3. A large cabinet full of expensive clothes

4. Single leg side of a trouser

Question ID : 26433073743

Option 1 ID : 264330289112

Option 2 ID : 264330289114

Option 3 ID : 264330289115

Option 4 ID : 264330289113

Status : Answered

Chosen Option : 2

Q.23 Select the option that can be used as a one-word substitute for the underlined group of words.

Since God is an all-powerful creator, he has absolute control over those whom he has created.

Ans 1. Voracious

2. Omnipotent

3. Incurable

4. Omniscient

Question ID : 26433088835

Option 1 ID : 264330348895

Option 2 ID : 264330348893

Option 3 ID : 264330348894

Option 4 ID : 264330348896

Status : Answered

Chosen Option : 2

Q.24 Select the most appropriate option to substitute the underlined segment in the given sentence.

At some point in the past, there were rows of temporary shops that used to display various cooking utensils.

- Ans
- 1. One upon a time
 - 2. Before now
 - 3. In the past few years
 - 4. Long ago

Question ID : 26433070646
Option 1 ID : 264330277046
Option 2 ID : 264330277044
Option 3 ID : 264330277045
Option 4 ID : 264330277047
Status : Answered
Chosen Option : 1

Q.25 Select the option that can be used as a one-word substitute for the given group of words.

A structure in the garden where climbing plants can grow and people can walk under

- Ans
- 1. Tomb
 - 2. Outhouse
 - 3. Pergola
 - 4. Treehouse

Question ID : 26433088896
Option 1 ID : 264330349132
Option 2 ID : 264330349130
Option 3 ID : 264330349129
Option 4 ID : 264330349131
Status : Answered
Chosen Option : 3

Q.26 Select the most appropriate option that can substitute the underlined segment in the given sentence.

She was yearning for a trip to the mountains.

- Ans
- 1. leaving for
 - 2. deeply repenting
 - 3. keenly desiring
 - 4. saving money for

Question ID : 26433099881
Option 1 ID : 264330392113
Option 2 ID : 264330392115
Option 3 ID : 264330392114
Option 4 ID : 264330392116
Status : Answered
Chosen Option : 4

Q.27 Select the most appropriate idiom for the given situation.
You wanted to speak but you controlled yourself and became patient. What have you done?

- Ans
- 1. Pin drop silence
 - 2. Dragged your feet
 - 3. Herculean task
 - 4. Held your horses

Question ID : 264330100296
Option 1 ID : 264330393749
Option 2 ID : 264330393752
Option 3 ID : 264330393751
Option 4 ID : 264330393750
Status : Answered
Chosen Option : 4

Q.28 Select the most appropriate meaning of the given idiom.

Step up to the plate

- Ans
- 1. Think about a crisis
 - 2. Plan for better performance
 - 3. Implement a plan
 - 4. Take control of a situation

Question ID : 26433099939
Option 1 ID : 264330392331
Option 2 ID : 264330392330
Option 3 ID : 264330392329
Option 4 ID : 264330392332
Status : Not Answered
Chosen Option : --

Q.29 Select the most appropriate meaning of the underlined idiom.
He ate the whole bunch of grapes under the nose of all of us.

- Ans
- 1. After much persuasion
 - 2. In full view of somebody
 - 3. Sharing equally
 - 4. Secretly

Question ID : 264330122978
Option 1 ID : 264330481978
Option 2 ID : 264330481977
Option 3 ID : 264330481976
Option 4 ID : 264330481975
Status : Answered
Chosen Option : 2

Q.30 Select the **INCORRECTLY** spelt word.

- Ans 1. **Prefered**
 2. **Revered**
 3. **Answered**
 4. **Reference**

Question ID : **264330163412**
Option 1 ID : **264330640928**
Option 2 ID : **264330640929**
Option 3 ID : **264330640930**
Option 4 ID : **264330640927**
Status : **Answered**
Chosen Option : **1**

Q.31 Select the option that can be used as a one-word substitute for the given group of words.

Extremely beautiful, elaborate or impressive

- Ans 1. **Proficient**
 2. **Magnificent**
 3. **Transient**
 4. **Deficient**

Question ID : **26433089338**
Option 1 ID : **264330350854**
Option 2 ID : **264330350855**
Option 3 ID : **264330350856**
Option 4 ID : **264330350853**
Status : **Answered**
Chosen Option : **2**

Q.32 Select the most appropriate meaning of the given idiom.
To burn the midnight oil

- Ans 1. **To waste time**
 2. **To stay up late working or studying**
 3. **To overthink**
 4. **To be relaxed and calm**

Question ID : **264330139773**
Option 1 ID : **264330547509**
Option 2 ID : **264330547508**
Option 3 ID : **264330547510**
Option 4 ID : **264330547507**
Status : **Answered**
Chosen Option : **2**

Q.33 Select the most appropriate synonym of the underlined word.
It was inevitable that the team management would sack him after his rude behaviour.

- Ans
- 1. impassionate
 - 2. amiable
 - 3. measurable
 - 4. unavoidable

Question ID : 264330120616
Option 1 ID : 264330472706
Option 2 ID : 264330472703
Option 3 ID : 264330472704
Option 4 ID : 264330472705
Status : Answered
Chosen Option : 4

Q.34 Select the INCORRECTLY spelt word from the underlined words in the following sentence.

As affidevit is a statement or declaration in writing an oath or affirmation, sworn before a person having authority to administer oath.

- Ans
- 1. affidevit
 - 2. administer
 - 3. authority
 - 4. affirmation

Question ID : 264330141155
Option 1 ID : 264330552963
Option 2 ID : 264330552966
Option 3 ID : 264330552965
Option 4 ID : 264330552964
Status : Answered
Chosen Option : 1

Q.35 The following sentence has been split into four segments. Identify the segment that contains a grammatical error.

We have being / arranged the stay / for the guests at / a hillside resort.

- Ans
- 1. a hillside resort
 - 2. We have being
 - 3. arranged the stay
 - 4. for the guests at

Question ID : 26433091957
Option 1 ID : 264330361168
Option 2 ID : 264330361165
Option 3 ID : 264330361166
Option 4 ID : 264330361167
Status : Answered
Chosen Option : 2

Q.36 Select the most appropriate synonym of the given word.

Extravagance

- Ans 1. Simplicity
 2. Love
 3. Fortune
 4. Self-indulgence

Question ID : 264330163371
Option 1 ID : 264330640773
Option 2 ID : 264330640774
Option 3 ID : 264330640772
Option 4 ID : 264330640771
Status : Answered
Chosen Option : 4

Q.37 Select the most appropriate synonym of the given word.

Antique

- Ans 1. Ancient
 2. New
 3. Gothic
 4. Modern

Question ID : 264330163355
Option 1 ID : 264330640713
Option 2 ID : 264330640714
Option 3 ID : 264330640712
Option 4 ID : 264330640711
Status : Not Answered
Chosen Option : --

Q.38 Select the INCORRECTLY spelt word in the given sentence.

The Egyptian Pharoahs were the Kings of ancient Egypt and were considered as the literal embodiment of God himself.

- Ans 1. literal
 2. ancient
 3. pharoahs
 4. embodiment

Question ID : 26433089738
Option 1 ID : 264330352446
Option 2 ID : 264330352448
Option 3 ID : 264330352447
Option 4 ID : 264330352445
Status : Answered
Chosen Option : 4

Q.39 Select the INCORRECTLY spelt word.

- Ans 1. Isle
 2. Braed
 3. Achieve
 4. Amicable

Question ID : 264330163410
 Option 1 ID : 264330640921
 Option 2 ID : 264330640922
 Option 3 ID : 264330640920
 Option 4 ID : 264330640919
 Status : Answered
 Chosen Option : 2

Q.40 Select the most appropriate option that can substitute the underlined segment in the given sentence.

Naina is leaving and I am think to apply for her job.

- Ans 1. thinking in applying
 2. thinking about applying
 3. thinking about apply
 4. thinking on applying

Question ID : 264330108915
 Option 1 ID : 264330427938
 Option 2 ID : 264330427940
 Option 3 ID : 264330427937
 Option 4 ID : 264330427939
 Status : Answered
 Chosen Option : 2

Comprehension:

In the following passage, some words have been deleted. Read the passage carefully and select the most appropriate option to fill in each blank.

Discrimination refers to the inequitable or (1)_____ treatment of individuals or collectives on the basis of attributes such as ethnicity, sex, age and sexual orientation. Studies have indicated that the perception of discrimination can (2)_____ a series of stress-induced alterations in an individual's mental, physiological and behavioural responses. The experience of stress is known to elicit unfavourable emotional reactions, including but not limited to (3)_____, despair and resentment. Furthermore, anxiety has been linked to a rise in health-compromising behaviours such as smoking, drinking and (4)_____ drug use, while simultaneously causing a (5)_____ in health-promoting activities such as quality sleep and vigorous exercise.

SubQuestion No : 41

Q.41 Select the most appropriate option to fill in blank no. 1.

- Ans 1. systematic
 2. biased
 3. pathetic
 4. tragic

Question ID : 264330163437
 Option 1 ID : 264330641021
 Option 2 ID : 264330641020
 Option 3 ID : 264330641019
 Option 4 ID : 264330641022
 Status : Answered
 Chosen Option : 3

Comprehension:

In the following passage, some words have been deleted. Read the passage carefully and select the most appropriate option to fill in each blank.

Discrimination refers to the inequitable or (1)_____ treatment of individuals or collectives on the basis of attributes such as ethnicity, sex, age and sexual orientation. Studies have indicated that the perception of discrimination can (2)_____ a series of stress-induced alterations in an individual's mental, physiological and behavioural responses. The experience of stress is known to elicit unfavourable emotional reactions, including but not limited to (3)_____, despair and resentment. Furthermore, anxiety has been linked to a rise in health-compromising behaviours such as smoking, drinking and (4)_____ drug use, while simultaneously causing a (5)_____ in health-promoting activities such as quality sleep and vigorous exercise.

SubQuestion No : 42

Q.42 Select the most appropriate option to fill in blank no. 2.

- Ans 1. support
 2. inspire
 3. trigger
 4. motivate

Question ID : 264330163438

Option 1 ID : 264330641026

Option 2 ID : 264330641025

Option 3 ID : 264330641023

Option 4 ID : 264330641024

Status : Answered

Chosen Option : 3

Comprehension:

In the following passage, some words have been deleted. Read the passage carefully and select the most appropriate option to fill in each blank.

Discrimination refers to the inequitable or (1)_____ treatment of individuals or collectives on the basis of attributes such as ethnicity, sex, age and sexual orientation. Studies have indicated that the perception of discrimination can (2)_____ a series of stress-induced alterations in an individual's mental, physiological and behavioural responses. The experience of stress is known to elicit unfavourable emotional reactions, including but not limited to (3)_____, despair and resentment. Furthermore, anxiety has been linked to a rise in health-compromising behaviours such as smoking, drinking and (4)_____ drug use, while simultaneously causing a (5)_____ in health-promoting activities such as quality sleep and vigorous exercise.

SubQuestion No : 43

Q.43 Select the most appropriate option to fill in blank no. 3.

- Ans 1. death
 2. anxiety
 3. deafness
 4. impairment

Question ID : 264330163439

Option 1 ID : 264330641029

Option 2 ID : 264330641030

Option 3 ID : 264330641027

Option 4 ID : 264330641028

Status : Answered

Chosen Option : 2

Comprehension:

In the following passage, some words have been deleted. Read the passage carefully and select the most appropriate option to fill in each blank.

Discrimination refers to the inequitable or (1)_____ treatment of individuals or collectives on the basis of attributes such as ethnicity, sex, age and sexual orientation. Studies have indicated that the perception of discrimination can (2)_____ a series of stress-induced alterations in an individual's mental, physiological and behavioural responses. The experience of stress is known to elicit unfavourable emotional reactions, including but not limited to (3)_____, despair and resentment. Furthermore, anxiety has been linked to a rise in health-compromising behaviours such as smoking, drinking and (4)_____ drug use, while simultaneously causing a (5)_____ in health-promoting activities such as quality sleep and vigorous exercise.

SubQuestion No : 44

Q.44 Select the most appropriate option to fill in blank no. 4.

- Ans 1. prescribed
 2. mandatory
 3. illicit
 4. legitimate

Question ID : 264330163440

Option 1 ID : 264330641033

Option 2 ID : 264330641034

Option 3 ID : 264330641032

Option 4 ID : 264330641031

Status : Answered

Chosen Option : 3

Comprehension:

In the following passage, some words have been deleted. Read the passage carefully and select the most appropriate option to fill in each blank.

Discrimination refers to the inequitable or (1)_____ treatment of individuals or collectives on the basis of attributes such as ethnicity, sex, age and sexual orientation. Studies have indicated that the perception of discrimination can (2)_____ a series of stress-induced alterations in an individual's mental, physiological and behavioural responses. The experience of stress is known to elicit unfavourable emotional reactions, including but not limited to (3)_____, despair and resentment. Furthermore, anxiety has been linked to a rise in health-compromising behaviours such as smoking, drinking and (4)_____ drug use, while simultaneously causing a (5)_____ in health-promoting activities such as quality sleep and vigorous exercise.

SubQuestion No : 45

Q.45 Select the most appropriate option to fill in blank no. 5.

- Ans 1. rise
 2. unfruitful
 3. decline
 4. upheaval

Question ID : 264330163441

Option 1 ID : 264330641035

Option 2 ID : 264330641038

Option 3 ID : 264330641036

Option 4 ID : 264330641037

Status : Answered

Chosen Option : 3

Comprehension:

Read the given passage carefully and answer the questions that follow.

The world of social media is a strange and wondrous place. It's a world where you can connect with people from all over the globe, share your thoughts and opinions, and maybe even go viral if you're lucky. But let's be real, it's also a world filled with endless cat videos, oversharing, and drama.

One of the most interesting things about social media is the way it's changed the way we communicate. We've gone from long, thoughtful emails to quick, abbreviated messages with emojis and acronyms. And don't even get me started on the whole hashtag phenomenon. It's like we're all speaking a different language now.

But there are also some downsides to this constant connection. It's easy to get sucked into the world of social media and forget about the real world around us. We're so busy scrolling through our feeds that we forget to enjoy the little moments in life. And let's not forget about the pressure to present the perfect life online. It's like we're all in a competition to see who can be the most popular, the most successful, the most enviable.

Despite all of this, I have to admit, I'm still a fan of social media. It's a great way to stay connected with friends and family, and I've even made some new friends through various online communities. Plus, let's face it, sometimes you just need a good laugh at a ridiculous meme.

SubQuestion No : 46

Q.46 What is the ANTONYM of the word 'perfect', as used in the passage?

- Ans**
- 1. Troublesome
 - 2. Limited
 - 3. Unsatisfactory
 - 4. Laughable

Question ID : **264330165131**

Option 1 ID : **264330647636**

Option 2 ID : **264330647635**

Option 3 ID : **264330647637**

Option 4 ID : **264330647638**

Status : **Answered**

Chosen Option : **3**

Comprehension:

Read the given passage carefully and answer the questions that follow.

The world of social media is a strange and wondrous place. It's a world where you can connect with people from all over the globe, share your thoughts and opinions, and maybe even go viral if you're lucky. But let's be real, it's also a world filled with endless cat videos, oversharing, and drama.

One of the most interesting things about social media is the way it's changed the way we communicate. We've gone from long, thoughtful emails to quick, abbreviated messages with emojis and acronyms. And don't even get me started on the whole hashtag phenomenon. It's like we're all speaking a different language now.

But there are also some downsides to this constant connection. It's easy to get sucked into the world of social media and forget about the real world around us. We're so busy scrolling through our feeds that we forget to enjoy the little moments in life. And let's not forget about the pressure to present the perfect life online. It's like we're all in a competition to see who can be the most popular, the most successful, the most enviable.

Despite all of this, I have to admit, I'm still a fan of social media. It's a great way to stay connected with friends and family, and I've even made some new friends through various online communities. Plus, let's face it, sometimes you just need a good laugh at a ridiculous meme.

SubQuestion No : 47

Q.47 Which of the following is NOT mentioned as a way social media has changed the way we communicate?

- Ans** 1. Quick, abbreviated messages with emojis and acronyms.
2. Video conferencing for more meaningful conversations.
3. Connecting with people from all over the world.
4. The use of hashtags.

Question ID : 264330165130

Option 1 ID : 264330647631

Option 2 ID : 264330647633

Option 3 ID : 264330647634

Option 4 ID : 264330647632

Status : Answered

Chosen Option : 2

Comprehension:

Read the given passage carefully and answer the questions that follow.

The world of social media is a strange and wondrous place. It's a world where you can connect with people from all over the globe, share your thoughts and opinions, and maybe even go viral if you're lucky. But let's be real, it's also a world filled with endless cat videos, oversharing, and drama.

One of the most interesting things about social media is the way it's changed the way we communicate. We've gone from long, thoughtful emails to quick, abbreviated messages with emojis and acronyms. And don't even get me started on the whole hashtag phenomenon. It's like we're all speaking a different language now.

But there are also some downsides to this constant connection. It's easy to get sucked into the world of social media and forget about the real world around us. We're so busy scrolling through our feeds that we forget to enjoy the little moments in life. And let's not forget about the pressure to present the perfect life online. It's like we're all in a competition to see who can be the most popular, the most successful, the most enviable.

Despite all of this, I have to admit, I'm still a fan of social media. It's a great way to stay connected with friends and family, and I've even made some new friends through various online communities. Plus, let's face it, sometimes you just need a good laugh at a ridiculous meme.

SubQuestion No : 48

Q.48 Which of the following would be the most appropriate title for this passage?

Ans 1. The Joys and Sorrows of Social Media

2. The Benefits of Social Media

3. The Dark Side of Social Media

4. Mastering the Art of Social Media

Question ID : 264330165127

Option 1 ID : 264330647622

Option 2 ID : 264330647619

Option 3 ID : 264330647620

Option 4 ID : 264330647621

Status : Answered

Chosen Option : 1

Comprehension:

Read the given passage carefully and answer the questions that follow.

The world of social media is a strange and wondrous place. It's a world where you can connect with people from all over the globe, share your thoughts and opinions, and maybe even go viral if you're lucky. But let's be real, it's also a world filled with endless cat videos, oversharing, and drama.

One of the most interesting things about social media is the way it's changed the way we communicate. We've gone from long, thoughtful emails to quick, abbreviated messages with emojis and acronyms. And don't even get me started on the whole hashtag phenomenon. It's like we're all speaking a different language now.

But there are also some downsides to this constant connection. It's easy to get sucked into the world of social media and forget about the real world around us. We're so busy scrolling through our feeds that we forget to enjoy the little moments in life. And let's not forget about the pressure to present the perfect life online. It's like we're all in a competition to see who can be the most popular, the most successful, the most enviable.

Despite all of this, I have to admit, I'm still a fan of social media. It's a great way to stay connected with friends and family, and I've even made some new friends through various online communities. Plus, let's face it, sometimes you just need a good laugh at a ridiculous meme.

SubQuestion No : 49

Q.49 What is one of the downsides of social media mentioned in the passage?

Ans 1. It can help connect with people all over the globe.

2. It's a great way to stay connected with friends and family.

3. It encourages people to enjoy the little moments in life.

4. It can lead to pressure to present a perfect life online.

Question ID : 264330165128

Option 1 ID : 264330647624

Option 2 ID : 264330647623

Option 3 ID : 264330647626

Option 4 ID : 264330647625

Status : Answered

Chosen Option : 4

Comprehension:

Read the given passage carefully and answer the questions that follow.

The world of social media is a strange and wondrous place. It's a world where you can connect with people from all over the globe, share your thoughts and opinions, and maybe even go viral if you're lucky. But let's be real, it's also a world filled with endless cat videos, oversharing, and drama.

One of the most interesting things about social media is the way it's changed the way we communicate. We've gone from long, thoughtful emails to quick, abbreviated messages with emojis and acronyms. And don't even get me started on the whole hashtag phenomenon. It's like we're all speaking a different language now.

But there are also some downsides to this constant connection. It's easy to get sucked into the world of social media and forget about the real world around us. We're so busy scrolling through our feeds that we forget to enjoy the little moments in life. And let's not forget about the pressure to present the perfect life online. It's like we're all in a competition to see who can be the most popular, the most successful, the most enviable.

Despite all of this, I have to admit, I'm still a fan of social media. It's a great way to stay connected with friends and family, and I've even made some new friends through various online communities. Plus, let's face it, sometimes you just need a good laugh at a ridiculous meme.

SubQuestion No : 50**Q.50 What is the theme of the passage?**

- Ans**
- 1. The dangers of spending too much time online.
 - 2. The importance of social media for businesses.
 - 3. The positive and negative effects of social media.
 - 4. The history of social media.

Question ID : **264330165129**Option 1 ID : **264330647629**Option 2 ID : **264330647628**Option 3 ID : **264330647627**Option 4 ID : **264330647630**Status : **Answered**Chosen Option : **3**