

## SSC CPO Oct 04, 2023 Shift 1 Question Paper

### Sub Inspector in Delhi Police and Central Armed Police Forces Examination 2023 Paper I

Roll Number	
Candidate Name	
Venue Name	
Exam Date	04/10/2023
Exam Time	9:00 AM - 11:00 AM
Subject	SICPO Paper I 2023

Section : **General Intelligence and Reasoning**

**Q.1** Three of the following letter-clusters are alike in some manner and one is different.  
Select the one that is different.

- Ans  1. NQST  
 2. GTHS  
 3. PSUV  
 4. SVXY

Question ID : 264330145349  
Option 1 ID : 264330569653  
Option 2 ID : 264330569654  
Option 3 ID : 264330569652  
Option 4 ID : 264330569651  
Status : Answered  
Chosen Option : 2

**Q.2** Three statements are given followed by three conclusions numbered I, II and III.  
Assuming the statements to be true, even if they seem to be at variance with  
commonly known facts, decide which of the conclusions logically follow(s) from the  
statements.

**Statements:**  
Some elephants are fishes.  
No fish is a tiger.  
All deer are tigers.

**Conclusions:**  
I. Some elephants are deer.  
II. No elephant is a tiger.  
III. No deer is a fish.

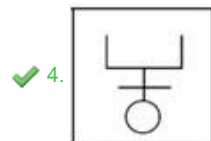
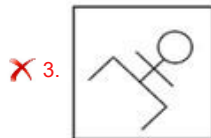
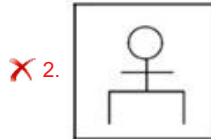
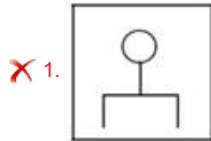
- Ans  1. Only conclusion III follows.  
 2. Both conclusions I and III follow.  
 3. Both conclusions I and II follow.  
 4. Only conclusion II follows.

Question ID : 264330145343  
Option 1 ID : 264330569630  
Option 2 ID : 264330569628  
Option 3 ID : 264330569627  
Option 4 ID : 264330569629  
Status : Answered  
Chosen Option : 1

Q.3 Select the figure that will come next (?) in the following series.



Ans



Question ID : 26433082667

Option 1 ID : 264330324504

Option 2 ID : 264330324503

Option 3 ID : 264330324501

Option 4 ID : 264330324502

Status : Answered

Chosen Option : 4

Q.4 Six friends are sitting in a circle. All of them are facing the centre. Kanak sits third to the right of Sona. Kapil is an immediate neighbour of Mani. Goldy sits second to the right of Mani. Sona is an immediate neighbour of Kapil and Suresh. Who sits second to the left of Kanak?

Ans ✗ 1. Suresh

✓ 2. Kapil

✗ 3. Goldy

✗ 4. Mani

Question ID : 264330145406

Option 1 ID : 264330569879

Option 2 ID : 264330569880

Option 3 ID : 264330569882

Option 4 ID : 264330569881

Status : Answered

Chosen Option : 2

**Q.5** In this question, three statements are given, followed by two conclusions numbered I and II. Assuming the statements to be true, even if they seem to be at variance with commonly known facts, decide which of the conclusions logically follows/follow from the statements.

Statements:

I. All buildings are towers.

II. No tower is a shop.

III. Some shops are offices.

Conclusions:

I. Some offices are towers.

II. No building is a shop.

- Ans
- 1. Both conclusions I and II follow
  - 2. Only conclusion I follows
  - 3. Only conclusion II follows
  - 4. Neither conclusion I nor II follows

Question ID : 264330104078

Option 1 ID : 264330408615

Option 2 ID : 264330408613

Option 3 ID : 264330408614

Option 4 ID : 264330408616

Status : Answered

Chosen Option : 3

**Q.6** Which of the following numbers will replace the question mark (?) in the given series?  
239, 274, 309, 354, 399, 454, ?

- Ans
- 1. 499
  - 2. 474
  - 3. 539
  - 4. 509

Question ID : 26433067874

Option 1 ID : 264330266011

Option 2 ID : 264330266009

Option 3 ID : 264330266008

Option 4 ID : 264330266010

Status : Answered

Chosen Option : 1

**Q.7** If '+' means '-', '-' means 'x', 'x' means '÷' and '÷' means '+', what will come in place of '?' in the following equation?

$$36 - 5 \div 240 \times 6 + 17 = ?$$

- Ans
- 1. 218
  - 2. 221
  - 3. 203
  - 4. 237

Question ID : 264330101144

Option 1 ID : 264330397122

Option 2 ID : 264330397121

Option 3 ID : 264330397124

Option 4 ID : 264330397123

Status : Answered

Chosen Option : 3

Q.8 If A, B, C, D and E denote +, -, ×, ÷ and =, respectively, then which of the following options is correct?

- Ans  1. 4A9C6D2E40A9  
 2. 4A9C6D2B40E9  
 3. 4A9C6D2E40B9  
 4. 4A9E6D2C40B9

Question ID : 26433057353  
Option 1 ID : 264330224396  
Option 2 ID : 264330224397  
Option 3 ID : 264330224399  
Option 4 ID : 264330224398  
Status : Answered  
Chosen Option : 2

Q.9 Which of the following numbers will replace the question mark (?) in the given series?  
25, 26, 28, 32, 40, ?

- Ans  1. 50  
 2. 56  
 3. 58  
 4. 52

Question ID : 26433057326  
Option 1 ID : 264330224289  
Option 2 ID : 264330224290  
Option 3 ID : 264330224291  
Option 4 ID : 264330224288  
Status : Answered  
Chosen Option : 2

Q.10 Which letter-cluster will replace the question mark (?) to complete the given series?  
VQSN, ?, ROOL, PNMK, NMKJ

- Ans  1. PQMN  
 2. TPQM  
 3. PTMQ  
 4. TQRN

Question ID : 264330180760  
Option 1 ID : 264330709010  
Option 2 ID : 264330709009  
Option 3 ID : 264330709008  
Option 4 ID : 264330709007  
Status : Answered  
Chosen Option : 2

Q.11 If '+' means 'x', 'x' means '-', '-' means '÷' and '÷' means '+', then what will come in place of the (?) in the following equation?  
 $9 + 3 \div 2 \times 135 - 15 = ?$

- Ans
- 1. 22
  - 2. 25
  - 3. 18.5
  - 4. 20

Question ID : 264330114255

Option 1 ID : 264330449107

Option 2 ID : 264330449108

Option 3 ID : 264330449106

Option 4 ID : 264330449105

Status : Answered

Chosen Option : 4

Q.12 Select the correct option that indicates the arrangement of the given words in the order in which they appear in an English dictionary.

1. Realistic
2. Readily
3. Reach
4. Really
5. Reactor
6. Realize

- Ans
- 1. 3, 5, 1, 2, 6, 4
  - 2. 3, 5, 2, 1, 6, 4
  - 3. 3, 2, 6, 1, 5, 4
  - 4. 3, 5, 6, 1, 2, 4

Question ID : 264330145383

Option 1 ID : 264330569790

Option 2 ID : 264330569787

Option 3 ID : 264330569789

Option 4 ID : 264330569788

Status : Answered

Chosen Option : 2

Q.13 Select the option that is related to the third word in the same way as the second word is related to the first word.  
 (The words must be considered as meaningful words and must not be related to each other based on the number of letters/number of consonants/vowels in the word.)

Derive : Infer :: Urge : ?

- Ans
- 1. Protest
  - 2. Hinder
  - 3. Censure
  - 4. Exhort

Question ID : 264330145398

Option 1 ID : 264330569848

Option 2 ID : 264330569850

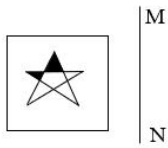
Option 3 ID : 264330569847

Option 4 ID : 264330569849

Status : Answered

Chosen Option : 4

**Q.14** Select the correct mirror image of the given figure when the mirror is placed at line MN as shown.




**Ans**

✗ 1.



✗ 2.



✓ 3.



✗ 4.



Question ID : 26433056625

Option 1 ID : 264330221485

Option 2 ID : 264330221484

Option 3 ID : 264330221486

Option 4 ID : 264330221487

Status : Answered

Chosen Option : 3

**Q.15** 'D @ G' means 'D is the father of G',  
'D # G' means 'D is the daughter of G',  
'D \* G' means 'D is the mother of G', and  
'D - G' means 'D is the husband of G'.  
If A - Q \* B @ R, how is A related to R?

**Ans** ✗ 1. Father

✗ 2. Husband

✗ 3. Son

✓ 4. Father's father

Question ID : 264330126661

Option 1 ID : 264330496319

Option 2 ID : 264330496316

Option 3 ID : 264330496317

Option 4 ID : 264330496318

Status : Answered

Chosen Option : 4

Q.16 If A denotes '+', B denotes 'x', C denotes '-', and D denotes '÷', then what will come in place of '?' in the following equation?  
 $145 A 27 D 3 B ? = 163$

- Ans
- 1. 1
  - 2. 2
  - 3. 3
  - 4. 6

Question ID : 26433067673  
 Option 1 ID : 264330265204  
 Option 2 ID : 264330265206  
 Option 3 ID : 264330265207  
 Option 4 ID : 264330265205  
 Status : Answered  
 Chosen Option : 2

Q.17 In a certain code language, 'LIFE' is coded as '9351' and 'NEAR' is coded as '4692'.  
 What is the code for 'E' in the given code language?

- Ans
- 1. 3
  - 2. 4
  - 3. 1
  - 4. 9

Question ID : 264330169657  
 Option 1 ID : 264330665329  
 Option 2 ID : 264330665328  
 Option 3 ID : 264330665330  
 Option 4 ID : 264330665327  
 Status : Answered  
 Chosen Option : 4

Q.18 If '+' means '-', '-' means 'x', 'x' means '÷', '÷' means '+', then what will come in place of the question mark (?) in the following equation?  
 $124 \times 4 \div 13 - 3 + 36 = ?$

- Ans
- 1. 31
  - 2. 34
  - 3. 45
  - 4. 42

Question ID : 264330126059  
 Option 1 ID : 264330493909  
 Option 2 ID : 264330493911  
 Option 3 ID : 264330493908  
 Option 4 ID : 264330493910  
 Status : Answered  
 Chosen Option : 2

Q.19 Select the correct mirror image of the given figure when the mirror is placed at MN as shown below



- Ans
- 1. B K \$ 6 G H X
  - 2. B K \$ 6 G H X
  - 3. X H G 6 \$ K B
  - 4. B K \$ 6 G H X

Question ID : 26433085400

Option 1 ID : 264330335302

Option 2 ID : 264330335304

Option 3 ID : 264330335303

Option 4 ID : 264330335301

Status : Answered

Chosen Option : 3

Q.20 In a certain code language, 'FIRE' is coded as '7391' and 'AGED' is coded as '8247'. What is the code for 'E' in the given code language?

- Ans
- 1. 2
  - 2. 7
  - 3. 4
  - 4. 3

Question ID : 264330169658

Option 1 ID : 264330665333

Option 2 ID : 264330665332

Option 3 ID : 264330665334

Option 4 ID : 264330665331

Status : Answered

Chosen Option : 2

Q.21 A man is standing in the park facing North. He turns to  $90^\circ$  towards the left and walks 40 km. He again takes a  $90^\circ$  turn towards the right and walks 50 km. He takes the next  $90^\circ$  turn towards the right and walks 60 km. Lastly, he takes  $90^\circ$  turn towards the right and walks 50 km. How much distance is he from the starting point?

- Ans
- 1. 40 km
  - 2. 60 km
  - 3. 50 km
  - 4. 20 km

Question ID : 26433093124

Option 1 ID : 264330365749

Option 2 ID : 264330365752

Option 3 ID : 264330365750

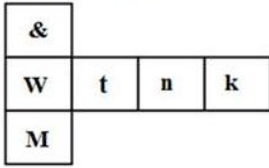
Option 4 ID : 264330365751

Status : Answered

Chosen Option : 4

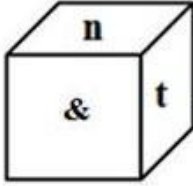


**Q.22** If the given sheet is folded to form a cube, which of the following figures is NOT possible?

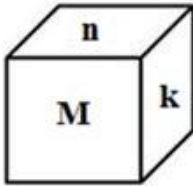


Ans

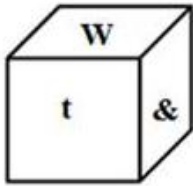
✗ 1.



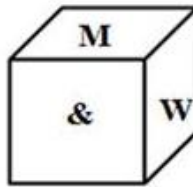
✗ 2.



✗ 3.



✓ 4.



Question ID : 26433059914

Option 1 ID : 264330234491

Option 2 ID : 264330234490

Option 3 ID : 264330234489

Option 4 ID : 264330234488

Status : Answered

Chosen Option : 4

**Q.23** Two statements are given, followed by two conclusions numbered I and II. Assuming the statements to be true, even if they seem to be at variance with commonly known facts, decide which of the conclusions logically follow(s) from the statements.

Statements:

All cars are vehicles.

All vehicles are trucks.

Conclusions:

I) All cars are trucks.

II) All trucks are vehicles.

Ans ✗ 1. Neither Conclusion I nor II follows.

✓ 2. Only Conclusion I follows.

✗ 3. Only Conclusion II follows.

✗ 4. Both Conclusions I and II follow

Question ID : 26433067701

Option 1 ID : 264330265319

Option 2 ID : 264330265316

Option 3 ID : 264330265317

Option 4 ID : 264330265318

Status : Answered

Chosen Option : 2

Q.24 Select the option that represents the letters which, when sequentially placed from left to right in the blanks below, will complete the letter series.

P \_ \_ H \_ \_ C E \_ Z P \_ E H \_

- Ans
- 1. HZCZPEC
  - 2. CEZPHCZ
  - 3. ZCHPZCE
  - 4. EPZCHEC

Question ID : 26433086954

Option 1 ID : 264330341459

Option 2 ID : 264330341458

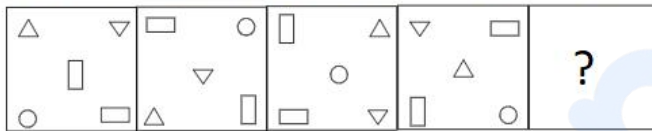
Option 3 ID : 264330341457

Option 4 ID : 264330341460

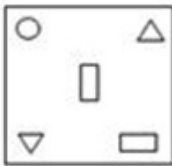
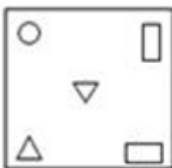
Status : Answered

Chosen Option : 2

Q.25 Select the figure that will replace the question mark (?) in the following figure series.



Ans

- 1. 
- 2. 
- 3. 
- 4. 

Question ID : 264330145493

Option 1 ID : 264330570228

Option 2 ID : 264330570229

Option 3 ID : 264330570227

Option 4 ID : 264330570230

Status : Answered

Chosen Option : 3

**Q.26** Select the set in which the number are related in the same way as the numbers of the given sets. (NOTE : Operations should be performed on the whole numbers, without breaking down the numbers into its constituent digits. E.g. 13 – Operations on 13 such as adding /subtracting /multiplying etc. to 13 can be performed. Breaking down 13 into 1 and 3 and then performing mathematical operations on 1 and 3 is not allowed.)  
(13, 14, 54)  
(15, 18, 66)

- Ans  1. (11, 13, 52)  
 2. (15, 17, 66)  
 3. (13, 19, 64)  
 4. (12, 34, 90)

Question ID : 26433069109  
Option 1 ID : 264330270951  
Option 2 ID : 264330270950  
Option 3 ID : 264330270948  
Option 4 ID : 264330270949

Status : Answered

Chosen Option : 3

**Q.27** Select the number from among the given options that can replace the question mark (?) in the following series.  
61, 95, 138, 197, 279, ?

- Ans  1. 397  
 2. 389  
 3. 391  
 4. 395

Question ID : 26433057050  
Option 1 ID : 264330223186  
Option 2 ID : 264330223185  
Option 3 ID : 264330223184  
Option 4 ID : 264330223187

Status : Answered

Chosen Option : 3

**Q.28** Which letter-cluster will replace the question mark (?) to complete the given series?  
GOWB, MVEK, SCMT, ?, EQCL

- Ans  1. YJUC  
 2. YJCU  
 3. YKUC  
 4. YKCU

Question ID : 26433040788  
Option 1 ID : 264330159629  
Option 2 ID : 264330159627  
Option 3 ID : 264330159630  
Option 4 ID : 264330159628

Status : Answered

Chosen Option : 1

**Q.29** Select the set in which the numbers are related in the same way as are the numbers of the following set.

(NOTE : Operations should be performed on the whole numbers, without breaking down the numbers into its constituent digits. E.g. 13 – Operations on 13 such as adding /subtracting /multiplying etc. to 13 can be performed. Breaking down 13 into 1 and 3 and then performing mathematical operations on 1 and 3 is NOT allowed)

(21, 5, 120)  
(2, 7, 8)

- Ans  1. (3,4,10)  
 2. (3,4,16)  
 3. (2,6,21)  
 4. (4,7,34)

Question ID : 264330145329

Option 1 ID : 264330569573

Option 2 ID : 264330569571

Option 3 ID : 264330569574

Option 4 ID : 264330569572

Status : Answered

Chosen Option : 4

**Q.30** Select the option that is related to the third term in the same way as the second term is related to the first term and the sixth term is related to the fifth term.

142 : 108 :: 185 : ? :: 169 : 135

- Ans  1. 157  
 2. 148  
 3. 151  
 4. 162

Question ID : 26433079157

Option 1 ID : 264330310635

Option 2 ID : 264330310632

Option 3 ID : 264330310633

Option 4 ID : 264330310634

Status : Answered

Chosen Option : 3

**Q.31** In a certain code language, 'TRAUMA' is coded as '36' and 'STIL' is coded as '24'. How will 'OBEIDEINT' be coded in that language?

- Ans  1. 54  
 2. 84  
 3. 44  
 4. 72

Question ID : 26433079049

Option 1 ID : 264330310201

Option 2 ID : 264330310203

Option 3 ID : 264330310200

Option 4 ID : 264330310202

Status : Answered

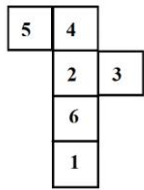
Chosen Option : 1

**Q.32** Which of the following numbers will replace the question mark (?) in the given series?  
352, 326, 284, 225, 148, ?

- Ans
- 1. 71
  - 2. 54
  - 3. 52
  - 4. 50

Question ID : 26433069399  
 Option 1 ID : 264330272109  
 Option 2 ID : 264330272110  
 Option 3 ID : 264330272108  
 Option 4 ID : 264330272111  
 Status : Answered  
 Chosen Option : 3

**Q.33** A cube is made by folding the given sheet. In the cube so formed, what would be the number on the opposite side of the number '1'?



- Ans
- 1. 2
  - 2. 5
  - 3. 3
  - 4. 4

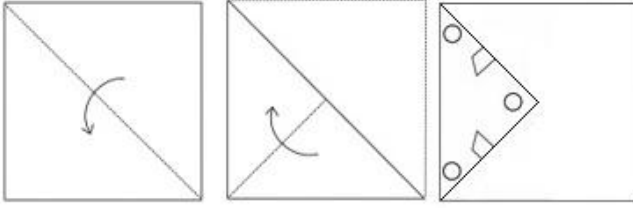
Question ID : 26433065676  
 Option 1 ID : 264330257266  
 Option 2 ID : 264330257264  
 Option 3 ID : 264330257267  
 Option 4 ID : 264330257265  
 Status : Answered  
 Chosen Option : 1

**Q.34** Four letter-clusters have been given, out of which three are alike in some manner and one is different. Select the odd letter-cluster.

- Ans
- 1. ZSNK
  - 2. VOJG
  - 3. WNDD
  - 4. TMHE

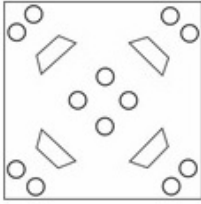
Question ID : 264330180757  
 Option 1 ID : 264330708995  
 Option 2 ID : 264330708998  
 Option 3 ID : 264330708997  
 Option 4 ID : 264330708996  
 Status : Answered  
 Chosen Option : 3

Q.35 A paper is folded and cut as shown. How will it appear when unfolded?

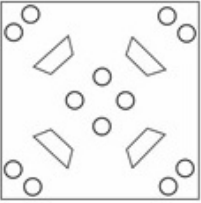


Ans

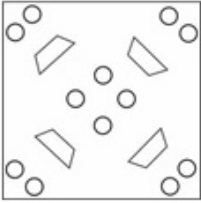
✓ 1.



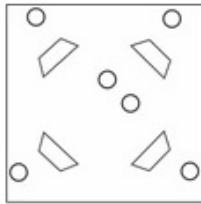
✗ 2.



✗ 3.



✗ 4.



Question ID : 26433040795

Option 1 ID : 264330159655

Option 2 ID : 264330159656

Option 3 ID : 264330159657

Option 4 ID : 264330159658

Status : Answered

Chosen Option : 1

**Q.36** Select the set in which the numbers are related in the same way as are the numbers of the following sets.

(NOTE : Operations should be performed on the whole numbers, without breaking down the numbers into its constituent digits. E.g. 13 – Operations on 13 such as adding /subtracting /multiplying etc. to 13 can be performed. Breaking down 13 into 1 and 3 and then performing mathematical operations on 1 and 3 is NOT allowed)

(329, 145, 184), (567, 221, 346)

Ans  1. (308, 205, 192)

2. (506, 302, 224)

3. (676, 225, 451)

4. (464, 264, 206)

Question ID : 264330145297

Option 1 ID : 264330569446

Option 2 ID : 264330569445

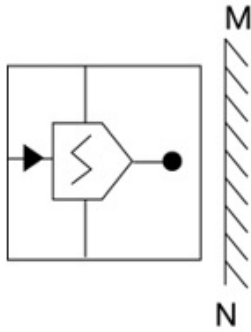
Option 3 ID : 264330569443

Option 4 ID : 264330569444

Status : Answered

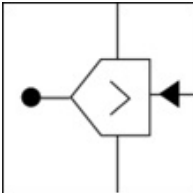
Chosen Option : 3

Q.37 Select the correct mirror image of the given combination when the mirror is placed at 'MN' as shown below.

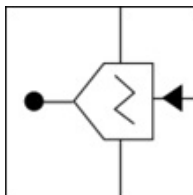


Ans

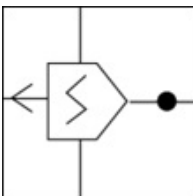
✗ 1.



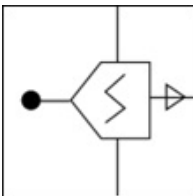
✓ 2.



✗ 3.



✗ 4.



Question ID : 264330130776

Option 1 ID : 264330512218

Option 2 ID : 264330512217

Option 3 ID : 264330512216

Option 4 ID : 264330512215

Status : Answered

Chosen Option : 2



Q.38 Seven people, A, B, C, D, E, F and G, are sitting in a straight row, facing north (not necessarily in the same order). Only 2 people sit to the right of D. G is an immediate neighbour of D. Only 3 people sit between A and G. Only 2 people sit between B and C. E is not an immediate neighbour of C. F sits to the immediate right of G. How many people sit between E and D?

- Ans
- 1. 0
  - 2. 1
  - 3. 3
  - 4. 2

Question ID : 264330145409

Option 1 ID : 264330569891

Option 2 ID : 264330569892

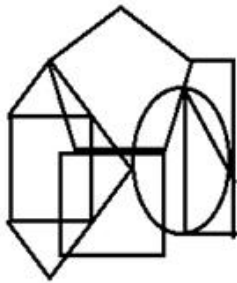
Option 3 ID : 264330569894

Option 4 ID : 264330569893





Status : Answered

Chosen Option : 2

Q.39 Select the option figure which is embedded in the given figure as its part (rotation is NOT allowed).



Ans

- 1. 
- 2. 
- 3. 
- 4. 

Question ID : 264330145463

Option 1 ID : 264330570110

Option 2 ID : 264330570108

Option 3 ID : 264330570107

Option 4 ID : 264330570109

Status : Answered

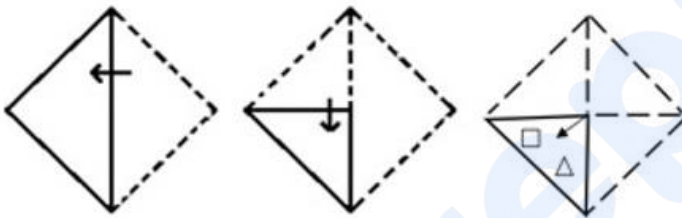
Chosen Option : 4

**Q.40** B is west of E. A is north-west of B. F is north-east of B. D is south-east of F, such that F is north-west of E and D is south-east of E as well. If C is south-west of E, what is the position of A with respect to E? (All positions are arranged in GRID pattern)

- Ans**
- 1. South-east
  - 2. North-east
  - 3. South-west
  - 4. North-west

Question ID : 26433068364  
 Option 1 ID : 264330267968  
 Option 2 ID : 264330267971  
 Option 3 ID : 264330267970  
 Option 4 ID : 264330267969  
 Status : Answered  
 Chosen Option : 4

**Q.41** A paper is folded and cut as shown. How will it appear when unfolded?



**Ans**

- 1.
- 2.
- 3.
- 4.

Question ID : 26433068732  
 Option 1 ID : 264330269443  
 Option 2 ID : 264330269440  
 Option 3 ID : 264330269441  
 Option 4 ID : 264330269442  
 Status : Answered  
 Chosen Option : 4

Q.42 In a certain code language, 'ASIA' is written as 'ZHRZ' and 'IRELAND' is written as 'RIVOZMW'. How will 'NORWAY' be written in that language?

- Ans
- 1. NLISZB
  - 2. MLIDZB
  - 3. NJIDZB
  - 4. MJIDZB

Question ID : 26433079050  
 Option 1 ID : 264330310207  
 Option 2 ID : 264330310205  
 Option 3 ID : 264330310204  
 Option 4 ID : 264330310206  
 Status : Answered  
 Chosen Option : 2

Q.43 If '+' means '-', '-' means 'x', 'x' means '+', '+' means '+', then what will come in place of the question mark (?) in the following equation?  
 $61 \div 9 \times 3 - 8 + 5 = ?$

- Ans
- 1. 80
  - 2. 75
  - 3. 89
  - 4. 72

Question ID : 264330126055  
 Option 1 ID : 264330493894  
 Option 2 ID : 264330493895  
 Option 3 ID : 264330493893  
 Option 4 ID : 264330493892  
 Status : Answered  
 Chosen Option : 1

Q.44 Given below are two statements and two conclusions. Take the statements to be true even if they are at variance with commonly known facts, and decide whether the conclusion(s) follow(s) the given statements.

Statements:

Some rats are mats.

All mats are ants.

Conclusions:

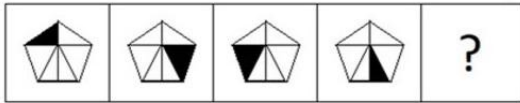
I. Some rats are ants.

II. Some ants are mats.

- Ans
- 1. Both the conclusions follow
  - 2. Neither conclusion I nor II follows
  - 3. Only conclusion II follows
  - 4. Only conclusion I follows

Question ID : 26433056645  
 Option 1 ID : 264330221566  
 Option 2 ID : 264330221567  
 Option 3 ID : 264330221565  
 Option 4 ID : 264330221564  
 Status : Answered  
 Chosen Option : 1

**Q.45** Select the figure from among the given options that can replace the question mark (?) in the following series.



Ans

✗ 1.



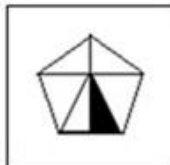
✓ 2.



✗ 3.



✗ 4.



Question ID : 26433087166

Option 1 ID : 264330342303

Option 2 ID : 264330342304

Option 3 ID : 264330342301

Option 4 ID : 264330342302

Status : Answered

Chosen Option : 2

**Q.46** Which two signs should be interchanged to make the given equation correct?

$$114 \div 85 + 5 \times 4 - 33 = 149$$

Ans ✓ 1. ÷ and +

✗ 2. ÷ and -

✗ 3. + and ×

✗ 4. - and +

Question ID : 264330129523

Option 1 ID : 264330507459

Option 2 ID : 264330507458

Option 3 ID : 264330507461

Option 4 ID : 264330507460

Status : Answered

Chosen Option : 1

Q.47 In a certain code language, 'good morning' is coded as 'mu du', 'early morning tea' is coded as 'du tu se', 'tea is early' is coded as 'se re tu'. What is the code for the word 'is'?

- Ans
- 1. mu
  - 2. tu
  - 3. du
  - 4. re

Question ID : 26433074766  
 Option 1 ID : 264330293154  
 Option 2 ID : 264330293155  
 Option 3 ID : 264330293152  
 Option 4 ID : 264330293153

Status : Answered

Chosen Option : 4

Q.48 Select the option that represents the correct order of the given words as they would appear in an English dictionary?

- 1.Voice
- 2.Vocalist
- 3.Vivisection
- 4.Void
- 5.Vogue

- Ans
- 1. 3, 2, 5, 1, 4
  - 2. 5, 2, 3, 1, 4
  - 3. 2, 3, 5, 1, 4
  - 4. 4, 2, 3, 1, 5

Question ID : 26433067244  
 Option 1 ID : 264330263489  
 Option 2 ID : 264330263488  
 Option 3 ID : 264330263490  
 Option 4 ID : 264330263491

Status : Answered

Chosen Option : 1

Q.49 'A ? B' means 'A is the son of B'.  
 'A \$ B' means 'A is the daughter of B'.  
 'A \* B' means 'A is the brother of B'.  
 'A = B' means 'A is the father of B'.  
 If H \$ Q \* Y \* N, then how is Y related to H?

- Ans
- 1. Father
  - 2. Brother
  - 3. Father's brother
  - 4. Father's father

Question ID : 264330145388  
 Option 1 ID : 264330569807  
 Option 2 ID : 264330569809  
 Option 3 ID : 264330569810  
 Option 4 ID : 264330569808

Status : Answered

Chosen Option : 3

**Q.50** Select the option that is related to the third word in the same way as the second word is related to the first word. (The words must be considered as meaningful words and must not be related to each other based on the number of letters/number of consonants/vowels in the word.)  
Wrestling : Arena :: Ice-Skating : ?

- Ans
- 1. Track
  - 2. Rink
  - 3. Stadium
  - 4. Ground

Question ID : 26433091601  
Option 1 ID : 264330359771  
Option 2 ID : 264330359770  
Option 3 ID : 264330359772  
Option 4 ID : 264330359769  
Status : Answered  
Chosen Option : 2

Section : General Knowledge and General Awareness

**Q.1** The Karewa formations are found in the \_\_\_\_\_.

- Ans
- 1. North Eastern Hills
  - 2. Terai Region
  - 3. Uttaranchal Himalayas
  - 4. Kashmir Himalayas

Question ID : 264330119795  
Option 1 ID : 264330469458  
Option 2 ID : 264330469457  
Option 3 ID : 264330469456  
Option 4 ID : 264330469455  
Status : Not Answered  
Chosen Option : --

**Q.2** In which part of the Constitution are fundamental duties added?

- Ans
- 1. Part III-B
  - 2. Part II-B
  - 3. Part I-A
  - 4. Part IV-A

Question ID : 264330116390  
Option 1 ID : 264330457647  
Option 2 ID : 264330457646  
Option 3 ID : 264330457645  
Option 4 ID : 264330457648  
Status : Answered  
Chosen Option : 4

**Q.3** Who among the following applied European theatrical techniques to Indian Classical dance with folk and tribal dance?

- Ans**  1. Guru Bipin Singh  
 2. Uday Shankar  
 3. Birju Maharaj  
 4. Kelucharan Mohapatra

Question ID : 264330145163  
Option 1 ID : 264330568910  
Option 2 ID : 264330568909  
Option 3 ID : 264330568908  
Option 4 ID : 264330568907  
Status : Answered  
Chosen Option : 2

**Q.4** Ravana Phadi cave and Durga Temple at Aihole portray the architectural style of which dynasty?

- Ans**  1. Chalukya  
 2. Pallava  
 3. Hoysala  
 4. Vijaynagara

Question ID : 264330141826  
Option 1 ID : 264330555623  
Option 2 ID : 264330555625  
Option 3 ID : 264330555624  
Option 4 ID : 264330555626  
Status : Not Answered  
Chosen Option : --

**Q.5** Read the given statements and select the correct option.

- i) The Governor is the real head of the State Government.  
ii) The Chief Minister plays a key role in framing the laws and policies of the state government.  
iii) Governor of a State is appointed by the President.

- Ans**  1. Both i and ii  
 2. Only ii  
 3. Both ii and iii  
 4. Only i

Question ID : 264330158695  
Option 1 ID : 264330622141  
Option 2 ID : 264330622140  
Option 3 ID : 264330622142  
Option 4 ID : 264330622139  
Status : Answered  
Chosen Option : 3

**Q.6** What do you call the drugs that bind to the receptor site and inhibit its natural function?

- Ans**  1. Antagonists  
 2. Depressants  
 3. Antidepressants  
 4. Agonist

Question ID : **264330145208**  
Option 1 ID : **264330569088**  
Option 2 ID : **264330569087**  
Option 3 ID : **264330569090**  
Option 4 ID : **264330569089**  
Status : **Not Answered**  
Chosen Option : --

**Q.7** What is the dimension of the kabaddi play field for men?

- Ans**  1. 14 m × 10 m  
 2. 14 m × 8 m  
 3. 12.50 m × 10 m  
 4. 13 m × 10 m

Question ID : **264330118471**  
Option 1 ID : **264330465288**  
Option 2 ID : **264330465287**  
Option 3 ID : **264330465285**  
Option 4 ID : **264330465286**  
Status : **Answered**  
Chosen Option : 2

**Q.8** In Which year did the Ministry of Health and Family Welfare of India launch the Weekly Iron and Folic Acid Supplementation (WIFS) program to meet the challenge of high prevalence and incidence of anaemia among adolescent girls and boys (56% girls and 30% boys)?

- Ans**  1. 2013  
 2. 2011  
 3. 2014  
 4. 2012

Question ID : **264330145199**  
Option 1 ID : **264330569053**  
Option 2 ID : **264330569051**  
Option 3 ID : **264330569054**  
Option 4 ID : **264330569052**  
Status : **Not Answered**  
Chosen Option : --



**Q.9** Who among the following was the successor of Mughal emperor Shahjahan to the throne?

- Ans**  1. Shah Shuja  
 2. Aurangzeb  
 3. Murad Bakhsh  
 4. Dara Shikoh

Question ID : 26433054201  
Option 1 ID : 264330211789  
Option 2 ID : 264330211791  
Option 3 ID : 264330211788  
Option 4 ID : 264330211790  
Status : Answered  
Chosen Option : 4

**Q.10** Who is the ex-officio Chairman of the Rajya Sabha?

- Ans**  1. Vice President  
 2. Prime Minister  
 3. President  
 4. Attorney General of India

Question ID : 264330113417  
Option 1 ID : 264330445755  
Option 2 ID : 264330445754  
Option 3 ID : 264330445753  
Option 4 ID : 264330445756  
Status : Answered  
Chosen Option : 1

**Q.11** What is the full form of RIDF?

- Ans**  1. Rural Infrastructure Development Forum  
 2. Road Infrastructure Development Fund  
 3. Rural Infrastructure Development Fund  
 4. Rural Industries Development Fund

Question ID : 264330112515  
Option 1 ID : 264330442146  
Option 2 ID : 264330442145  
Option 3 ID : 264330442148  
Option 4 ID : 264330442147  
Status : Answered  
Chosen Option : 3

**Q.12** Tansen, the music legend was a courtier in which of the following courts before coming to Akbar?

- Ans**  1. Benaras  
 2. Gandhara  
 3. Rewa  
 4. Maghad

Question ID : 264330145170  
Option 1 ID : 264330568937  
Option 2 ID : 264330568938  
Option 3 ID : 264330568936  
Option 4 ID : 264330568935  
Status : Not Answered  
Chosen Option : --

**Q.13** How many fundamental rights were provided originally by the Indian Constitution in 1950?

- Ans**  1. Seven  
 2. Six  
 3. Nine  
 4. Five

Question ID : 264330113393  
Option 1 ID : 264330445658  
Option 2 ID : 264330445657  
Option 3 ID : 264330445659  
Option 4 ID : 264330445660  
Status : Answered  
Chosen Option : 1

**Q.14** The five-year plans in India laid down not only specific objectives to be attained in the five years of a plan, but also what was to be achieved over a period of 20 years. This long-term plan is called a \_\_\_\_\_.

- Ans**  1. perspective plan  
 2. twenty-year plan  
 3. two-decade plan  
 4. perpetual plan

Question ID : 264330168853  
Option 1 ID : 264330662225  
Option 2 ID : 264330662223  
Option 3 ID : 264330662224  
Option 4 ID : 264330662226  
Status : Answered  
Chosen Option : 3

**Q.15** Who among the following is the author of the book 'On Writing: A Memoir of the Craft'?

- Ans**  1. F Scott Fitzgerald  
 2. Ernest Hemingway  
 3. Stephen King  
 4. Clive Staples Lewis

Question ID : 26433071470  
Option 1 ID : 264330280307  
Option 2 ID : 264330280306  
Option 3 ID : 264330280305  
Option 4 ID : 264330280304  
Status : Not Answered  
Chosen Option : --

Q.16 What was the target growth rate of the Indian economy in the second five-year plan?

- Ans
- 1. 6.7%
  - 2. 2.8%
  - 3. 5.4%
  - 4. 4.5%

Question ID : 264330145230  
Option 1 ID : 264330569176  
Option 2 ID : 264330569175  
Option 3 ID : 264330569178  
Option 4 ID : 264330569177  
Status : Answered  
Chosen Option : 3

Q.17 Who among the following was the first president of IOC?

- Ans
- 1. Lord Killanin
  - 2. Pierre, Baron de Coubertin
  - 3. Demetrius Vikelas
  - 4. Avery Brundage

Question ID : 26433059387  
Option 1 ID : 264330232417  
Option 2 ID : 264330232416  
Option 3 ID : 264330232418  
Option 4 ID : 264330232419  
Status : Not Answered  
Chosen Option : --

Q.18 In which process is a solid substance volatilised by heating and the vapour is condensed back to the solid at a cold surface?

- Ans
- 1. Chromatography
  - 2. Filtration
  - 3. Distillation
  - 4. Sublimation

Question ID : 264330145220  
Option 1 ID : 264330569137  
Option 2 ID : 264330569138  
Option 3 ID : 264330569136  
Option 4 ID : 264330569135  
Status : Answered  
Chosen Option : 4

Q.19 The Olympic Winter Games 2026 would be played in\_\_\_\_\_.

- Ans
- 1. Brisbane
  - 2. Los Angeles
  - 3. Milano Cortina
  - 4. Paris

Question ID : 264330109850  
Option 1 ID : 264330431680  
Option 2 ID : 264330431679  
Option 3 ID : 264330431678  
Option 4 ID : 264330431677  
Status : Answered  
Chosen Option : 3

**Q.20 Which ports belong to the western coast of India?**

- Ans  1. Kandla port, Mormugao port, Kolkata port  
 2. Kandla port, Mormugao port, Kochi port  
 3. Kandla port, Mormugao port, Chennai port  
 4. Kandla port, Haldia port, Kochi port

Question ID : 264330132716  
Option 1 ID : 264330519961  
Option 2 ID : 264330519959  
Option 3 ID : 264330519962  
Option 4 ID : 264330519960  
Status : Answered  
Chosen Option : 2

**Q.21 Who among the following was the Vice President of the Interim Government formed by Congress in 1946?**

- Ans  1. Vallabhbhai Patel  
 2. Baldev Singh  
 3. John Matthai  
 4. Jawaharlal Nehru

Question ID : 264330112356  
Option 1 ID : 264330441509  
Option 2 ID : 264330441511  
Option 3 ID : 264330441512  
Option 4 ID : 264330441510  
Status : Answered  
Chosen Option : 2

**Q.22 Which east-flowing river basin covers the states of Jharkhand, Chhattisgarh and Orissa and has a Drainage area of 39,033 sq km?**

- Ans  1. Baitarni  
 2. Brahmani  
 3. Nagavali  
 4. Sarada

Question ID : 264330131027  
Option 1 ID : 264330513222  
Option 2 ID : 264330513220  
Option 3 ID : 264330513219  
Option 4 ID : 264330513221  
Status : Not Answered  
Chosen Option : --

**Q.23 Which of the following statements is NOT true for Indian monsoons?**

- Ans  1. Monsoonal rainfall is affected by jet streams  
 2. Monsoonal rainfall is the lifeline of Indian agriculture  
 3. Himalayas play an important role in monsoonal rainfall  
 4. Monsoonal rainfall is not affected by the relief features of the country

Question ID : 264330169989  
Option 1 ID : 264330666632  
Option 2 ID : 264330666631  
Option 3 ID : 264330666634  
Option 4 ID : 264330666633  
Status : Answered  
Chosen Option : 4

Q.24 Who among the following has written the biography of Buddha, Buddhacharita?

- Ans
- 1. Vasumitra
  - 2. Charaka
  - 3. Ashvaghosha
  - 4. Nagarjuna

Question ID : 264330165578  
Option 1 ID : 264330649391  
Option 2 ID : 264330649394  
Option 3 ID : 264330649393  
Option 4 ID : 264330649392  
Status : Answered  
Chosen Option : 4

Q.25 How many fundamental rights were there at the time of adoption of the Indian Constitution?

- Ans
- 1. Seven
  - 2. Five
  - 3. Six
  - 4. Eight

Question ID : 264330111502  
Option 1 ID : 264330438095  
Option 2 ID : 264330438093  
Option 3 ID : 264330438094  
Option 4 ID : 264330438096  
Status : Answered  
Chosen Option : 1

Q.26 Linthoi Chanabam is associated with which of the following sports events?

- Ans
- 1. Cricket
  - 2. Chess
  - 3. Badminton
  - 4. Judo

Question ID : 264330109688  
Option 1 ID : 264330431030  
Option 2 ID : 264330431032  
Option 3 ID : 264330431031  
Option 4 ID : 264330431029  
Status : Answered  
Chosen Option : 4

Q.27 In 1957, who redefined a model that predicted the shape of individual molecules based on the extent of electron-pair electrostatic repulsion?

- Ans
- 1. Nyholm and Gillespie
  - 2. Heitler and London
  - 3. Staudinger and Perey
  - 4. Marcet and Pauling

Question ID : 264330165460  
Option 1 ID : 264330648922  
Option 2 ID : 264330648920  
Option 3 ID : 264330648919  
Option 4 ID : 264330648921  
Status : Not Answered  
Chosen Option : --

Q.28 In which of the following states is Bonalu festival celebrated?

- Ans  1. Jharkhand  
 2. Gujarat  
 3. Telangana  
 4. Uttar Pradesh

Question ID : 26433064691  
Option 1 ID : 264330253356  
Option 2 ID : 264330253359  
Option 3 ID : 264330253357  
Option 4 ID : 264330253358  
Status : Answered  
Chosen Option : 1

Q.29 Who among the following designed a campaign that came to be known as the 'Rowlatt Satyagraha'?

- Ans  1. Mahatma Gandhi  
 2. Feroze Shah Mehta  
 3. Mahadev Govind Ranade  
 4. Bal Gangadhar Tilak

Question ID : 264330106610  
Option 1 ID : 264330418743  
Option 2 ID : 264330418744  
Option 3 ID : 264330418742  
Option 4 ID : 264330418741  
Status : Answered  
Chosen Option : 4

Q.30 Asad Ali Khan was known for playing which of the following Indian instruments?

- Ans  1. Sitar  
 2. Tabla  
 3. Rudra Veena  
 4. Violin

Question ID : 26433074819  
Option 1 ID : 264330293366  
Option 2 ID : 264330293364  
Option 3 ID : 264330293367  
Option 4 ID : 264330293365  
Status : Answered  
Chosen Option : 1

Q.31 Recoveries of loans and advances, borrowings, are an example of \_\_\_\_\_.

- Ans  1. non-tax receipts  
 2. capital receipts  
 3. revenue receipts  
 4. tax receipts

Question ID : 264330141433  
Option 1 ID : 264330554070  
Option 2 ID : 264330554068  
Option 3 ID : 264330554067  
Option 4 ID : 264330554069  
Status : Answered  
Chosen Option : 2

Q.32 Thullal dance originated in which of the following states?

- Ans  1. Uttarakhand  
 2. Kerala  
 3. Manipur  
 4. Gujrat

Question ID : 264330164795  
Option 1 ID : 264330646307  
Option 2 ID : 264330646308  
Option 3 ID : 264330646310  
Option 4 ID : 264330646309  
Status : Answered  
Chosen Option : 2

Q.33 Which winds blow across the Asian continent at latitudes north of the Himalayas roughly parallel to the Tibetan highlands?

- Ans  1. Trade winds  
 2. Southwest winds  
 3. Jet streams  
 4. Northwest winds

Question ID : 26433064771  
Option 1 ID : 264330253679  
Option 2 ID : 264330253678  
Option 3 ID : 264330253677  
Option 4 ID : 264330253676  
Status : Answered  
Chosen Option : 1

Q.34 What is the name of the Comprehensive Household Survey providing labour force statistics in India, which was first conducted in 1955?

- Ans  1. Periodic Labour Force Survey (PLFS)  
 2. Employment-Unemployment Survey (EUS)  
 3. Quarterly Employment Survey (QES)  
 4. Area Frame Establishment Survey (AFES)

Question ID : 264330111360  
Option 1 ID : 264330437526  
Option 2 ID : 264330437528  
Option 3 ID : 264330437527  
Option 4 ID : 264330437525  
Status : Answered  
Chosen Option : 1

Q.35 During the British rule in India, which of the following Governor Generals devised the 'Doctrine of Lapse', a policy of annexation?

- Ans  1. Lord Cornwallis  
 2. Lord Canning  
 3. Warren Hastings  
 4. Lord Dalhousie

Question ID : 264330165380  
Option 1 ID : 264330648602  
Option 2 ID : 264330648601  
Option 3 ID : 264330648599  
Option 4 ID : 264330648600  
Status : Answered  
Chosen Option : 4

**Q.36** Which compound structure includes a saturated short-chain fatty acid with 4-carbon molecules, commonly found in esterified form in animal fats and plant oils?

- Ans  1. Butyric acid  
 2. Propionic acid  
 3. Succinic acid  
 4. Lactic acid

Question ID : 264330110056  
Option 1 ID : 264330432503  
Option 2 ID : 264330432502  
Option 3 ID : 264330432501  
Option 4 ID : 264330432504  
Status : Not Answered  
Chosen Option : --

**Q.37** In June \_\_\_\_\_, the Reserve Bank of India published a 'Consultative Document on Regulation of Microfinance'.

- Ans  1. 2021  
 2. 2019  
 3. 2022  
 4. 2020

Question ID : 264330145233  
Option 1 ID : 264330569189  
Option 2 ID : 264330569187  
Option 3 ID : 264330569190  
Option 4 ID : 264330569188  
Status : Not Answered  
Chosen Option : --

**Q.38** What amount of 'Seed Capital' is provided as support to a Self-Help Group under the Pradhan Mantri Formalisation of Micro Food Processing Enterprises Scheme?

- Ans  1. ₹20,000  
 2. ₹30,000  
 3. ₹50,000  
 4. ₹40,000

Question ID : 26433064563  
Option 1 ID : 264330252844  
Option 2 ID : 264330252845  
Option 3 ID : 264330252847  
Option 4 ID : 264330252846  
Status : Not Answered  
Chosen Option : --

**Q.39** The Beating Retreat ceremony is held at which of the following places?

- Ans  1. Chandni Chowk  
 2. Connaught Place  
 3. India Gate  
 4. Vijay Chowk

Question ID : 264330164811  
Option 1 ID : 264330646374  
Option 2 ID : 264330646373  
Option 3 ID : 264330646371  
Option 4 ID : 264330646372  
Status : Answered  
Chosen Option : 4



Q.40 Soparkkar and the logo of his worldwide initiative 'Dance for a Cause' are being printed on an official postage stamp issued by the \_\_\_\_\_ government.

- Ans
- 1. Bangladesh
  - 2. Sri Lanka
  - 3. Bhutan
  - 4. Nepal

Question ID : 26433054506  
Option 1 ID : 264330213010  
Option 2 ID : 264330213011  
Option 3 ID : 264330213009  
Option 4 ID : 264330213008  
Status : Not Answered  
Chosen Option : --

Q.41 Who among the following Bahmani sultans transferred his capital from Gulbarga to Bidar?

- Ans
- 1. Humayun
  - 2. Mujahid Shah
  - 3. Ahmad Shah
  - 4. Firuz Shah

Question ID : 264330109015  
Option 1 ID : 264330428340  
Option 2 ID : 264330428338  
Option 3 ID : 264330428339  
Option 4 ID : 264330428337  
Status : Not Answered  
Chosen Option : --

Q.42 In which of the following cases the Supreme Court, while laying out the 'basic structure' of the Constitution held that the democratic character of the polity was an essential component of the 'basic structure'?

- Ans
- 1. Sajjan Singh vs State of Rajasthan
  - 2. Kesavananda Bharati vs State of Kerala
  - 3. Romesh Thappar vs State of Madras
  - 4. A K Gopalan vs State of Madras

Question ID : 264330145273  
Option 1 ID : 264330569350  
Option 2 ID : 264330569347  
Option 3 ID : 264330569349  
Option 4 ID : 264330569348  
Status : Answered  
Chosen Option : 2

**Q.43** In 2015, the eminent danseuse and \_\_\_\_\_ exponent, Padma Subrahmanyam was selected for Kerala's prestigious choreography award 'Nishagandhi Puraskaram' instituted by the state tourism department.

- Ans**
- 1. Kathakali
  - 2. Sattriya
  - 3. Bharatanatyam
  - 4. Kuchipudi

Question ID : 26433054509  
Option 1 ID : 264330213021  
Option 2 ID : 264330213023  
Option 3 ID : 264330213022  
Option 4 ID : 264330213020  
Status : Answered  
Chosen Option : 1

**Q.44** What do you call the fluid matrix filling in the cell?

- Ans**
- 1. Ribosome
  - 2. Plasmid
  - 3. Cytoplasm
  - 4. Golgi bodies

Question ID : 26433064758  
Option 1 ID : 264330253624  
Option 2 ID : 264330253627  
Option 3 ID : 264330253626  
Option 4 ID : 264330253625  
Status : Answered  
Chosen Option : 1

**Q.45** 'A Grain Of Sand In The Hourglass of Time' is an autobiography of which Indian politician?

- Ans**
- 1. IK Gujral
  - 2. Arjun Singh
  - 3. Manmohan Singh
  - 4. LK Advani

Question ID : 264330145177  
Option 1 ID : 264330568965  
Option 2 ID : 264330568964  
Option 3 ID : 264330568966  
Option 4 ID : 264330568963  
Status : Answered  
Chosen Option : 2

**Q.46** Which odourless, colourless, tasteless and chemically unreactive gas was invented by Daniel Rutherford in 1772 and was independently isolated at the same time by CW Scheele and H Cavendish?

- Ans  1. Nitrogen  
 2. Argon  
 3. Fluorine  
 4. Oxygen

Question ID : 264330110057  
Option 1 ID : 264330432505  
Option 2 ID : 264330432508  
Option 3 ID : 264330432506  
Option 4 ID : 264330432507  
Status : Answered  
Chosen Option : 2

**Q.47** \_\_\_\_\_ 2005 is referred to as the 'Right to Work' as it guaranteed 100 days of employment in a year by the Indian Government to people who are in need of and who are able to do work.

- Ans  1. Mahatma Gandhi Regional Employment Guarantee Act  
 2. Mahatma Gandhi Rural Employment Act  
 3. Mahatma Gandhi National Rural Employment Guarantee Act  
 4. Mohan Gandhi Regional Guarantee Act

Question ID : 264330163259  
Option 1 ID : 264330640350  
Option 2 ID : 264330640349  
Option 3 ID : 264330640347  
Option 4 ID : 264330640348  
Status : Answered  
Chosen Option : 3

**Q.48** In which year did Albert Einstein predict a new state of matter, the Bose-Einstein condensate (BEC), based on a quantum formulation by the Indian physicist Satyendra Nath Bose?

- Ans  1. 1919  
 2. 1935  
 3. 1924  
 4. 1930

Question ID : 264330145219  
Option 1 ID : 264330569131  
Option 2 ID : 264330569134  
Option 3 ID : 264330569132  
Option 4 ID : 264330569133  
Status : Answered  
Chosen Option : 3

**Q.49** The main function of centriole is:

- Ans  1. to help plant cell for multiplication  
 2. to help cell division in animal cell  
 3. to maintain rigidity in plant cell  
 4. to maintain mineral composition in bacterial cell

Question ID : 26433082209

Option 1 ID : 264330322672

Option 2 ID : 264330322669

Option 3 ID : 264330322671

Option 4 ID : 264330322670

Status : Not Answered

Chosen Option : --

**Q.50** How many planets are terrestrial planets?

- Ans  1. 3  
 2. 6  
 3. 4  
 4. 5

Question ID : 264330113351

Option 1 ID : 264330445489

Option 2 ID : 264330445492

Option 3 ID : 264330445490

Option 4 ID : 264330445491

Status : Answered

Chosen Option : 3

Section : Quantitative Aptitude

**Q.1** The total surface area of a square-based right pyramid is  $1536 \text{ m}^2$ , of which 37.5% is the area of the base of the pyramid. What is the volume (in  $\text{m}^3$ ) of this pyramid?

- Ans  1. 3048  
 2. 3072  
 3. 3144  
 4. 3108

Question ID : 264330122882

Option 1 ID : 264330481596

Option 2 ID : 264330481598

Option 3 ID : 264330481597

Option 4 ID : 264330481595

Status : Not Answered

Chosen Option : --

Q.2 If  $\sin A + \sin^2 A = 1$ , then the value of  $\cos^4 A + \cos^6 A$  is:

- Ans
- 1.  $\cos A$
  - 2.  $\sin A$
  - 3. 1
  - 4. 0

Question ID : 264330157757  
Option 1 ID : 264330618388  
Option 2 ID : 264330618387  
Option 3 ID : 264330618389  
Option 4 ID : 264330618390  
Status : Not Answered  
Chosen Option : --

Q.3 The radius of a circle is 1.75 cm. What is the circumference of the circle?

(Take  $\pi = \frac{22}{7}$ )

- Ans
- 1. 5.5 cm
  - 2. 11 cm
  - 3. 9.63 cm
  - 4. 22 cm

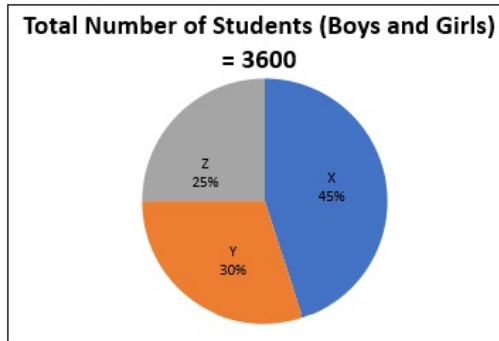
Question ID : 264330165442  
Option 1 ID : 264330648848  
Option 2 ID : 264330648847  
Option 3 ID : 264330648850  
Option 4 ID : 264330648849  
Status : Answered  
Chosen Option : 2

Q.4 Let the HCF of  $m$  and  $n$  be 'a' and let  $n = ab$ , LCM of  $m$  and  $n$  is given by:

- Ans
- 1.  $bm$
  - 2.  $am$
  - 3.  $ab$
  - 4.  $mn$

Question ID : 264330145031  
Option 1 ID : 264330568380  
Option 2 ID : 264330568379  
Option 3 ID : 264330568381  
Option 4 ID : 264330568382  
Status : Answered  
Chosen Option : 2

- Q.5** Study the given pie-chart and answer the question that follows.  
The pie-chart shows the number of students (boys and girls) studying in standard 10 of various schools (X, Y, Z in the year 2022).



What is the difference between the total number of students (boys and girls) in school Y and Z together and the total number of students (boys and girls) in school X and Y together?

- Ans**  1. 720  
 2. 840  
 3. 780  
 4. 820

Question ID : **264330158277**

Option 1 ID : **264330620470**

Option 2 ID : **264330620467**

Option 3 ID : **264330620469**

Option 4 ID : **264330620468**

Status : **Answered**

Chosen Option : **1**

- Q.6** The radius of the base of a right circular cone is 5 cm. Its slant height is 13 cm.  
What is its volume (in  $\text{cm}^3$ , rounded off to 1 decimal place)? (Take  $\pi = \frac{22}{7}$ )

- Ans**  1. 328.6  
 2. 323.4  
 3. 314.3  
 4. 340.5

Question ID : **264330145116**

Option 1 ID : **264330568720**

Option 2 ID : **264330568721**

Option 3 ID : **264330568722**

Option 4 ID : **264330568719**

Status : **Answered**

Chosen Option : **3**

Q.7 A sum of money was invested at 10% interest per year, compounded half-yearly, for 18 months. If the amount payable on maturity was ₹64,827, what was the sum invested?

- Ans  1. ₹55,600  
 2. ₹56,000  
 3. ₹56,800  
 4. ₹56,500

Question ID : 264330145055

Option 1 ID : 264330568476

Option 2 ID : 264330568475

Option 3 ID : 264330568478

Option 4 ID : 264330568477

Status : Answered

Chosen Option : 2

Q.8 Let C be a circle with centre O and radius 5 cm. Let PQ be a tangent to the circle and A be the point of tangency. Let B be a point on PQ such that the length of AB is 12 cm. If the line joining O and B intersects the circle at R, find the length of BR (in cm).

- Ans  1. 2  
 2. 13  
 3. 6  
 4. 8

Question ID : 264330165413

Option 1 ID : 264330648731

Option 2 ID : 264330648732

Option 3 ID : 264330648734

Option 4 ID : 264330648733

Status : Answered

Chosen Option : 4

Q.9 The value of  $1\frac{2}{5} - \left[ 3\frac{3}{4} \div \left\{ 1\frac{1}{4} \div \frac{1}{2} \left( 1\frac{1}{2} \times 3\frac{1}{3} \div 1\frac{1}{3} \right) \right\} \right]$  is:

- Ans  1. 3  
 2. 0  
 3. 2  
 4. 1

Question ID : 264330165154

Option 1 ID : 264330647718

Option 2 ID : 264330647717

Option 3 ID : 264330647715

Option 4 ID : 264330647716

Status : Answered

Chosen Option : 4

Q.10 When A alone does a piece of work, he takes 25 days more than the time taken by A and B to do the work together. On the other hand, B alone takes 16 days more than the time taken by A and B to do the work together. How many days will A and B, working together, take to do the work?

- Ans  1. 24  
 2. 20  
 3. 23  
 4. 22

Question ID : 264330131527  
Option 1 ID : 264330515211  
Option 2 ID : 264330515214  
Option 3 ID : 264330515212  
Option 4 ID : 264330515213  
Status : Answered  
Chosen Option : 2

Q.11 In what proportion should a grocer mix wheat at ₹12 per kg and ₹25 per kg so as to make a mixture of worth ₹20 per kg?

- Ans  1. 8 : 3  
 2. 3 : 5  
 3. 5 : 8  
 4. 5 : 7

Question ID : 264330104488  
Option 1 ID : 264330410255  
Option 2 ID : 264330410253  
Option 3 ID : 264330410254  
Option 4 ID : 264330410256  
Status : Answered  
Chosen Option : 3

Q.12 Find the mean proportional between 32 and 162.

- Ans  1. 99  
 2. 65  
 3. 72  
 4. 97

Question ID : 264330103970  
Option 1 ID : 264330408184  
Option 2 ID : 264330408182  
Option 3 ID : 264330408183  
Option 4 ID : 264330408181  
Status : Answered  
Chosen Option : 3



Q.13 Rakhi purchased a basket, a wallet and a belt. She got discounts of 5%, 8% and 10% on the basket, the wallet and the belt, respectively, on their respective marked prices of ₹80, ₹150 and ₹350. How much amount (in ₹) did she pay in total?

Ans  1. 529

2. 51

3. 580

4. 519

Question ID : 264330105972

Option 1 ID : 264330416192

Option 2 ID : 264330416190

Option 3 ID : 264330416189

Option 4 ID : 264330416191

Status : Answered

Chosen Option : 1

Q.14 In  $\Delta ABC$ ,  $\angle B = 90^\circ$  and  $AB : BC = 1 : 2$ . The value of  $\cos A + \tan C$  is:

Ans  1.  $\frac{5+\sqrt{5}}{2\sqrt{5}}$

2.  $\frac{1+\sqrt{5}}{2\sqrt{5}}$

3.  $\frac{2\sqrt{5}}{2+\sqrt{5}}$

4.  $\frac{2+\sqrt{5}}{2\sqrt{5}}$

Question ID : 264330145131

Option 1 ID : 264330568780

Option 2 ID : 264330568781

Option 3 ID : 264330568779

Option 4 ID : 264330568782

Status : Not Answered

Chosen Option : --

Q.15 The product of two numbers is 20000. If their LCM is 800, then what is their HCF?

Ans  1. 25

2. 30

3. 35

4. 20

Question ID : 26433073069

Option 1 ID : 264330286470

Option 2 ID : 264330286469

Option 3 ID : 264330286471

Option 4 ID : 264330286468

Status : Answered

Chosen Option : 4

Q.16 If  $a + \frac{1}{a} = 3$ , then the value of  $a^4 + \frac{1}{a^4}$  is:

- Ans
- 1. 48
  - 2. 81
  - 3. 27
  - 4. 47

Question ID : 264330157776

Option 1 ID : 264330618464

Option 2 ID : 264330618463

Option 3 ID : 264330618466

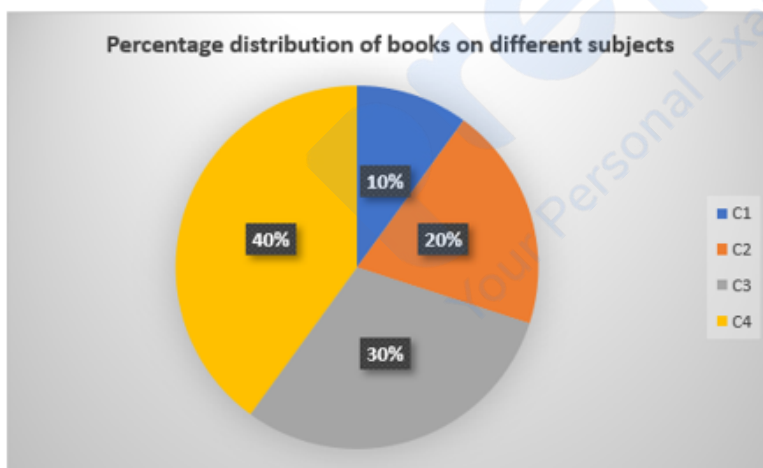
Option 4 ID : 264330618465

Status : Answered

Chosen Option : 4

Q.17 Study the given graph and answer the question that follows.

The given graph represents the percentage of books on different subjects that a person has in his library.



If the total number of books is 60, then what is the ratio of the number of books on subject C1 to the average number of books per subject?

- Ans
- 1. 3 : 7
  - 2. 2 : 3
  - 3. 3 : 5
  - 4. 2 : 5

Question ID : 264330157066

Option 1 ID : 264330615638

Option 2 ID : 264330615636

Option 3 ID : 264330615637

Option 4 ID : 264330615635

Status : Answered

Chosen Option : 2

Q.18 Find the value of  $\frac{\cos 37^\circ}{\sin 53^\circ} - \cos 47^\circ \operatorname{cosec} 43^\circ$ .

- Ans  1. 0  
 2. -1  
 3. 2  
 4. 1

Question ID : 264330158293  
 Option 1 ID : 264330620533  
 Option 2 ID : 264330620534  
 Option 3 ID : 264330620531  
 Option 4 ID : 264330620532  
 Status : Not Answered  
 Chosen Option : --

Q.19 The volume of a sphere is given by  $130977 \text{ cm}^3$ . Its surface area (in  $\text{cm}^2$ ) is:

- Ans  1. 16847  
 2. 12474  
 3. 17424  
 4. 14274

Question ID : 264330145111  
 Option 1 ID : 264330568701  
 Option 2 ID : 264330568702  
 Option 3 ID : 264330568700  
 Option 4 ID : 264330568699  
 Status : Answered  
 Chosen Option : 2

Q.20 The speed of a boat in standing water is 6 km/h and the speed of the stream is 2.5 km/h. A man rows to a place at a distance of 59.5 kilometres and comes back to the starting point. The total time taken by him is:

- Ans  1. 16 hours  
 2. 24 hours  
 3. 22 hours  
 4. 18 hours

Question ID : 264330103627  
 Option 1 ID : 264330406813  
 Option 2 ID : 264330406816  
 Option 3 ID : 264330406815  
 Option 4 ID : 264330406814  
 Status : Answered  
 Chosen Option : 2

Q.21 The table below shows the number of students commuting to school by different modes of transport:

Modes of transport	School bus	Bicycle	Walking	Other vehicles
No. of boys	80	280	130	200
No. of girls	140	190	90	250

Which mode of transport is used by maximum number of students?

- Ans
- 1. Bicycle
  - 2. Walking
  - 3. Other vehicles
  - 4. School bus

Question ID : 264330165073

Option 1 ID : 264330647420

Option 2 ID : 264330647421

Option 3 ID : 264330647422

Option 4 ID : 264330647419

Status : Answered

Chosen Option : 1

Q.22 A boat covers a distance of 72 km downstream in 6 hours, while it takes 12 hours to cover the same distance upstream. What is the speed of the boat in still water?

- Ans
- 1. 6 km/h
  - 2. 9 km/h
  - 3. 10 km/h
  - 4. 8 km/h

Question ID : 264330145097

Option 1 ID : 264330568644

Option 2 ID : 264330568646

Option 3 ID : 264330568645

Option 4 ID : 264330568643

Status : Answered

Chosen Option : 2

Q.23

Simplify:  $5\frac{1}{3} - \left\{4\frac{1}{3} + \left(3\frac{1}{3} \div 2\frac{1}{3} - \frac{1}{3}\right)\right\}$

- Ans
- 1.  $\frac{2}{3}$
  - 2.  $\frac{1}{3}$
  - 3.  $-\frac{1}{3}$
  - 4.  $-\frac{2}{3}$

Question ID : 26433074218

Option 1 ID : 264330290993

Option 2 ID : 264330290995

Option 3 ID : 264330290994

Option 4 ID : 264330290992

Status : Answered

Chosen Option : 4

Q.24

Simplify  $\frac{1 - \frac{3}{7} \div \frac{9}{49} \times \frac{3}{14}}{1 + \frac{3}{5} \div \frac{1}{25} \times \frac{1}{30}}$ .

Ans

1.  $\frac{1}{7}$

2.  $\frac{1}{6}$

3.  $\frac{1}{3}$

4.  $\frac{1}{5}$

Question ID : 26433074445

Option 1 ID : 264330291869

Option 2 ID : 264330291870

Option 3 ID : 264330291871

Option 4 ID : 264330291868

Status : Answered

Chosen Option : 3

Q.25 In an election between two candidates, 80% of the voters cast their votes, out of which 5% votes were declared invalid. A candidate got 9500 votes which were 80% of the valid votes. Find the total number of voters enrolled in that election.

Ans  1. 14780 2. 15100 3. 15625 4. 16100

Question ID : 264330158382

Option 1 ID : 264330620887

Option 2 ID : 264330620888

Option 3 ID : 264330620889

Option 4 ID : 264330620890

Status : Answered

Chosen Option : 4

Q.26 An inlet pipe can fill an empty tank in 3.6 hours, while an outlet pipe can drain a completely-filled tank in 6.3 hours. If both the pipes are opened simultaneously when the tank is empty, in how many hours will the tank get completely filled?

Ans  1. 9.0 2. 8.4 3. 8.1 4. 8.7

Question ID : 264330103286

Option 1 ID : 264330405452

Option 2 ID : 264330405450

Option 3 ID : 264330405449

Option 4 ID : 264330405451

Status : Answered

Chosen Option : 2

**Q.27** Avi sold a house to Bhargav at a gain of 10% and Bhargav sold it to Chetan at a gain of 20%. If Chetan paid ₹2,64,00,000 for it, then at what price must Avi have purchased it?

- Ans**  1. ₹2,00,00,000  
 2. ₹2,30,00,000  
 3. ₹2,50,00,000  
 4. ₹1,75,00,000

Question ID : 264330126573

Option 1 ID : 264330495967

Option 2 ID : 264330495966

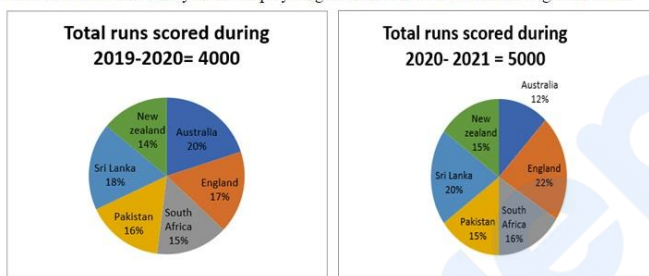
Option 3 ID : 264330495964

Option 4 ID : 264330495965

Status : Answered

Chosen Option : 1

**Q.28** The pie chart 1 given below shows the runs scored by a player against 6 different countries during 2019-2020. Pie chart 2 shows the runs scored by the same player against the same 6 countries during 2020-2021.



Find the difference between the total runs scored against New Zealand and Pakistan during 2019-2020 and the total runs scored against Sri Lanka and Pakistan during 2020-2021.

- Ans**  1. 500  
 2. 600  
 3. 650  
 4. 550

Question ID : 264330158400

Option 1 ID : 264330620960

Option 2 ID : 264330620961

Option 3 ID : 264330620962

Option 4 ID : 264330620959

Status : Answered

Chosen Option : 4

**Q.29** Find the total surface area of a sphere whose volume is  $\frac{256}{3} \pi \text{ cm}^3$ .

- Ans**  1.  $48 \pi \text{ cm}^2$   
 2.  $64 \pi \text{ cm}^2$   
 3.  $38 \pi \text{ cm}^2$   
 4.  $56 \pi \text{ cm}^2$

Question ID : 264330103635

Option 1 ID : 264330406847

Option 2 ID : 264330406845

Option 3 ID : 264330406848

Option 4 ID : 264330406846

Status : Answered

Chosen Option : 2

Q.30 If  $k(\tan 45^\circ \sin 60^\circ) = \cos 60^\circ \cot 30^\circ$ , then the value of k is:

- Ans  1. 1  
 2. 2  
 3.  $\frac{1}{\sqrt{3}}$   
 4.  $\sqrt{3}$

Question ID : 264330157746  
Option 1 ID : 264330618343  
Option 2 ID : 264330618346  
Option 3 ID : 264330618345  
Option 4 ID : 264330618344  
Status : Not Answered  
Chosen Option : --

Q.31 An inspector is 288 metres behind a thief. The inspector runs 42 metres and the thief runs 30 metres in a minute. In how much time will the inspector catch the thief?

- Ans  1. 24 minutes  
 2. 19 minutes  
 3. 21 minutes  
 4. 20 minutes

Question ID : 264330145067  
Option 1 ID : 264330568526  
Option 2 ID : 264330568523  
Option 3 ID : 264330568524  
Option 4 ID : 264330568525  
Status : Answered  
Chosen Option : 1

Q.32 Three boys, on an average, are 25 years old, and their age are in the ratio of 3 : 5 : 7. What is the age of youngest boy?

- Ans  1. 24 years  
 2. 21 years  
 3. 12 years  
 4. 15 years

Question ID : 264330145048  
Option 1 ID : 264330568450  
Option 2 ID : 264330568449  
Option 3 ID : 264330568447  
Option 4 ID : 264330568448  
Status : Answered  
Chosen Option : 4

Q.33 Two numbers are in the ratio 12:7. If their HCF is 25, find the numbers.

Ans  1. 225, 135

2. 300, 175

3. 300, 50

4. 175, 120

Question ID : 264330102309

Option 1 ID : 264330401701

Option 2 ID : 264330401704

Option 3 ID : 264330401703

Option 4 ID : 264330401702

Status : Answered

Chosen Option : 2

Q.34 A dealer sells his goods at 10% loss on the cost price but uses 25% less weight. What is his profit percentage?

Ans  1. 35%

2. 20%

3. 25%

4. 15%

Question ID : 264330102345

Option 1 ID : 264330401847

Option 2 ID : 264330401845

Option 3 ID : 264330401848

Option 4 ID : 264330401846

Status : Answered

Chosen Option : 2

Q.35 A and B undertake a project worth ₹36,000. A alone can do the work in 25 days. They worked together for 5 days. For the next five days, B worked alone. After that, A substituted B and completed the remaining work in 5 days. The share of A in the earnings is:

Ans  1. ₹14,400

2. ₹21,400

3. ₹14,600

4. ₹21,600

Question ID : 26433087395

Option 1 ID : 264330343217

Option 2 ID : 264330343220

Option 3 ID : 264330343219

Option 4 ID : 264330343218

Status : Answered

Chosen Option : 4



**Q.36** A shopkeeper has a sale of ₹5,445, ₹5,937, ₹5,865 and ₹6,562 for 4 consecutive days. If he gets an average sale of ₹6,050 for 5 days, then his sale on the fifth day is:

- Ans  1. ₹6,131  
 2. ₹6,341  
 3. ₹6,441  
 4. ₹6,231

Question ID : 264330165479  
Option 1 ID : 264330648995  
Option 2 ID : 264330648997  
Option 3 ID : 264330648998  
Option 4 ID : 264330648996  
Status : Answered  
Chosen Option : 3

**Q.37** Study the given table and answer the question that follows.  
The data given in the table is for the month of December 2022.

Company	Total number of employees	Number of female employees
P	4560	2210
Q	4258	1650
R	3052	1280
S	4350	1920

What is the difference between the number of male employees in company P and that in company R?

- Ans  1. 592  
 2. 578  
 3. 605  
 4. 580

Question ID : 264330165502  
Option 1 ID : 264330649089  
Option 2 ID : 264330649087  
Option 3 ID : 264330649090  
Option 4 ID : 264330649088  
Status : Answered  
Chosen Option : 2

**Q.38** The following table shows the mobile-addicted population of four different cities Hyderabad, Mumbai, Chennai, and Pune, and the ratio of males to females among them.

City	Mobile-Addicted population	Male : Female
Hyderabad	2,20,000	7 : 8
Mumbai	3,50,000	12 : 13
Chennai	2,00,000	11 : 9
Pune	1,50,000	9 : 11

Find the total number of addicted males in Chennai.

- Ans  1. 1,10,000  
 2. 80,000  
 3. 1,00,000  
 4. 1,20,000

Question ID : 264330167242  
Option 1 ID : 264330655964  
Option 2 ID : 264330655966  
Option 3 ID : 264330655963  
Option 4 ID : 264330655965  
Status : Answered  
Chosen Option : 1

Q.39 A company is manufacturing boxes of three types – plastic, wood and glass. The ratio of the numbers of plastic, wood and glass boxes is 2 : 3 : 5. The difference between the numbers of wood and glass boxes is 144. If the number of plastic boxes is increased by 25%, then what will be the number of plastic boxes now?

- Ans
- 1. 144
  - 2. 360
  - 3. 216
  - 4. 180

Question ID : 264330103318  
Option 1 ID : 264330405577  
Option 2 ID : 264330405580  
Option 3 ID : 264330405579  
Option 4 ID : 264330405578  
Status : Answered  
Chosen Option : 4

Q.40 The fraction equivalent to  $\frac{1}{5}\%$  is:

- Ans
- 1.  $\frac{1}{125}$
  - 2.  $\frac{1}{200}$
  - 3.  $\frac{1}{40}$
  - 4.  $\frac{1}{500}$

Question ID : 264330145076  
Option 1 ID : 264330568560  
Option 2 ID : 264330568561  
Option 3 ID : 264330568559  
Option 4 ID : 264330568562  
Status : Answered  
Chosen Option : 4

Q.41 After deducting a commission of 20%, a DVD set costs ₹9,080. Its marked price is:

- Ans
- 1. ₹11,200
  - 2. ₹11,350
  - 3. ₹10,000
  - 4. ₹10,100

Question ID : 264330130930  
Option 1 ID : 264330512832  
Option 2 ID : 264330512834  
Option 3 ID : 264330512831  
Option 4 ID : 264330512833  
Status : Answered  
Chosen Option : 2

**Q.42** Anandi bought a smart watch from an electronic store for Rs.4,400. Since she had less money, she paid Rs.2,000 for down payment and the shopkeeper offered her an alternative to pay Rs.2,440 after 1 month. Find the rate of interest being charged at simple interest by the shopkeeper in this instalment option?

- Ans  1. 20%  
 2. 10%  
 3. 22%  
 4. 15%

Question ID : 26433063338  
 Option 1 ID : 264330248005  
 Option 2 ID : 264330248006  
 Option 3 ID : 264330248007  
 Option 4 ID : 264330248004  
 Status : Answered  
 Chosen Option : 1

**Q.43** PQR is a triangle. The bisectors of the internal angle  $\angle Q$  and external angle  $\angle R$  intersect at S. If  $\angle QSR = 40^\circ$ , then  $\angle P$  is:

- Ans  1.  $40^\circ$   
 2.  $60^\circ$   
 3.  $80^\circ$   
 4.  $30^\circ$

Question ID : 264330165660  
 Option 1 ID : 264330649720  
 Option 2 ID : 264330649721  
 Option 3 ID : 264330649722  
 Option 4 ID : 264330649719  
 Status : Answered  
 Chosen Option : 3

**Q.44** If  $x^4 + y^4 = x^2y^2$ , then the value of  $x^6 + y^6$  is:

- Ans  1. 2  
 2. 0  
 3. 1  
 4. 3

Question ID : 264330157762  
 Option 1 ID : 264330618409  
 Option 2 ID : 264330618407  
 Option 3 ID : 264330618408  
 Option 4 ID : 264330618410  
 Status : Answered  
 Chosen Option : 1

Q.45 The given table shows the number of students from 4 schools during 2022-2023.

Schools	Total no. of students	Boys	Girls
A	2060	1339	721
B	1880	1034	846
C	2200	990	1210
D	1680	924	756

What is the percentage of girls in school B?

- Ans
- 1. 65%
  - 2. 45%
  - 3. 60%
  - 4. 55%

Question ID : 264330165489

Option 1 ID : 264330649038

Option 2 ID : 264330649035

Option 3 ID : 264330649037

Option 4 ID : 264330649036

Status : Answered

Chosen Option : 2

Q.46 E, F, G, and H are four points lying on the circumference of a circle to make a cyclic quadrilateral. If  $\angle FGH = 57^\circ$ , then what will be the measure of the  $\angle HEF$ ?

- Ans
- 1.  $33^\circ$
  - 2.  $123^\circ$
  - 3.  $93^\circ$
  - 4.  $143^\circ$

Question ID : 264330165694

Option 1 ID : 264330649855

Option 2 ID : 264330649857

Option 3 ID : 264330649856

Option 4 ID : 264330649858

Status : Answered

Chosen Option : 2

Q.47 The square root of  $\left(\frac{1}{4}\right) \times \left(\frac{1}{9}\right) \times \left(\frac{1}{25}\right) \times \left(\frac{1}{49}\right) \div \left(\frac{36}{121}\right)$  is:

- Ans
- 1.  $\frac{11}{1260}$
  - 2.  $\frac{1260}{11}$
  - 3.  $\frac{11}{12.60}$
  - 4.  $\frac{1}{1260}$

Question ID : 26433063987

Option 1 ID : 264330250540

Option 2 ID : 264330250542

Option 3 ID : 264330250543

Option 4 ID : 264330250541

Status : Answered

Chosen Option : 1

**Q.48** If the radius of a hemispherical balloon increases from 4 cm to 7 cm as air is pumped into it, find the ratio of the surface area of the new balloon to its original.

- Ans  1. 16 : 21  
 2. 49 : 16  
 3. 20 : 49  
 4. 21 : 12

Question ID : 264330103638

Option 1 ID : 264330406860

Option 2 ID : 264330406857

Option 3 ID : 264330406859

Option 4 ID : 264330406858

Status : Answered

Chosen Option : 2

**Q.49** The sales of batteries (in lakhs) manufactured by a company over the years are shown in the given table.

YEAR	TYPES OF BATTERIES					
	4AH	7AH	32AH	35AH	55AH	Total
1992	75	144	114	102	108	543
1993	90	126	102	84	126	528
1994	96	114	75	105	135	525
1995	105	90	150	90	75	510
1996	90	75	135	75	90	465
1997	105	60	165	45	120	495
1998	115	85	160	100	145	605

Which type of battery had the highest total sales over the last seven years?

- Ans  1. 32 AH  
 2. 35 AH  
 3. 4 AH  
 4. 55 AH

Question ID : 264330145025

Option 1 ID : 264330568356

Option 2 ID : 264330568357

Option 3 ID : 264330568355

Option 4 ID : 264330568358

Status : Answered

Chosen Option : 1

**Q.50** Study the given table and answer the question that follows.  
The table shows the number of students studying in 6 different classes of 6 different schools.

Schools	V	VI	VII	VIII	IX	X
P	152	160	145	156	147	144
Q	148	166	150	155	157	143
R	161	152	140	145	143	165
S	159	142	149	140	142	168
T	147	144	158	163	154	150
U	150	160	162	160	160	140
Total	917	924	904	919	903	910

Which class has the maximum number of students from all schools together?

- Ans
- 1. X
  - 2. VII
  - 3. VI
  - 4. V

Question ID : 264330157724  
 Option 1 ID : 264330618258  
 Option 2 ID : 264330618257  
 Option 3 ID : 264330618256  
 Option 4 ID : 264330618255  
 Status : Answered  
 Chosen Option : 3

Section : English Comprehension

**Q.1** Select the most appropriate synonym of the given word.

Spontaneous

- Ans
- 1. Attractive
  - 2. Exhaustive
  - 3. Instinctive
  - 4. Acquisitive

Question ID : 264330163330  
 Option 1 ID : 264330640622  
 Option 2 ID : 264330640621  
 Option 3 ID : 264330640619  
 Option 4 ID : 264330640620  
 Status : Answered  
 Chosen Option : 3

**Q.2** Some words in the following sentence have been underlined and given as options.  
Select the option that contains a spelling error.  
The rolling waves on the beach were so trainquil and soothing.

- Ans
- 1. beach
  - 2. trainquil
  - 3. soothing
  - 4. rolling

Question ID : 264330121270  
 Option 1 ID : 264330475284  
 Option 2 ID : 264330475285  
 Option 3 ID : 264330475286  
 Option 4 ID : 264330475283  
 Status : Answered  
 Chosen Option : 2

**Q.3** Parts of the following sentence have been given as options. Select the option that contains an error.

Rani was extreme upset with her results this year.

- Ans
- ✓ 1. extreme upset
  - ✗ 2. this year
  - ✗ 3. with her results
  - ✗ 4. Rani was

Question ID : 264330134123

Option 1 ID : 264330525516

Option 2 ID : 264330525518

Option 3 ID : 264330525517

Option 4 ID : 264330525515

Status : Answered

Chosen Option : 1

**Q.4** Four words have been underlined in the given sentence of which one word has a spelling error. Identify the incorrectly spelt word.

The tiger thrshed (A) against his chains (B) in the cage at the circus (C) but nobody paid him any heed (D).

- Ans
- ✓ 1. thrshed
  - ✗ 2. circus
  - ✗ 3. chains
  - ✗ 4. heed

Question ID : 264330122806

Option 1 ID : 264330481291

Option 2 ID : 264330481293

Option 3 ID : 264330481292

Option 4 ID : 264330481294

Status : Answered

Chosen Option : 1

**Q.5** Select the most appropriate meaning of the underlined idiom.

We've sent a very strong protest letter. That should make them sit up and take notice.

- Ans
- ✗ 1. Follow
  - ✗ 2. Attend
  - ✗ 3. Observe
  - ✓ 4. Consider

Question ID : 26433099070

Option 1 ID : 264330388916

Option 2 ID : 264330388915

Option 3 ID : 264330388913

Option 4 ID : 264330388914

Status : Answered

Chosen Option : 4

**Q.6** Select the most appropriate ANTONYM of the given word.

**Defunct**

- Ans  1. Stoicism  
 2. Extant  
 3. Convoluted  
 4. Redundant

Question ID : 264330163400

Option 1 ID : 264330640881

Option 2 ID : 264330640882

Option 3 ID : 264330640880

Option 4 ID : 264330640879

Status : Answered

Chosen Option : 1

**Q.7** You are preparing a speech for the upcoming function. Select a synonym for the highlighted word to make it better.  
The education system must evolve to keep pace with the rapid changes in the job market.

- Ans  1. Emanate  
 2. Censor  
 3. Demolish  
 4. Conceal

Question ID : 264330121903

Option 1 ID : 264330477768

Option 2 ID : 264330477770

Option 3 ID : 264330477767

Option 4 ID : 264330477769

Status : Answered

Chosen Option : 1

**Q.8** Select the option that will improve the underlined part of the given sentence.  
The village Seoni is located 113 km away from the capital city of MP, Bhopal.

- Ans  1. adjacent from city capital of MP, Bhopal  
 2. far from the capital city of MP, Bhopal  
 3. near from the city capital of MP, Bhopal  
 4. proximate from capital of MP, Bhopal

Question ID : 264330145290

Option 1 ID : 264330569415

Option 2 ID : 264330569418

Option 3 ID : 264330569416

Option 4 ID : 264330569417

Status : Answered

Chosen Option : 2



Q.9 Select the sentence that has a spelling error.

- A- Keeping cities clean and free of germs is particularly essential for keeping their residents healthy.  
B- Our health depends not just on our nutrition and personal hygiene but also on how we clean our cities and surroundings.  
C- The spread of various diseases is intricately linked to the deteriorating state of public health condition.  
D- The good news is that waste management, to keep cities clean, is now getting attention through the Swachh Bharat Mission.

- Ans  1. The good news is that waste management, to keep cities clean, is now getting attention through the Swachh Bharat Mission.  
 2. The spread of various diseases is intricately linked to the deteriorating state of public health condition.  
 3. Keeping cities clean and free of germs is particularly essential for keeping their residents healthy.  
 4. Our health depends not just on our nutrition and personal hygiene but also on how we clean our cities and surroundings.

Question ID : 264330141564

Option 1 ID : 264330554594

Option 2 ID : 264330554593

Option 3 ID : 264330554591

Option 4 ID : 264330554592

Status : Answered

Chosen Option : 4

Q.10 Select the most appropriate option that can substitute the underlined word in the given sentence.

The new professor is liked by his students for his amiable approach.

- Ans  1. simple  
 2. strict  
 3. academic  
 4. friendly

Question ID : 264330117217

Option 1 ID : 264330460932

Option 2 ID : 264330460929

Option 3 ID : 264330460931

Option 4 ID : 264330460930

Status : Answered

Chosen Option : 4

Q.11 Select the option that can be used as a one-word substitute for the given group of words.

Spoken or done without any previous thought or preparation

- Ans  1. Inaugural  
 2. Maiden  
 3. Extempore  
 4. Initiative

Question ID : 26433088197

Option 1 ID : 264330346381

Option 2 ID : 264330346382

Option 3 ID : 264330346384

Option 4 ID : 264330346383

Status : Answered

Chosen Option : 3

**Q.12** Select the option that can be used as a one-word substitute for the given group of words.

**A place where coins are made**

- Ans  1. Trough  
 2. Post Office  
 3. Grove  
 4. Mint

Question ID : 26433088757  
Option 1 ID : 264330348582  
Option 2 ID : 264330348583  
Option 3 ID : 264330348581  
Option 4 ID : 264330348584  
Status : Answered  
Chosen Option : 4

**Q.13** Select the most appropriate ANTONYM of the given word.  
**Vague**

- Ans  1. Elegant  
 2. Regal  
 3. Definite  
 4. Dwarf

Question ID : 264330164276  
Option 1 ID : 264330644329  
Option 2 ID : 264330644330  
Option 3 ID : 264330644327  
Option 4 ID : 264330644328  
Status : Answered  
Chosen Option : 4

**Q.14** Select the option that can be used as a one-word substitute for the given group of words.

**Something of monstrous size or power**

- Ans  1. Bulk  
 2. Amazon  
 3. Heavyweight  
 4. Behemoth

Question ID : 26433088439  
Option 1 ID : 264330347342  
Option 2 ID : 264330347341  
Option 3 ID : 264330347344  
Option 4 ID : 264330347343  
Status : Answered  
Chosen Option : 4

Q.15 Select the most appropriate idiomatic expression to fill in the blank.

Our Director took a meeting and asked us to express our views on \_\_\_\_\_ of the new HR policy.

- Ans  1. the bandwagon  
 2. the pros and cons  
 3. the hook  
 4. the ups and downs

Question ID : 26433092080  
Option 1 ID : 264330361644  
Option 2 ID : 264330361641  
Option 3 ID : 264330361643  
Option 4 ID : 264330361642  
Status : Answered  
Chosen Option : 2

Q.16 Select the most appropriate idiom that can substitute the underlined segment in the given sentence.

He got a burst of energy and started digging again.

- Ans  1. took bull by the horns  
 2. a fancy of someone  
 3. second wind  
 4. heart on the sleeve

Question ID : 264330117164  
Option 1 ID : 264330460723  
Option 2 ID : 264330460724  
Option 3 ID : 264330460721  
Option 4 ID : 264330460722  
Status : Answered  
Chosen Option : 3

Q.17 Select the most appropriate ANTONYM of the given word.  
Brave

- Ans  1. Elegant  
 2. Cordial  
 3. Cowardly  
 4. Courageous

Question ID : 264330164167  
Option 1 ID : 264330643922  
Option 2 ID : 264330643919  
Option 3 ID : 264330643921  
Option 4 ID : 264330643920  
Status : Answered  
Chosen Option : 3

Q.18 Select the most appropriate synonym of the given word.

Behold

- Ans  1. Look  
 2. Burden  
 3. Fortunate  
 4. Predict

Question ID : 264330163370  
Option 1 ID : 264330640769  
Option 2 ID : 264330640770  
Option 3 ID : 264330640768  
Option 4 ID : 264330640767  
Status : Answered  
Chosen Option : 2

Q.19 Select the most appropriate option that can substitute the underlined segment in the given sentence.

A gust of wind came abruptly and our sand castle toppled.

- Ans  1. tumbled down  
 2. ran after  
 3. turned up  
 4. blew out

Question ID : 26433099884  
Option 1 ID : 264330392127  
Option 2 ID : 264330392126  
Option 3 ID : 264330392128  
Option 4 ID : 264330392125  
Status : Answered  
Chosen Option : 1

Q.20 Parts of the following sentence have been given as options. One of them may contain an error. Select the part that contains the error from the given options. If you don't find any error, mark 'No error' as your answer.

Luckily, I managed to get a room in the college hostel, and I move in there.

- Ans  1. and I move in there  
 2. Luckily, I managed to get a room  
 3. in the college hostel  
 4. No error

Question ID : 26433090493  
Option 1 ID : 264330355423  
Option 2 ID : 264330355421  
Option 3 ID : 264330355422  
Option 4 ID : 264330355424  
Status : Answered  
Chosen Option : 1

**Q.21** Select the most appropriate meaning of the given idiom.  
Open your heart

- Ans
- 1. Immediately think of something
  - 2. Share your deepest feelings
  - 3. Feel relieved because the stress is removed
  - 4. Could do something very easily

Question ID : 264330135999  
Option 1 ID : 264330532838  
Option 2 ID : 264330532835  
Option 3 ID : 264330532836  
Option 4 ID : 264330532837  
Status : Answered  
Chosen Option : 2

**Q.22** Select the most appropriate one-word substitution of the given group of words.

A list of source materials that are used or consulted in the preparation of a work or that are referred to in the text.

- Ans
- 1. Bibliography
  - 2. Bibliophile
  - 3. Bibliotheca
  - 4. Bibliomemoir

Question ID : 26433090850  
Option 1 ID : 264330356810  
Option 2 ID : 264330356809  
Option 3 ID : 264330356812  
Option 4 ID : 264330356811  
Status : Answered  
Chosen Option : 1

**Q.23** Select the most appropriate idiom to fill in the blank.

The company had some initial problems, but now it is \_\_\_\_\_.

- Ans
- 1. flying like a rock
  - 2. flying the nest
  - 3. flying a kite
  - 4. flying high

Question ID : 264330163338  
Option 1 ID : 264330640654  
Option 2 ID : 264330640653  
Option 3 ID : 264330640651  
Option 4 ID : 264330640652  
Status : Answered  
Chosen Option : 4

**Q.24** Select the most appropriate meaning of the given idiom.  
**Burn one's bridges**

- Ans  1. Working very hard  
 2. Impossible to return to an earlier state  
 3. Having an overnight success  
 4. Attack on one's enemy

Question ID : 264330135902  
Option 1 ID : 264330532464  
Option 2 ID : 264330532463  
Option 3 ID : 264330532466  
Option 4 ID : 264330532465  
Status : Answered  
Chosen Option : 2

**Q.25** Select the option that can be used as a one-word substitute for the given group of words.

An ability to do several things at the same time.

- Ans  1. Indictment  
 2. Blasphemy  
 3. Unitasking  
 4. Multitasking

Question ID : 26433088967  
Option 1 ID : 264330349408  
Option 2 ID : 264330349407  
Option 3 ID : 264330349405  
Option 4 ID : 264330349406  
Status : Answered  
Chosen Option : 4

**Q.26** Select the most appropriate meaning of the underlined idiom that can be substituted in the following sentence.

Right now, my hands are full.

- Ans  1. My hands are filled up  
 2. My hands are swollen  
 3. I'm very tired  
 4. I'm very busy

Question ID : 26433094758  
Option 1 ID : 264330371865  
Option 2 ID : 264330371866  
Option 3 ID : 264330371868  
Option 4 ID : 264330371867  
Status : Answered  
Chosen Option : 4

**Q.27** Select the **INCORRECTLY** spelt word.

- Ans  1. Click  
 2. Caricature  
 3. Cumbersome  
 4. Cumulative

Question ID : 26433089392  
Option 1 ID : 264330351072  
Option 2 ID : 264330351070  
Option 3 ID : 264330351071  
Option 4 ID : 264330351069  
Status : Answered  
Chosen Option : 2

**Q.28** Select the most appropriate **ANTONYM** of the given word.  
**Credit**

- Ans  1. Litigate  
 2. Install  
 3. Debit  
 4. Impute

Question ID : 26433096221  
Option 1 ID : 264330377640  
Option 2 ID : 264330377639  
Option 3 ID : 264330377637  
Option 4 ID : 264330377638  
Status : Answered  
Chosen Option : 3

**Q.29** Select the most appropriate meaning of the given idiom.  
**Boil the ocean**

- Ans  1. Something very big  
 2. Something which gets hot gradually  
 3. Try to do something impossible  
 4. To make someone very angry

Question ID : 264330135901  
Option 1 ID : 264330532460  
Option 2 ID : 264330532461  
Option 3 ID : 264330532462  
Option 4 ID : 264330532459  
Status : Answered  
Chosen Option : 3

**Q.30** The following sentence has been split into four segments. Identify the segment that contains a grammatical error.  
"You look so young! / When did you completed your graduation?" / asked Rekha / to her neighbour.

- Ans**
- 1. to her neighbour
  - 2. When did you completed your graduation?
  - 3. asked Rekha
  - 4. You look so young!

Question ID : 264330139157  
Option 1 ID : 264330545206  
Option 2 ID : 264330545204  
Option 3 ID : 264330545205  
Option 4 ID : 264330545203  
Status : Answered  
Chosen Option : 2

**Q.31** Select the correct spelling of the incorrectly spelt word.

Diplomats believe that buroaucratic delays are inevitable.

- Ans**
- 1. inivitable
  - 2. burocratic
  - 3. beleave
  - 4. bureaucratic

Question ID : 26433088980  
Option 1 ID : 264330349458  
Option 2 ID : 264330349457  
Option 3 ID : 264330349460  
Option 4 ID : 264330349459  
Status : Answered  
Chosen Option : 4

**Q.32** Select the option that can be used as a one-word substitute for the given group of words.

The compulsion to tell lies

- Ans**
- 1. Pyromania
  - 2. Nymphomania
  - 3. Megalomania
  - 4. Mythomania

Question ID : 26433088995  
Option 1 ID : 264330349519  
Option 2 ID : 264330349520  
Option 3 ID : 264330349517  
Option 4 ID : 264330349518  
Status : Not Answered  
Chosen Option : --



**Q.33** Select the most appropriate ANTONYM of the word 'hinderance' in the given sentence and choose the correct option.

The refreshing breeze blew through the open window, bringing relief from the summer heat.

- Ans  1. Bringing  
 2. Blew  
 3. Refreshing  
 4. Relief

Question ID : 264330163537

Option 1 ID : 264330641405

Option 2 ID : 264330641404

Option 3 ID : 264330641403

Option 4 ID : 264330641406

Status : Answered

Chosen Option : 4

**Q.34** The following sentence has been divided into parts. One of them may contain an error. Select the part that contains the error from the given options. If you don't find any error, mark 'No error' as your answer.  
Neem tastes / a little bitterly, / but is very useful.

- Ans  1. a little bitterly  
 2. Neem tastes  
 3. but is very useful  
 4. No error

Question ID : 264330117146

Option 1 ID : 264330460654

Option 2 ID : 264330460653

Option 3 ID : 264330460655

Option 4 ID : 264330460656

Status : Answered

Chosen Option : 1

**Q.35** Select the option that can be used as a one-word substitute for the given group of words.

Someone who pretends to have certain moral standards while secretly that person practices those very moral lapses.

- Ans  1. Sinner  
 2. Actor  
 3. Spy  
 4. Hypocrite

Question ID : 26433088806

Option 1 ID : 264330348778

Option 2 ID : 264330348777

Option 3 ID : 264330348780

Option 4 ID : 264330348779

Status : Answered

Chosen Option : 4

Q.36 Select the most appropriate idiomatic expression to substitute for the underlined segment in the given sentence.

I had to work late in the night for nearly three months to write my first book.

- Ans
- 1. to take a back seat
  - 2. to burn the midnight oil
  - 3. to blow a fuse
  - 4. to look through coloured glasses

Question ID : 26433092082  
Option 1 ID : 264330361650  
Option 2 ID : 264330361652  
Option 3 ID : 264330361649  
Option 4 ID : 264330361651

Status : Answered

Chosen Option : 2

Q.37 Select the option that can be used as a one-word substitute for the given group of words.

A person who does not eat any animal product

- Ans
- 1. Vegetarian
  - 2. Veggie
  - 3. Vegan
  - 4. Non-vegetarian

Question ID : 26433088897  
Option 1 ID : 264330349133  
Option 2 ID : 264330349136  
Option 3 ID : 264330349135  
Option 4 ID : 264330349134

Status : Answered

Chosen Option : 3

Q.38 Select the most appropriate meaning of the underlined idiom.  
You must lie in the bed you have made.

- Ans
- 1. Face the unpleasant consequences of your own acts
  - 2. Sleep on the bed you made yourself
  - 3. Sleep in your own bed
  - 4. Be contended always

Question ID : 26433098330  
Option 1 ID : 264330385975  
Option 2 ID : 264330385974  
Option 3 ID : 264330385973  
Option 4 ID : 264330385976

Status : Answered

Chosen Option : 1

**Q.39** The following sentence has been split into four segments. Identify the segment that contains a grammatical error.

The postman / delivers the letters / through hand, / door to door.

- Ans  1. The postman  
 2. delivers the letters  
 3. door to door  
 4. through hand

Question ID : 264330145282

Option 1 ID : 264330569383

Option 2 ID : 264330569384

Option 3 ID : 264330569386

Option 4 ID : 264330569385

Status : Answered

Chosen Option : 4

**Q.40** Select the most appropriate ANTONYM of the given word.

Demolish

- Ans  1. Inferior  
 2. Annihilate  
 3. Unmethodical  
 4. Fabricate

Question ID : 264330163373

Option 1 ID : 264330640780

Option 2 ID : 264330640781

Option 3 ID : 264330640782

Option 4 ID : 264330640779

Status : Answered

Chosen Option : 1

**Comprehension:**

In the following passage, some words have been deleted. Read the passage carefully and select the most appropriate option to fill in each blank.

It is said that everyone lives (1)\_\_\_\_\_ selling something. What you can (2)\_\_\_\_\_ from this statement is that teachers live by selling knowledge, philosophers live by selling wisdom and priests earn their living by selling spiritual comfort. Though it may be possible to measure the value of material goods in terms of money, it is extremely difficult to (3)\_\_\_\_\_ the true value of the services which people perform for us. There are times when we would (4)\_\_\_\_\_ give everything we possess to save our lives, yet we might grudge paying a surgeon a high fee for offering us precisely the same service. The (5)\_\_\_\_\_ of society are such that skills have to be paid for in the same way that goods are paid for at a shop.

SubQuestion No : 41

**Q.41** Select the most appropriate option to fill in blank number 1.

- Ans  1. by  
 2. over  
 3. of  
 4. into

Question ID : 264330163286

Option 1 ID : 264330640448

Option 2 ID : 264330640449

Option 3 ID : 264330640450

Option 4 ID : 264330640447

Status : Answered

Chosen Option : 1

**Comprehension:**

In the following passage, some words have been deleted. Read the passage carefully and select the most appropriate option to fill in each blank.

It is said that everyone lives (1)\_\_\_\_\_ selling something. What you can (2)\_\_\_\_\_ from this statement is that teachers live by selling knowledge, philosophers live by selling wisdom and priests earn their living by selling spiritual comfort. Though it may be possible to measure the value of material goods in terms of money, it is extremely difficult to (3)\_\_\_\_\_ the true value of the services which people perform for us. There are times when we would (4)\_\_\_\_\_ give everything we possess to save our lives, yet we might grudge paying a surgeon a high fee for offering us precisely the same service. The (5)\_\_\_\_\_ of society are such that skills have to be paid for in the same way that goods are paid for at a shop.

**SubQuestion No : 42**

**Q.42** Select the most appropriate option to fill in blank number 2.

Ans  1. separate

2. derive

3. revive

4. choose

Question ID : 264330163287

Option 1 ID : 264330640454

Option 2 ID : 264330640453

Option 3 ID : 264330640451

Option 4 ID : 264330640452

Status : Answered

Chosen Option : 2

**Comprehension:**

In the following passage, some words have been deleted. Read the passage carefully and select the most appropriate option to fill in each blank.

It is said that everyone lives (1)\_\_\_\_\_ selling something. What you can (2)\_\_\_\_\_ from this statement is that teachers live by selling knowledge, philosophers live by selling wisdom and priests earn their living by selling spiritual comfort. Though it may be possible to measure the value of material goods in terms of money, it is extremely difficult to (3)\_\_\_\_\_ the true value of the services which people perform for us. There are times when we would (4)\_\_\_\_\_ give everything we possess to save our lives, yet we might grudge paying a surgeon a high fee for offering us precisely the same service. The (5)\_\_\_\_\_ of society are such that skills have to be paid for in the same way that goods are paid for at a shop.

**SubQuestion No : 43**

**Q.43** Select the most appropriate option to fill in blank number 3.

Ans  1. extort

2. mock

3. conceal

4. estimate

Question ID : 264330163288

Option 1 ID : 264330640456

Option 2 ID : 264330640457

Option 3 ID : 264330640455

Option 4 ID : 264330640458

Status : Answered

Chosen Option : 4

**Comprehension:**

In the following passage, some words have been deleted. Read the passage carefully and select the most appropriate option to fill in each blank.

It is said that everyone lives (1)\_\_\_\_\_ selling something. What you can (2)\_\_\_\_\_ from this statement is that teachers live by selling knowledge, philosophers live by selling wisdom and priests earn their living by selling spiritual comfort. Though it may be possible to measure the value of material goods in terms of money, it is extremely difficult to (3)\_\_\_\_\_ the true value of the services which people perform for us. There are times when we would (4)\_\_\_\_\_ give everything we possess to save our lives, yet we might grudge paying a surgeon a high fee for offering us precisely the same service. The (5)\_\_\_\_\_ of society are such that skills have to be paid for in the same way that goods are paid for at a shop.

**SubQuestion No : 44**

**Q.44** Select the most appropriate option to fill in blank number 4.

- Ans  1. willingly  
 2. thoroughly  
 3. perfectly  
 4. thoughtfully

Question ID : 264330163289

Option 1 ID : 264330640459

Option 2 ID : 264330640460

Option 3 ID : 264330640461

Option 4 ID : 264330640462

Status : Answered

Chosen Option : 1

**Comprehension:**

In the following passage, some words have been deleted. Read the passage carefully and select the most appropriate option to fill in each blank.

It is said that everyone lives (1)\_\_\_\_\_ selling something. What you can (2)\_\_\_\_\_ from this statement is that teachers live by selling knowledge, philosophers live by selling wisdom and priests earn their living by selling spiritual comfort. Though it may be possible to measure the value of material goods in terms of money, it is extremely difficult to (3)\_\_\_\_\_ the true value of the services which people perform for us. There are times when we would (4)\_\_\_\_\_ give everything we possess to save our lives, yet we might grudge paying a surgeon a high fee for offering us precisely the same service. The (5)\_\_\_\_\_ of society are such that skills have to be paid for in the same way that goods are paid for at a shop.

**SubQuestion No : 45**

**Q.45** Select the most appropriate option to fill in blank number 5.

- Ans  1. obstacles  
 2. interferences  
 3. conditions  
 4. connections

Question ID : 264330163290

Option 1 ID : 264330640466

Option 2 ID : 264330640463

Option 3 ID : 264330640465

Option 4 ID : 264330640464

Status : Answered

Chosen Option : 3

**Comprehension:**

Read the given passage carefully and answer the questions that follow.

As a society, we have come a long way in terms of progress and development. We have eradicated diseases, explored space, and created technological wonders that were once thought impossible. Yet, there is still one issue that continues to plague us: stupidity.

Yes, stupidity. The thing that seems to be contagious and has been spreading faster than the common cold. It's everywhere you look - on social media, in politics, in the workplace. You can't escape it.

It's as if we've all collectively decided that intelligence and common sense are no longer important. Why bother using your brain when you can just rely on your gut feelings and conspiracy theories?

Take politics, for example. It used to be that politicians were expected to be knowledgeable and well-informed about the issues they were dealing with. Now, it seems that all you need is a catchy slogan and some empty promises to win an election.

And don't even get me started on social media. It's a breeding ground for stupidity. People will believe anything they read as long as it confirms their preconceived biases. And don't even think about trying to present them with actual facts and evidence. That's just a waste of time.

But it's not just individuals who are to blame for this epidemic of stupidity. Our education system is failing us as well. We're teaching our kids how to pass tests instead of how to think critically and solve problems. It's no wonder we have a generation of adults who can't even find their way around a basic math problem.

Of course, there are some who would argue that stupidity is just a different way of thinking.

That it's a valid perspective that deserves to be respected. To those people, I say this: if you want to be stupid, go ahead. Just don't expect the rest of us to respect your opinions when they're based on nothing but ignorance and misinformation.

It's time for us to take a stand against stupidity. We need to start valuing intelligence and critical thinking again. We need to hold our leaders accountable for their actions and demand that they be knowledgeable and well-informed. We need to teach our children how to think, not just how to memorise.

It won't be easy, but it's a fight worth fighting. Because if we don't, we'll be stuck in a world where stupidity reigns supreme, and there's no telling what kind of damage that could do. So let's all do our part and start using our brains again. It's time to put an end to the epidemic of stupidity once and for all.

**SubQuestion No : 46**

**Q.46 Which of the following techniques has been used by the author of the passage to convey the message?**

- Ans
- 1. Examples and anecdotes
  - 2. Factual and chronological account
  - 3. Humour and exaggeration
  - 4. Parody and mimicry

Question ID : 264330165143

Option 1 ID : 264330647677

Option 2 ID : 264330647675

Option 3 ID : 264330647676

Option 4 ID : 264330647678

Status : Answered

Chosen Option : 1

**Comprehension:**

Read the given passage carefully and answer the questions that follow.

As a society, we have come a long way in terms of progress and development. We have eradicated diseases, explored space, and created technological wonders that were once thought impossible. Yet, there is still one issue that continues to plague us: stupidity.

Yes, stupidity. The thing that seems to be contagious and has been spreading faster than the common cold. It's everywhere you look - on social media, in politics, in the workplace. You can't escape it.

It's as if we've all collectively decided that intelligence and common sense are no longer important. Why bother using your brain when you can just rely on your gut feelings and conspiracy theories?

Take politics, for example. It used to be that politicians were expected to be knowledgeable and well-informed about the issues they were dealing with. Now, it seems that all you need is a catchy slogan and some empty promises to win an election.

And don't even get me started on social media. It's a breeding ground for stupidity. People will believe anything they read as long as it confirms their preconceived biases. And don't even think about trying to present them with actual facts and evidence. That's just a waste of time.

But it's not just individuals who are to blame for this epidemic of stupidity. Our education system is failing us as well. We're teaching our kids how to pass tests instead of how to think critically and solve problems. It's no wonder we have a generation of adults who can't even find their way around a basic math problem.

Of course, there are some who would argue that stupidity is just a different way of thinking.

That it's a valid perspective that deserves to be respected. To those people, I say this: if you want to be stupid, go ahead. Just don't expect the rest of us to respect your opinions when they're based on nothing but ignorance and misinformation.

It's time for us to take a stand against stupidity. We need to start valuing intelligence and critical thinking again. We need to hold our leaders accountable for their actions and demand that they be knowledgeable and well-informed. We need to teach our children how to think, not just how to memorise.

It won't be easy, but it's a fight worth fighting. Because if we don't, we'll be stuck in a world where stupidity reigns supreme, and there's no telling what kind of damage that could do. So let's all do our part and start using our brains again. It's time to put an end to the epidemic of stupidity once and for all.

**SubQuestion No : 47**

**Q.47 According to the passage, what is the solution to the issue of stupidity in society?**

- Ans
- 1. Embracing ignorance and misinformation
  - 2. Teaching students how to pass tests
  - 3. Electing politicians with catchy slogans
  - 4. Encouraging critical thinking and problem-solving skills

Question ID : 264330165142

Option 1 ID : 264330647671

Option 2 ID : 264330647673

Option 3 ID : 264330647674

Option 4 ID : 264330647672

Status : Answered

Chosen Option : 4

**Comprehension:**

Read the given passage carefully and answer the questions that follow.

As a society, we have come a long way in terms of progress and development. We have eradicated diseases, explored space, and created technological wonders that were once thought impossible. Yet, there is still one issue that continues to plague us: stupidity.

Yes, stupidity. The thing that seems to be contagious and has been spreading faster than the common cold. It's everywhere you look - on social media, in politics, in the workplace. You can't escape it.

It's as if we've all collectively decided that intelligence and common sense are no longer important. Why bother using your brain when you can just rely on your gut feelings and conspiracy theories?

Take politics, for example. It used to be that politicians were expected to be knowledgeable and well-informed about the issues they were dealing with. Now, it seems that all you need is a catchy slogan and some empty promises to win an election.

And don't even get me started on social media. It's a breeding ground for stupidity. People will believe anything they read as long as it confirms their preconceived biases. And don't even think about trying to present them with actual facts and evidence. That's just a waste of time.

But it's not just individuals who are to blame for this epidemic of stupidity. Our education system is failing us as well. We're teaching our kids how to pass tests instead of how to think critically and solve problems. It's no wonder we have a generation of adults who can't even find their way around a basic math problem.

Of course, there are some who would argue that stupidity is just a different way of thinking.

That it's a valid perspective that deserves to be respected. To those people, I say this: if you want to be stupid, go ahead. Just don't expect the rest of us to respect your opinions when they're based on nothing but ignorance and misinformation.

It's time for us to take a stand against stupidity. We need to start valuing intelligence and critical thinking again. We need to hold our leaders accountable for their actions and demand that they be knowledgeable and well-informed. We need to teach our children how to think, not just how to memorise.

It won't be easy, but it's a fight worth fighting. Because if we don't, we'll be stuck in a world where stupidity reigns supreme, and there's no telling what kind of damage that could do. So let's all do our part and start using our brains again. It's time to put an end to the epidemic of stupidity once and for all.

**SubQuestion No : 48****Q.48 What is the tone of the passage?****Ans** ✓ 1. Sarcastic

✗ 2. Serious

✗ 3. Melancholic

✗ 4. Joyful

Question ID : 264330165139

Option 1 ID : 264330647660

Option 2 ID : 264330647661

Option 3 ID : 264330647662

Option 4 ID : 264330647659

Status : Answered

Chosen Option : 3



**Comprehension:**

Read the given passage carefully and answer the questions that follow.

As a society, we have come a long way in terms of progress and development. We have eradicated diseases, explored space, and created technological wonders that were once thought impossible. Yet, there is still one issue that continues to plague us: stupidity.

Yes, stupidity. The thing that seems to be contagious and has been spreading faster than the common cold. It's everywhere you look - on social media, in politics, in the workplace. You can't escape it.

It's as if we've all collectively decided that intelligence and common sense are no longer important. Why bother using your brain when you can just rely on your gut feelings and conspiracy theories?

Take politics, for example. It used to be that politicians were expected to be knowledgeable and well-informed about the issues they were dealing with. Now, it seems that all you need is a catchy slogan and some empty promises to win an election.

And don't even get me started on social media. It's a breeding ground for stupidity. People will believe anything they read as long as it confirms their preconceived biases. And don't even think about trying to present them with actual facts and evidence. That's just a waste of time.

But it's not just individuals who are to blame for this epidemic of stupidity. Our education system is failing us as well. We're teaching our kids how to pass tests instead of how to think critically and solve problems. It's no wonder we have a generation of adults who can't even find their way around a basic math problem.

Of course, there are some who would argue that stupidity is just a different way of thinking.

That it's a valid perspective that deserves to be respected. To those people, I say this: if you want to be stupid, go ahead. Just don't expect the rest of us to respect your opinions when they're based on nothing but ignorance and misinformation.

It's time for us to take a stand against stupidity. We need to start valuing intelligence and critical thinking again. We need to hold our leaders accountable for their actions and demand that they be knowledgeable and well-informed. We need to teach our children how to think, not just how to memorise.

It won't be easy, but it's a fight worth fighting. Because if we don't, we'll be stuck in a world where stupidity reigns supreme, and there's no telling what kind of damage that could do. So let's all do our part and start using our brains again. It's time to put an end to the epidemic of stupidity once and for all.

**SubQuestion No : 49**

**Q.49 According to the author of the passage, who among the following is NOT responsible for the spread of stupidity?**

- Ans
- 1. Politicians
  - 2. Education system
  - 3. Individuals
  - 4. Children

Question ID : 264330165140

Option 1 ID : 264330647664

Option 2 ID : 264330647665

Option 3 ID : 264330647663

Option 4 ID : 264330647666

Status : Answered

Chosen Option : 4

**Comprehension:**

Read the given passage carefully and answer the questions that follow.

As a society, we have come a long way in terms of progress and development. We have eradicated diseases, explored space, and created technological wonders that were once thought impossible. Yet, there is still one issue that continues to plague us: stupidity.

Yes, stupidity. The thing that seems to be contagious and has been spreading faster than the common cold. It's everywhere you look - on social media, in politics, in the workplace. You can't escape it.

It's as if we've all collectively decided that intelligence and common sense are no longer important. Why bother using your brain when you can just rely on your gut feelings and conspiracy theories?

Take politics, for example. It used to be that politicians were expected to be knowledgeable and well-informed about the issues they were dealing with. Now, it seems that all you need is a catchy slogan and some empty promises to win an election.

And don't even get me started on social media. It's a breeding ground for stupidity. People will believe anything they read as long as it confirms their preconceived biases. And don't even think about trying to present them with actual facts and evidence. That's just a waste of time.

But it's not just individuals who are to blame for this epidemic of stupidity. Our education system is failing us as well. We're teaching our kids how to pass tests instead of how to think critically and solve problems. It's no wonder we have a generation of adults who can't even find their way around a basic math problem.

Of course, there are some who would argue that stupidity is just a different way of thinking.

That it's a valid perspective that deserves to be respected. To those people, I say this: if you want to be stupid, go ahead. Just don't expect the rest of us to respect your opinions when they're based on nothing but ignorance and misinformation.

It's time for us to take a stand against stupidity. We need to start valuing intelligence and critical thinking again. We need to hold our leaders accountable for their actions and demand that they be knowledgeable and well-informed. We need to teach our children how to think, not just how to memorise.

It won't be easy, but it's a fight worth fighting. Because if we don't, we'll be stuck in a world where stupidity reigns supreme, and there's no telling what kind of damage that could do. So let's all do our part and start using our brains again. It's time to put an end to the epidemic of stupidity once and for all.

**SubQuestion No : 50**

**Q.50** What could be a suitable title for the passage?

- Ans
- 1. The Evils of Social Media
  - 2. The Benefits of Stupidity
  - 3. The Joy of Living in a World of Ignorance
  - 4. The Importance of Critical Thinking

Question ID : 264330165141

Option 1 ID : 264330647667

Option 2 ID : 264330647668

Option 3 ID : 264330647670

Option 4 ID : 264330647669

Status : Answered

Chosen Option : 4