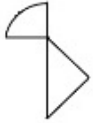


# SSC CPO Oct 03, 2023 Shift 1 Question Paper

Roll Number	
Candidate Name	
Venue Name	
Exam Date	03/10/2023
Exam Time	9:00 AM - 11:00 AM
Subject	SICPO Paper I 2023

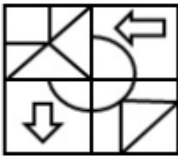
## Section : General Intelligence and Reasoning

Q.1 Select the option in which the given figure is embedded (rotation is NOT allowed).

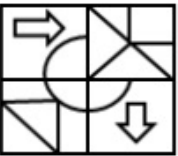


Ans

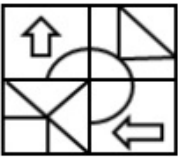
✗ 1.



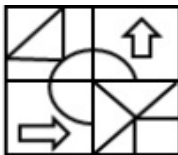
✗ 2.



✗ 3.



✓ 4.



Question ID : 264330126081

Option 1 ID : 264330493996

Option 2 ID : 264330493998

Option 3 ID : 264330493997

Option 4 ID : 264330493999

Status : Answered

Chosen Option : 4

Q.2 Which letter cluster will replace the question mark (?) to complete the given series?

ELSV, FJVR, GHYN, ?, IDEF

- Ans
- 1. HFJB
  - 2. HBJF
  - 3. HFBJ
  - 4. GHFJ

Question ID : 264330145423

Option 1 ID : 264330569948

Option 2 ID : 264330569949

Option 3 ID : 264330569947

Option 4 ID : 264330569950

Status : Answered

Chosen Option : 3

Q.3 Three of the following four letter-clusters are alike in a certain way and one is different. Pick the odd one out.

- Ans
- 1. WVTD
  - 2. JIGQ
  - 3. SRPH
  - 4. KLNK

Question ID : 26433068792

Option 1 ID : 264330269681

Option 2 ID : 264330269683

Option 3 ID : 264330269680

Option 4 ID : 264330269682

Status : Answered

Chosen Option : 4

Q.4 Seven people, A, B, C, D, E, F and G, are sitting in a straight row, facing north (not necessarily in the same order). Only 1 person sits to the left of D. A is an immediate neighbour of D. Only 2 people sit between F and D. Only 3 people sit between C and G. B is not an immediate neighbour of G. Only 2 people sit between E and A. Who sits at the extreme right end of the row?

- Ans
- 1. A
  - 2. G
  - 3. C
  - 4. B

Question ID : 264330145408

Option 1 ID : 264330569887

Option 2 ID : 264330569889

Option 3 ID : 264330569888

Option 4 ID : 264330569890

Status : Answered

Chosen Option : 3

**Q.5** In a certain code language, 'GAME' is coded as '8426' and 'MUST' is coded as '7853'.  
What is the code for 'M' in the given code language?

- Ans  1. 8  
 2. 2  
 3. 3  
 4. 7

Question ID : 264330169655  
 Option 1 ID : 264330665319  
 Option 2 ID : 264330665320  
 Option 3 ID : 264330665322  
 Option 4 ID : 264330665321  
 Status : Answered  
 Chosen Option : 1

**Q.6** Two statements are given, followed by two conclusions numbered I and II. Assuming the statements to be true, even if they seem to be at variance with commonly known facts, decide which of the conclusions logically follow(s) from the statements.

Statements:

All flowers are trees.

All leaves are flowers.

Conclusion:

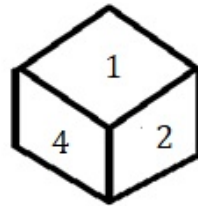
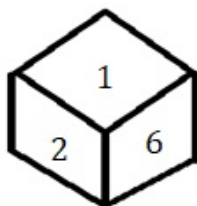
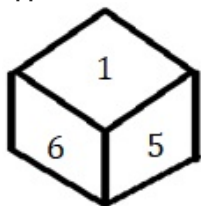
I) All trees are flowers.

II) All leaves are trees.

- Ans  1. Only Conclusion I follows  
 2. Neither Conclusion I nor II follows.  
 3. Only Conclusion II follows.  
 4. Both Conclusions I and II follow.

Question ID : 26433067706  
 Option 1 ID : 264330265336  
 Option 2 ID : 264330265339  
 Option 3 ID : 264330265337  
 Option 4 ID : 264330265338  
 Status : Answered  
 Chosen Option : 3

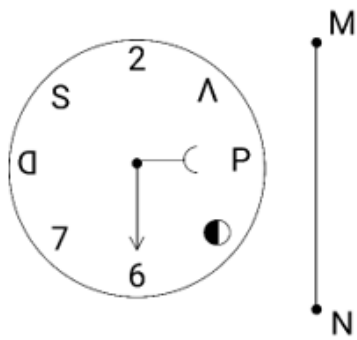
**Q.7** Three different positions of the same dice are shown. Find the number on the face opposite the face showing '1'.



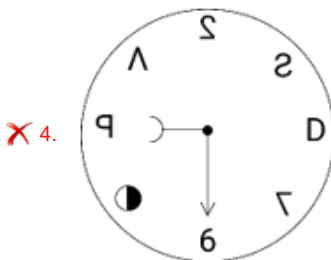
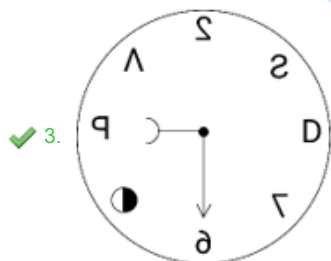
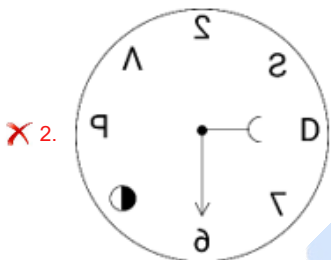
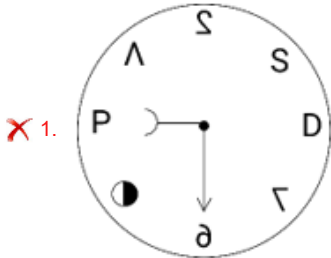
- Ans  1. 3  
 2. 2  
 3. 6  
 4. 4

Question ID : 264330108971  
 Option 1 ID : 264330428163  
 Option 2 ID : 264330428162  
 Option 3 ID : 264330428161  
 Option 4 ID : 264330428164  
 Status : Answered  
 Chosen Option : 1

Q.8 Select the correct mirror image of the given figure, when the mirror is placed at line MN as shown.



Ans



Question ID : 264330170165

Option 1 ID : 264330667335

Option 2 ID : 264330667336

Option 3 ID : 264330667338

Option 4 ID : 264330667337

Status : Answered

Chosen Option : 3

**Q.9** If '+' means '-', '-' means 'x', 'x' means '÷', '÷' means '+', then what will come in place of the question mark (?) in the following equation?  
 $137 \div 56 \times 7 - 6 + 31 = ?$

- Ans
- 1. 149
  - 2. 163
  - 3. 145
  - 4. 154

Question ID : 264330126058

Option 1 ID : 264330493905

Option 2 ID : 264330493906

Option 3 ID : 264330493904

Option 4 ID : 264330493907

Status : Answered

Chosen Option : 4

**Q.10** Select the option that represents the correct order of the given words as they would appear in an English dictionary?

- 1.Lollipop
- 2.Loincloth
- 3.Longways
- 4.Logician
- 5.Lonely

- Ans
- 1. 3, 2, 1, 5, 4
  - 2. 4, 3, 1, 5, 2
  - 3. 4, 2, 1, 5, 3
  - 4. 3, 4, 1, 5, 2

Question ID : 26433067241

Option 1 ID : 264330263479

Option 2 ID : 264330263477

Option 3 ID : 264330263478

Option 4 ID : 264330263476

Status : Answered

Chosen Option : 3

**Q.11** Which of the following terms will replace the question mark (?) in the given series?

ABEG FFHI KJKK PNNM ?

- Ans
- 1. URQO
  - 2. VRQO
  - 3. RUQO
  - 4. UROQ

Question ID : 26433085320

Option 1 ID : 264330334982

Option 2 ID : 264330334984

Option 3 ID : 264330334983

Option 4 ID : 264330334981

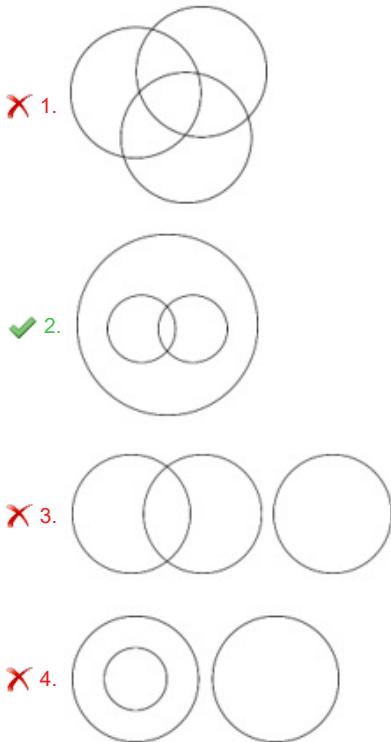
Status : Answered

Chosen Option : 1

Q.12 Select the Venn diagram that best illustrates the relationship between the following classes.

Electrical Appliance, Refrigerator, Freezer

Ans



Question ID : 264330132924

Option 1 ID : 264330520757

Option 2 ID : 264330520755

Option 3 ID : 264330520756

Option 4 ID : 264330520758

Status : Answered

Chosen Option : 2

Q.13 Select the set in which the numbers are related in the same way as are the numbers of the following sets.

(NOTE : Operations should be performed on the whole numbers, without breaking down the numbers into its constituent digits. E.g. 13 – Operations on 13 such as adding /subtracting /multiplying etc. to 13 can be performed. Breaking down 13 into 1 and 3 and then performing mathematical operations on 1 and 3 is NOT allowed)

(7, 35, 42), (4, 20, 24)

- Ans
1. (8, 56, 72)
2. (6, 36, 48)
3. (9, 45, 54)
4. (12, 60, 48)

Question ID : 264330145301

Option 1 ID : 264330569462

Option 2 ID : 264330569461

Option 3 ID : 264330569459

Option 4 ID : 264330569460

Status : Answered

Chosen Option : 3

**Q.14** A person starts from point Z and moves 7 km towards the South. He turns right and moves 5 km, turns right, and moves 3 km, then turns right and moves 1 km. He takes a left turn and moves 4 km to reach a point X. How much and in which direction does he need to move now to reach point Z?

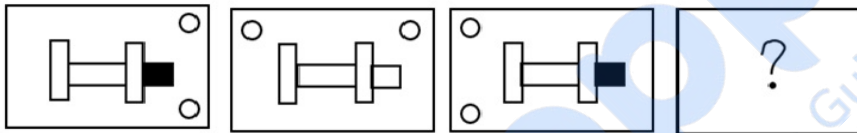
- Ans**
- 1. 4 km South
  - 2. 4 km East
  - 3. 4 km West
  - 4. 6 km East

Question ID : 26433081451  
 Option 1 ID : 264330319638  
 Option 2 ID : 264330319639  
 Option 3 ID : 264330319637  
 Option 4 ID : 264330319640

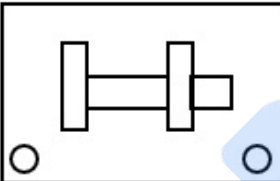
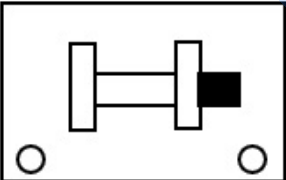
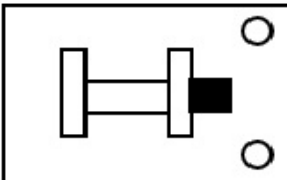
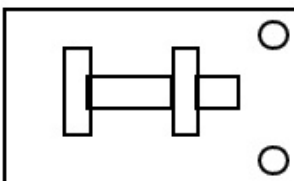
Status : Answered

Chosen Option : 2

**Q.15** Select the figure that will replace the question mark (?) in the following figure series.



**Ans**

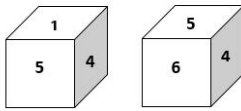
- 1. 
- 2. 
- 3. 
- 4. 

Question ID : 26433065985  
 Option 1 ID : 264330258484  
 Option 2 ID : 264330258485  
 Option 3 ID : 264330258487  
 Option 4 ID : 264330258486

Status : Answered

Chosen Option : 1

**Q.16** Two different positions of the same dice are shown, the six faces of which are numbered from 1 to 6. Select the number that will be on the face opposite to the one showing '1'.



- Ans**
- 1. 6
  - 2. 4
  - 3. 5
  - 4. 3

Question ID : 26433058063  
 Option 1 ID : 264330227239  
 Option 2 ID : 264330227237  
 Option 3 ID : 264330227238  
 Option 4 ID : 264330227236

Status : Answered

Chosen Option : 1

**Q.17** Two statements are given, followed by two conclusions numbered I and II. Assuming the statements to be true, even if they seem to be at variance with commonly known facts, decide which of the conclusions logically follow(s) from the statements.

Statements:

All plants are vegetables.

Some plants are poisonous.

Conclusions:

I. All vegetables are poisonous.

II. Some vegetables are plants.

- Ans**
- 1. Neither conclusion I nor II follows
  - 2. Only conclusion I follows
  - 3. Both conclusions I and II follow
  - 4. Only conclusion II follows

Question ID : 26433056711  
 Option 1 ID : 264330221831  
 Option 2 ID : 264330221828  
 Option 3 ID : 264330221830  
 Option 4 ID : 264330221829

Status : Answered

Chosen Option : 4

**Q.18** Select the correct option that indicates the arrangement of the given words in the order in which they appear in an English dictionary.

1. Desire
2. Destination
3. Descend
4. Destructive
5. Desolate
6. Desperate

- Ans**
- 1. 3, 1, 2, 6, 5, 4
  - 2. 3, 1, 6, 5, 2, 4
  - 3. 3, 1, 5, 6, 2, 4
  - 4. 3, 1, 5, 6, 4, 2

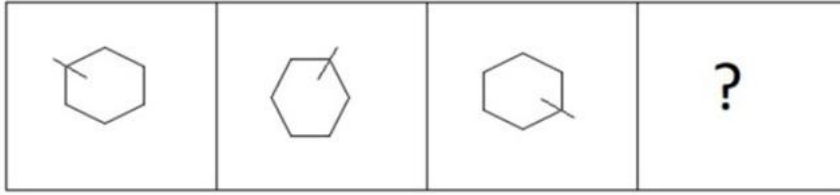
Question ID : 264330145377  
 Option 1 ID : 264330569763  
 Option 2 ID : 264330569764  
 Option 3 ID : 264330569765  
 Option 4 ID : 264330569766

Status : Answered

Chosen Option : 3

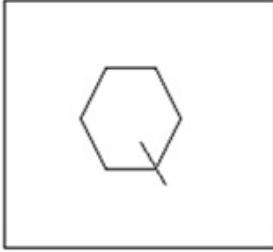


Q.19 Select the figure that will come next in the following figure series.

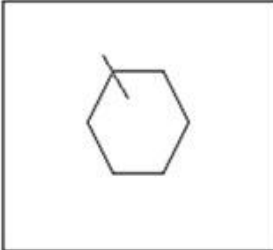


Ans

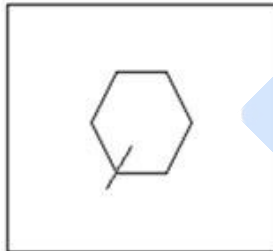
✗ 1.



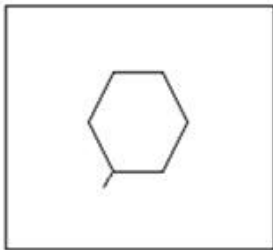
✗ 2.



✓ 3.



✗ 4.



Question ID : 26433087076

Option 1 ID : 264330341947

Option 2 ID : 264330341948

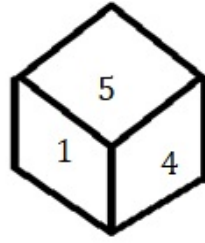
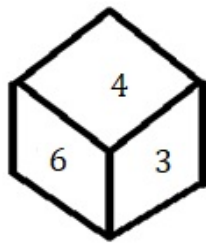
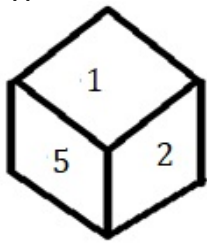
Option 3 ID : 264330341945

Option 4 ID : 264330341946

Status : Answered

Chosen Option : 3

Q.20 Three different positions of the same dice are shown. Find the number on the face opposite the face showing '4'.



- Ans
- 1. 6
  - 2. 2
  - 3. 3
  - 4. 1

Question ID : 264330108967

Option 1 ID : 264330428148

Option 2 ID : 264330428146

Option 3 ID : 264330428147

Option 4 ID : 264330428145

Status : Answered

Chosen Option : 2

Q.21 Select the set in which the numbers are related in the same way as are the numbers of the following sets.

(NOTE : Operations should be performed on the whole numbers, without breaking down the numbers into its constituent digits. E.g. 13 – Operations on 13 such as adding /subtracting /multiplying etc. to 13 can be performed. Breaking down 13 into 1 and 3 and then performing mathematical operations on 1 and 3 is NOT allowed)

(264, 462), (132, 330)

- Ans
- 1. (211, 340)
  - 2. (188, 378)
  - 3. (386, 584)
  - 4. (282, 496)

Question ID : 264330145296

Option 1 ID : 264330569440

Option 2 ID : 264330569439

Option 3 ID : 264330569442

Option 4 ID : 264330569441

Status : Not Attempted and Marked For Review

Chosen Option : --

Q.22 If A denotes '+', B denotes '×', C denotes '−', and D denotes '÷', then what will come in place of '?' in the following equation?  
 $2 B ? D 2 = 4 B 32 D 8$

- Ans
- 1. 12
  - 2. 30
  - 3. 16
  - 4. 8

Question ID : 26433067669

Option 1 ID : 264330265188

Option 2 ID : 264330265189

Option 3 ID : 264330265191

Option 4 ID : 264330265190

Status : Answered

Chosen Option : 3

Q.23 If '+' means 'x', 'x' means '-', '-' means '÷' and '÷' means '+', then what will come in place of the (?) in the following equation?  
 $250 - 10 + 10 \times 5 \div 2 = ?$

- Ans  1. 247  
 2. 167  
 3. 320  
 4. 234

Question ID : 264330114250  
Option 1 ID : 264330449087  
Option 2 ID : 264330449086  
Option 3 ID : 264330449088  
Option 4 ID : 264330449085  
Status : Answered  
Chosen Option : 1

Q.24 Four letter-clusters have been given, out of which three are alike in some manner and one is different. Select the odd letter-cluster.

- Ans  1. WYRS  
 2. PSJK  
 3. PRKL  
 4. FHAB

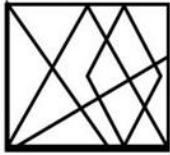
Question ID : 264330180750  
Option 1 ID : 264330708970  
Option 2 ID : 264330708969  
Option 3 ID : 264330708967  
Option 4 ID : 264330708968  
Status : Answered  
Chosen Option : 2

Q.25 In a certain code language, 'VATT' is coded as '65' and 'STOLK' is coded as '79'. How will 'GENEROUS' be coded in that language?

- Ans  1. 116  
 2. 216  
 3. 204  
 4. 106

Question ID : 26433079048  
Option 1 ID : 264330310198  
Option 2 ID : 264330310199  
Option 3 ID : 264330310196  
Option 4 ID : 264330310197  
Status : Answered  
Chosen Option : 4

**Q.26** Select the option that is embedded in the given figure as its part (rotation is NOT allowed).

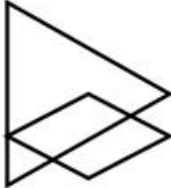


Ans

✓ 1.



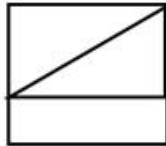
✗ 2.



✗ 3.



✗ 4.



Question ID : 264330145467

Option 1 ID : 264330570125

Option 2 ID : 264330570126

Option 3 ID : 264330570124

Option 4 ID : 264330570123

Status : Answered

Chosen Option : 1

**Q.27** If '+' means '÷', '-' means '+', '×' means '-' and '÷' means '×', what will be the value of the following expression?

$$[[(14 \times 6) - (4 \div 3)] + (6 - 4)] \div 3$$

Ans ✗ 1.3

✓ 2.6

✗ 3.1

✗ 4.9

Question ID : 264330129643

Option 1 ID : 264330507939

Option 2 ID : 264330507940

Option 3 ID : 264330507938

Option 4 ID : 264330507941

Status : Answered

Chosen Option : 2

**Q.28** Select the option that is related to the fifth letter-cluster in the same way as the second letter-cluster is related to the first letter-cluster and the fourth letter-cluster is related to the third letter-cluster.

TEMPLE : SCJLGY :: CHURCH : BFRNXB :: MOSQUE : ?

- Ans
- 1. LMPYPM
  - 2. LMPYMP
  - 3. LPYMMP
  - 4. LMPMPY

Question ID : 264330145394

Option 1 ID : 264330569831

Option 2 ID : 264330569834

Option 3 ID : 264330569833

Option 4 ID : 264330569832

Status : Answered

Chosen Option : 4

**Q.29** In a certain code language, 'COURT' is coded as OCRTR and 'JUDGE' is coded as UJAEG. How will 'ORDER' be coded in the same language?

- Ans
- 1. LDRRE
  - 2. ROARE
  - 3. REARO
  - 4. ROBRE

Question ID : 264330132206

Option 1 ID : 264330517919

Option 2 ID : 264330517921

Option 3 ID : 264330517920

Option 4 ID : 264330517922

Status : Answered

Chosen Option : 2

**Q.30** Which of the following numbers will replace the question mark (?) in the given series?  
115, 130, 122, 137, 129, ?

- Ans
- 1. 144
  - 2. 142
  - 3. 148
  - 4. 150

Question ID : 26433057327

Option 1 ID : 264330224293

Option 2 ID : 264330224292

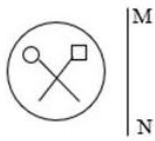
Option 3 ID : 264330224294

Option 4 ID : 264330224295

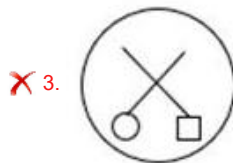
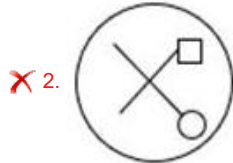
Status : Answered

Chosen Option : 1

**Q.31** Select the correct mirror image of the given figure when the mirror is placed at line MN as shown.



Ans



Question ID : 26433056630  
 Option 1 ID : 264330221506  
 Option 2 ID : 264330221507  
 Option 3 ID : 264330221504  
 Option 4 ID : 264330221505  
 Status : Answered  
 Chosen Option : 4

**Q.32** In a certain code language, 'FLORA' is written as 'WQOLC' and 'MONEY' is written as 'PNPYE'. How will 'GOING' be written in that language?

Ans ✓ 1. VNUPW

✗ 2. RMWEH

✗ 3. VBUDP

✗ 4. RHKSR

Question ID : 26433074757  
 Option 1 ID : 264330293118  
 Option 2 ID : 264330293119  
 Option 3 ID : 264330293116  
 Option 4 ID : 264330293117  
 Status : Answered  
 Chosen Option : 1

**Q.33** Select the set in which the numbers are related in the same way as are the numbers of the following set.

(NOTE : Operations should be performed on the whole numbers, without breaking down the numbers into its constituent digits. E.g. 13 – Operations on 13 such as adding /subtracting/ multiplying etc. to 13 can be performed. Breaking down 13 into 1 and 3 and then performing mathematical operations on 1 and 3 is NOT allowed)

(6, 2, 96)  
(5, 6, 240)

- Ans  1. (4,1,6)  
 2. (12,3,45)  
 3. (1,2,16)  
 4. (8,3,28)

Question ID : 264330145319

Option 1 ID : 264330569533

Option 2 ID : 264330569531

Option 3 ID : 264330569534

Option 4 ID : 264330569532

Status : Answered

Chosen Option : 3

**Q.34** Study the given pattern carefully and select the number that can replace the question mark (?) in it.

First row: 19, 6, 37

Second row: 21, 8, 45

Third row: 72, 14, ?

(NOTE : Operations should be performed on the whole numbers, without breaking down the numbers into its constituent digits. E.g. 13 – Operations on 13 such as adding /subtracting /multiplying etc. to 13 can be performed. Breaking down 13 into 1 and 3 and then performing mathematical operations on 1 and 3 is not allowed)

- Ans  1. 124  
 2. 134  
 3. 114  
 4. 144

Question ID : 26433068248

Option 1 ID : 264330267505

Option 2 ID : 264330267504

Option 3 ID : 264330267506

Option 4 ID : 264330267507

Status : Not Answered

Chosen Option : --

**Q.35** If A denotes '+', B denotes '×', C denotes '-', and D denotes '÷', then what will be the value of the following expression?  
39 D 13 B 2 C 6 A 8

- Ans  1. 10  
 2. 8  
 3. 12  
 4. 9

Question ID : 26433068700

Option 1 ID : 264330269314

Option 2 ID : 264330269313

Option 3 ID : 264330269312

Option 4 ID : 264330269315

Status : Answered

Chosen Option : 2

**Q.36** Select the set in which the numbers are related in the same way as are the numbers of the following sets.

(NOTE : Operations should be performed on the whole numbers, without breaking down the numbers into its constituent digits. E.g. 13- Operations on 13 such as adding /subtracting /multiplying etc. to 13 can be performed. Breaking down 13 into 1 and 3 and then performing mathematical operations on 1 and 3 is not allowed.)

(7, 91, 98)  
(4, 52, 56)

Ans  1. (12, 156, 168)

2. (3, 36, 42)

3. (8, 80, 96)

4. (5, 25, 60)

Question ID : 26433057449

Option 1 ID : 264330224782

Option 2 ID : 264330224781

Option 3 ID : 264330224783

Option 4 ID : 264330224780

Status : Answered

Chosen Option : 1

**Q.37** If A denotes '+', B denotes '×', C denotes '−', and D denotes '÷', then what will be the value of the following equation?  
96 D 3 B 8 C 25 A 14 = ?

Ans  1. 217

2. 234

3. 254

4. 245

Question ID : 264330129781

Option 1 ID : 264330508356

Option 2 ID : 264330508358

Option 3 ID : 264330508357

Option 4 ID : 264330508355

Status : Answered

Chosen Option : 4

**Q.38** If A denotes '+', B denotes '×', C denotes '−', and D denotes '÷', then what will come in place of '?' in the following equation?  
7 A 3 B 24 D 2 = 20 B ? A 3

Ans  1. 2

2. 20

3. 14

4. 7

Question ID : 26433067663

Option 1 ID : 264330265167

Option 2 ID : 264330265164

Option 3 ID : 264330265166

Option 4 ID : 264330265165

Status : Answered

Chosen Option : 1



Q.39 Which of the following numbers will replace the question mark (?) in the given series?

35, ?, 40, 47, 45, 53

- Ans
- 1. 37
  - 2. 43
  - 3. 42
  - 4. 41

Question ID : 26433091009

Option 1 ID : 264330357446

Option 2 ID : 264330357448

Option 3 ID : 264330357445

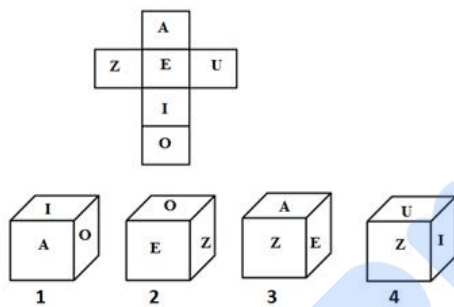
Option 4 ID : 264330357447

Status : Answered

Chosen Option : 4

Q.40 If the given sheet is folded to form a cube, which of the given figures is/are possible?

(The elements are shown to indicate the sides only.)



- Ans
- 1. Only 1 and 2
  - 2. Only 1, 2 and 4
  - 3. Only 2 and 3
  - 4. Only 3

Question ID : 26433065678

Option 1 ID : 264330257272

Option 2 ID : 264330257275

Option 3 ID : 264330257273

Option 4 ID : 264330257274

Status : Answered

Chosen Option : 4

**Q.41** Which figure from the given options would replace the question mark (?) if the following figure series were to be continued?

BLAST	LBPTS	SLBPT	LSCTP	?
-------	-------	-------	-------	---

Ans

✗ 1.

SLDPT

✗ 2.

SCTPL

✗ 3.

PLTSC

✓ 4.

PLSCT

Question ID : 264330145482

Option 1 ID : 264330570185

Option 2 ID : 264330570183

Option 3 ID : 264330570186

Option 4 ID : 264330570184

Status : Answered

Chosen Option : 4

**Q.42** Which of the following numbers will replace the question mark (?) in the given series?  
 $-1/729, -1/81, -1/9, ?$

Ans ✗ 1. 1

✓ 2. -1

✗ 3. -1/3

✗ 4. 1/3

Question ID : 26433092495

Option 1 ID : 264330363269

Option 2 ID : 264330363270

Option 3 ID : 264330363271

Option 4 ID : 264330363272

Status : Answered

Chosen Option : 3

Q.43 Which letter-cluster will replace the question mark (?) to complete the given series?  
MKPN, LMOP, ?, JQMT, ISLV

- Ans
- 1. KOLT
  - 2. KNNQ
  - 3. KNMR
  - 4. KONR

Question ID : 26433076662  
Option 1 ID : 264330300715  
Option 2 ID : 264330300714  
Option 3 ID : 264330300712  
Option 4 ID : 264330300713  
Status : Answered  
Chosen Option : 4

Q.44 Select the option that is related to the third word in the same way as the second word is related to the first word. (The words must be considered as meaningful words and must not be related to each other based on the number of letters/number of consonants/vowels in the word.)  
Butterfly : Caterpillar :: Insect : ?

- Ans
- 1. Cygnet
  - 2. Nymph
  - 3. Larva
  - 4. Microbes

Question ID : 26433091602  
Option 1 ID : 264330359775  
Option 2 ID : 264330359774  
Option 3 ID : 264330359773  
Option 4 ID : 264330359776  
Status : Answered  
Chosen Option : 3

Q.45 Six friends are sitting in a circle. All of them are facing the centre. Kanak sits third to the right of Sona. Kapil is an immediate neighbour of Mani. Goldy sits second to the right of Mani. Sona is an immediate neighbour of Kapil and Suresh. Who sits to the immediate right of Goldy?

- Ans
- 1. Sona
  - 2. Kapil
  - 3. Kanak
  - 4. Suresh

Question ID : 264330145405  
Option 1 ID : 264330569877  
Option 2 ID : 264330569876  
Option 3 ID : 264330569875  
Option 4 ID : 264330569878  
Status : Answered  
Chosen Option : 4

Q.46 L is the wife of Q. P is the mother of M. J is the father of L. M is the sister of H. J is the husband of H. How is P related to L?

- Ans  1. Mother's mother  
 2. Sister's son  
 3. Mother's sister  
 4. Sister's husband

Question ID : 264330126021  
Option 1 ID : 264330493757  
Option 2 ID : 264330493759  
Option 3 ID : 264330493756  
Option 4 ID : 264330493758  
Status : Answered  
Chosen Option : 1

Q.47 'A = B' means 'A is the father of B'.  
'A \$ B' means 'A is the sister of B'.  
'A \* B' means 'A is the mother of B'.  
'A ? B' means 'A is the son of B'.  
If M ? C \$ J \* Z, then how is J related to M?

- Ans  1. Sister  
 2. Mother's sister  
 3. Mother's mother  
 4. Brother

Question ID : 264330145385  
Option 1 ID : 264330569795  
Option 2 ID : 264330569798  
Option 3 ID : 264330569797  
Option 4 ID : 264330569796  
Status : Answered  
Chosen Option : 2

Q.48 Rohit drives 3 km towards north from point A. He takes a left turn and drives 4 km. Again he takes a left turn and drives 6 km. Finally, he takes a left turn and drives 4 km to reach point B. How far and towards which direction should he drive in order to reach point A again?

- Ans  1. 4 km towards south  
 2. 3 km towards east  
 3. 3 km towards north  
 4. 2 km towards west

Question ID : 26433068272  
Option 1 ID : 264330267600  
Option 2 ID : 264330267603  
Option 3 ID : 264330267601  
Option 4 ID : 264330267602  
Status : Answered  
Chosen Option : 3



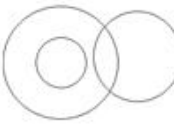

**Q.49** In a certain code language, 'FRIEND' is written as 'IIFDME' and 'DEMAND' is written as 'MVDDMA'. How will 'GROUND' be written in that language?

- Ans
- 1. DOTENC
  - 2. PXKRYs
  - 3. OIGDMU
  - 4. OFTSBU

Question ID : 26433074762  
 Option 1 ID : 264330293138  
 Option 2 ID : 264330293139  
 Option 3 ID : 264330293137  
 Option 4 ID : 264330293136  
 Status : Answered  
 Chosen Option : 3

**Q.50** Select the Venn diagram that best illustrates the relationship between the following classes.

Pencil, Eraser, Sharpener

- Ans
- 1. 
  - 2. 
  - 3. 
  - 4. 

Question ID : 264330145357  
 Option 1 ID : 264330569683  
 Option 2 ID : 264330569686  
 Option 3 ID : 264330569685  
 Option 4 ID : 264330569684  
 Status : Answered  
 Chosen Option : 2

Section : General Knowledge and General Awareness

**Q.1** Which of the following does NOT belong to the family of organic compounds?

- Ans
- 1. Ammonia
  - 2. Nonane
  - 3. Furan
  - 4. Decane

Question ID : 264330131690  
 Option 1 ID : 264330515860  
 Option 2 ID : 264330515859  
 Option 3 ID : 264330515862  
 Option 4 ID : 264330515861  
 Status : Answered  
 Chosen Option : 2

**Q.2** In November 2020, \_\_\_\_\_ has set a record of becoming the world's fastest piano player ever.

- Ans** ✓ 1. Lydian Nadhaswaram  
✗ 2. Anisrinivasan  
✗ 3. Gauri Mishra  
✗ 4. Shikha Chaurasia

Question ID : 264330145151  
Option 1 ID : 264330568862  
Option 2 ID : 264330568861  
Option 3 ID : 264330568859  
Option 4 ID : 264330568860  
Status : Answered  
Chosen Option : 4

**Q.3** For Kharif crops, the temperature required for farming is above 25 degrees Celsius with high humidity and annual rainfall above \_\_\_\_\_ cm.

- Ans** ✗ 1. 16  
✓ 2. 100  
✗ 3. 35  
✗ 4. 50

Question ID : 264330163197  
Option 1 ID : 264330640099  
Option 2 ID : 264330640102  
Option 3 ID : 264330640101  
Option 4 ID : 264330640100  
Status : Answered  
Chosen Option : 1

**Q.4** Bhotia dance is performed in which of the following states?

- Ans** ✗ 1. West Bengal  
✗ 2. Odisha  
✓ 3. Sikkim  
✗ 4. Nagaland

Question ID : 264330164793  
Option 1 ID : 264330646300  
Option 2 ID : 264330646302  
Option 3 ID : 264330646299  
Option 4 ID : 264330646301  
Status : Answered  
Chosen Option : 2

**Q.5** With which neighbouring country did India sign the Farakka Treaty in 1996 for sharing of the Ganga Waters and on augmenting its flows?

- Ans** ✗ 1. Bhutan  
✓ 2. Bangladesh  
✗ 3. Nepal  
✗ 4. Afghanistan

Question ID : 264330111362  
Option 1 ID : 264330437536  
Option 2 ID : 264330437534  
Option 3 ID : 264330437535  
Option 4 ID : 264330437533  
Status : Answered  
Chosen Option : 2

**Q.6** Which ruler of the Chahamana dynasty made Ajmer his capital?

- Ans  1. Ajayaraja  
 2. Prithviraj II  
 3. Arnoraj  
 4. Prithviraj III

Question ID : 264330109001  
Option 1 ID : 264330428282  
Option 2 ID : 264330428283  
Option 3 ID : 264330428281  
Option 4 ID : 264330428284  
Status : Not Answered  
Chosen Option : --

**Q.7** How many Members of Parliament were elected from Punjab to the 17th Lok Sabha?

- Ans  1. 14  
 2. 15  
 3. 13  
 4. 17

Question ID : 264330114610  
Option 1 ID : 264330450526  
Option 2 ID : 264330450527  
Option 3 ID : 264330450525  
Option 4 ID : 264330450528  
Status : Answered  
Chosen Option : 4

**Q.8** In India, which of the following regulatory mechanisms was NOT in existence to enforce regulation of the industrial sector?

- Ans  1. Industrial licensing under which every entrepreneur had to get permission from government officials to start a firm, close a firm or decide the amount of goods that could be produced.  
 2. Controls on price fixation and distribution of selected industrial products.  
 3. Private sector was allowed in all industries.  
 4. Some goods could be produced only in small-scale industries.

Question ID : 26433064577  
Option 1 ID : 264330252900  
Option 2 ID : 264330252903  
Option 3 ID : 264330252901  
Option 4 ID : 264330252902  
Status : Not Attempted and Marked For Review  
Chosen Option : --

**Q.9** Who among the following Indian authors has written the autobiography titled 'My Story'?

- Ans**
- 1. Arundhati Roy
  - 2. Shobha Dey
  - 3. Kiran Desai
  - 4. Kamala Das

Question ID : 26433071471  
Option 1 ID : 264330280310  
Option 2 ID : 264330280309  
Option 3 ID : 264330280311  
Option 4 ID : 264330280308  
Status : Answered  
Chosen Option : 2

**Q.10** Methyl ethyl ketone is also known as:

- Ans**
- 1. 2-butanone
  - 2. propanone
  - 3. methyl pentanone
  - 4. 2-butanol

Question ID : 264330131776  
Option 1 ID : 264330516205  
Option 2 ID : 264330516203  
Option 3 ID : 264330516206  
Option 4 ID : 264330516204  
Status : Answered  
Chosen Option : 4

**Q.11** Which of the following statements is NOT correct about fundamental duties in the Indian Constitution?

- Ans**
- 1. They are made to value and preserve the rich heritage of our composite culture.
  - 2. They are made to cherish and follow the noble ideals which inspired our national struggle for freedom.
  - 3. They are made to develop the scientific temper, humanism and the spirit of inquiry and reform.
  - 4. They are made justiciable in nature.

Question ID : 264330113382  
Option 1 ID : 264330445614  
Option 2 ID : 264330445615  
Option 3 ID : 264330445616  
Option 4 ID : 264330445613  
Status : Not Attempted and Marked For Review  
Chosen Option : --



Q.12 Who was the first chairman of Finance Commission of India?

- Ans  1. Ashok Kumar Chanda  
 2. KC Neogy  
 3. K Santhanam  
 4. PV Rajamannar

Question ID : 264330133074  
Option 1 ID : 264330521349  
Option 2 ID : 264330521347  
Option 3 ID : 264330521348  
Option 4 ID : 264330521350  
Status : Not Answered  
Chosen Option : --

Q.13 The First Commonwealth Games were organised in which of the following years?

- Ans  1. 1920  
 2. 1930  
 3. 1922  
 4. 1926

Question ID : 264330118888  
Option 1 ID : 264330466207  
Option 2 ID : 264330466210  
Option 3 ID : 264330466208  
Option 4 ID : 264330466209  
Status : Answered  
Chosen Option : 1

Q.14 Continental Shelf which is the shallowest part of the ocean has an average gradient of:

- Ans  1. 8° or even less  
 2. 1° or even less  
 3. 5° or even less  
 4. 2° or even less

Question ID : 26433055832  
Option 1 ID : 264330218315  
Option 2 ID : 264330218312  
Option 3 ID : 264330218314  
Option 4 ID : 264330218313  
Status : Answered  
Chosen Option : 3

Q.15 Dhruvasena II is related to which of the following ruling dynasties?

- Ans  1. Vakataka  
 2. Pushyabhuti  
 3. Maitraka  
 4. Maukhari

Question ID : 264330165568  
Option 1 ID : 264330649354  
Option 2 ID : 264330649353  
Option 3 ID : 264330649351  
Option 4 ID : 264330649352  
Status : Answered  
Chosen Option : 2

**Q.16 Under which of the following Acts was the National Commission for Women established?**

- Ans**
- 1. The National Commission for Women Act, 1989
  - 2. The National Commission for Women Act, 1987
  - 3. The National Commission for Women Act, 1990
  - 4. The National Commission for Women Act, 1988

Question ID : 264330145264  
Option 1 ID : 264330569313  
Option 2 ID : 264330569311  
Option 3 ID : 264330569314  
Option 4 ID : 264330569312  
Status : Answered  
Chosen Option : 4

**Q.17 Identify the position of stomata in plants.**

- Ans**
- 1. Tip of stem
  - 2. Inside the roots
  - 3. Inside the flower
  - 4. Surface of leaves

Question ID : 26433064754  
Option 1 ID : 264330253610  
Option 2 ID : 264330253608  
Option 3 ID : 264330253611  
Option 4 ID : 264330253609  
Status : Answered  
Chosen Option : 1

**Q.18 Who among the following has given extraordinary powers during an emergency?**

- Ans**
- 1. Prime Minister
  - 2. The Chief Justice
  - 3. The President
  - 4. The Governor

Question ID : 264330118528  
Option 1 ID : 264330465513  
Option 2 ID : 264330465515  
Option 3 ID : 264330465514  
Option 4 ID : 264330465516  
Status : Answered  
Chosen Option : 3

**Q.19 In India all loans that are below \_\_\_\_\_ are considered as micro loans.**

- Ans**
- 1. one lakh rupees
  - 2. two lakh rupees
  - 3. four lakh rupees
  - 4. three lakh rupees

Question ID : 264330145237  
Option 1 ID : 264330569203  
Option 2 ID : 264330569204  
Option 3 ID : 264330569206  
Option 4 ID : 264330569205  
Status : Answered  
Chosen Option : 2

**Q.20** Identify whether the given statements about p-block elements are correct or incorrect.  
Statement A: In p-block elements, the last electron enters the outermost p orbital.  
Statement B: The non-metals and metalloids exist only in the p-block of the periodic table.

- Ans  1. Both Statements A and B are correct  
 2. Only Statement A is correct  
 3. Both Statements A and B are incorrect  
 4. Only Statement B is correct

Question ID : 264330137995  
Option 1 ID : 264330540590  
Option 2 ID : 264330540587  
Option 3 ID : 264330540588  
Option 4 ID : 264330540589

Status : Answered

Chosen Option : 1

**Q.21** Vallabhbhai Patel and \_\_\_\_\_ helped Gandhi in Kheda by organising his tour of the villages and urging the peasants to stand firm against the government.

- Ans  1. Jamunalal Bajaj  
 2. Mohammad Ali Jinnah  
 3. Motilal Nehru  
 4. Indulal Yajnik

Question ID : 264330165396  
Option 1 ID : 264330648666  
Option 2 ID : 264330648664  
Option 3 ID : 264330648663  
Option 4 ID : 264330648665

Status : Answered

Chosen Option : 3

**Q.22** The deliberations of the representatives at the Third Round Table Conference was held during the later months of which year?

- Ans  1. 1932  
 2. 1929  
 3. 1930  
 4. 1931

Question ID : 264330112181  
Option 1 ID : 264330440811  
Option 2 ID : 264330440810  
Option 3 ID : 264330440809  
Option 4 ID : 264330440812

Status : Answered

Chosen Option : 4

Q.23 Which part of the Indian Constitution deals with fundamental rights?

- Ans  1. Part III  
 2. Part II  
 3. Part V  
 4. Part IV

Question ID : 264330111518  
Option 1 ID : 264330438158  
Option 2 ID : 264330438157  
Option 3 ID : 264330438160  
Option 4 ID : 264330438159  
Status : Answered  
Chosen Option : 1

Q.24 At normal temperature and atmospheric pressure, \_\_\_\_\_ has a density of  $1.87 \text{ kg/m}^3$ , which is 1.5 times heavier than air and exists as a liquid below the critical temperature of  $31^\circ\text{C}$ .

- Ans  1. carbon dioxide  
 2. nitrogen  
 3. hydrogen  
 4. lithium

Question ID : 264330110060  
Option 1 ID : 264330432517  
Option 2 ID : 264330432518  
Option 3 ID : 264330432519  
Option 4 ID : 264330432520  
Status : Not Attempted and Marked For Review  
Chosen Option : --

Q.25 Sao Joao festival is celebrated primarily by the Catholic Christians in which of the following Indian states?

- Ans  1. Assam  
 2. Goa  
 3. Manipur  
 4. Nagaland

Question ID : 26433064692  
Option 1 ID : 264330253361  
Option 2 ID : 264330253360  
Option 3 ID : 264330253362  
Option 4 ID : 264330253363  
Status : Not Answered  
Chosen Option : --

**Q.26** According to the Global Hunger Index 2022, which neighbouring country is only behind India with a rank of 109 out of 121 countries?

- Ans
- 1. Bangladesh
  - 2. Afghanistan
  - 3. Nepal
  - 4. Pakistan

Question ID : 264330157103  
Option 1 ID : 264330615783  
Option 2 ID : 264330615786  
Option 3 ID : 264330615784  
Option 4 ID : 264330615785  
Status : Answered  
Chosen Option : 4

**Q.27** Which of the following was established by Jyotirao Govindrao Phule in 1873 to fight against idolatry and caste system?

- Ans
- 1. Shree Narayan Guru Dharma Paripalana (SNDP) Movement
  - 2. Satyashodhak Samaj
  - 3. Young Bengal Movement
  - 4. Arya Samaj

Question ID : 26433099177  
Option 1 ID : 264330389321  
Option 2 ID : 264330389324  
Option 3 ID : 264330389322  
Option 4 ID : 264330389323  
Status : Answered  
Chosen Option : 1

**Q.28** Who is the first Indian to participate in a Super Heavyweight Boxing event in the 2020 Olympic Games?

- Ans
- 1. Satish Kumar
  - 2. Manish Harshit
  - 3. Sakshi Chaudhary
  - 4. Amit Panghal

Question ID : 26433096226  
Option 1 ID : 264330377658  
Option 2 ID : 264330377659  
Option 3 ID : 264330377660  
Option 4 ID : 264330377657  
Status : Answered  
Chosen Option : 3

**Q.29** Prithviraj Raso, an epic poem about the life of the 12<sup>th</sup> century Indian king, Prithviraj Chauhan, was written by:

- Ans**
- 1. Banabhatta
  - 2. Ashvaghosa
  - 3. Bharavi
  - 4. Chand Bardai

Question ID : 26433071390  
Option 1 ID : 264330279986  
Option 2 ID : 264330279984  
Option 3 ID : 264330279985  
Option 4 ID : 264330279987  
Status : Answered  
Chosen Option : 4

**Q.30** Which is the most widely accepted model to explain the formation and evolution of the solar system?

- Ans**
- 1. Nebular hypothesis
  - 2. Gas hypothesis
  - 3. Solar hypothesis
  - 4. Cloud hypothesis

Question ID : 264330113348  
Option 1 ID : 264330445478  
Option 2 ID : 264330445480  
Option 3 ID : 264330445479  
Option 4 ID : 264330445477  
Status : Answered  
Chosen Option : 1

**Q.31** How many controls are there globally that influence the climate of a particular zone?

- Ans**
- 1. 8
  - 2. 6
  - 3. 3
  - 4. 5

Question ID : 264330163229  
Option 1 ID : 264330640230  
Option 2 ID : 264330640229  
Option 3 ID : 264330640227  
Option 4 ID : 264330640228  
Status : Not Answered  
Chosen Option : --

**Q.32** Moatsu festival of Nagaland is celebrated by which of the following tribes?

- Ans**
- 1. Bhil tribe
  - 2. Ao tribe
  - 3. Munda tribe
  - 4. Bodo tribe

Question ID : 264330164802  
Option 1 ID : 264330646337  
Option 2 ID : 264330646335  
Option 3 ID : 264330646338  
Option 4 ID : 264330646336  
Status : Answered  
Chosen Option : 1

**Q.33 Which of the following is considered as a good indicator of economic growth?**

- Ans**
- 1. Steady increase in loan
  - 2. Steady increase in international trade
  - 3. Steady increase in population
  - 4. Steady increase in the GDP

Question ID : 26433054585  
Option 1 ID : 264330213326  
Option 2 ID : 264330213327  
Option 3 ID : 264330213324  
Option 4 ID : 264330213325  
Status : Answered  
Chosen Option : 4

**Q.34 What is the full form of PPLO with respect to bacteria?**

- Ans**
- 1. Pleuro Pneumonia Like Organisms
  - 2. Pleuro Platelet Like Organisms
  - 3. Platelet Prone Like Organisms
  - 4. Pneumonia Platelet Like Organisms

Question ID : 264330145218  
Option 1 ID : 264330569127  
Option 2 ID : 264330569129  
Option 3 ID : 264330569128  
Option 4 ID : 264330569130  
Status : Answered  
Chosen Option : 2

**Q.35 Which of the following algae is also called kelp and found in the deep sea?**

- Ans**
- 1. Chlamydomona
  - 2. Fucus
  - 3. Laminaria
  - 4. Nostoc

Question ID : 26433089669  
Option 1 ID : 264330352180  
Option 2 ID : 264330352177  
Option 3 ID : 264330352178  
Option 4 ID : 264330352179  
Status : Answered  
Chosen Option : 3

**Q.36 Atal Tunnel connects which two places?**

- Ans**
- 1. Manali and Lahaul-Spiti valley
  - 2. Shimla and Nainital
  - 3. Shimla and Mansoori
  - 4. Manali and Nainital

Question ID : 264330112690  
Option 1 ID : 264330442845  
Option 2 ID : 264330442848  
Option 3 ID : 264330442847  
Option 4 ID : 264330442846  
Status : Answered  
Chosen Option : 1

**Q.37** Priorities of the government in the fiscal area and its related policies and deviations are mentioned in which part of the budget document?

- Ans
- 1. Fiscal Policy Strategy Statement
  - 2. Appropriation Bill
  - 3. Macroeconomic Framework Statement
  - 4. Medium-term Fiscal Policy Statement

Question ID : 264330141437  
Option 1 ID : 264330554084  
Option 2 ID : 264330554086  
Option 3 ID : 264330554085  
Option 4 ID : 264330554083  
Status : Answered  
Chosen Option : 4

**Q.38** The structure that produces and holds sperm cells in bryophytes (non-vascular plants) and ferns is called:

- Ans
- 1. megasporangia
  - 2. archegonium
  - 3. antheridium
  - 4. protonema

Question ID : 264330145205  
Option 1 ID : 264330569075  
Option 2 ID : 264330569076  
Option 3 ID : 264330569077  
Option 4 ID : 264330569078  
Status : Answered  
Chosen Option : 2

**Q.39** Shore temple of Mamallapuram was built by:

- Ans
- 1. Pallavas
  - 2. Chalukayas
  - 3. Nagas
  - 4. Cholas

Question ID : 264330164857  
Option 1 ID : 264330646557  
Option 2 ID : 264330646558  
Option 3 ID : 264330646555  
Option 4 ID : 264330646556  
Status : Answered  
Chosen Option : 1

**Q.40** Dr. Teejan Bai, a Padma Shri, Padma Bhushan and Padma Vibhushan awardee is globally recognised for her contribution to which of the following art forms?

- Ans
- 1. Gendi
  - 2. Pandavani
  - 3. Raut Nacha.
  - 4. Jhirliti

Question ID : 264330145167  
Option 1 ID : 264330568925  
Option 2 ID : 264330568924  
Option 3 ID : 264330568926  
Option 4 ID : 264330568923  
Status : Answered  
Chosen Option : 2



**Q.41** In how many phases did the Indian Economy experience the success of the Green Revolution?

- Ans  1. Two  
 2. Three  
 3. Five  
 4. Four

Question ID : 264330145245  
Option 1 ID : 264330569235  
Option 2 ID : 264330569236  
Option 3 ID : 264330569238  
Option 4 ID : 264330569237  
Status : Answered  
Chosen Option : 4

**Q.42** Which of the following statement is correct regarding climate of Indian subcontinent?

- A. The climate of North India remains similar throughout the year  
B. The Himalayas protect the subcontinent from extremely cold winds from central Asia.

- Ans  1. Only Statement B is correct  
 2. Both Statements A and B incorrect  
 3. Only Statement A is correct  
 4. Both Statements A and B correct

Question ID : 264330121168  
Option 1 ID : 264330474878  
Option 2 ID : 264330474877  
Option 3 ID : 264330474875  
Option 4 ID : 264330474876  
Status : Not Answered  
Chosen Option : --

**Q.43** In a volleyball game, each team comprise of how many players?

- Ans  1. 5  
 2. 6  
 3. 8  
 4. 7

Question ID : 264330109851  
Option 1 ID : 264330431681  
Option 2 ID : 264330431682  
Option 3 ID : 264330431684  
Option 4 ID : 264330431683  
Status : Answered  
Chosen Option : 2

Q.44 What is Kalbaisakhi?

- Ans  1. Pre monsoon showers and thunderstorms  
 2. Cold waves and rains  
 3. Snowfall and hail  
 4. Heatwaves and loo

Question ID : 264330119786  
Option 1 ID : 264330469420  
Option 2 ID : 264330469419  
Option 3 ID : 264330469421  
Option 4 ID : 264330469422  
Status : Not Answered  
Chosen Option : --

Q.45 Which of the following books is an autobiography of the former American president Bill Clinton?

- Ans  1. Becoming  
 2. My Life  
 3. Long Walk to Freedom  
 4. My Country My Life

Question ID : 264330145176  
Option 1 ID : 264330568959  
Option 2 ID : 264330568960  
Option 3 ID : 264330568961  
Option 4 ID : 264330568962  
Status : Answered  
Chosen Option : 1

Q.46 Tansen, the famous musician, often sang in the court of which ruler?

- Ans  1. Sher Shah Suri  
 2. Akbar  
 3. Feroz Shah Tughlaq  
 4. Allaudin Khilji

Question ID : 26433074852  
Option 1 ID : 264330293499  
Option 2 ID : 264330293497  
Option 3 ID : 264330293498  
Option 4 ID : 264330293496  
Status : Answered  
Chosen Option : 2

Q.47 Who among the following founded the Kalakshetra Foundation in Chennai that is an important centre for the study and performance of fine arts?

- Ans  1. Rukmini Devi Arundale  
 2. Yamini Krishnamurthy  
 3. Mrinalini Sarabhai  
 4. Alarmel Valli

Question ID : 26433054507  
Option 1 ID : 264330213015  
Option 2 ID : 264330213013  
Option 3 ID : 264330213014  
Option 4 ID : 264330213012  
Status : Answered  
Chosen Option : 1

**Q.48** Which German chemist was the first to show a graphical representation of the periodicity of an atomic volume plotted against atomic weight?

- Ans**  1. Lothar Meyer  
 2. John Newlands  
 3. William Ramsay  
 4. Glenn T Seaborg

Question ID : 264330110063  
Option 1 ID : 264330432532  
Option 2 ID : 264330432530  
Option 3 ID : 264330432531  
Option 4 ID : 264330432529  
Status : Answered  
Chosen Option : 2

**Q.49** Which of the following is NOT an Equestrian discipline?

- Ans**  1. Dressage  
 2. Sprint  
 3. Show jumping  
 4. Vaulting

Question ID : 26433089944  
Option 1 ID : 264330353253  
Option 2 ID : 264330353256  
Option 3 ID : 264330353255  
Option 4 ID : 264330353254  
Status : Answered  
Chosen Option : 1

**Q.50** The Guru Kelucharan Mohapatra Yuva Pratibha Samman 2021 was presented to Arushi Mudgal for \_\_\_\_\_ dance.

- Ans**  1. Mohiniyattam  
 2. Odissi  
 3. Kuchipudi  
 4. Kathak

Question ID : 26433054500  
Option 1 ID : 264330212985  
Option 2 ID : 264330212986  
Option 3 ID : 264330212984  
Option 4 ID : 264330212987  
Status : Answered  
Chosen Option : 2

Section : Quantitative Aptitude

Q.1 The radii of two cylinders are in the ratio of 4 : 5 and their heights are in the ratio of 5 : 2. The ratio of their volume is:

- Ans
- 1. 9 : 4
  - 2. 2 : 1
  - 3. 9 : 7
  - 4. 8 : 5

Question ID : 264330145138  
Option 1 ID : 264330568807  
Option 2 ID : 264330568809  
Option 3 ID : 264330568810  
Option 4 ID : 264330568808  
Status : Answered  
Chosen Option : 2

Q.2 A person crosses a 900-metre long street in 6 minutes. The speed of the person, in km/h, is:

- Ans
- 1. 10
  - 2. 9
  - 3. 5
  - 4. 8

Question ID : 264330103677  
Option 1 ID : 264330407016  
Option 2 ID : 264330407013  
Option 3 ID : 264330407015  
Option 4 ID : 264330407014  
Status : Answered  
Chosen Option : 2

Q.3 If 3 goats or 5 sheep can graze a field in 54 days, then in how many days can 6 goats and 8 sheep graze the same field?

- Ans
- 1. 15
  - 2. 12
  - 3. 10
  - 4. 8

Question ID : 264330102379  
Option 1 ID : 264330401984  
Option 2 ID : 264330401983  
Option 3 ID : 264330401982  
Option 4 ID : 264330401981  
Status : Not Attempted and Marked For Review  
Chosen Option : --

**Q.4** An item with a marked price of ₹3,800 was sold for ₹3,496, after a discount of  $y\%$  was offered. What was the value of  $y$ ?

- Ans
- 1. 7.5%
  - 2. 8.5%
  - 3. 8%
  - 4. 7%

Question ID : 264330131158

Option 1 ID : 264330513744

Option 2 ID : 264330513746

Option 3 ID : 264330513745

Option 4 ID : 264330513743

Status : Marked For Review

Chosen Option : 2

**Q.5** A dishonest dealer announces selling his articles with 22% loss, but uses 35% lighter weights. What is the percentage of his profit or loss?

- Ans
- 1. 20% loss
  - 2. 13% profit
  - 3. 13% loss
  - 4. 20% profit

Question ID : 264330131522

Option 1 ID : 264330515192

Option 2 ID : 264330515191

Option 3 ID : 264330515194

Option 4 ID : 264330515193

Status : Answered

Chosen Option : 2

**Q.6** The following table represents the population of four different areas and the percentage of males, females, and children among them.

Area	Population	Males	Females	Children
P	10,000	40%	40%	20%
Q	20,000	30%	40%	30%
R	16,000	50%	30%	20%
S	18,000	45%	35%	20%

What is the total number of children in areas P and Q together?

- Ans
- 1. 7000
  - 2. 9000
  - 3. 6000
  - 4. 8000

Question ID : 264330167249

Option 1 ID : 264330655992

Option 2 ID : 264330655994

Option 3 ID : 264330655991

Option 4 ID : 264330655993

Status : Answered

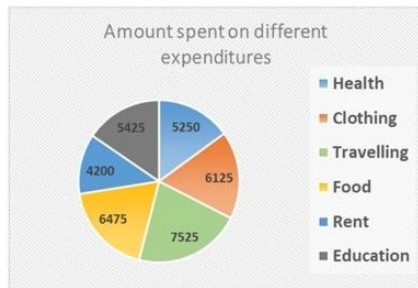
Chosen Option : 4

Q.7 If  $\theta$  is an acute angle and  $\sin \theta + \operatorname{cosec} \theta = 2$ , then the value of  $\sin^5 \theta + \operatorname{cosec}^5 \theta$  is:

- Ans  1. 10  
 2. 2  
 3. 4  
 4. 5

Question ID : 264330145132  
 Option 1 ID : 264330568786  
 Option 2 ID : 264330568783  
 Option 3 ID : 264330568784  
 Option 4 ID : 264330568785  
 Status : Answered  
 Chosen Option : 2

Q.8 What is the central angle corresponding to the expenditure spent on Education in the given figure?



- Ans  1.  $55.8^\circ$   
 2.  $55.2^\circ$   
 3.  $52^\circ$   
 4.  $42^\circ$

Question ID : 26433081650  
 Option 1 ID : 264330320435  
 Option 2 ID : 264330320434  
 Option 3 ID : 264330320433  
 Option 4 ID : 264330320436  
 Status : Not Attempted and Marked For Review  
 Chosen Option : --

Q.9 Evaluate  $\frac{0.04}{0.05}$  of  $\frac{\left(3\frac{1}{3} - 2\frac{1}{2}\right) \div \frac{1}{2} \text{ of } 1\frac{1}{4}}{\frac{1}{3} + \frac{1}{5} \text{ of } \frac{1}{9}}$

- Ans  1. 0.3  
 2. 5  
 3. 3  
 4. 0.03

Question ID : 26433063988  
 Option 1 ID : 264330250544  
 Option 2 ID : 264330250547  
 Option 3 ID : 264330250545  
 Option 4 ID : 264330250546  
 Status : Not Attempted and Marked For Review  
 Chosen Option : --

Q.10

If  $\tan A = \frac{4}{3}$ ,  $0 \leq A \leq 90^\circ$ , then find the value of  $\sin A$ .

Ans

1.  $\frac{3}{5}$

2. 1

3.  $\frac{3}{4}$

4.  $\frac{4}{5}$

Question ID : 264330157755

Option 1 ID : 264330618380

Option 2 ID : 264330618382

Option 3 ID : 264330618381

Option 4 ID : 264330618379

Status : Answered

Chosen Option : 4

Q.11 Find the LCM of 15, 24, 35 and 54.

1. 5670

2. 7560

3. 7650

4. 6570

Question ID : 26433073065

Option 1 ID : 264330286454

Option 2 ID : 264330286453

Option 3 ID : 264330286452

Option 4 ID : 264330286455

Status : Answered

Chosen Option : 2

**Q.12** Study the given data and answer the question that follows.

The data shows the number of candidates (in thousand) appearing for Civil Service (CS) and Engineering Service (ES) Examinations in the years 2020, 2021, 2022 in USA.

Year	Civil Service		Engineering Service	
	Total No. of Candidates Appeared	Graduates out of the total candidates appeared (in %)	Total No. of Candidates Appeared	Graduates out of the total candidates appeared (in %)
2020	75	60	89	57
2021	110	64	118	65
2022	120	80	135	78

What is total number of graduates who appeared for both CS and ES together in the year 2022?

- Ans**
- 1. 2,01,000
  - 2. 2,01,100
  - 3. 2,01,300
  - 4. 2,01,200

Question ID : 264330158260  
 Option 1 ID : 264330620399  
 Option 2 ID : 264330620400  
 Option 3 ID : 264330620402  
 Option 4 ID : 264330620401  
 Status : Not Answered  
 Chosen Option : --

**Q.13** Let the speed of the boat in still water be 17 km/h and let the speed of the stream be 5 km/h. What is the time taken by the boat to go 110 km downstream?

- Ans**
- 1. 4.5 hours
  - 2. 6 hours
  - 3. 5.5 hours
  - 4. 5 hours

Question ID : 264330145028  
 Option 1 ID : 264330568367  
 Option 2 ID : 264330568368  
 Option 3 ID : 264330568370  
 Option 4 ID : 264330568369  
 Status : Answered  
 Chosen Option : 4

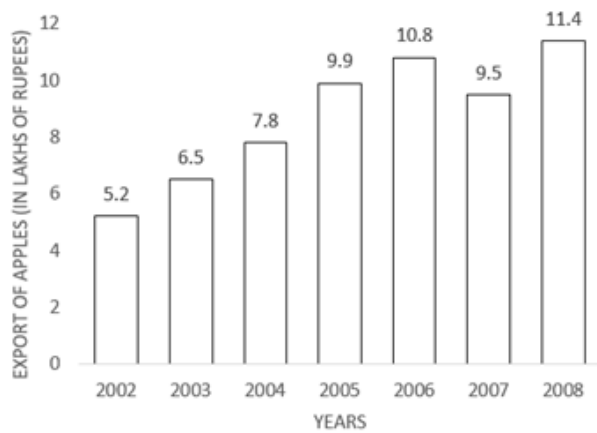
**Q.14** A number is first increased by 10% and then increased by 20%. The number, so obtained, is now decreased by 12%. What is the net increase or decrease per cent in the original number?

- Ans**
- 1. 16.16% increase
  - 2. 14.14% decrease
  - 3. 11.11% decrease
  - 4. 12.12% increase

Question ID : 264330158379  
 Option 1 ID : 264330620878  
 Option 2 ID : 264330620877  
 Option 3 ID : 264330620876  
 Option 4 ID : 264330620875  
 Status : Not Attempted and Marked For Review  
 Chosen Option : --



**Q.15** Study the given graph carefully and answer the question that follows.



In which year was there maximum percentage increase in the export of apples to that of the previous years?

- Ans**
- 1. 2003
  - 2. 2005
  - 3. 2006
  - 4. 2008

Question ID : 264330165428

Option 1 ID : 264330648791

Option 2 ID : 264330648794

Option 3 ID : 264330648793

Option 4 ID : 264330648792

Status : **Not Attempted and Marked For Review**

Chosen Option : --

**Q.16** The following data gives a year-wise outlay (in lakhs of rupees) in a certain 4-year plan (2018-2022) of a state.

Year	Health	Housing	Transport	Education
2018-2019	6200	6500	7100	8000
2019-2020	7000	6600	7200	8100
2020-2021	7300	6800	7400	8200
2021-2022	7400	7000	7500	8400

What was the percentage increase during 2020-2021 over 2018-2019 in Education outlay?

- Ans**
- 1. 2.8%
  - 2. 3.2%
  - 3. 2.0%
  - 4. 2.5%

Question ID : 264330167248

Option 1 ID : 264330655989

Option 2 ID : 264330655990

Option 3 ID : 264330655987

Option 4 ID : 264330655988

Status : **Answered**

Chosen Option : 4

Q.17 The first shirt is sold at twice the selling price of the second shirt. The first shirt is sold at 8% profit and the second shirt is sold at a 3% loss. What is the overall percentage profit on the shirts (Rounded off to two decimal place)?

- Ans
- 1. 4.86%
  - 2. 4.07%
  - 3. 4.60%
  - 4. 3.86%

Question ID : 264330102065

Option 1 ID : 264330400768

Option 2 ID : 264330400767

Option 3 ID : 264330400766

Option 4 ID : 264330400765

Status : **Not Attempted and Marked For Review**

Chosen Option : --

Q.18 The areas of the two triangles are in the ratio 4 : 3 and their heights are in the ratio 6 : 5. Find the ratio of their bases.

- Ans
- 1. 5 : 6
  - 2. 10 : 9
  - 3. 6 : 5
  - 4. 9 : 10

Question ID : 264330157742

Option 1 ID : 264330618330

Option 2 ID : 264330618327

Option 3 ID : 264330618329

Option 4 ID : 264330618328

Status : **Not Attempted and Marked For Review**

Chosen Option : --

Q.19 The largest number of four digits that is exactly divisible by 17 and 36 is:

- Ans
- 1. 7956
  - 2. 9180
  - 3. 9792
  - 4. 8568

Question ID : 26433091502

Option 1 ID : 264330359376

Option 2 ID : 264330359374

Option 3 ID : 264330359375

Option 4 ID : 264330359373

Status : **Answered**

Chosen Option : 3

**Q.20** PQR is an equilateral triangle inscribed in a circle. S is any point on the arc QR. Measure of  $\frac{1}{2}\angle PSQ$  is:

- Ans**
- 1.  $20^\circ$
  - 2.  $15^\circ$
  - 3.  $30^\circ$
  - 4.  $60^\circ$

Question ID : 264330165662

Option 1 ID : 264330649729

Option 2 ID : 264330649730

Option 3 ID : 264330649727

Option 4 ID : 264330649728

Status : Not Answered

Chosen Option : --

**Q.21** If  $\frac{x}{y} + \frac{y}{x} = 1$  and  $x + y = 2$ , then the value of  $x^3 + y^3$  is:

- Ans**
- 1. 1
  - 2. 3
  - 3. 0
  - 4. 2

Question ID : 264330157775

Option 1 ID : 264330618460

Option 2 ID : 264330618462

Option 3 ID : 264330618459

Option 4 ID : 264330618461

Status : Not Answered

Chosen Option : --

**Q.22** If the height of a cone is 7 cm and the diameter of the circular base is 12 cm, then its volume is (nearest to integer):

- Ans**
- 1.  $254 \text{ cm}^3$
  - 2.  $284 \text{ cm}^3$
  - 3.  $264 \text{ cm}^3$
  - 4.  $274 \text{ cm}^3$

Question ID : 264330103751

Option 1 ID : 264330407309

Option 2 ID : 264330407312

Option 3 ID : 264330407310

Option 4 ID : 264330407311

Status : Not Answered

Chosen Option : --

**Q.23** A, B and C can do a piece of work in 20 days, 30 days and 60 days respectively. If A works daily and on every third day B and C also work with A, then in how many days, will the work be completed?

- Ans
- 1. 21
  - 2. 18
  - 3. 12
  - 4. 15

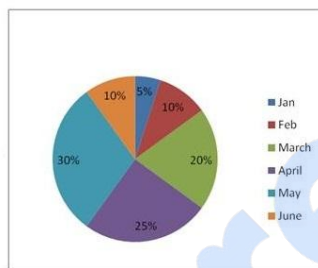
Question ID : 26433082412  
 Option 1 ID : 264330323484  
 Option 2 ID : 264330323483  
 Option 3 ID : 264330323481  
 Option 4 ID : 264330323482

Status : Answered

Chosen Option : 4

**Q.24** Darjeeling gets tourists from two countries A and B. Percentage wise distribution of the influx of tourists is given below for the first six months of the year.

Total number of tourists = 60000	
Month	Ratio(A : B)
Jan	5:7
Feb	6:7
Mar	3:2
April	8:7
May	4:5
June	3:4



Find the ratio of tourists from country A coming in during March and April.

- Ans
- 1. 4:7
  - 2. 3:7
  - 3. 7:10
  - 4. 9:10

Question ID : 264330158398  
 Option 1 ID : 264330620954  
 Option 2 ID : 264330620953  
 Option 3 ID : 264330620952  
 Option 4 ID : 264330620951

Status : Not Answered

Chosen Option : --

**Q.25** The value of  $11 \times 11 + 11 \div 11 - 11 \times 11 + 11 + 11 \times 11 - 11 - 11 \times 11$  is:

- Ans
- 1. 1
  - 2. 11
  - 3. 121
  - 4. 0

Question ID : 26433072965  
 Option 1 ID : 264330286053  
 Option 2 ID : 264330286054  
 Option 3 ID : 264330286055  
 Option 4 ID : 264330286052

Status : Answered

Chosen Option : 1

**Q.26** A man spends 72% of his salary and saves ₹5,740 per month. What is 10% of his annual salary (in ₹)?

- Ans
- 1. ₹21600
  - 2. ₹24600
  - 3. ₹20500
  - 4. ₹28400

Question ID : 264330145060  
Option 1 ID : 264330568496  
Option 2 ID : 264330568498  
Option 3 ID : 264330568495  
Option 4 ID : 264330568497  
Status : Not Answered  
Chosen Option : --

**Q.27** The population of a city is 3,52,314. It increases annually at the rate of 15% per annum. What was its population 2 years ago?

- Ans
- 1. 3,02,400
  - 2. 3,06,360
  - 3. 2,66,400
  - 4. 2,56,400

Question ID : 264330103387  
Option 1 ID : 264330405856  
Option 2 ID : 264330405854  
Option 3 ID : 264330405855  
Option 4 ID : 264330405853  
Status : Not Answered  
Chosen Option : --

**Q.28** A tourist van travels the distance of 35 km from Dehradun to Mussoorie at an average speed of 36 km/h and returns at 60 km/h. What is the approximate average speed (in km/h) of the tourist van for the entire journey?

- Ans
- 1. 48
  - 2. 42
  - 3. 45
  - 4. 50

Question ID : 264330108981  
Option 1 ID : 264330428201  
Option 2 ID : 264330428204  
Option 3 ID : 264330428202  
Option 4 ID : 264330428203  
Status : Answered  
Chosen Option : 2

Q.29 The HCF and the LCM of two numbers are 5 and 175, respectively. If the ratio of the two numbers is 5:7, the larger of the two numbers is \_\_\_\_\_.

- Ans
- 1. 35
  - 2. 25
  - 3. 45
  - 4. 75

Question ID : 264330102313  
Option 1 ID : 264330401718  
Option 2 ID : 264330401717  
Option 3 ID : 264330401719  
Option 4 ID : 264330401720  
Status : Answered  
Chosen Option : 3

Q.30 The product of two numbers is 726 and their HCF is 11, then their LCM is:

- Ans
- 1. 58
  - 2. 68
  - 3. 66
  - 4. 76

Question ID : 264330145032  
Option 1 ID : 264330568385  
Option 2 ID : 264330568386  
Option 3 ID : 264330568384  
Option 4 ID : 264330568383  
Status : Not Answered  
Chosen Option : --

Q.31 If a truck moves at a constant speed of 30 km/h for 1 kilometre and 45 km/h for the next 1 kilometre. What is the average speed of the truck?

- Ans
- 1. 32 km/h
  - 2. 36 km/h
  - 3. 38 km/h
  - 4. 34 km/h

Question ID : 264330104412  
Option 1 ID : 264330409949  
Option 2 ID : 264330409951  
Option 3 ID : 264330409952  
Option 4 ID : 264330409950  
Status : Answered  
Chosen Option : 1

Q.32 P, Q and R, when working individually, can complete a job in, respectively, 36 days, 48 days and 144 days. P, Q and R start working together. P leaves the job 12 days before completion and Q leaves the job 8 days before completion. R works from the beginning till the end of the job. Determine the total number of days taken to complete the job.

- Ans  1. 24  
 2. 27  
 3. 30  
 4. 25

Question ID : 264330114534  
 Option 1 ID : 264330450221  
 Option 2 ID : 264330450223  
 Option 3 ID : 264330450224  
 Option 4 ID : 264330450222  
 Status : Answered  
 Chosen Option : 4

Q.33 If  $a + b = 10$  and  $ab = 6$ , then the value of  $a^3 + b^3$  is:

- Ans  1. 800  
 2. 820  
 3. 860  
 4. 840

Question ID : 264330157766  
 Option 1 ID : 264330618426  
 Option 2 ID : 264330618425  
 Option 3 ID : 264330618423  
 Option 4 ID : 264330618424  
 Status : Answered  
 Chosen Option : 1

Q.34 If  $\cos \theta - \sin \theta = \sqrt{2} \sin \theta$ , then  $(\cos \theta + \sin \theta)$  is:

- Ans  1.  $-\sqrt{2} \cos \theta$   
 2.  $\sqrt{2} \cos \theta$   
 3.  $\sqrt{2} \tan \theta$   
 4.  $-\sqrt{2} \sin \theta$

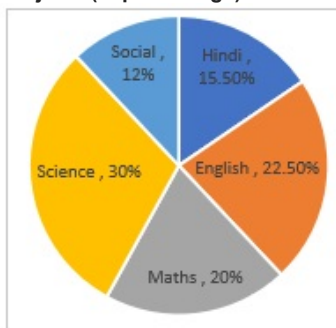
Question ID : 264330158303  
 Option 1 ID : 264330620572  
 Option 2 ID : 264330620571  
 Option 3 ID : 264330620574  
 Option 4 ID : 264330620573  
 Status : Answered  
 Chosen Option : 2

Q.35 The sides of a triangle are in the ratio 5 : 12 : 13 and its perimeter is 90 cm. Find its area (in  $\text{cm}^2$ ).

- Ans  1. 150  
 2. 270  
 3. 30  
 4. 60

Question ID : 264330145113  
 Option 1 ID : 264330568707  
 Option 2 ID : 264330568709  
 Option 3 ID : 264330568708  
 Option 4 ID : 264330568710  
 Status : Not Answered  
 Chosen Option : --

Q.36 The given pie-chart shows the distribution of the marks scored by Ram in five different subjects (in percentage).



What is the ratio of the central angle of Maths to the central angle of Science?

- Ans  1. 5 : 2  
 2. 2 : 3  
 3. 4 : 3  
 4. 3 : 5

Question ID : 264330158623  
 Option 1 ID : 264330621854  
 Option 2 ID : 264330621853  
 Option 3 ID : 264330621851  
 Option 4 ID : 264330621852  
 Status : Answered  
 Chosen Option : 3



**Q.37** Study the given data and answer the question that follows.

The tables shows the number of candidates (in lakh) appearing in an entrance exam from four different cities and the ratio of candidates passing and failing in the same.

City	A	B	C	D
Number of candidates	2.15	1.14	1.56	2.35

Ratio of candidates passing and failing within the city.

City	Passing	Failing
A	4	2
B	5	3
C	6	4
D	4	6

What is the number of failed candidates (in lakh) in city D?

- Ans
- 1. 1.70
  - 2. 1.25
  - 3. 1.85
  - 4. 1.41

Question ID : 264330158258  
 Option 1 ID : 264330620392  
 Option 2 ID : 264330620394  
 Option 3 ID : 264330620391  
 Option 4 ID : 264330620393  
 Status : Answered  
 Chosen Option : 1

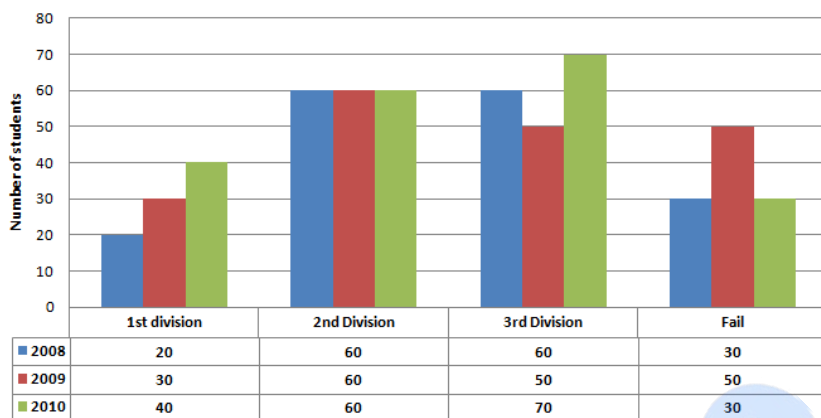
**Q.38** Two circles of radius 13 cm and 15 cm intersect each other at points A and B. If the length of the common chord is 12 cm, then what is the distance between their centres?

- Ans
- 1.  $\sqrt{145} + \sqrt{184}$
  - 2.  $\sqrt{131} + \sqrt{181}$
  - 3.  $\sqrt{145} + \sqrt{169}$
  - 4.  $\sqrt{133} + \sqrt{189}$

Question ID : 264330168751  
 Option 1 ID : 264330661818  
 Option 2 ID : 264330661816  
 Option 3 ID : 264330661815  
 Option 4 ID : 264330661817  
 Status : Answered  
 Chosen Option : 4

**Q.39** Study the given bar-graph and answer the question that follows.

The bar-graph shows the higher secondary students of a school for the years 2008, 2009 and 2010.



The percentage of students who passed in the second division in the year 2010 was:

- Ans**
- 1. 25%
  - 2. 28%
  - 3. 30%
  - 4. 32%

Question ID : 264330163475

Option 1 ID : 264330641159

Option 2 ID : 264330641160

Option 3 ID : 264330641161

Option 4 ID : 264330641162

Status : Answered

Chosen Option : 3

**Q.40** Two numbers are in the ratio 5:3 and the difference between these two numbers is 34. Find the smaller of the two numbers.

- Ans**
- 1. 51
  - 2. 85
  - 3. 68
  - 4. 34

Question ID : 264330104188

Option 1 ID : 264330409053

Option 2 ID : 264330409054

Option 3 ID : 264330409056

Option 4 ID : 264330409055

Status : Answered

Chosen Option : 1

**Q.41** The radii of the ends of a frustum of a solid right-circular cone 45 cm high are 28 cm and 7 cm. If this frustum is melted and reconstructed into a solid right circular cylinder whose radius of base and height are in the ratio 3 : 5, find the curved surface area (in  $\text{cm}^2$ ) of this cylinder. [Use  $\pi = \frac{22}{7}$ .]

- Ans
- 1. 4580
  - 2. 4610
  - 3. 4640
  - 4. 4620

Question ID : 264330122878

Option 1 ID : 264330481581

Option 2 ID : 264330481580

Option 3 ID : 264330481579

Option 4 ID : 264330481582

Status : Answered

Chosen Option : 3

**Q.42** A man runs for 40 km. The time taken by him in the first 10 km is twice the time taken by him in the second 10 km. The time taken in the third 10 km is half of the time taken in the fourth 10 km, and the time taken in the fourth 10 km is equal to the time taken in the first 10 km. If his speed in the first 10 km is 40 km/h, then what is the average speed for 40 km?

- Ans
- 1. 50 km/h
  - 2.  $\frac{70}{3}$  km/h
  - 3.  $\frac{160}{3}$  km/h
  - 4. 40 km/h

Question ID : 26433081725

Option 1 ID : 264330320733

Option 2 ID : 264330320734

Option 3 ID : 264330320736

Option 4 ID : 264330320735

Status : Answered

Chosen Option : 1

**Q.43** Find the value of  $(\tan^2 \theta + \tan^4 \theta)$ .

- Ans
- 1.  $\cot^2 \theta - \tan^2 \theta$
  - 2.  $\sec^4 \theta - \sec^2 \theta$
  - 3.  $\sec^2 \theta - \sec^4 \theta$
  - 4.  $\sec^4 \theta + \sec^2 \theta$

Question ID : 264330130397

Option 1 ID : 264330510702

Option 2 ID : 264330510701

Option 3 ID : 264330510699

Option 4 ID : 264330510700

Status : Answered

Chosen Option : 2

**Q.44** If the hypotenuse of a right-angled triangle is 29 cm and the sum of the other two sides is 41 cm, then the difference between the other two sides is:

- Ans  1. 5 cm  
 2. 1 cm  
 3. 2 cm  
 4. 10 cm

Question ID : 264330165659  
Option 1 ID : 264330649716  
Option 2 ID : 264330649718  
Option 3 ID : 264330649717  
Option 4 ID : 264330649715  
Status : Answered  
Chosen Option : 1

**Q.45** Two numbers are in the ratio 3 : 4. The product of their HCF and LCM is 2700. The sum of the numbers is:

- Ans  1. 60  
 2. 105  
 3. 15  
 4. 45

Question ID : 26433063995  
Option 1 ID : 264330250575  
Option 2 ID : 264330250572  
Option 3 ID : 264330250573  
Option 4 ID : 264330250574  
Status : Answered  
Chosen Option : 2

**Q.46** Rajesh invested ₹10,000 by dividing it into two different investment schemes, A and B, at simple interest rates of 8% and 10%, respectively. If the total interest earned in 2 years is ₹1,680, the amount invested in scheme A is:

- Ans  1. ₹8,000  
 2. ₹2,000  
 3. ₹6,000  
 4. ₹4,000

Question ID : 264330104395  
Option 1 ID : 264330409884  
Option 2 ID : 264330409881  
Option 3 ID : 264330409883  
Option 4 ID : 264330409882  
Status : Not Attempted and Marked For Review  
Chosen Option : --

Q.47 If 42, 36 and 35 are the first three terms of a proportion, then the fourth term is:

- Ans  1. 27  
 2. 28  
 3. 30  
 4. 32

Question ID : 264330145045  
Option 1 ID : 264330568438  
Option 2 ID : 264330568437  
Option 3 ID : 264330568436  
Option 4 ID : 264330568435  
Status : Answered  
Chosen Option : 2

Q.48 If the price item is increased by 70% and then allows a scheme discount of 5% and 20% on this marked price. If price is paid in cash and additional discount of 20% is allowed then what is his gain percentage?

- Ans  1. 2.25%  
 2. 4.36%  
 3. 3.25%  
 4. 3.36%

Question ID : 264330104401  
Option 1 ID : 264330409905  
Option 2 ID : 264330409908  
Option 3 ID : 264330409906  
Option 4 ID : 264330409907  
Status : Not Answered  
Chosen Option : --

Q.49 Jonathan had borrowed a sum of money 3 years ago at 10% interest per annum compounded annually for a 5-year period, with the amount to be paid at the end of the period being ₹1,61,051. However, there is no pre-payment penalty and Jonathan has received some bonus payment now, with which he has decided to clear his debt. How much does Jonathan have to pay now to clear his debt?

- Ans  1. ₹1,33,000  
 2. ₹1,32,900  
 3. ₹1,33,100  
 4. ₹1,33,200

Question ID : 264330145054  
Option 1 ID : 264330568471  
Option 2 ID : 264330568472  
Option 3 ID : 264330568473  
Option 4 ID : 264330568474  
Status : Answered  
Chosen Option : 3

**Q.50** What is the area of a triangle whose sides are of lengths 12 cm, 13 cm and 5 cm?

- Ans**  1. 30 cm<sup>2</sup>  
 2. 15 cm<sup>2</sup>  
 3. 40 cm<sup>2</sup>  
 4. 70 cm<sup>2</sup>

Question ID : 264330106081  
Option 1 ID : 264330416627  
Option 2 ID : 264330416625  
Option 3 ID : 264330416626  
Option 4 ID : 264330416628  
Status : Not Answered  
Chosen Option : --

Section : English Comprehension

**Q.1** Select the INCORRECTLY spelt word.

- Ans**  1. Interrogate  
 2. Alienate  
 3. Deserve  
 4. Assassinate

Question ID : 26433089088  
Option 1 ID : 264330349875  
Option 2 ID : 264330349876  
Option 3 ID : 264330349873  
Option 4 ID : 264330349874  
Status : Answered  
Chosen Option : 4

**Q.2** Select the most appropriate meaning of the given idiom.  
**Bend over backwards**

- Ans**  1. Working hard to try to impress  
 2. Working slowly and lazily  
 3. Going backward  
 4. Using wrongful means

Question ID : 26433096216  
Option 1 ID : 264330377620  
Option 2 ID : 264330377619  
Option 3 ID : 264330377617  
Option 4 ID : 264330377618  
Status : Answered  
Chosen Option : 1

**Q.3** Select the INCORRECTLY spelt word from the underlined words in the following sentence.  
This was a blatent disregard to the advisory by the host against it and in violation of norms of the meeting.

- Ans
- 1. advisory
  - 2. blatent
  - 3. disregard
  - 4. violation

Question ID : 264330141156  
Option 1 ID : 264330552969  
Option 2 ID : 264330552967  
Option 3 ID : 264330552968  
Option 4 ID : 264330552970  
Status : Answered  
Chosen Option : 2

**Q.4** Parts of the following sentence have been given as options. Select the option that contains an error.  
The dancers swayed dainty on the stage last night.

- Ans
- 1. last night
  - 2. on the stage
  - 3. The dancers
  - 4. swayed dainty

Question ID : 264330134122  
Option 1 ID : 264330525514  
Option 2 ID : 264330525513  
Option 3 ID : 264330525511  
Option 4 ID : 264330525512  
Status : Answered  
Chosen Option : 4

**Q.5** Select the most appropriate one-word substitution of the given group of words.

A notice of the death of a person, often with a biographical sketch, as in a newspaper.

- Ans
- 1. Obituary
  - 2. Oblivion
  - 3. Elegy
  - 4. Advertisement

Question ID : 26433090852  
Option 1 ID : 264330356819  
Option 2 ID : 264330356817  
Option 3 ID : 264330356820  
Option 4 ID : 264330356818  
Status : Not Attempted and Marked For Review  
Chosen Option : --

**Q.6** Select the INCORRECTLY spelt word.

- Ans  1. Adjacent  
 2. Accomplish  
 3. Agregate  
 4. Allure

Question ID : 264330122278  
Option 1 ID : 264330479240  
Option 2 ID : 264330479241  
Option 3 ID : 264330479239  
Option 4 ID : 264330479242  
Status : Marked For Review  
Chosen Option : 3

**Q.7** Select the most appropriate idiomatic expression that can substitute the underlined segment in the given sentence.  
Both Nitin and Uday are of the same interests.

- Ans  1. under the weather  
 2. birds of the same feather  
 3. blowing smoke without fire  
 4. different kettles of fish

Question ID : 264330134223  
Option 1 ID : 264330525890  
Option 2 ID : 264330525888  
Option 3 ID : 264330525887  
Option 4 ID : 264330525889  
Status : Answered  
Chosen Option : 1

**Q.8** Select the most appropriate ANTONYM of the word 'moving' in the given sentence and choose the correct option.

The old grandfather clock chimed loudly, marking the passage of time with its steady tick-tock.

- Ans  1. Steady  
 2. Marking  
 3. Chimed  
 4. Passage

Question ID : 264330163539  
Option 1 ID : 264330641414  
Option 2 ID : 264330641412  
Option 3 ID : 264330641411  
Option 4 ID : 264330641413  
Status : Answered  
Chosen Option : 1



**Q.9** Select the most appropriate option that can substitute the underlined segment in the given sentence. If there is no need to substitute it, select 'No substitution required'.  
Her paintings are way better then her sketches.

- Ans
- 1. off
  - 2. than
  - 3. more
  - 4. No substitution required

Question ID : 26433070772  
Option 1 ID : 264330277544  
Option 2 ID : 264330277546  
Option 3 ID : 264330277545  
Option 4 ID : 264330277547  
Status : Answered  
Chosen Option : 2

**Q.10** Select the most appropriate meaning of the underlined idiom in the given sentence.  
I hate to get off on the wrong foot.

- Ans
- 1. To start something with positive factors
  - 2. To start something with neutral factors
  - 3. To start a relationship or activity badly
  - 4. To start something with an injury on the wrong foot

Question ID : 26433089397  
Option 1 ID : 264330351089  
Option 2 ID : 264330351091  
Option 3 ID : 264330351090  
Option 4 ID : 264330351092  
Status : Answered  
Chosen Option : 3

**Q.11** Select the most appropriate phrasal verb to fill in the blank.  
Arunima \_\_\_\_\_ a lot during her vacation time.

- Ans
- 1. gets on
  - 2. gets after
  - 3. gets about
  - 4. gets along

Question ID : 26433084918  
Option 1 ID : 264330333396  
Option 2 ID : 264330333395  
Option 3 ID : 264330333394  
Option 4 ID : 264330333393  
Status : Answered  
Chosen Option : 4

**Q.12** Select the most appropriate meaning of the given idiom.  
The best of both worlds

- Ans  1. Good things come after bad things  
 2. An ideal situation  
 3. Better to show than tell  
 4. Make people comfortable

Question ID : 264330163403  
Option 1 ID : 264330640894  
Option 2 ID : 264330640891  
Option 3 ID : 264330640893  
Option 4 ID : 264330640892  
Status : Answered  
Chosen Option : 4

**Q.13** Select the option that can be used as a one-word substitute for the underlined group of words.

How did you become interested in learning the art of producing beautiful handwriting?

- Ans  1. Lexicography  
 2. Demography  
 3. Calligraphy  
 4. Graphology

Question ID : 26433088833  
Option 1 ID : 264330348885  
Option 2 ID : 264330348887  
Option 3 ID : 264330348886  
Option 4 ID : 264330348888  
Status : Not Answered  
Chosen Option : --

**Q.14** Select the most appropriate synonym of the given word.

Haphazard

- Ans  1. Random  
 2. Sociable  
 3. Aggressive  
 4. Confident

Question ID : 264330163333  
Option 1 ID : 264330640634  
Option 2 ID : 264330640633  
Option 3 ID : 264330640632  
Option 4 ID : 264330640631  
Status : Not Answered  
Chosen Option : --

Q.15 Parts of the following sentence have been given as options. One of them may contain an error. Select the part that contains the error from the given options. If you don't find any error, mark 'No error' as your answer.

We feed the horse oats for a week because it had eaten all the hay.

- Ans
- 1. No error
  - 2. it had eaten all the hay
  - 3. We feed the horse oats
  - 4. for a week because

Question ID : 26433090495

Option 1 ID : 264330355432

Option 2 ID : 264330355431

Option 3 ID : 264330355429

Option 4 ID : 264330355430

Status : Answered

Chosen Option : 1

Q.16 The following sentence has been split into four segments. Identify the segment that contains a grammatical error.

They will not attend / the event / as they're going / away at end of April.

- Ans
- 1. away at end of April.
  - 2. as they're going
  - 3. the event
  - 4. They will not attend

Question ID : 264330120573

Option 1 ID : 264330472536

Option 2 ID : 264330472535

Option 3 ID : 264330472538

Option 4 ID : 264330472537

Status : Answered

Chosen Option : 1

Q.17 Select the option that can be used as a one-word substitute for the underlined group of words.

Ms. Scarlet was indifferent to pain and pleasure, she never complained.

- Ans
- 1. Hypocrite
  - 2. Stoic
  - 3. Versatile
  - 4. Amateur

Question ID : 26433088836

Option 1 ID : 264330348897

Option 2 ID : 264330348899

Option 3 ID : 264330348900

Option 4 ID : 264330348898

Status : Answered

Chosen Option : 2

**Q.18** You are preparing a speech for the upcoming function. Select a synonym for the highlighted word to make it better.  
Despite the advancement in technology many rural areas in developing countries still lack access to basic necessities.

- Ans
- 1. Desist
  - 2. Disguise
  - 3. Avenue
  - 4. Apathy

Question ID : 264330122810  
Option 1 ID : 264330481310  
Option 2 ID : 264330481307  
Option 3 ID : 264330481308  
Option 4 ID : 264330481309  
Status : Answered  
Chosen Option : 3

**Q.19** Select the most appropriate meaning of the underlined idiom.

Students often burn the midnight oil to qualify for competitive examinations.

- Ans
- 1. put the things on fire at night
  - 2. want to be at a place full of light
  - 3. work until late at night
  - 4. sleep well

Question ID : 26433099087  
Option 1 ID : 264330388981  
Option 2 ID : 264330388984  
Option 3 ID : 264330388983  
Option 4 ID : 264330388982  
Status : Answered  
Chosen Option : 3

**Q.20** Select the most appropriate meaning of the underlined idiom.  
More people in Turkey are on the breadline now than thirty years ago.

- Ans
- 1. Be very poor
  - 2. Are well educated
  - 3. Be very expensive
  - 4. Earn a lot of money

Question ID : 264330132898  
Option 1 ID : 264330520654  
Option 2 ID : 264330520652  
Option 3 ID : 264330520651  
Option 4 ID : 264330520653  
Status : Answered  
Chosen Option : 1

**Q.21** Select the most appropriate synonym of the given word.  
**Justifiable**

- Ans**  1. Indefensible  
 2. Neutral  
 3. Maintainable  
 4. Reasonable

Question ID : 264330164162  
Option 1 ID : 264330643899  
Option 2 ID : 264330643902  
Option 3 ID : 264330643901  
Option 4 ID : 264330643900  
Status : Answered  
Chosen Option : 4

**Q.22** Select the most appropriate meaning of the given idiom.

**Left out in the cold**

- Ans**  1. To serve stale and cold food  
 2. To leave in hurry  
 3. To bear extreme weather condition  
 4. To be ignored

Question ID : 264330163406  
Option 1 ID : 264330640906  
Option 2 ID : 264330640904  
Option 3 ID : 264330640905  
Option 4 ID : 264330640903  
Status : Answered  
Chosen Option : 2

**Q.23** Select the option that can be used as a one-word substitute for the given group of words.

**Fear of water**

- Ans**  1. Hydrophobia  
 2. Bibliophobia  
 3. Microphobia  
 4. Botanophobia

Question ID : 26433088755  
Option 1 ID : 264330348574  
Option 2 ID : 264330348575  
Option 3 ID : 264330348573  
Option 4 ID : 264330348576  
Status : Answered  
Chosen Option : 1

**Q.24** Select the option that can substitute the bracketed word segment correctly and complete the following sentence meaningfully.  
Lots of kids (was visualised) crossing the road when the bus arrived.

- Ans  1. were seen  
 2. have been seen  
 3. are seen  
 4. was seen

Question ID : 264330134148  
Option 1 ID : 264330525617  
Option 2 ID : 264330525618  
Option 3 ID : 264330525616  
Option 4 ID : 264330525615  
Status : Answered  
Chosen Option : 1

**Q.25** Select the most appropriate synonym of the given word.  
Dreadful

- Ans  1. Feeble  
 2. Terrible  
 3. Auspicious  
 4. Propitious

Question ID : 264330120533  
Option 1 ID : 264330472381  
Option 2 ID : 264330472382  
Option 3 ID : 264330472380  
Option 4 ID : 264330472379  
Status : Answered  
Chosen Option : 2

**Q.26** Select the most appropriate meaning of the underlined idiom.  
We dodged a bullet when we didn't fall for the agents' words.

- Ans  1. To give something a try  
 2. To narrowly avoid situation  
 3. To be out of your comfort zone  
 4. To start performing better

Question ID : 264330120619  
Option 1 ID : 264330472715  
Option 2 ID : 264330472717  
Option 3 ID : 264330472718  
Option 4 ID : 264330472716  
Status : Answered  
Chosen Option : 3

Q.27 Select the word which means the same as the group of words underlined in the given sentence.

The pandemic deeply affected small business owners, as they have no means of livelihood left.

- Ans  1. Pauper  
 2. Worker  
 3. Unemployed  
 4. Mason

Question ID : 26433089713  
Option 1 ID : 264330352348  
Option 2 ID : 264330352346  
Option 3 ID : 264330352347  
Option 4 ID : 264330352345  
Status : Answered  
Chosen Option : 3

Q.28 Select the option that will improve the underlined part of the given sentence.  
The use of chemicals, insecticides and pesticides began after the Green Revolution.

- Ans  1. A practice of chemicals, insecticides and pesticides  
 2. The custom of chemicals, insecticides and pesticides  
 3. Consumption of chemicals, insecticides and pesticides  
 4. The usage of chemicals, insecticides and pesticides

Question ID : 264330145288  
Option 1 ID : 264330569407  
Option 2 ID : 264330569408  
Option 3 ID : 264330569409  
Option 4 ID : 264330569410  
Status : Answered  
Chosen Option : 4

Q.29 Select the most appropriate ANTONYM of the given word.

Catastrophic

- Ans  1. Calamity  
 2. Fortuitous  
 3. Fiasco  
 4. Sabotage

Question ID : 264330163359  
Option 1 ID : 264330640727  
Option 2 ID : 264330640729  
Option 3 ID : 264330640730  
Option 4 ID : 264330640728  
Status : Not Attempted and Marked For Review  
Chosen Option : --

Q.30 Select the most appropriate meaning of the given idiom.

An arm and a leg

- Ans  1. To ask for too much  
 2. A large amount of money  
 3. Everything is ready  
 4. To be lost and bewildered

Question ID : 26433092076

Option 1 ID : 264330361626

Option 2 ID : 264330361627

Option 3 ID : 264330361625

Option 4 ID : 264330361628

Status : Answered

Chosen Option : 1

Q.31 The following sentence has been split into four segments. Identify the segment that contains a spelling error.

He wrote his dairy / in code / so that nobody / could understand it.

- Ans  1. so that nobody  
 2. could understand it  
 3. in code  
 4. He wrote his dairy

Question ID : 264330123023

Option 1 ID : 264330482157

Option 2 ID : 264330482158

Option 3 ID : 264330482156

Option 4 ID : 264330482155

Status : Answered

Chosen Option : 2

Q.32 Select the most appropriate ANTONYM for the highlighted word.  
The negligent attitude of the cops was criticised.

- Ans  1. attentive  
 2. reluctant  
 3. amplify  
 4. bored

Question ID : 264330120738

Option 1 ID : 264330473169

Option 2 ID : 264330473167

Option 3 ID : 264330473170

Option 4 ID : 264330473168

Status : Answered

Chosen Option : 3



**Q.33** Select the most appropriate one-word substitution of the given group of words.

A person engaged in or trained for spaceflight.

- Ans  1. Astute  
 2. Astronomer  
 3. Astronaut  
 4. Atrocious

Question ID : 26433090849  
Option 1 ID : 264330356806  
Option 2 ID : 264330356808  
Option 3 ID : 264330356807  
Option 4 ID : 264330356805  
Status : Marked For Review  
Chosen Option : 3

**Q.34** Select the most appropriate synonym of the given word.

Site

- Ans  1. Lap  
 2. Location  
 3. Globe  
 4. Pull

Question ID : 26433063165  
Option 1 ID : 264330247327  
Option 2 ID : 264330247324  
Option 3 ID : 264330247325  
Option 4 ID : 264330247326  
Status : Answered  
Chosen Option : 2

**Q.35** Select the INCORRECTLY spelt word.

- Ans  1. Serene  
 2. Triumph  
 3. Comparision  
 4. Unveil

Question ID : 26433091837  
Option 1 ID : 264330360685  
Option 2 ID : 264330360686  
Option 3 ID : 264330360688  
Option 4 ID : 264330360687  
Status : Answered  
Chosen Option : 1

**Q.36** The following sentence has been split into four segments. Identify the segment that contains a grammatical error.

She will have participate / in the dance competition / by the time her father / returns from the tour.

- Ans**
- 1. in the dance competition
  - 2. She will have participate
  - 3. by the time her father
  - 4. returns from the tour

Question ID : 264330145281

Option 1 ID : 264330569379

Option 2 ID : 264330569380

Option 3 ID : 264330569382

Option 4 ID : 264330569381

Status : Answered

Chosen Option : 2

**Q.37** Select the option that can be used as a one-word substitute for the given group of words.

Working or operating quickly and effectively in an organised way

- Ans**
- 1. Efficient
  - 2. Extensive
  - 3. Excellent
  - 4. Effusive

Question ID : 26433099604

Option 1 ID : 264330391031

Option 2 ID : 264330391030

Option 3 ID : 264330391032

Option 4 ID : 264330391029

Status : Answered

Chosen Option : 1

**Q.38** Select the most appropriate synonym of the given word.  
Abandon

- Ans**
- 1. Perish
  - 2. Desert
  - 3. Prolong
  - 4. Retain

Question ID : 264330117331

Option 1 ID : 264330461380

Option 2 ID : 264330461379

Option 3 ID : 264330461377

Option 4 ID : 264330461378

Status : Answered

Chosen Option : 2

**Q.39** Select the most appropriate ANTONYM of the given word.

Damp

- Ans  1. Misty  
 2. Arid  
 3. Tropical  
 4. Soaked

Question ID : 264330165261

Option 1 ID : 264330648138

Option 2 ID : 264330648136

Option 3 ID : 264330648135

Option 4 ID : 264330648137

Status : **Not Attempted and Marked For Review**

Chosen Option : --

**Q.40** Select the most appropriate meaning of the given idiom.

A leopard can't change his spots

- Ans  1. Someone who is cherished above all others  
 2. A visual presentation is far more descriptive than words  
 3. Something good that isn't recognised at first  
 4. You cannot change who you are

Question ID : 264330163402

Option 1 ID : 264330640889

Option 2 ID : 264330640887

Option 3 ID : 264330640888

Option 4 ID : 264330640890

Status : **Answered**

Chosen Option : 4

**Comprehension:**

In the following passage some words have been deleted. Read the passage carefully and select the most appropriate option for each blank.

The Amazon rainforest is an awe-inspiring natural wonder that (1)\_\_\_\_\_ across several South American countries, including Brazil, Peru, Colombia, and Ecuador. Covering an (2)\_\_\_\_\_ area of 5.5 million square kilometres, it is the largest tropical rainforest on Earth. The Amazon jungle is (3)\_\_\_\_\_ for its remarkable biodiversity, harbouring an astonishing array of plant and animal species that are still being discovered and studied. The dense vegetation of the jungle creates a (4)\_\_\_\_\_ and complex ecosystem, supporting countless species and providing crucial ecosystem services such as carbon sequestration and climate regulation. It is also home to (5)\_\_\_\_\_ communities that have thrived within its rich confines for centuries, preserving their traditions and deep connection to the land.

SubQuestion No : 41

**Q.41** Select the most appropriate option to fill in blank number 1.

- Ans  1. reaches  
 2. lengths  
 3. amounts  
 4. spans

Question ID : 264330164254

Option 1 ID : 264330644245

Option 2 ID : 264330644246

Option 3 ID : 264330644243

Option 4 ID : 264330644244

Status : **Marked For Review**

Chosen Option : 1

**Comprehension:**

In the following passage some words have been deleted. Read the passage carefully and select the most appropriate option for each blank.

The Amazon rainforest is an awe-inspiring natural wonder that (1)\_\_\_\_\_ across several South American countries, including Brazil, Peru, Colombia, and Ecuador. Covering an (2)\_\_\_\_\_ area of 5.5 million square kilometres, it is the largest tropical rainforest on Earth. The Amazon jungle is (3)\_\_\_\_\_ for its remarkable biodiversity, harbouring an astonishing array of plant and animal species that are still being discovered and studied. The dense vegetation of the jungle creates a (4)\_\_\_\_\_ and complex ecosystem, supporting countless species and providing crucial ecosystem services such as carbon sequestration and climate regulation. It is also home to (5)\_\_\_\_\_ communities that have thrived within its rich confines for centuries, preserving their traditions and deep connection to the land.

**SubQuestion No : 42**

**Q.42** Select the most appropriate option to fill in blank number 2.

- Ans  1. gauged  
 2. rated  
 3. estimated  
 4. evaluated

Question ID : 264330164255

Option 1 ID : 264330644247

Option 2 ID : 264330644250

Option 3 ID : 264330644248

Option 4 ID : 264330644249

Status : Answered

Chosen Option : 3

**Comprehension:**

In the following passage some words have been deleted. Read the passage carefully and select the most appropriate option for each blank.

The Amazon rainforest is an awe-inspiring natural wonder that (1)\_\_\_\_\_ across several South American countries, including Brazil, Peru, Colombia, and Ecuador. Covering an (2)\_\_\_\_\_ area of 5.5 million square kilometres, it is the largest tropical rainforest on Earth. The Amazon jungle is (3)\_\_\_\_\_ for its remarkable biodiversity, harbouring an astonishing array of plant and animal species that are still being discovered and studied. The dense vegetation of the jungle creates a (4)\_\_\_\_\_ and complex ecosystem, supporting countless species and providing crucial ecosystem services such as carbon sequestration and climate regulation. It is also home to (5)\_\_\_\_\_ communities that have thrived within its rich confines for centuries, preserving their traditions and deep connection to the land.

**SubQuestion No : 43**

**Q.43** Select the most appropriate option to fill in blank number 3.

- Ans  1. great  
 2. acclaimed  
 3. renowned  
 4. pre-eminent

Question ID : 264330164256

Option 1 ID : 264330644251

Option 2 ID : 264330644252

Option 3 ID : 264330644253

Option 4 ID : 264330644254

Status : Answered

Chosen Option : 3

**Comprehension:**

In the following passage some words have been deleted. Read the passage carefully and select the most appropriate option for each blank.

The Amazon rainforest is an awe-inspiring natural wonder that (1)\_\_\_\_\_ across several South American countries, including Brazil, Peru, Colombia, and Ecuador. Covering an (2)\_\_\_\_\_ area of 5.5 million square kilometres, it is the largest tropical rainforest on Earth. The Amazon jungle is (3)\_\_\_\_\_ for its remarkable biodiversity, harbouring an astonishing array of plant and animal species that are still being discovered and studied. The dense vegetation of the jungle creates a (4)\_\_\_\_\_ and complex ecosystem, supporting countless species and providing crucial ecosystem services such as carbon sequestration and climate regulation. It is also home to (5)\_\_\_\_\_ communities that have thrived within its rich confines for centuries, preserving their traditions and deep connection to the land.

**SubQuestion No : 44**

**Q.44** Select the most appropriate option to fill in blank number 4.

- Ans  1. vigour  
 2. spirited  
 3. vibrant  
 4. lavish

Question ID : 264330164257

Option 1 ID : 264330644258

Option 2 ID : 264330644256

Option 3 ID : 264330644255

Option 4 ID : 264330644257

Status : Answered

Chosen Option : 4

**Comprehension:**

In the following passage some words have been deleted. Read the passage carefully and select the most appropriate option for each blank.

The Amazon rainforest is an awe-inspiring natural wonder that (1)\_\_\_\_\_ across several South American countries, including Brazil, Peru, Colombia, and Ecuador. Covering an (2)\_\_\_\_\_ area of 5.5 million square kilometres, it is the largest tropical rainforest on Earth. The Amazon jungle is (3)\_\_\_\_\_ for its remarkable biodiversity, harbouring an astonishing array of plant and animal species that are still being discovered and studied. The dense vegetation of the jungle creates a (4)\_\_\_\_\_ and complex ecosystem, supporting countless species and providing crucial ecosystem services such as carbon sequestration and climate regulation. It is also home to (5)\_\_\_\_\_ communities that have thrived within its rich confines for centuries, preserving their traditions and deep connection to the land.

**SubQuestion No : 45**

**Q.45** Select the most appropriate option to fill in blank number 5.

- Ans  1. late  
 2. ancient  
 3. indigenous  
 4. organic

Question ID : 264330164258

Option 1 ID : 264330644260

Option 2 ID : 264330644261

Option 3 ID : 264330644262

Option 4 ID : 264330644259

Status : Answered

Chosen Option : 3

**Comprehension:**

Read the given passage and answer the question that follows.

We started our research into organisational and personal excellence by studying a slightly different topic. We figured that if we could learn why certain people were more effective than others, then we could learn exactly what they did, clone it and pass it on to others. We asked people to identify who they thought were their most effective colleagues. In fact, over the past twenty-five years, we have asked over twenty thousand people to identify the individuals in their organisations who could really get things done. We wanted to find those who were not just influential but who were far more influential than the rest.

**SubQuestion No : 46**

**Q.46 Which real life situation can be the most appropriate to be inferred from the passage?**

- Ans
- 1. Inflation has direct influence on the morals and ethics of an individual.
  - 2. If we do something wrong to decent people, the same comes to haunt us even after many years.
  - 3. People nowadays do not have patience and want quick success and does not matter what path they choose to obtain their targets.
  - 4. Jassie is an efficient employee whose work ethics can be a case study to learn more about organisational and personal excellence.

Question ID : 264330164710

Option 1 ID : 264330645996

Option 2 ID : 264330645995

Option 3 ID : 264330645998

Option 4 ID : 264330645997

Status : Answered

Chosen Option : 4

**Comprehension:**

Read the given passage and answer the question that follows.

We started our research into organisational and personal excellence by studying a slightly different topic. We figured that if we could learn why certain people were more effective than others, then we could learn exactly what they did, clone it and pass it on to others. We asked people to identify who they thought were their most effective colleagues. In fact, over the past twenty-five years, we have asked over twenty thousand people to identify the individuals in their organisations who could really get things done. We wanted to find those who were not just influential but who were far more influential than the rest.

**SubQuestion No : 47**

**Q.47 Select the most suitable structure for the above passage.**

- Ans
- 1. Chronological
  - 2. Cause and Effect
  - 3. Pragmatic
  - 4. Compare and contrast

Question ID : 264330164709

Option 1 ID : 264330645991

Option 2 ID : 264330645993

Option 3 ID : 264330645994

Option 4 ID : 264330645992

Status : Not Answered

Chosen Option : --

**Comprehension:**

Read the given passage and answer the question that follows.

We started our research into organisational and personal excellence by studying a slightly different topic. We figured that if we could learn why certain people were more effective than others, then we could learn exactly what they did, clone it and pass it on to others. We asked people to identify who they thought were their most effective colleagues. In fact, over the past twenty-five years, we have asked over twenty thousand people to identify the individuals in their organisations who could really get things done. We wanted to find those who were not just influential but who were far more influential than the rest.

**SubQuestion No : 48**

**Q.48 Select the most appropriate ANTONYM of the given word.**

**Effective**

- Ans  1. Deniable  
 2. Harmonious  
 3. Fruitless  
 4. Courteous

Question ID : 264330164711  
Option 1 ID : 264330646001  
Option 2 ID : 264330645999  
Option 3 ID : 264330646000  
Option 4 ID : 264330646002  
Status : Answered  
Chosen Option : 1

**Comprehension:**

Read the given passage and answer the question that follows.

We started our research into organisational and personal excellence by studying a slightly different topic. We figured that if we could learn why certain people were more effective than others, then we could learn exactly what they did, clone it and pass it on to others. We asked people to identify who they thought were their most effective colleagues. In fact, over the past twenty-five years, we have asked over twenty thousand people to identify the individuals in their organisations who could really get things done. We wanted to find those who were not just influential but who were far more influential than the rest.

**SubQuestion No : 49**

**Q.49 Select the most appropriate title to the given passage.**

- Ans  1. Research Grants in Organisations  
 2. Learn, Clone and Pass  
 3. Most Effective Colleagues  
 4. Different Topics

Question ID : 264330164707  
Option 1 ID : 264330645985  
Option 2 ID : 264330645984  
Option 3 ID : 264330645983  
Option 4 ID : 264330645986  
Status : Answered  
Chosen Option : 3

**Comprehension:**

Read the given passage and answer the question that follows.

We started our research into organisational and personal excellence by studying a slightly different topic. We figured that if we could learn why certain people were more effective than others, then we could learn exactly what they did, clone it and pass it on to others. We asked people to identify who they thought were their most effective colleagues. In fact, over the past twenty-five years, we have asked over twenty thousand people to identify the individuals in their organisations who could really get things done. We wanted to find those who were not just influential but who were far more influential than the rest.

**SubQuestion No : 50**

**Q.50** Select the statement that most appropriately sums up the passage given.

- Ans
- 1. Some people cannot be identified due to their most effective ways in 25 years.
  - 2. Research grants in an organisation should be increased for personal excellence.
  - 3. It takes 25 years of research to make people more effective and influential.
  - 4. Some people are more effective and more influential than others to get things done.

Question ID : 264330164708

Option 1 ID : 264330645988

Option 2 ID : 264330645987

Option 3 ID : 264330645990

Option 4 ID : 264330645989

Status : Answered

Chosen Option : 4