

SI in CAPFs, ASI in CISF and SI in Delhi Police Examination-2019 (Paper-I)

Roll Number	
Candidate Name	
Exam Venue	Sigma Online Test Services
Exam Date	11/12/2019
Exam Time	2:00 PM - 4:00 PM
Subject	SI CPO Examination 2019

Section : General Intelligence and Reasoning

Q.1 In a certain code language, pink is called wood, wood is called Pen, Pen is called colour and colour is called brown. In this language, which of the following is used for writing?

- Ans
- 1. Pink
 - 2. Brown
 - 3. Pen
 - 4. Colour

Question ID : 685582317
 Status : Answered
 Chosen Option : 4

Q.2 Select the option that is related to the third number in the same way as the second number is related to the first number.

428 : 717 :: 236 : ?

- Ans
- 1. 713
 - 2. 349
 - 3. 339
 - 4. 249

Question ID : 685582326
 Status : Answered
 Chosen Option : 1

Q.3 Select the option that is related to the third term in the same way as the second term is related to the first term.

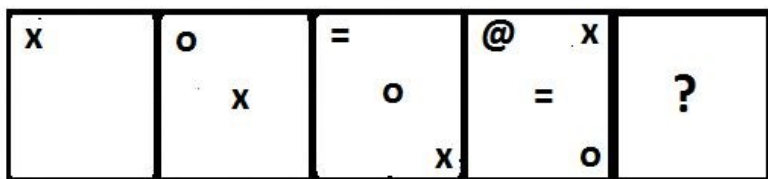
Field : Farmer :: Observatory : ?

- Ans
- 1. Telescope
 - 2. Astronomer
 - 3. Astronaut
 - 4. Stars

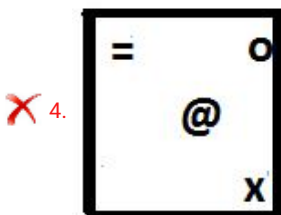
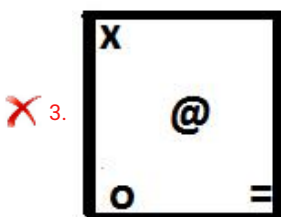
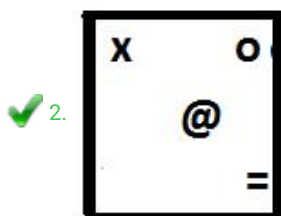
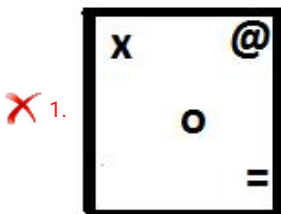
Question ID : 685582312
 Status : Answered
 Chosen Option : 2

Q.4

Select the figure that can replace the question mark (?) in the following series.



Ans



Question ID : 685582340

Status : Answered

Chosen Option : 2

Q.5 Read the given statements and conclusions carefully. Assuming that the information given in the statements is true, even if it appears to be at variance with commonly known facts, decide which of the given conclusions logically follow(s) from the statements.

Statements:

1. Some dancers are singers.
2. No singer is an actor.

Conclusions:

- I. Some actors are singers.
- II. All singers are dancers.

Ans

✓ 1. Neither conclusion I nor II follows

✗ 2. Only conclusion I follows

✗ 3. Either conclusion I or II follows

✗ 4. Only conclusion II follows

Question ID : 685582322
Status : Answered
Chosen Option : 1

Q.6 In a certain code language, GOURD is written as 21-4-5-10-24. How will BRINJAL be written in the same code language?

- Ans
- 1. 2-10-3-14-18-1-12
 - 2. 26-10-3-14-18-1-16
 - 3. 26-10-5-14-18-2-16
 - 4. 25-9-3-14-18-1-15

Question ID : 685582320
Status : Answered
Chosen Option : 3

Q.7 Rishabh starts walking towards west. After walking 70 m he turns to left and walks 35 m straight. He turns left again and walks 30 m, again he turns to the left and walks a distance of 35 m. How far is he from the starting point?

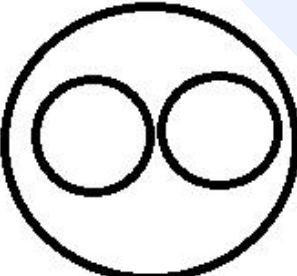

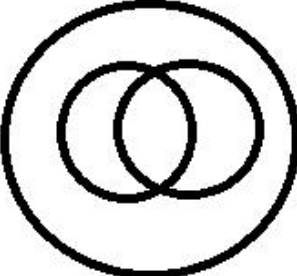
- Ans
- 1. 60m
 - 2. 100m
 - 3. 70m
 - 4. 40m

Question ID : 685582349
Status : Answered
Chosen Option : 4

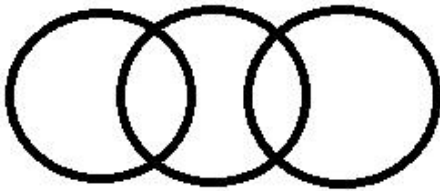
Q.8 Select the Venn diagram that best represents the relationship between the following classes.

Males, Fathers, Accountants

Ans

- 1. 
- 2. 
- 3. 

✗ 4.



Question ID : 685582351
Status : Answered
Chosen Option : 2

Q.9 Select the option that is related to the third term in the same way as the second term is related to the first term.

NEEDLE : MFDEKF :: BUCKET : ?

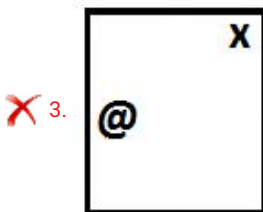
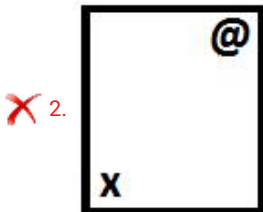
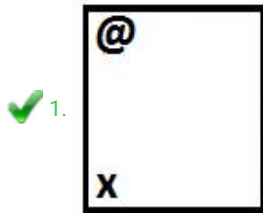
- Ans
- ✗ 1. AVBLDS
 - ✓ 2. AVBLDU
 - ✗ 3. CVDLFS
 - ✗ 4. CVBLDU

Question ID : 685582315
Status : Answered
Chosen Option : 2


Q.10 Select the figure that can replace the question mark (?) in the following series.



Ans



4.



Question ID : 685582338

Status : Answered

Chosen Option : 1

Q.11 Select the correct combination of mathematical signs to replace * signs and to balance the following equation.

$$(9 * 8 * 7) * 13 * 5$$

Ans 1. $\times, =, \div, -$

2. $\times, -, \div, =$

3. $\div, -, =, \times$

4. $-, \div, \times, =$

Question ID : 685582335

Status : Answered

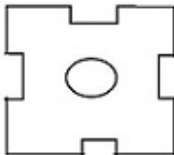
Chosen Option : 2

Q.12 The sequence of folding a piece of paper and the manner in which the folded paper has been cut is shown in the following figures. How would this paper look when unfolded?

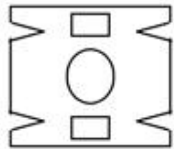


Ans

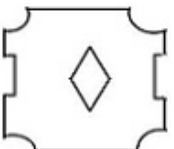
1.



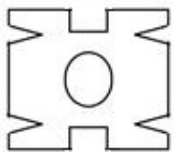
2.



3.



4.



Question ID : 685582347

Status : Answered

Chosen Option : 4

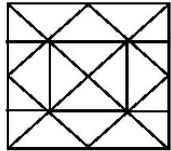
Q.13 Mayank started driving from his office to the hotel. He drove 10 km towards north. From there, he turned right and drove 8 km. Then, he turned right and drove 6 km. Again, he

turned right and drove 5 km and reached his hotel.
What is the shortest distance from the office to his hotel?

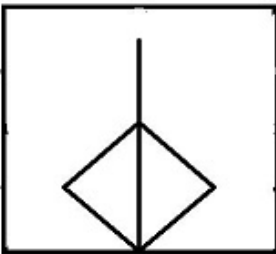
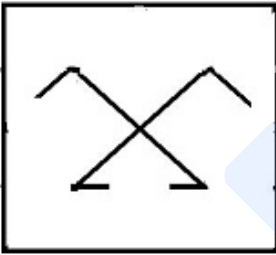
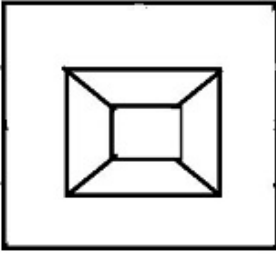
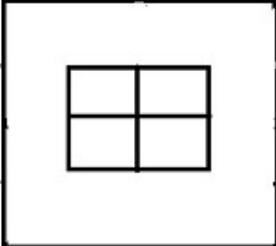
- Ans
- 1. 5 km
 - 2. 9 km
 - 3. 2 km
 - 4. 6 km

Question ID : 685582348
Status : Answered
Chosen Option : 1

Q.14 From the given options, select the figure which is embedded in the following figure (rotation is NOT allowed).



Ans

- 1. 
- 2. 
- 3. 
- 4. 

Question ID : 685582343
Status : Answered
Chosen Option : 2

Q.15 Four words have been given out of which three are alike in some manner, while one is different. Choose the odd one.

- Ans
- 1. Melon
 - 2. Apple
 - 3. Rose
 - 4. Orange

Question ID : 685582310
Status : Answered
Chosen Option : 3

Q.16 Arrange the following words in the order in which they appear in an English dictionary.

1. Piquant
2. Pierce
3. Patent
4. Perjury
5. Pasture

- Ans
- 1. 5, 3, 4, 2, 1
 - 2. 5, 3, 4, 1, 2
 - 3. 3, 4, 5, 1, 2
 - 4. 3, 5, 4, 1, 2

Question ID : 685582305
Status : Answered
Chosen Option : 4

Q.17 Select the number that can replace the question mark (?) in the following series.

105, 107, 103, ?, 101, 111

- Ans
- 1. 102
 - 2. 97
 - 3. 113
 - 4. 109

Question ID : 685582323
Status : Answered
Chosen Option : 4

Q.18 Read the given statement and conclusions carefully and decide which of the conclusions logically follow(s) from the statement.

Statement:

"On October 2, let us pledge to make the country free of single-use plastic."- Prime Minister of India

Conclusions:

- I.All Indians should reduce and then completely eliminate the consumption of single-use plastic like packaged drinking water
- II.India is going to be completely plastic free on October 2

- Ans
- 1. Only conclusion I follows
 - 2. Both conclusions I and II follow
 - 3. Only conclusion II follows
 - 4. Neither conclusion I nor II follows

Question ID : 685582321
Status : Answered

Chosen Option : 1

Q.19 'Needle' is related to 'Sew' in the same way as 'Microscope' is related to '_____':

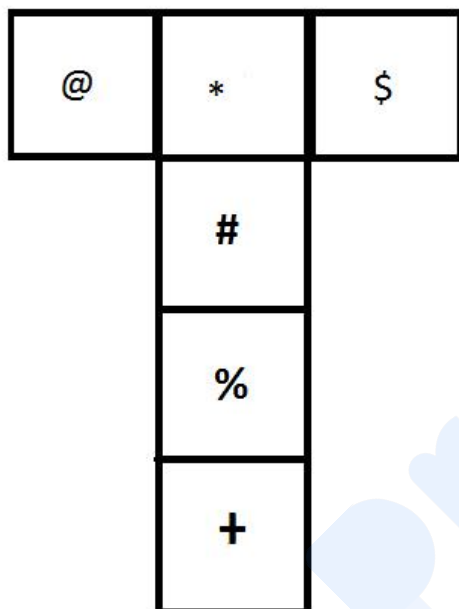
- Ans
- 1. Lens
 - 2. Laboratory
 - 3. Magnify
 - 4. Science

Question ID : 685582311

Status : Answered

Chosen Option : 3

Q.20 If the given figure is folded to form a cube, which sign will come opposite '+'?



- Ans
- 1. \$
 - 2. @
 - 3. %
 - 4. #

Question ID : 685582342

Status : Answered

Chosen Option : 4

Q.21 Select the option that is related to the fourth term in the same way as the first term is related to the second term.

ULJ : POO :: ? : KRT

- Ans
- 1. PIO
 - 2. FMO
 - 3. FIY
 - 4. PIY

Question ID : 685582316

Status : Answered

Chosen Option : 1

Q.22 Select the letter that can replace the question mark (?) in the following series.

K, I, G, E, C, ?

- Ans 1. A
 2. B
 3. D
 4. Z

Question ID : 685582303

Status : Answered

Chosen Option : 1

Q.23 Which two signs need to be interchanged to make the following equation correct?

$$32 - 8 \div 4 + 5 \times 6 = 30$$

- Ans 1. \times and $+$
 2. \times and \div
 3. \div and $-$
 4. \div and $+$

Question ID : 685582337

Status : Answered

Chosen Option : 3

Q.24 Four groups of numbers have been given, out of which three are alike in some manner and one is different. Select the group that is different.

- Ans 1. 632 : 325 : 236
 2. 561 : 615 : 165
 3. 289 : 829 : 928
 4. 426 : 642 : 246

Question ID : 685582331

Status : Answered

Chosen Option : 1

Q.25 Four number-pairs have been given, out of which three are alike in some manner and one is different. Select the one that is different.

- Ans 1. 48 - 81
 2. 64 - 100
 3. 25 - 36
 4. 16 - 49

Question ID : 685582330

Status : Answered

Chosen Option : 1

Q.26 Select the number that can replace the question mark (?) in the following series.

40, 44, 22, 26, 13, ?

- Ans 1. 16

2. 20

3. 17

4. 22

Question ID : 685582324

Status : Answered

Chosen Option : 3

Q.27 Which of the given options would be a meaningful ascending order of the following words?

1. Star
2. Satellite
3. Galaxy
4. Planet
5. Universe

Ans 1. 5, 1, 3, 2, 4

2. 3, 1, 5, 2, 4

3. 2, 1, 5, 3, 4

4. 5, 3, 1, 4, 2

Question ID : 685582306

Status : Answered

Chosen Option : 3

Q.28 Select the option in which the number set shares the same relationship as that shared by the given number set.

(101, 106, 131)

Ans 1. (29, 34, 39)

2. (123, 128, 153)

3. (170, 202, 137)

4. (419, 424, 437)

Question ID : 685582333

Status : Answered

Chosen Option : 2

Q.29 Study the given pattern carefully and select the number that can replace the question mark (?) in it.

4	18	23
19	330	?
3	6	1

Ans 1. 350

2. 530

3. 529

4. 550

Question ID : 685582334

Status : Answered

Chosen Option : 2

Q.30 Four words have been given out of which three are alike in some manner, while one is different. Choose the odd one.

Ans

- 1. Thesaurus
- 2. Dictionary
- 3. Book
- 4. Encyclopaedia

Question ID : **685582309**
 Status : **Answered**
 Chosen Option : **3**

Q.31 Select the number that can replace the question mark (?) in the following series.

1, 11, 35, 79, ?, 251

- Ans
- 1. 152
 - 2. 149
 - 3. 105
 - 4. 150

Question ID : **685582325**
 Status : **Answered**
 Chosen Option : **2**

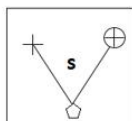
Q.32 Select the letter-cluster that can replace the question mark (?) in the following series.

TXB, QWE, NVH, KUK, ?

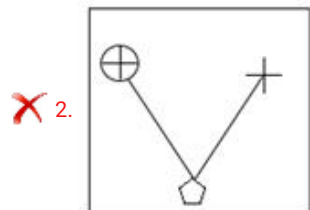
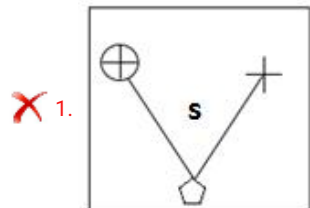
- Ans
- 1. ITM
 - 2. HSN
 - 3. JTM
 - 4. HTN

Question ID : **685582304**
 Status : **Answered**
 Chosen Option : **2**

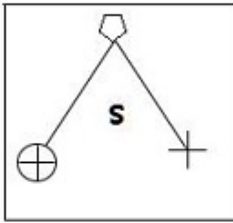
Q.33 Which of the options is the exact mirror image of the given figure when the mirror is held at the right side?



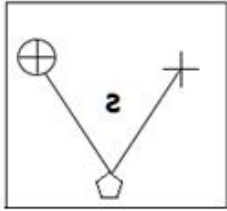
Ans



3.



4.



Question ID : 685582346

Status : Answered

Chosen Option : 4

Q.34 If $W = 46$, $BAT = 46$, then 'LAMB' will be equal to:

1. 54

2. 56

3. 52

4. 28

Question ID : 685582319

Status : Answered

Chosen Option : 2

Q.35 If in a certain code, HORSE is written as GINPQSRTDF, How will JOCKEY be written in that language?

1. KIPNBDJLDFXZ

2. IKNPBDJLDFXZ

3. KINPBDJLDFZX

4. IKNPDBJLFDZX

Question ID : 685582318

Status : Answered

Chosen Option : 2

Q.36 If $+$ means $-$, $-$ means \times , \times means \div , and \div means $+$, then what will be the value of following expression?

$$12 - 3 + 15 \times 5 \div 6 = ?$$

1. 42

2. 33

3. 40

4. 39

Question ID : 685582336

Status : Answered

Chosen Option : 4

Q.37 Four groups of numbers have been given, out of which three are alike in some manner and one is different. Select the group that is different.

- Ans
- 1. 17 : 102 : 204
 - 2. 12 : 72 : 144
 - 3. 14 : 90 : 180
 - 4. 26 : 156 : 312

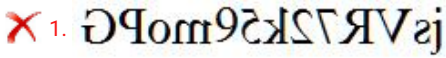
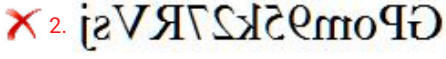
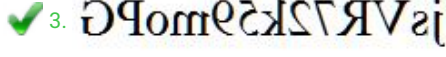
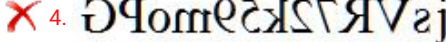
Question ID : 685582332

Status : Answered

Chosen Option : 3

Q.38 Which of the options is the exact mirror image of the given figure when the mirror is held at the right side?

jsVR72k59moPG

- Ans
- 1. 
 - 2. 
 - 3. 
 - 4. 

Question ID : 685582345

Status : Answered

Chosen Option : 3

Q.39 Select the option that is related to the fifth number in the same way as the second number is related to the first number and the fourth number is related to the third number.

19 : 23 :: 11 : 13 :: 7 : ?

- Ans
- 1. 3
 - 2. 5
 - 3. 9
 - 4. 11

Question ID : 685582327

Status : Answered

Chosen Option : 3

Q.40 Select the option in which the numbers share the same relationship as that shared by the given pair of numbers

56 - 63

- Ans
- 1. 154 - 171
 - 2. 104 - 117
 - 3. 134 - 153
 - 4. 28 - 39

Question ID : 685582328

Status : Answered

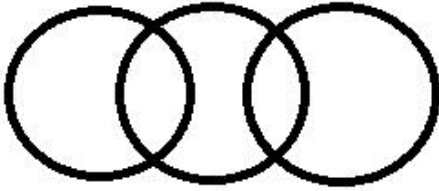
Chosen Option : 2

Q.41 Select the Venn diagram that best represents the relationship between the following classes.

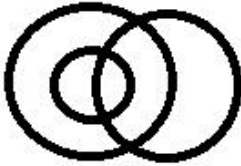
Star, Sun, Polaris

Ans

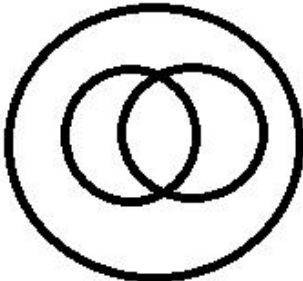
✗ 1.



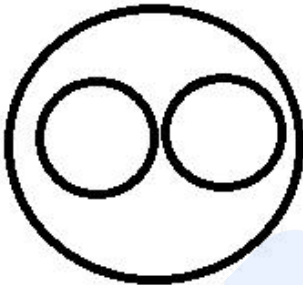
✗ 2.



✗ 3.



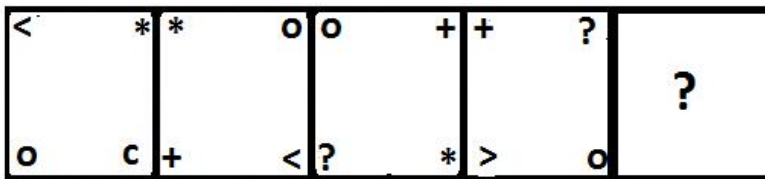
✓ 4.



Prepp
Your Personal Exam Guide


Question ID : 685582350
Status : Answered
Chosen Option : 4

Q.42 Select the figure that can replace the question mark (?) in the following series.




Ans


✗ 1.




✗ 2.



✓ 3.

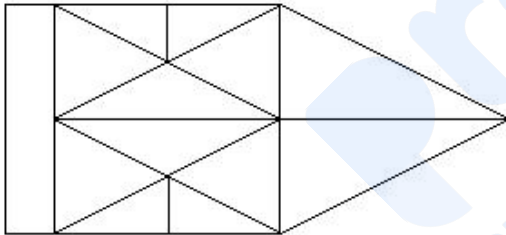


✗ 4.



Question ID : 685582339
Status : Not Answered
Chosen Option : --

Q.43 How many triangles are present in the given figure?

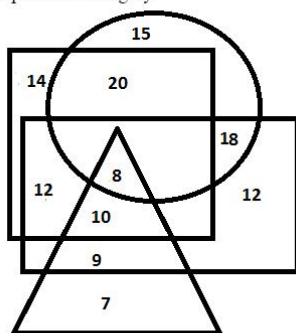


- Ans
- ✗ 1. 17
 - ✗ 2. 26
 - ✗ 3. 28
 - ✓ 4. 27

Question ID : 685582341
Status : Answered
Chosen Option : 1

Q.44

In the given Venn diagram, the triangle represents politicians, the circle represents lawyers, the rectangle represents teachers and the square represents businessmen. The numbers given in the diagram represent the number of persons of that particular category.



How many lawyers are also teachers, but are neither politicians nor businessmen?

- Ans
- 1. 10
 - 2. 7
 - 3. 18
 - 4. 12

Question ID : 685582352
Status : Answered
Chosen Option : 3

Q.45 Select the option in which the words share the same relationship as that shared by the given pair of words.

Players : Team

- Ans
- 1. Class : Students
 - 2. Flowers : Bouquet
 - 3. Grapes : Dozen
 - 4. Band : Musician

Question ID : 685582314
Status : Answered
Chosen Option : 2

Q.46 Select the option in which the words share the same relationship as that shared by the given pair of words.

Touch : Push

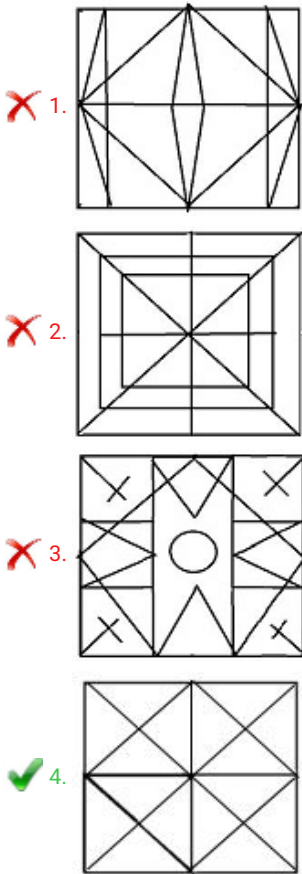
- Ans
- 1. Speak : Shout
 - 2. Refuse : Accept
 - 3. Run : Walk
 - 4. Eat : Drink

Question ID : 685582313
Status : Answered
Chosen Option : 2

Q.47 From the given options, select the figure which is embedded in the following figure (rotation is NOT allowed).



Ans



Question ID : 685582344
Status : Answered
Chosen Option : 4

Q.48 Four numbers have been given out of which three are alike in some manner, while one is different. Choose the odd one.

- Ans
- 1. 18
 - 2. 25
 - 3. 24
 - 4. 33

Question ID : 685582329
Status : Answered
Chosen Option : 2

Q.49 Four pairs of letter-cluster have been given out of which three are alike in some manner, while one is different. Choose the odd one.

- Ans
- 1. GJB - ROW
 - 2. EFR - VUI
 - 3. DFL - USM
 - 4. IKN - PNK

Question ID : 685582308
Status : Answered
Chosen Option : 2

Q.50 Four letter-cluster have been given out of which three are alike in some manner, while one is

different. Choose the odd one.

- Ans 1. NOQST
 2. EGIKM
 3. BDFHJ
 4. QSUWY

Question ID : 685582307
Status : Answered
Chosen Option : 1

Section : General Knowledge and General Awareness

Q.1 Who, before going to the gallows, had expressed his desire for keeping his ashes intact till India is reunited and throwing them into the Indus after the reunification has been achieved?

- Ans 1. Uddham Singh
 2. Nathuram Godse
 3. Surya Sen
 4. Bhagat Singh

Question ID : 685582384
Status : Marked For Review
Chosen Option : 1

Q.2 Which of the following activities is also referred to as 'Gold Collar' profession?

- Ans 1. Secondary
 2. Quaternary
 3. Primary
 4. Quinary

Question ID : 685582377
Status : Not Answered
Chosen Option : --

Q.3 Who holds the record of scoring the fastest goal (in the eleventh second) in a FIFA World Cup match?

- Ans 1. Hakan Sukur
 2. Pele
 3. Cristiano Ronaldo
 4. Kylian Mbappe

Question ID : 685582401
Status : Marked For Review
Chosen Option : 2

Q.4 Which among the following has its latitude within one degree of that New Delhi?

- Ans 1. Amarnath Cave
 2. City of Islamabad
 3. City of Dhaka

✓ 4. Mount Everest

Question ID : 685582379
Status : Marked For Review
Chosen Option : 4

Q.5 Which Indian was awarded the Chiratae Ventures' Patrick J. McGovern Lifetime Achievement Award 2019?

- Ans
- 1. Narayan Murthy
 - 2. Uday Kotak
 - 3. Ratan Tata
 - 4. Shiv Nadar

Question ID : 685582390
Status : Marked For Review
Chosen Option : 3

Q.6 Which of the following films is set in the backdrop of the India-China War of 1962?

- Ans
- 1. Hazaaron Khwaishein Aisi
 - 2. Haqeeqat
 - 3. Roja
 - 4. Aakrosh

Question ID : 685582353
Status : Answered
Chosen Option : 4

Q.7 The temple at Lepakshi famous for its hanging pillars and constructed in Vijayanagara style is also called _____ temple.

- Ans
- 1. Mahalakshmi
 - 2. Veerabhadra
 - 3. Mahakaal
 - 4. Murugan

Question ID : 685582355
Status : Answered
Chosen Option : 1

Q.8 Which among the following political parties was a part of NDA during the 2019 general elections?

- Ans
- 1. AITC
 - 2. LJP
 - 3. DMK
 - 4. RJD

Question ID : 685582394
Status : Answered
Chosen Option : 2

Q.9 As per the India State of Forest Report 2017, which of the following states has the maximum percentage of forest cover in relation to its area?

- Ans
- 1. Maharashtra
 - 2. Odisha
 - 3. Assam
 - 4. Mizoram

Question ID : 685582369
Status : Answered
Chosen Option : 3

Q.10 Which of the following is NOT an official language of the United Nations?

- Ans
- 1. English
 - 2. Arabic
 - 3. Japanese
 - 4. Chinese

Question ID : 685582396
Status : Answered
Chosen Option : 3

Q.11 Rajwada palace (Cultural Heritage Project) is located at:

- Ans
- 1. Jabalpur
 - 2. Mandu
 - 3. Ujjain
 - 4. Indore

Question ID : 685582357
Status : Answered
Chosen Option : 4

Q.12 Which among the following is responsible for the rotation of the plane of oscillation of Foucault's pendulum?

- Ans
- 1. Centripetal force
 - 2. Viscous drag of air
 - 3. Centrifugal force
 - 4. Coriolis force

Question ID : 685582366
Status : Answered
Chosen Option : 1

Q.13 The birth place of Subhash Chandra Bose is:

- Ans
- 1. Cuttack
 - 2. Hazaribagh
 - 3. Patna
 - 4. Kolkata

Question ID : 685582381
Status : Answered
Chosen Option : 4

Q.14 Who used the pseudonym 'Bhanusingha'?

- Ans
- 1. Bankim Chandra Chattopadhyaya
 - 2. Sunil Gangopadhyaya
 - 3. Rabindranath Tagore
 - 4. Michael Madhusudan Dutt

Question ID : 685582387
Status : Answered
Chosen Option : 3

Q.15 Who holds the record of most 150-plus runs in a test match innings as a captain?

- Ans
- 1. Ricky Ponting
 - 2. Wally Hammond
 - 3. Virat Kohli
 - 4. Don Bradman

Question ID : 685582399
Status : Answered
Chosen Option : 1

Q.16 Where was the venue of US Open Tennis Championship before it shifted to the Flushing Meadows?

- Ans
- 1. Forest Hills
 - 2. Plaza District
 - 3. Woodmond Hills
 - 4. Lexington

Question ID : 685582402
Status : Answered
Chosen Option : 1

Q.17 Which one of the following diseases is caused mainly by the deficiency of Vitamin C?

- Ans
- 1. Goitre
 - 2. Rickets
 - 3. Scurvy
 - 4. Kwashiorkor

Question ID : 685582370
Status : Answered
Chosen Option : 3

Q.18 In which year was the World Trade Organization established?

- Ans
- 1. 1952
 - 2. 1942
 - 3. 1947
 - 4. 1995

Question ID : 685582397

Status : **Answered**
Chosen Option : 1

Q.19 Which among the following regarding GST is correct?

- Ans
- 1. GST network was formed under Companies Act
 - 2. The 100th Amendment introduced GST in the country
 - 3. Centre holds 100 per cent stake in GST network
 - 4. GST council is a statutory body

Question ID : **685582362**
Status : **Answered**
Chosen Option : 4

Q.20 Sapphire and ruby are varieties of natural:

- Ans
- 1. aluminium sulphide
 - 2. aluminium hydroxide
 - 3. aluminium carbonate
 - 4. aluminium oxide

Question ID : **685582363**
Status : **Answered**
Chosen Option : 1

Q.21 'Powa Mecca' in Assam is the tomb of ____.

- Ans
- 1. Pir Giasuddin Auliya
 - 2. Shujauddin Mohammed Shah
 - 3. Khwaja Bande Nawaz
 - 4. Sheikh Salim Chisti

Question ID : **685582385**
Status : **Answered**
Chosen Option : 1

Q.22 Which among the following is the confluence of Alaknanda and Mandakini?

- Ans
- 1. Vishnuprayag
 - 2. Nandprayag
 - 3. Rudraprayag
 - 4. Devprayag

Question ID : **685582375**
Status : **Answered**
Chosen Option : 3

Q.23 Hirakud dam is built across the river:

- Ans
- 1. Betwa
 - 2. Mahanadi
 - 3. Krishna
 - 4. Godavari

Question ID : 685582376
Status : Answered
Chosen Option : 2

Q.24 How many times has India won the ICC U-19 World Cup?

- Ans
- 1. Two
 - 2. One
 - 3. Four
 - 4. Three

Question ID : 685582400
Status : Answered
Chosen Option : 4

Q.25 The famous mathematician Srinivasa Ramanujan was born in:

- Ans
- 1. Madras (now Chennai)
 - 2. Kumbakonam
 - 3. Namakkal
 - 4. Erode

Question ID : 685582389
Status : Answered
Chosen Option : 1

Q.26 The famous physician Jeevaka was appointed by the court of:

- Ans
- 1. Krishnadeva Raya
 - 2. Samudragupta
 - 3. Ashoka
 - 4. Bimbisara

Question ID : 685582386
Status : Answered
Chosen Option : 3

Q.27 Jagannath Mishra was the three-time Chief Minister of the state of _____ .

- Ans
- 1. Haryana
 - 2. Uttar Pradesh
 - 3. Odisha
 - 4. Bihar

Question ID : 685582391
Status : Answered
Chosen Option : 2

Q.28 Which among the following combination is present in higher amount in hard water?

- Ans
- 1. Calcium and magnesium
 - 2. Calcium and sodium
 - 3. Sodium and magnesium

4. Sodium and manganese

Question ID : 685582373
Status : Answered
Chosen Option : 1

Q.29 In the context of NITI Aayog, what does 'T' stand for in NITI?

- Ans
- 1. Travelling
 - 2. Training
 - 3. Transforming
 - 4. Transferring

Question ID : 685582359
Status : Answered
Chosen Option : 3

Q.30 During the freedom struggle, who was the only President of Indian National Congress who resigned from the presidency even after being elected?

- Ans
- 1. Subhash Chandra Bose
 - 2. Nellie Sengupta
 - 3. JB Kripalini
 - 4. Jawaharlal Nehru

Question ID : 685582383
Status : Answered
Chosen Option : 3

Q.31 What is the full form of NPCI which is an umbrella organisation for all retail payments system in India?

- Ans
- 1. National Payments Corporation of India
 - 2. Non-cash Payments Corporation of India
 - 3. Non-cash Payments Cooperative Inc.
 - 4. Net Payments Company Inc.

Question ID : 685582358
Status : Answered
Chosen Option : 1

Q.32 What is the maximum amount of loan permissible under Pradhan Mantri MUDRA Yojana?

- Ans
- 1. ₹12 lakhs
 - 2. ₹5 lakhs
 - 3. ₹3 lakhs
 - 4. ₹10 lakhs

Question ID : 685582361
Status : Answered
Chosen Option : 4

Q.33 In which year was the battle of Buxar fought?

- Ans
- 1. 1758

2. 1757

3. 1765

4. 1764

Question ID : 685582382
Status : Answered
Chosen Option : 4

Q.34 Which one of the following states is the largest producer of pulses in India?

Ans 1. Haryana

2. Bihar

3. Madhya Pradesh

4. Uttarakhand

Question ID : 685582360
Status : Answered
Chosen Option : 3

Q.35 The name of which disease among the following means 'evil influence of the stars'?

Ans 1. Cholera

2. Plague

3. Influenza

4. Typhoid

Question ID : 685582367
Status : Answered
Chosen Option : 2

Q.36 Baily's beads can be observed during a/an:

Ans 1. occultation of Jupiter

2. partial solar eclipse

3. lunar eclipse

4. total solar eclipse

Question ID : 685582368
Status : Answered
Chosen Option : 1

Q.37 Where in India is the first indigenously built atomic power plant located?

Ans 1. Trombay

2. Kota

3. Kalpakkam

4. Tarapur

Question ID : 685582371
Status : Answered
Chosen Option : 3

Q.38 Twin paradox is associated with:

- Ans 1. the theory of relativity
 2. particle physics
 3. hydrodynamics
 4. quantum mechanics

Question ID : 685582365
Status : Answered
Chosen Option : 2

Q.39 Which among the following is a copper mineral?

- Ans 1. azurite
 2. bauxite
 3. halite
 4. hematite

Question ID : 685582364
Status : Answered
Chosen Option : 4

Q.40 At the location of which city in Assam, the river Brahmaputra goes south bound breaking away from its westward course and enters into Bangladesh?

- Ans 1. Bongaigaon
 2. Tezpur
 3. Dhubri
 4. Barpeta

Question ID : 685582380
Status : Answered
Chosen Option : 4

Q.41 Gnana Saraswati temple of southern India is located at:

- Ans 1. Basar
 2. Puducherry
 3. Tirunelveli
 4. Thrissur

Question ID : 685582356
Status : Answered
Chosen Option : 4

Q.42 The part of the eye which is responsible for the conversion of image of an object into neural signals is:

- Ans 1. iris
 2. optic nerve
 3. vitreous humour
 4. retina

Question ID : 685582374
Status : Answered

Chosen Option : 2

Q.43 Under which Article of the Constitution of India can the President promulgate an ordinance?

- Ans
- 1. Article 75
 - 2. Article 101
 - 3. Article 123
 - 4. Article 168

Question ID : 685582395

Status : Answered

Chosen Option : 3

Q.44 With reference to the High Courts and their seats, which of the following pairs is correctly matched?

- Ans
- 1. Odisha - Sambalpur
 - 2. Gujarat - Gandhinagar
 - 3. Madhya Pradesh - Gwalior
 - 4. Uttarakhand - Nainital

Question ID : 685582398

Status : Answered

Chosen Option : 1

Q.45 What was the party affiliation of EMS Namboodiripad?

- Ans
- 1. Kerala Congress
 - 2. SUCI
 - 3. CPI
 - 4. CPI(M)

Question ID : 685582393

Status : Answered

Chosen Option : 1

Q.46 Who is the author of 'Swami Vivekananda in the West: New Discoveries'?

- Ans
- 1. Marie Louise Burke
 - 2. Romain Rolland
 - 3. Sister Nivedita
 - 4. Swami Ranganathananda

Question ID : 685582388

Status : Answered

Chosen Option : 3

Q.47 Under which Five Year Plan, the steel plants of Rourkela, Bhilai and Durgapur were established?

- Ans
- 1. Fourth
 - 2. Seventh
 - 3. Third
 - 4. Second

Question ID : 685582378

Status : Answered

Chosen Option : 3

Q.48 Who is the first woman to have been awarded the Yudh Seva Medal?

- Ans
- 1. Bhawana Kanth
 - 2. Shaliza Dhani
 - 3. Minty Agarwal
 - 4. Aparna Kumar

Question ID : 685582392

Status : Answered

Chosen Option : 4

Q.49 In February 2019, India signed a letter of intent with _____ to fight marine pollution.

- Ans
- 1. Denmark
 - 2. Bhutan
 - 3. Norway
 - 4. Cambodia

Question ID : 685582372

Status : Answered

Chosen Option : 1

Q.50 Who among the following received the Sahitya Akademi Award in 1968?

- Ans
- 1. Kaifi Azmi
 - 2. Buddhadeb Basu
 - 3. Harivansh Rai Bachchan
 - 4. Amrita Pritam

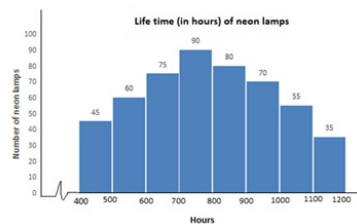
Question ID : 685582354

Status : Answered

Chosen Option : 3

Section : Quantitative Aptitude

Q.1 Study the bar graph and answer the question.



The number of neon lamps having a life of 600 hours or more but less than 800 hours is what percentage of the total number of neon lamps having a life of 800 hours or more?

- Ans
- 1. 66.67
 - 2. 67.50
 - 3. 69.25

✓ 4. 68.75

Question ID : 685582296

Status : Answered

Chosen Option : 4

Q.2 As observed from the top of a lighthouse, 45 m high above the sea-level, the angle of depression of a ship, sailing directly towards it, changes from 30° to 45° . The distance travelled by the ship during the period of observation is: (Your answer should be correct to one decimal place.)

- Ans**
- ✓ 1. 32.9 m
 - ✗ 2. 33.4 m
 - ✗ 3. 36.9 m
 - ✗ 4. 24.8 m

Question ID : 685582293

Status : Answered

Chosen Option : 1

Q.3 A 22 m long ladder (whose foot is on the ground) leans against a wall making an angle of 60° with the wall. What is the height (in m) of the point where the ladder touches the wall from the ground?

- Ans**
- ✗ 1. $\frac{22\sqrt{2}}{3}$
 - ✗ 2. $11\sqrt{2}$
 - ✓ 3. 11
 - ✗ 4. $11\sqrt{3}$

Question ID : 685582292

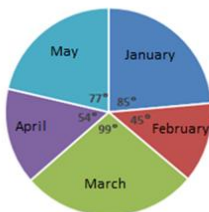
Status : Marked For Review

Chosen Option : 1

Q.4 Study the pie chart and answer the question.

Distribution (degree wise) of the number of computers sold by a shopkeeper during five months

Total Number of Computers Sold = 5400



If the difference between the number of computers sold in March and the number of computers sold in January is x , then x lies between:

- Ans**
- ✓ 1. 200 and 250
 - ✗ 2. 300 and 350
 - ✗ 3. 250 and 300
 - ✗ 4. 150 and 200

Question ID : 685582297

Status : Not Answered

Chosen Option : --

Q.5 Study the pie chart and answer the question:

Distribution (degree wise) of the number of computers sold by a shopkeeper during five months.

Total Number of Computers Sold = 5400



The number of months, in which the number of computers sold was above 20% of the total number of computers sold in 5 months, was:

- Ans**
- 1. 3
 - 2. 4
 - 3. 1
 - 4. 2

Question ID : 685582299

Status : Answered

Chosen Option : 1

Q.6 A can do $\frac{2}{3}$ of a work in 12 days while B can do $66\frac{2}{3}\%$ of the same work in 16 days. They work together for 10 days. B alone will complete the remaining work in:

- Ans**
- 1. 6 days
 - 2. 4 days
 - 3. 8 days
 - 4. 9 days

Question ID : 685582272

Status : Not Attempted and Marked For Review

Chosen Option : --

Q.7 The compound interest amounts on a certain sum at a certain rate percentage p.a. for the second year and third year are

₹3,300 and ₹3,630, respectively. What is the amount of the same sum at the same rate in $2\frac{1}{2}$ years, interest compounded yearly?

- Ans**
- 1. ₹37,215
 - 2. ₹36,300
 - 3. ₹38,115
 - 4. ₹36,000

Question ID : 685582271

Status : Answered

Chosen Option : 3

Q.8 A solid metallic sphere of radius 6.3 cm is melted and recast into a right circular cone of height 25.2 cm. What is the ratio of the diameter of the base to the height of the cone?

- Ans**
- 1. 2 : 1
 - 2. 3 : 2

✓ 3. 1 : 2

✗ 4. 2 : 3

Question ID : 685582282

Status : **Not Attempted and Marked For Review**

Chosen Option : --

Q.9 The sides of ΔABC are 10 cm, 10.5 cm and 14.5 cm. What is the radius of its circumcircle?

Ans ✗ 1. 5 cm

✗ 2. 7.5 cm

✗ 3. 5.25 cm

✓ 4. 7.25 cm

Question ID : 685582289

Status : **Answered**

Chosen Option : 4

Q.10 If $\sqrt{x} + \frac{1}{\sqrt{x}} = 3$, $x > 0$, then $x^2 (x^2 - 47) = ?$

Ans ✗ 1. 0

✗ 2. 2

✗ 3. -2

✓ 4. -1

Question ID : 685582283

Status : **Answered**

Chosen Option : 3

Q.11 In finding the HCF of two numbers by division method, the quotients are 1, 8 and 2 respectively, and the last divisor is 105. What is the sum of the numbers?

Ans ✗ 1. 3570

✗ 2. 3885

✓ 3. 3780

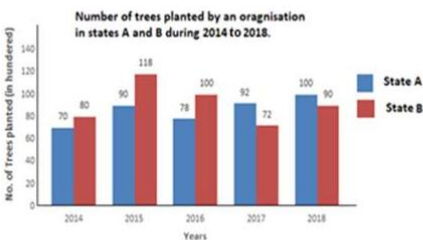
✗ 4. 3675

Question ID : 685582255

Status : **Not Answered**

Chosen Option : --

Q.12 Study the bar graph and answer the question.



In how many years was the number of trees planted in state B more than the average number of trees planted in state A over the years?

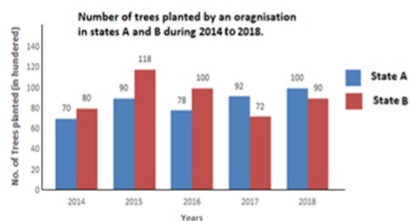
- Ans
- 1. 1
 - 2. 3
 - 3. 4
 - 4. 2

Question ID : 685582300

Status : Answered

Chosen Option : 1

Q.13 Study the bar graph and answer the question.



Percentage decrease in the number of trees planted in 2016 in state A as compared to that in 2015 in the same state was:

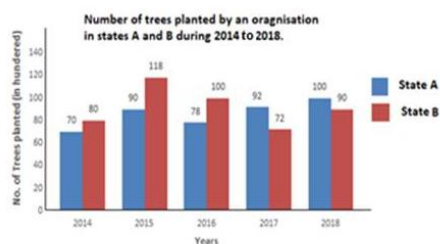
- Ans
- 1. $15\frac{5}{13}$
 - 2. $15\frac{2}{3}$
 - 3. $13\frac{1}{3}$
 - 4. $13\frac{2}{3}$

Question ID : 685582302

Status : Answered

Chosen Option : 3

Q.14 Study the bar graph and answer the question.



The total number of trees planted in state B in 2015 and 2017 was what percentage less than the total number of trees planted in state A in 2014, 2016 and 2017? (Your answer should be correct to one decimal place.)

- Ans
- 1. 19.8
 - 2. 21.4
 - 3. 20.8
 - 4. 20.1

Question ID : 685582301

Status : Answered

Chosen Option : 3

Q.15 In a school, 60% of the number of students are boys and the rest are girls. If 20% of the number of boys failed and 65% of the number of girls passed the examination, then the percentage of the total number of students who passed is:

- Ans
- 1. 68
 - 2. 72
 - 3. 74
 - 4. 78

Question ID : 685582265
 Status : Answered
 Chosen Option : 3

Q.16 The sides of a triangular park are 35 m, 53 m and 66 m. The cost of levelling the park at the rate of ₹9.25/m² is:

- Ans
- 1. ₹8,584
 - 2. ₹8,547
 - 3. ₹8,621
 - 4. ₹8,510

Question ID : 685582278
 Status : Not Attempted and Marked For Review
 Chosen Option : --

Q.17 A person invested a sum of ₹10,500 at $x\%$ per annum at simple interest and a sum of ₹13,500 at $(x + 2)\%$ p.a. at simple interest. If the total interest earned on both the investments for 3 years is ₹7,650, then the rate of interest on the first investment is:

- Ans
- 1. 8%
 - 2. 8.5%
 - 3. 9%
 - 4. 9.5%

Question ID : 685582270
 Status : Answered
 Chosen Option : 3

Q.18 A invests ₹6,00,000 more than B in a business. B invests his capital for $7\frac{1}{2}$ months, while A invests his capital for $2\frac{1}{2}$ more months than B. Out of the total profit of ₹12,40,000, if the share of B is ₹2,48,000 less than the share of A, then the capital of B is:

- Ans
- 1. ₹45,00,000
 - 2. ₹42,00,000
 - 3. ₹40,00,000
 - 4. ₹48,00,000

Question ID : 685582269
 Status : Not Answered
 Chosen Option : --

Q.19 Let x be the least number divisible by 16, 24, 30, 36 and 45, and x is also a perfect square. What is the remainder when x is divided by 123?

- Ans
- 1. 100

- ~~2.~~ 40
~~3.~~ 103
 ✓ 4. 33

Question ID : 685582256
 Status : **Marked For Review**
 Chosen Option : 3

Q.20 The ratio of radius of the base and the height of a solid right circular cylinder is 2 : 3. If its volume is 202.125 cm^3 , then its total surface area is:

(Take $\pi = \frac{22}{7}$)

- Ans** ✓ 1. 192.5 cm^2
~~2.~~ 154 cm^2
~~3.~~ 168 cm^2
~~4.~~ 115.5 cm^2

Question ID : 685582280
 Status : **Answered**
 Chosen Option : 1

Q.21 If x and y are real numbers, then the least possible value of $4(x-2)^2 + (y-3)^2 - 2(x-3)^2$ is:

- Ans** ~~1.~~ 3
 ✓ 2. -4
~~3.~~ 1
~~4.~~ -8

Question ID : 685582284
 Status : **Answered**
 Chosen Option : 2

Q.22 The distance between two places A and B is 14 km. A boat travels from A to B downstream and then returns from B to A upstream and takes a total of 3 hours 44 minutes for the entire journey. If the speed of the current is 2 km/h, then what is the speed of the boat, in km/h, in still water?

- Ans** ✓ 1. 8
~~2.~~ 7
~~3.~~ $7\frac{1}{2}$
~~4.~~ $6\frac{1}{2}$

Question ID : 685582277
 Status : **Answered**
 Chosen Option : 1

Q.23 Two circles of radii 5 cm and 3 cm intersect each other at A and B, and the distance between their centres is 6 cm. The length (in cm) of the common chord AB is:

- Ans** ~~1.~~ $\frac{4\sqrt{13}}{3}$

2. $\frac{2\sqrt{14}}{3}$

3. $\frac{2\sqrt{13}}{3}$

4. $\frac{4\sqrt{14}}{3}$

Question ID : 685582287

Status : Not Answered

Chosen Option : --

Q.24 The value of $9 \times [(9 - 4) \div \{(8 \div 8 \text{ of } 4) + (4 \div 4 \text{ of } 2)\}]$ is:

Ans 1. 20

2. 60

3. $\frac{15}{4}$

4. $\frac{15}{2}$

Question ID : 685582257

Status : Answered

Chosen Option : 2

Q.25 Pipes A and B together can fill an empty tank in $6\frac{2}{3}$ minutes. If A takes 3 minutes more than B to fill the tank, then the time (in minutes) in which A alone would fill one-third part of the tank is:

Ans 1. 6

2. 5

3. 5.5

4. 4.5

Question ID : 685582275

Status : Answered

Chosen Option : 2

Q.26 If $7 \sin^2 \theta + 3 \cos^2 \theta = 4$, $0^\circ < \theta < 90^\circ$, then the value of $(\tan^2 2\theta + \operatorname{cosec}^2 2\theta)$ is:

Ans 1. 7

2. $\frac{15}{4}$

3. $\frac{13}{3}$

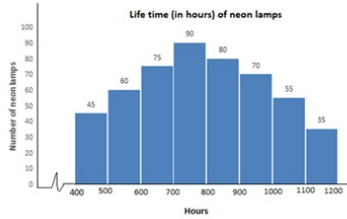
4. $\frac{13}{4}$

Question ID : 685582290

Status : Answered

Chosen Option : 3

Q.27 Study the bar graph and answer the question.



The ratio of the number of neon lamps having a life of 900 hours or more to the number of lamps having life less than 700 hours is:

- Ans
- 1. 25 : 21
 - 2. 8 : 9
 - 3. 6 : 7
 - 4. 7 : 8

Question ID : 685582295

Status : Answered

Chosen Option : 2

Q.28 The value of $\frac{4.669 \times 4.669 - 9 \times (0.777)^2}{(4.669)^2 + (2.331)^2 + 14 (0.667)(2.331)}$ is $(1 - k)$, where $k = ?$

- Ans
- 1. 0.666
 - 2. 0.647
 - 3. 0.467
 - 4. 0.768

Question ID : 685582259

Status : Not Attempted and Marked For Review

Chosen Option : --

Q.29 A person sold a chair at a profit of 13%. Had he sold it for ₹607.50 more, he would have gained $x\%$. If the cost price of the chair is ₹3750, then the value of x is:

- Ans
- 1. 30
 - 2. 32
 - 3. 28.4
 - 4. 29.2

Question ID : 685582267

Status : Answered

Chosen Option : 2

Q.30 The average weight of the boys in a class is 69.3 kg and that of the girls in the same class is 59.4 kg. If the average weight of all the boys and girls in the class is 63.8 kg, then the percentage of the number of boys in the class is:

- Ans
- 1. $55\frac{5}{9}$
 - 2. 40
 - 3. 45
 - 4. $44\frac{4}{9}$

Question ID : 685582261
 Status : Answered
 Chosen Option : 4

Q.31 If $21 \tan \theta = 20$, then $(1 + \sin \theta + \cos \theta) : (1 - \sin \theta + \cos \theta) = ?$

- Ans
- 1. 5 : 2
 - 2. 3 : 1
 - 3. 7 : 3
 - 4. 2 : 1

Question ID : 685582291
 Status : Not Attempted and
 Marked For Review
 Chosen Option : --

Q.32 If A is 48% more than B and C is 60% less than the sum of A and B, then A is what percentage more than C?
 (Correct to one decimal place.)

- Ans
- 1. 50.8
 - 2. 49.2
 - 3. 50.2
 - 4. 49.8

Question ID : 685582266
 Status : Answered
 Chosen Option : 3

Q.33 A field is in the form of a circle. The cost of fencing around it at ₹12 per metre is ₹2,640. What is the area (in m^2) of the field?

(Take $\pi = \frac{22}{7}$)

- Ans
- 1. 1925 m^2
 - 2. 3850 m^2
 - 3. 2772 m^2
 - 4. 5544 m^2

Question ID : 685582279
 Status : Answered
 Chosen Option : 2

Q.34 The sides AB, BC and AC of a ΔABC are 12 cm, 8 cm and 10 cm respectively. A circle is inscribed in the triangle touching AB, BC and AC at D, E and F, respectively. The difference between the lengths of AD and CE is:

- Ans
- 1. 4 cm
 - 2. 5 cm
 - 3. 3 cm
 - 4. 2 cm

Question ID : 685582286
 Status : Not Answered
 Chosen Option : --

Q.35

The value of $\frac{\frac{1}{3} + [4\frac{3}{4} - (3\frac{1}{6} - 2\frac{1}{3})]}{(\frac{1}{5} \text{ of } \frac{1}{5} \div \frac{1}{5}) \div (\frac{1}{5} \div \frac{1}{5} \times \frac{1}{5})}$ lies between:

- Ans
- 1. 10.2 and 10.8
 - 2. 4.2 and 4.4
 - 3. 8.2 and 8.8
 - 4. 0.4 and 0.9

Question ID : 685582258

Status : Answered

Chosen Option : 4

Q.36

The value of $\sqrt{11 + 2\sqrt{18}}$ is closest to:

- Ans
- 1. 4.8
 - 2. 4.4
 - 3. 3.8
 - 4. 4.1

Question ID : 685582253

Status : Answered

Chosen Option : 1

Q.37 Working 7 hours a day, 18 persons can complete a certain work in 32 days. In how many days would 14 persons complete the same work, working 8 hours a day?

- Ans
- 1. 42
 - 2. 30
 - 3. 35
 - 4. 36

Question ID : 685582273

Status : Answered

Chosen Option : 4

Q.38 The curved surface area of a right circular cone is 156π and the radius of its base is 12 cm. What is the volume of the cone, in cm^3 ?

- Ans
- 1. 192π
 - 2. 210π
 - 3. 240π
 - 4. 180π

Question ID : 685582281

Status : Answered

Chosen Option : 3

Q.39 If $x = 5.51, y = 5.52$ and $z = 5.57$, then what is the value of $x^3 + y^3 + z^3 - 3xyz$?

- Ans
- 1. 5.146
 - 2. 51.46

✓ 3. 0.05146

✗ 4. 0.5146

Question ID : 685582285
 Status : Answered
 Chosen Option : 4

Q.40 A trader buys an article at 80% of its marked price and sells it at 10% discount on its marked price. His percentage profit is:

Ans

✗ 1. $10\frac{1}{2}$

✗ 2. 10

✓ 3. $12\frac{1}{2}$

✗ 4. 15

Question ID : 685582263
 Status : Answered
 Chosen Option : 3

Q.41 The average of n observations is 40. If one observation of value 80 is added, then the average of all the observations is 41. What is the value of n?

Ans

✗ 1. 40

✓ 2. 39

✗ 3. 38

✗ 4. 43

Question ID : 685582260
 Status : Answered
 Chosen Option : 2

Q.42 Pipes A and B can fill a tank in 36 hours and 48 hours, respectively. Both pipes are opened together for 9 hours and then A is closed. Pipe B alone will fill the remaining part of the tank now in:

Ans

✗ 1. $20\frac{1}{2}$ hours

✗ 2. 25 hours

✓ 3. 27 hours

✗ 4. 24 hours

Question ID : 685582274
 Status : Not Attempted and Marked For Review
 Chosen Option : --

Q.43 The total numbers of males and females in a town is 70,000. If the number of males is increased by 6% and that of the females is increased by 4%, then the total numbers of males and females in the town would become 73520. What is the difference between the number of males and females in the town, in the beginning?

Ans

✗ 1. 1500

✗ 2. 1800

✓ 3. 2000

✗ 4. 1400

Question ID : 685582264
 Status : Answered
 Chosen Option : 1

Q.44 When a certain number is divided by 65, the remainder is 56. When the same number is divided by 13, the remainder is x . What is the value of $\sqrt{5x-2}$?

- Ans
- 1. $2\sqrt{7}$
 - 2. $\sqrt{13}$
 - 3. $2\sqrt{2}$
 - 4. $3\sqrt{2}$

Question ID : 685582254
 Status : Answered
 Chosen Option : 2

Q.45 In $\triangle ABC$, $\angle A = 90^\circ$, $AB = 16$ cm and $AC = 12$ cm. D is the midpoint of AC and $DE \perp CB$ at E. What is the area (in cm^2) of $\triangle CDE$?

- Ans
- 1. 8.64
 - 2. 7.68
 - 3. 5.76
 - 4. 6.25

Question ID : 685582288
 Status : Answered
 Chosen Option : 4

Q.46 A sum (in ₹) is distributed between A, B and C in the ratio 9 : 6 : 11. If A gives ₹500 from his share to C, the ratio of shares of A, B and C becomes 4 : 3 : 6. What is the sum of shares (in ₹) of B and C, in the beginning?

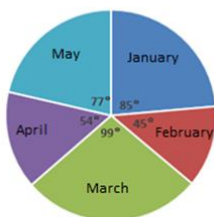
- Ans
- 1. ₹8,500
 - 2. ₹9,100
 - 3. ₹7,800
 - 4. ₹7,500

Question ID : 685582268
 Status : Answered
 Chosen Option : 1

Q.47 Study the pie chart and answer the question.

Distribution (degree wise) of the number of computers sold by a shopkeeper during five months.

Total Number of Computers Sold = 5400



The total number of computers sold in February and April is what percentage more than the number of computers sold in May? (Your answer should be correct to one decimal place.)

- Ans 1. 25.8
 2. 28.6
 3. 30.2
 4. 26.4

Question ID : 685582298

Status : Answered

Chosen Option : 2

Q.48 A person takes 40 minutes more than his usual time when he covers a distance of 20 km at 5 km/h. If he covers the same distance at 8 km/h, he takes x minutes less than the usual time. What is the value of x ?

- Ans 1. 48
 2. 54
 3. 45
 4. 50

Question ID : 685582276

Status : Not Answered

Chosen Option : --

Q.49 An article is marked at 100% above its cost price. After allowing two successive discounts of 5% and 20% respectively on the marked price, it is sold at $x\%$ profit. What is the value of x ?

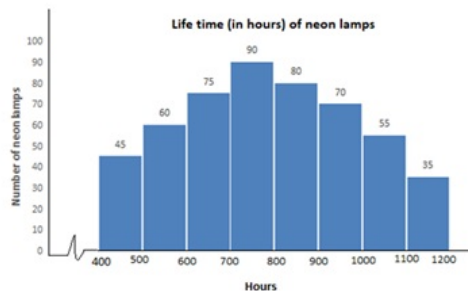
- Ans 1. 48
 2. 75
 3. 72
 4. 52

Question ID : 685582262

Status : Answered

Chosen Option : 4

Q.50 Study the bar graph and answer the question.



The number of neon lamps having a life of 500 hours or more but less than 800 hours is:

- Ans 1. 180
 2. 305
 3. 270
 4. 225

Question ID : 685582294

Status : Answered

Section : English Comprehension

Q.1 Select the most appropriate option to substitute the underlined segment. If no substitution is required select 'No substitution'

Even if he is a honest man, he has been accused of theft.

- Ans 1. Although he is an honest man
 2. No substitution
 3. Even though he is a honest man
 4. Since he are an honest man

Question ID : 685582408

Status : Answered

Chosen Option : 1

Q.2 Select the most appropriate antonym of the given word.

PERTURB

- Ans 1. Fluster
 2. Soothe
 3. Confound
 4. Commend

Question ID : 685582431

Status : Answered

Chosen Option : 2

Comprehension:

Read the given passage and answer the questions that follow.

The beaver had made a dam about hundred yards long, and it had formed out of the quickly flowing stream, a wide stretch of water about twelve feet deep. The dam was so firm and broad that it was easy for me to walk along it. After a hundred and fifty yards I came to a 'beaver's castle'- a great heap of logs skilfully fitted together, the lower part covered with earth and plants. The upper logs were put loosely together so that the air could pass through to the interior.

In the late autumn, before land and water are covered with snow and ice, the beaver has to make its dwelling frostproof. It collects young trees and gnaws the stems in a double cone until the tree falls. Then the long stems are gnawed into small sections, the thin twigs bitten off and the logs are dragged to the dwelling. There, the timber is piled on the castle, sometimes to a height of ten or twelve feet. Mud is brought up from the bottom of the lake and packed between the logs with the animal's clever forepaws. The interior is lined with the finest wood shavings. In this tall shelter, the beaver remains high and dry, and protected from frost throughout the winter.

The only access to the dwelling is under the water, and even the forest wolves are not able to pull the firm building apart. The water is the beaver's element. On land it moves slowly and awkwardly. Thus, it is vital for the beaver to have water in which it can swim, and where nature has not provided this condition for it, it creates it with its dam.

The beaver's activities can change whole landscapes. With this dam, for instance, on which I was standing, beavers had turned a whole wooded alley into a lake; trees that stood there had been killed by the water and had disappeared. Aquatic game had settled there. Ducks swam past us, and great must have been the number of fish, as swarms of trout had swum past me in the clear stream. Wide stretches of meadow had come into existence on the banks, with flat landing places to which the well-beaten beaver tracks led. Many years of building, gnawing and dragging must have gone into the completion of this immense task, creating a new region for the beaver to live in.

SubQuestion No : 3

Q.3 What evidence in the passage suggests that beavers build strong dwellings?

- Ans 1. The beaver's dwelling is frostproof.

- 2. It takes many years of hard work to build the dwelling.
- 3. Even the forest wolves cannot pull the dwelling apart.
- 4. The interior is lined with finest wood shavings.

Question ID : 685582451

Status : Answered

Chosen Option : 2

Comprehension:

Read the given passage and answer the questions that follow.

The beaver had made a dam about hundred yards long, and it had formed out of the quickly flowing stream, a wide stretch of water about twelve feet deep. The dam was so firm and broad that it was easy for me to walk along it. After a hundred and fifty yards I came to a 'beaver's castle'- a great heap of logs skilfully fitted together, the lower part covered with earth and plants. The upper logs were put loosely together so that the air could pass through to the interior.

In the late autumn, before land and water are covered with snow and ice, the beaver has to make its dwelling frostproof. It collects young trees and gnaws the stems in a double cone until the tree falls. Then the long stems are gnawed into small sections, the thin twigs bitten off and the logs are dragged to the dwelling. There, the timber is piled on the castle, sometimes to a height of ten or twelve feet. Mud is brought up from the bottom of the lake and packed between the logs with the animal's clever forepaws. The interior is lined with the finest wood shavings. In this tall shelter, the beaver remains high and dry, and protected from frost throughout the winter.

The only access to the dwelling is under the water, and even the forest wolves are not able to pull the firm building apart. The water is the beaver's element. On land it moves slowly and awkwardly. Thus, it is vital for the beaver to have water in which it can swim, and where nature has not provided this condition for it, it creates it with its dam.

The beaver's activities can change whole landscapes. With this dam, for instance, on which I was standing, beavers had turned a whole wooded alley into a lake; trees that stood there had been killed by the water and had disappeared. Aquatic game had settled there. Ducks swam past us, and great must have been the number of fish, as swarms of trout had swum past me in the clear stream. Wide stretches of meadow had come into existence on the banks, with flat landing places to which the well-beaten beaver tracks led. Many years of building, gnawing and dragging must have gone into the completion of this immense task, creating a new region for the beaver to live in.

SubQuestion No : 4

Q.4 The beavers can change the landscape by:

- Ans**
- 1. building castles with great heaps of logs.
 - 2. dragging the logs of wood to the dwelling.
 - 3. building dams that can convert a wooded alley into a lake.
 - 4. swimming in the water along with ducks and trouts.

Question ID : 685582453

Status : Answered

Chosen Option : 3

Comprehension:

Read the given passage and answer the questions that follow.

The beaver had made a dam about hundred yards long, and it had formed out of the quickly flowing stream, a wide stretch of water about twelve feet deep. The dam was so firm and broad that it was easy for me to walk along it. After a hundred and fifty yards I came to a 'beaver's castle'- a great heap of logs skilfully fitted together, the lower part covered with earth and plants. The upper logs were put loosely together so that the air could pass through to the interior.

In the late autumn, before land and water are covered with snow and ice, the beaver has to make its dwelling frostproof. It collects young trees and gnaws the stems in a double cone until the tree falls. Then the long stems are gnawed into small sections, the thin twigs bitten off and the logs are dragged to the dwelling. There, the timber is piled on the castle, sometimes to a height of ten or twelve feet. Mud is brought up from the bottom of the lake and packed between the logs with the animal's clever forepaws. The interior is lined with the finest wood shavings. In this tall shelter, the beaver remains high and dry, and protected from

frost throughout the winter.

The only access to the dwelling is under the water, and even the forest wolves are not able to pull the firm building apart. The water is the beaver's element. On land it moves slowly and awkwardly. Thus, it is vital for the beaver to have water in which it can swim, and where nature has not provided this condition for it, it creates it with its dam.

The beaver's activities can change whole landscapes. With this dam, for instance, on which I was standing, beavers had turned a whole wooded alley into a lake; trees that stood there had been killed by the water and had disappeared. Aquatic game had settled there. Ducks swam past us, and great must have been the number of fish, as swarms of trout had swum past me in the clear stream. Wide stretches of meadow had come into existence on the banks, with flat landing places to which the well-beaten beaver tracks led. Many years of building, gnawing and dragging must have gone into the completion of this immense task, creating a new region for the beaver to live in.

SubQuestion No : 5

Q.5 Which line in the passage most strongly indicates that weavers simply love being in or near water?

- Ans 1. The water is the beaver's element.
2. The dam was so firm and broad that it was easy to walk along.
3. The beaver had made a dam out of the quickly flowing stream.
4. The only access to the dwelling is under the water.

Question ID : 685582452

Status : Answered

Chosen Option : 4

Comprehension:

Read the given passage and answer the questions that follow.

The beaver had made a dam about hundred yards long, and it had formed out of the quickly flowing stream, a wide stretch of water about twelve feet deep. The dam was so firm and broad that it was easy for me to walk along it. After a hundred and fifty yards I came to a 'beaver's castle'- a great heap of logs skilfully fitted together, the lower part covered with earth and plants. The upper logs were put loosely together so that the air could pass through to the interior.

In the late autumn, before land and water are covered with snow and ice, the beaver has to make its dwelling frostproof. It collects young trees and gnaws the stems in a double cone until the tree falls. Then the long stems are gnawed into small sections, the thin twigs bitten off and the logs are dragged to the dwelling. There, the timber is piled on the castle, sometimes to a height of ten or twelve feet. Mud is brought up from the bottom of the lake and packed between the logs with the animal's clever forepaws. The interior is lined with the finest wood shavings. In this tall shelter, the beaver remains high and dry, and protected from frost throughout the winter.

The only access to the dwelling is under the water, and even the forest wolves are not able to pull the firm building apart. The water is the beaver's element. On land it moves slowly and awkwardly. Thus, it is vital for the beaver to have water in which it can swim, and where nature has not provided this condition for it, it creates it with its dam.

The beaver's activities can change whole landscapes. With this dam, for instance, on which I was standing, beavers had turned a whole wooded alley into a lake; trees that stood there had been killed by the water and had disappeared. Aquatic game had settled there. Ducks swam past us, and great must have been the number of fish, as swarms of trout had swum past me in the clear stream. Wide stretches of meadow had come into existence on the banks, with flat landing places to which the well-beaten beaver tracks led. Many years of building, gnawing and dragging must have gone into the completion of this immense task, creating a new region for the beaver to live in.

SubQuestion No : 6

Q.6 Which of the following statements is NOT true?

- Ans 1. The beaver has to make its dwelling frostproof before it starts snowing.
2. The beaver can move quickly and easily on land and in water.
3. The access to the beaver's dwelling is under the water.
4. Wide stretches of meadows may come into existence on the banks of streams.

Question ID : 685582454

Status : Answered

Comprehension:

Read the given passage and answer the questions that follow.

The beaver had made a dam about hundred yards long, and it had formed out of the quickly flowing stream, a wide stretch of water about twelve feet deep. The dam was so firm and broad that it was easy for me to walk along it. After a hundred and fifty yards I came to a 'beaver's castle'- a great heap of logs skilfully fitted together, the lower part covered with earth and plants. The upper logs were put loosely together so that the air could pass through to the interior.

In the late autumn, before land and water are covered with snow and ice, the beaver has to make its dwelling frostproof. It collects young trees and gnaws the stems in a double cone until the tree falls. Then the long stems are gnawed into small sections, the thin twigs bitten off and the logs are dragged to the dwelling. There, the timber is piled on the castle, sometimes to a height of ten or twelve feet. Mud is brought up from the bottom of the lake and packed between the logs with the animal's clever forepaws. The interior is lined with the finest wood shavings. In this tall shelter, the beaver remains high and dry, and protected from frost throughout the winter.

The only access to the dwelling is under the water, and even the forest wolves are not able to pull the firm building apart. The water is the beaver's element. On land it moves slowly and awkwardly. Thus, it is vital for the beaver to have water in which it can swim, and where nature has not provided this condition for it, it creates it with its dam.

The beaver's activities can change whole landscapes. With this dam, for instance, on which I was standing, beavers had turned a whole wooded alley into a lake; trees that stood there had been killed by the water and had disappeared. Aquatic game had settled there. Ducks swam past us, and great must have been the number of fish, as swarms of trout had swum past me in the clear stream. Wide stretches of meadow had come into existence on the banks, with flat landing places to which the well-beaten beaver tracks led. Many years of building, gnawing and dragging must have gone into the completion of this immense task, creating a new region for the beaver to live in.

SubQuestion No : 7

Q.7 How does a beaver ensure that its castle is well ventilated?

- Ans
- 1. The upper logs are loosely placed.
 - 2. The timber is piled upto ten feet high on the castle.
 - 3. The long stems are gnawed into small sections.
 - 4. The logs are covered with earth and plants.

Question ID : 685582450

Status : Answered

Chosen Option : 1

Q.8 Select the most appropriate option to fill in the blank.

Keep away from bad company _____ you should regret later.

- Ans
- 1. whether
 - 2. unless
 - 3. although
 - 4. lest

Question ID : 685582417

Status : Answered

Chosen Option : 4

Q.9 Select the most appropriate antonym of the given word.

IMPEDE

- Ans
- 1. Expedite
 - 2. Thwart
 - 3. Retard

4. Hamper

Question ID : 685582430
Status : Answered
Chosen Option : 1

Q.10 Identify the segment that contains a grammatical error. If there is no error, select 'No error'

Need you to buy so many books?

- Ans
- 1. so many books
 - 2. Need you
 - 3. to buy
 - 4. No error

Question ID : 685582405
Status : Answered
Chosen Option : 2

Q.11 Select the most appropriate meaning of the underlined idiom in the given sentence.

Unless you are above board in your dealings, you will not be able to win the trust of your clients.

- Ans
- 1. bold and reckless
 - 2. exceptionally talented
 - 3. smart and deceptive
 - 4. honest and frank

Question ID : 685582435
Status : Answered
Chosen Option : 4

Q.12 Identify the segment that contains a grammatical error. If there is no error, select 'No error'

If he wants to recover, he must abstain for alcohol.

- Ans
- 1. No error
 - 2. wants to recover
 - 3. he must
 - 4. abstain for alcohol

Question ID : 685582406
Status : Answered
Chosen Option : 4

Q.13 Select the option which is the most appropriate one word substitution for the given group of words.

A detailed plan for a journey especially a list of places to visit

- Ans
- 1. directory
 - 2. itinerary
 - 3. trajectory
 - 4. inventory

Question ID : 685582442
Status : Answered
Chosen Option : 2

Q.14 Select the wrongly spelt word.

- Ans
- 1. Sacrelegious
 - 2. Manoeuvre
 - 3. Millennium
 - 4. Connoisseur

Question ID : 685582448
Status : Answered
Chosen Option : 1

Q.15 Select the option which is the most appropriate one word substitution for the given group of words.

One who denies oneself ordinary bodily pleasures

- Ans
- 1. aesthetic
 - 2. theist
 - 3. atheist
 - 4. ascetic

Question ID : 685582439
Status : Answered
Chosen Option : 4

Q.16 Select the most appropriate meaning of the underlined idiom in the given sentence.

He is completely at sea about where to invest his hard-earned money.

- Ans
- 1. in shock
 - 2. committed
 - 3. sure
 - 4. confused

Question ID : 685582436
Status : Answered
Chosen Option : 4

Q.17 Select the most appropriate synonym of the given word.

FLOURISH

- Ans
- 1. Languish
 - 2. Wither
 - 3. Shriveled
 - 4. Thrive

Question ID : 685582425
Status : Answered
Chosen Option : 4

Q.18 Select the most appropriate option to fill in the blank.

Due to shortage of time, I was unable _____ the task satisfactorily.

- Ans
- 1. for completing
 - 2. from complete
 - 3. to complete
 - 4. in completing

Question ID : 685582413
Status : Answered
Chosen Option : 3

Q.19 Select the most appropriate meaning of the underlined idiom in the given sentence.

The thieves made off with all the cash and jewellery in the house.

- Ans
- 1. squandered
 - 2. ran away with
 - 3. transferred
 - 4. discovered

Question ID : 685582434
Status : Answered
Chosen Option : 2

Q.20 Select the most appropriate option to fill in the blank.

I who _____ your friend and wellwisher, should have been informed about your decision.

- Ans
- 1. be
 - 2. am
 - 3. is
 - 4. are

Question ID : 685582416
Status : Answered
Chosen Option : 3

Q.21 Identify the segment that contains a grammatical error. If there is no error, select 'No error'

Either of the two supervisors were supposed to be present at the site.

- Ans
- 1. present at the site
 - 2. the two supervisors
 - 3. No error
 - 4. were supposed to be

Question ID : 685582407
Status : Answered
Chosen Option : 4

Q.22 Select the most appropriate synonym of the given word.

PERPETUATE

- Ans
- 1. Cease
 - 2. Preserve

3. Prevent

4. Release

Question ID : 685582427
Status : Answered
Chosen Option : 2

Q.23 Select the wrongly spelt word.

Ans 1. Eliminate

2. Gluton

3. Allergy

4. Reliant

Question ID : 685582446
Status : Answered
Chosen Option : 2

Q.24 Select the most appropriate antonym of the given word.

REPUGNANT

Ans 1. Odious

2. Pleasant

3. Austere

4. Sombre

Question ID : 685582433
Status : Answered
Chosen Option : 2

Q.25 Select the most appropriate option to fill in the blank.

Hitler believed that the Nordic Aryan race was superior _____ all other races.

Ans 1. than

2. to

3. in

4. from

Question ID : 685582414
Status : Answered
Chosen Option : 2

Q.26 Select the option which is the most appropriate one word substitution for the given group of words.

A protected place for birds and animals

Ans 1. island

2. bunker

3. estuary

4. sanctuary

Question ID : 685582440

Status : **Answered**
Chosen Option : 4**Q.27** Select the most appropriate option to fill in the blank.

You are well prepared to handle the responsibilities bestowed _____ you.

- Ans
- 1. at
 - 2. for
 - 3. to
 - 4. upon

Question ID : **685582415**
Status : **Answered**
Chosen Option : 4**Q.28** Select the most appropriate synonym of the given word.**DISCERN**

- Ans
- 1. Neglect
 - 2. Disregard
 - 3. Daunt
 - 4. Perceive

Question ID : **685582424**
Status : **Answered**
Chosen Option : 2**Q.29** Identify the segment that contains a grammatical error. If there is no error, select 'No error'

We will have to walk now since we had missed the bus.

- Ans
- 1. since we had
 - 2. We will have to
 - 3. walk now
 - 4. No error

Question ID : **685582404**
Status : **Answered**
Chosen Option : 1**Q.30** Select the option which is the most appropriate one word substitution for the given group of words.

A shortened form of a word or phrase

- Ans
- 1. pseudonym
 - 2. abbreviation
 - 3. precis
 - 4. summary

Question ID : **685582441**
Status : **Answered**
Chosen Option : 2

Q.31 Select the most appropriate meaning of the underlined idiom in the given sentence.

The abrogation of article 370 was achieved in the teeth of tough resistance.

- Ans
- 1. in a state of uncertainty
 - 2. in collaboration with
 - 3. in a short span of time
 - 4. in direct opposition to

Question ID : 685582438
Status : Answered
Chosen Option : 4

Q.32 Select the wrongly spelt word.

- Ans
- 1. Treasury
 - 2. Burglery
 - 3. Nursery
 - 4. Aviary

Question ID : 685582445
Status : Answered
Chosen Option : 2

Q.33 Select the most appropriate antonym of the given word.

DUBIOUS

- Ans
- 1. Likely
 - 2. Dusky
 - 3. Shady
 - 4. Fishy

Question ID : 685582432
Status : Answered
Chosen Option : 1

Q.34 Select the most appropriate meaning of the underlined idiom in the given sentence.

As the flood waters hit the coastal village, several families had a close shave.

- Ans
- 1. nothing to eat
 - 2. a narrow escape
 - 3. to have no livelihood
 - 4. to lose all possessions

Question ID : 685582437
Status : Answered
Chosen Option : 2

Q.35 Select the option which is the most appropriate one word substitution for the given group of words.

One who devotes one's life to the welfare of other people.

- Ans
- 1. martyr
 - 2. altruist

- 3. alchemist
- 4. ambassador

Question ID : 685582443
Status : Answered
Chosen Option : 2

Q.36 Select the most appropriate synonym of the given word.

INIMICAL

- Ans
- 1. Deliberate
 - 2. Comparable
 - 3. Influential
 - 4. Hostile

Question ID : 685582428
Status : Answered
Chosen Option : 2

Q.37 Select the most appropriate option to substitute the underlined segment. If no substitution is required select 'No substitution'

She availed of the big discounts at the sale.

- Ans
- 1. No substitution
 - 2. She availed for a
 - 3. She availed on the
 - 4. She availed herself of the

Question ID : 685582412
Status : Answered
Chosen Option : 1

Q.38 Identify the segment that contains a grammatical error. If there is no error, select 'No error'

These facts should not have been disclosed for the public.

- Ans
- 1. No error
 - 2. not have been disclosed
 - 3. for the public
 - 4. These facts should

Question ID : 685582403
Status : Answered
Chosen Option : 3

Q.39 Select the most appropriate option to substitute the underlined segment. If no substitution is required select 'No substitution'

If I would have a degree from the university, I would get a good job.

- Ans
- 1. When I will have a degree
 - 2. If I am having the degree
 - 3. No substitution
 - 4. If I had a degree

Question ID : 685582409

Status : Answered

Chosen Option : 1

Comprehension:

Read the given passage and fill in the blanks with the most appropriate options.

The refugees coming by boat to Italy have already set a record this year. The surge (1)_____ partly from the civil war in Syria, which has forced 3 million people to (2)_____ their homeland. Europe, peaceful, affluent and comparatively close- is a preferred (3)_____. It's where the desperate meets the developed. Often with the aid (4)_____ reckless human traffickers, refugees attempt to cross the waters in rubber dinghies that can (5)_____, plunging the occupants into the sea.

SubQuestion No : 40

Q.40 Select the most appropriate option to fill in blank No.1

- Ans
- 1. has resulted
 - 2. have resulted
 - 3. is resulted
 - 4. is resulting

Question ID : 685582419

Status : Answered

Chosen Option : 4

Comprehension:

Read the given passage and fill in the blanks with the most appropriate options.

The refugees coming by boat to Italy have already set a record this year. The surge (1)_____ partly from the civil war in Syria, which has forced 3 million people to (2)_____ their homeland. Europe, peaceful, affluent and comparatively close- is a preferred (3)_____. It's where the desperate meets the developed. Often with the aid (4)_____ reckless human traffickers, refugees attempt to cross the waters in rubber dinghies that can (5)_____, plunging the occupants into the sea.

SubQuestion No : 41

Q.41 Select the most appropriate option to fill in blank No.2

- Ans
- 1. fly
 - 2. flee
 - 3. fleet
 - 4. fled

Question ID : 685582420

Status : Answered

Chosen Option : 2

Comprehension:

Read the given passage and fill in the blanks with the most appropriate options.

The refugees coming by boat to Italy have already set a record this year. The surge (1)_____ partly from the civil war in Syria, which has forced 3 million people to (2)_____ their homeland. Europe, peaceful, affluent and comparatively close- is a preferred (3)_____. It's where the desperate meets the developed. Often with the aid (4)_____ reckless human traffickers, refugees attempt to cross the waters in rubber dinghies that can (5)_____, plunging the occupants into the sea.

SubQuestion No : 42

Q.42 Select the most appropriate option to fill in blank No.3

- Ans
- 1. purpose

2. destination

3. objective

4. target

Question ID : 685582421

Status : Answered

Chosen Option : 2

Comprehension:

Read the given passage and fill in the blanks with the most appropriate options.

The refugees coming by boat to Italy have already set a record this year. The surge (1)_____ partly from the civil war in Syria, which has forced 3 million people to (2)_____ their homeland. Europe, peaceful, affluent and comparatively close- is a preferred (3)_____. It's where the desperate meets the developed. Often with the aid (4)_____ reckless human traffickers, refugees attempt to cross the waters in rubber dinghies that can (5)_____, plunging the occupants into the sea.

SubQuestion No : 43

Q.43 Select the most appropriate option to fill in blank No.4

Ans 1. by

2. for

3. of

4. on

Question ID : 685582422

Status : Answered

Chosen Option : 3

Comprehension:

Read the given passage and fill in the blanks with the most appropriate options.

The refugees coming by boat to Italy have already set a record this year. The surge (1)_____ partly from the civil war in Syria, which has forced 3 million people to (2)_____ their homeland. Europe, peaceful, affluent and comparatively close- is a preferred (3)_____. It's where the desperate meets the developed. Often with the aid (4)_____ reckless human traffickers, refugees attempt to cross the waters in rubber dinghies that can (5)_____, plunging the occupants into the sea.

SubQuestion No : 44

Q.44 Select the most appropriate option to fill in blank No.5

Ans 1. renege

2. inverse

3. convert

4. capsized

Question ID : 685582423

Status : Answered

Chosen Option : 4

Q.45 Select the wrongly spelt word.

Ans 1. Omission

2. Aversion

3. Aviation

4. Evasion

Question ID : 685582447
Status : Answered
Chosen Option : 2

Q.46 Select the most appropriate synonym of the given word.

VENERABLE

- Ans
- 1. Reliable
 - 2. Valuable
 - 3. Esteemed
 - 4. Redeemed

Question ID : 685582426
Status : Answered
Chosen Option : 1

Q.47 Select the most appropriate antonym of the given word.

DEMEAN

- Ans
- 1. Debase
 - 2. Belittle
 - 3. Admire
 - 4. Ignore

Question ID : 685582429
Status : Answered
Chosen Option : 3

Q.48 Select the most appropriate option to substitute the underlined segment. If no substitution is required select 'No substitution'

Neither the directors nor the Chairman were available to interrogation.

- Ans
- 1. were available for
 - 2. were available by
 - 3. was available for
 - 4. No substitution

Question ID : 685582411
Status : Answered
Chosen Option : 3

Q.49 Select the wrongly spelt word.

- Ans
- 1. Article
 - 2. Audibal
 - 3. Precious
 - 4. Conceal

Question ID : 685582444
Status : Answered
Chosen Option : 2

Q.50 Select the most appropriate option to substitute the underlined segment. If no substitution is required select 'No substitution'

He had barely spoken the words when he realised his mistake.

- Ans
- 1. barely speak the words that
 - 2. No substitution
 - 3. barely spoken the words than
 - 4. barely spoke the words when

Question ID : 685582410

Status : Answered

Chosen Option : 4